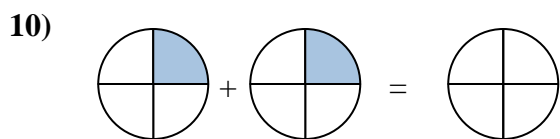
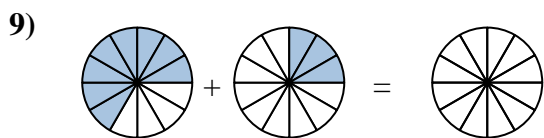
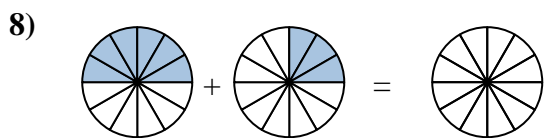
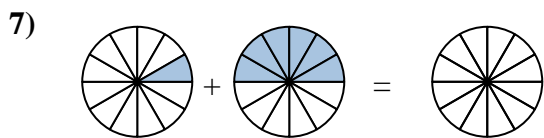
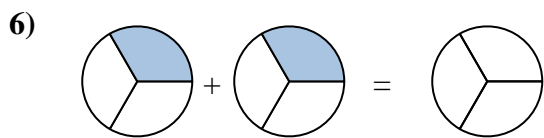
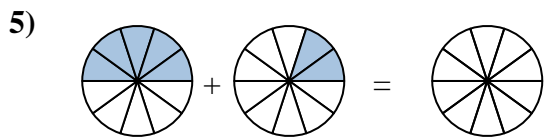
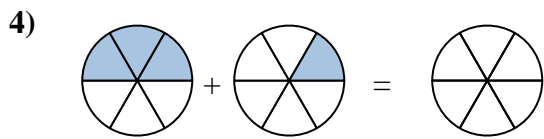
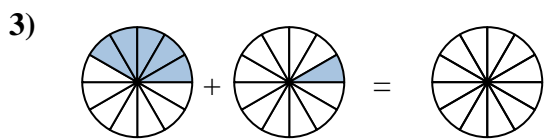
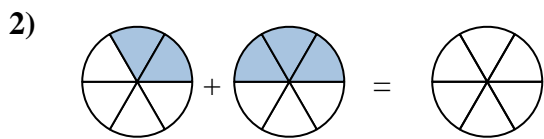
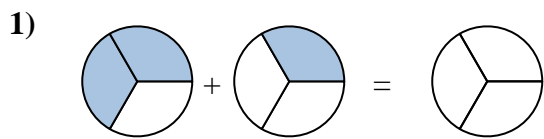
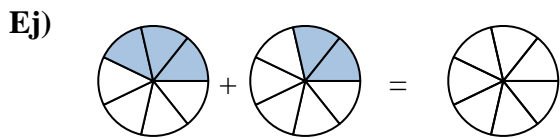




Sombrea la fracción para resolver el problema.



**Respuestas**

Ej.  $\frac{3}{7}$   $\frac{2}{7}$   $\frac{5}{7}$

1. \_\_\_\_\_

2. \_\_\_\_\_

3. \_\_\_\_\_

4. \_\_\_\_\_

5. \_\_\_\_\_

6. \_\_\_\_\_

7. \_\_\_\_\_

8. \_\_\_\_\_

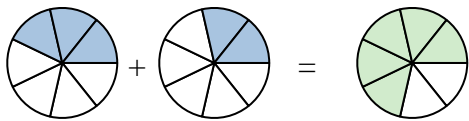
9. \_\_\_\_\_

10. \_\_\_\_\_

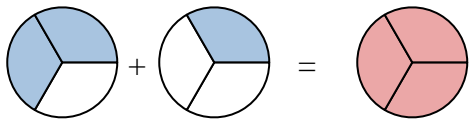


Sombrea la fracción para resolver el problema.

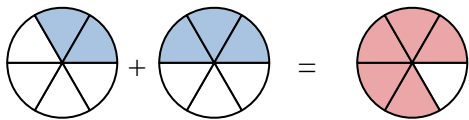
Ej)



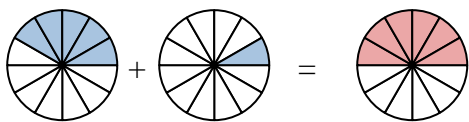
1)



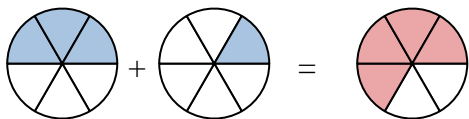
2)



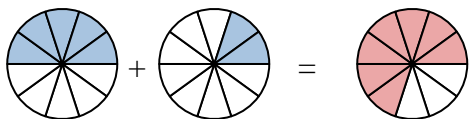
3)



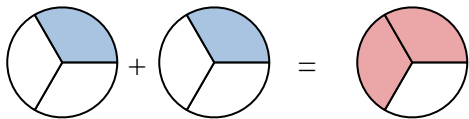
4)



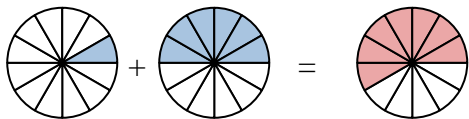
5)



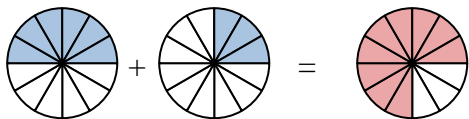
6)



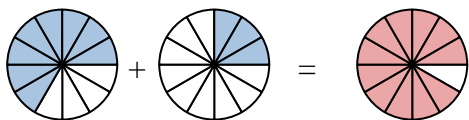
7)



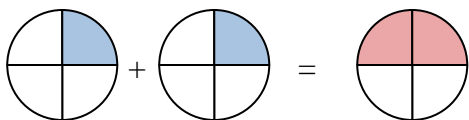
8)



9)



10)

**Respuestas**

Ej.	$\frac{3}{7}$	$\frac{2}{7}$	$\frac{5}{7}$
1.	$\frac{2}{3}$	$\frac{1}{3}$	$\frac{3}{3}$
2.	$\frac{2}{6}$	$\frac{3}{6}$	$\frac{5}{6}$
3.	$\frac{5}{12}$	$\frac{1}{12}$	$\frac{6}{12}$
4.	$\frac{3}{6}$	$\frac{1}{6}$	$\frac{4}{6}$
5.	$\frac{5}{10}$	$\frac{2}{10}$	$\frac{7}{10}$
6.	$\frac{1}{3}$	$\frac{1}{3}$	$\frac{2}{3}$
7.	$\frac{1}{12}$	$\frac{6}{12}$	$\frac{7}{12}$
8.	$\frac{6}{12}$	$\frac{3}{12}$	$\frac{9}{12}$
9.	$\frac{8}{12}$	$\frac{3}{12}$	$\frac{11}{12}$
10.	$\frac{1}{4}$	$\frac{1}{4}$	$\frac{2}{4}$