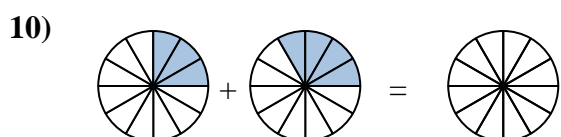
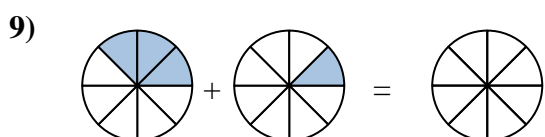
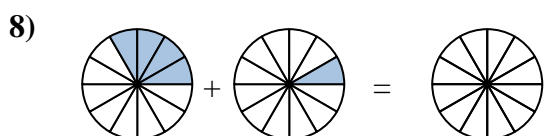
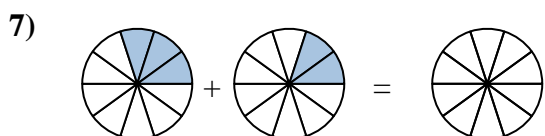
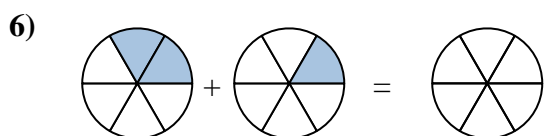
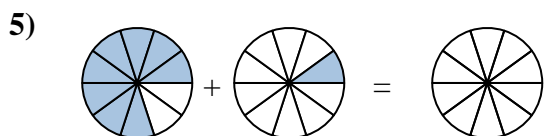
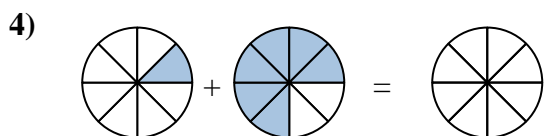
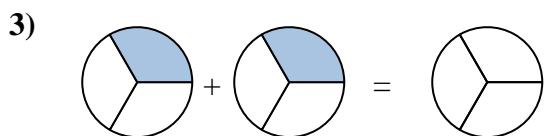
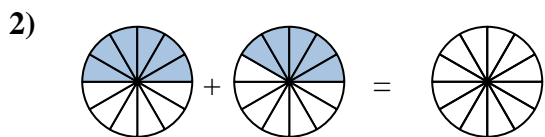
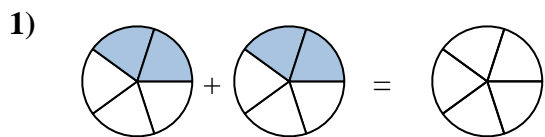
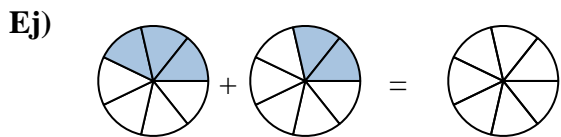




Sombrea la fracción para resolver el problema.



**Respuestas**

Ej.  $\frac{3}{7}$      $\frac{2}{7}$      $\frac{5}{7}$

1. \_\_\_\_\_

2. \_\_\_\_\_

3. \_\_\_\_\_

4. \_\_\_\_\_

5. \_\_\_\_\_

6. \_\_\_\_\_

7. \_\_\_\_\_

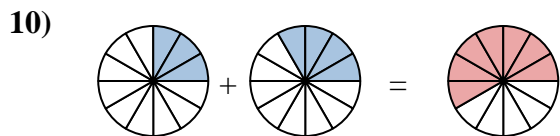
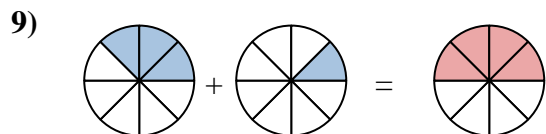
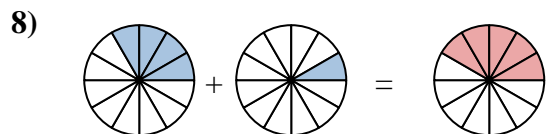
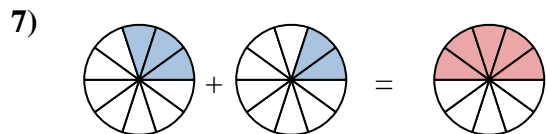
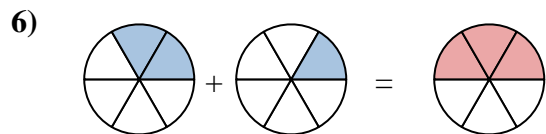
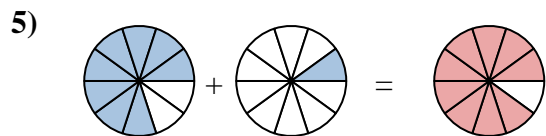
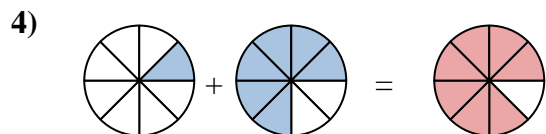
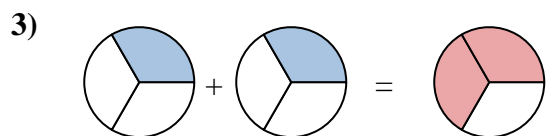
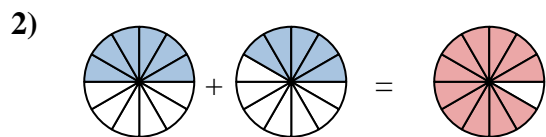
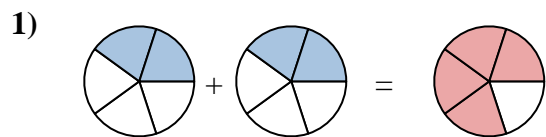
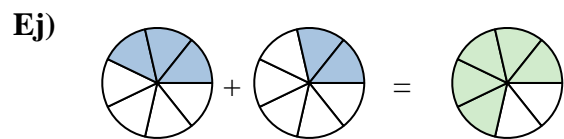
8. \_\_\_\_\_

9. \_\_\_\_\_

10. \_\_\_\_\_



Sombrea la fracción para resolver el problema.

**Respuestas**

Ej.  $\frac{3}{7}$     $\frac{2}{7}$     $\frac{5}{7}$

1.  $\frac{2}{5}$     $\frac{2}{5}$     $\frac{4}{5}$

2.  $\frac{6}{12}$     $\frac{5}{12}$     $\frac{11}{12}$

3.  $\frac{1}{3}$     $\frac{1}{3}$     $\frac{2}{3}$

4.  $\frac{1}{8}$     $\frac{6}{8}$     $\frac{7}{8}$

5.  $\frac{8}{10}$     $\frac{1}{10}$     $\frac{9}{10}$

6.  $\frac{2}{6}$     $\frac{1}{6}$     $\frac{3}{6}$

7.  $\frac{3}{10}$     $\frac{2}{10}$     $\frac{5}{10}$

8.  $\frac{4}{12}$     $\frac{1}{12}$     $\frac{5}{12}$

9.  $\frac{3}{8}$     $\frac{1}{8}$     $\frac{4}{8}$

10.  $\frac{3}{12}$     $\frac{4}{12}$     $\frac{7}{12}$