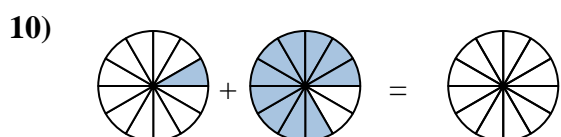
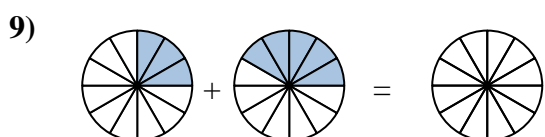
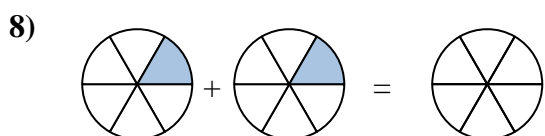
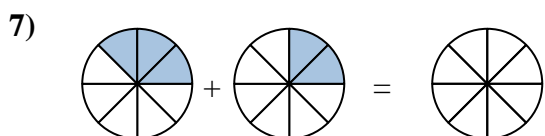
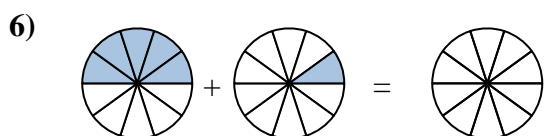
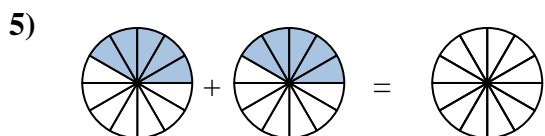
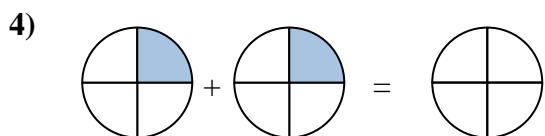
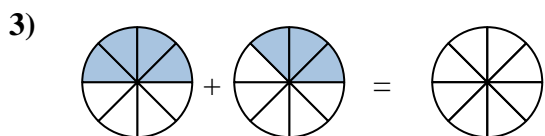
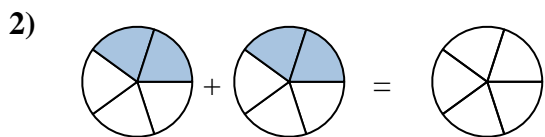
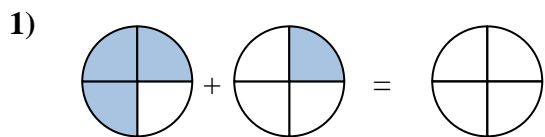
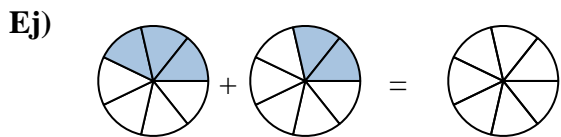




Sombrea la fracción para resolver el problema.

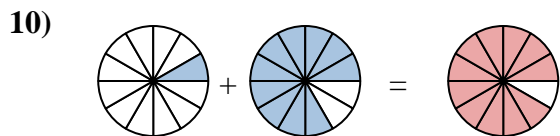
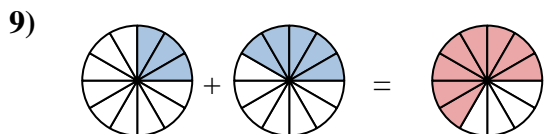
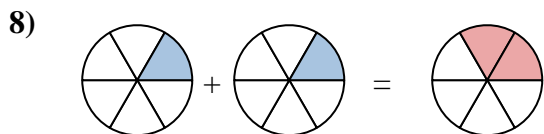
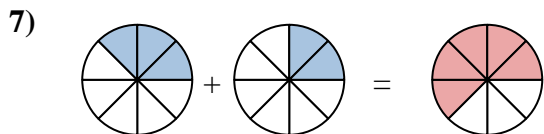
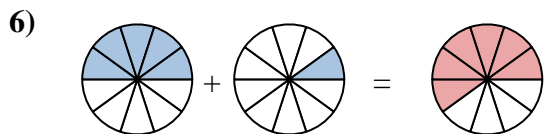
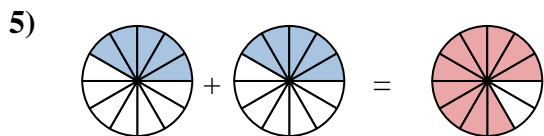
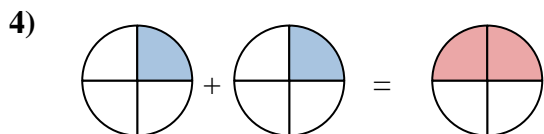
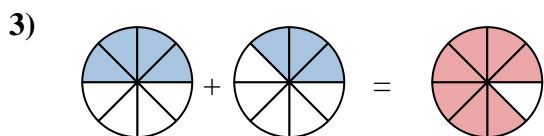
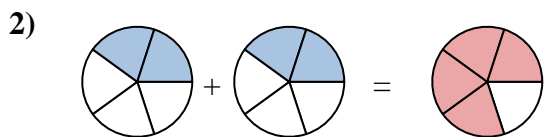
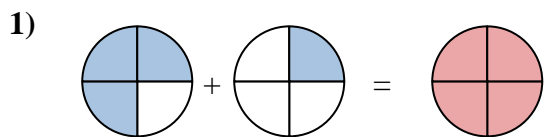
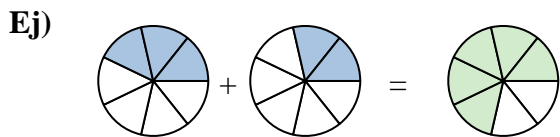


Respuestas

Ej.	$\frac{3}{7}$	$\frac{2}{7}$	$\frac{5}{7}$
1.	_____	_____	_____
2.	_____	_____	_____
3.	_____	_____	_____
4.	_____	_____	_____
5.	_____	_____	_____
6.	_____	_____	_____
7.	_____	_____	_____
8.	_____	_____	_____
9.	_____	_____	_____
10.	_____	_____	_____



Sombrea la fracción para resolver el problema.

**Respuestas**

Ej. $\frac{3}{7}$ $\frac{2}{7}$ $\frac{5}{7}$

1. $\frac{3}{4}$ $\frac{1}{4}$ $\frac{4}{4}$

2. $\frac{2}{5}$ $\frac{2}{5}$ $\frac{4}{5}$

3. $\frac{4}{8}$ $\frac{3}{8}$ $\frac{7}{8}$

4. $\frac{1}{4}$ $\frac{1}{4}$ $\frac{2}{4}$

5. $\frac{5}{12}$ $\frac{5}{12}$ $\frac{10}{12}$

6. $\frac{5}{10}$ $\frac{1}{10}$ $\frac{6}{10}$

7. $\frac{3}{8}$ $\frac{2}{8}$ $\frac{5}{8}$

8. $\frac{1}{6}$ $\frac{1}{6}$ $\frac{2}{6}$

9. $\frac{3}{12}$ $\frac{5}{12}$ $\frac{8}{12}$

10. $\frac{1}{12}$ $\frac{10}{12}$ $\frac{11}{12}$