



Iguala cada ecuación para responder y escribe la respuesta.

Respuestas

Ej) $\frac{1}{4} + \frac{1}{4}$


Ej. **I**

1) $\frac{1}{10} + \frac{1}{10} + \frac{1}{10} + \frac{1}{10} + \frac{1}{10} + \frac{1}{10} + \frac{1}{10}$



1. _____

2) $\frac{1}{5} + \frac{1}{5}$



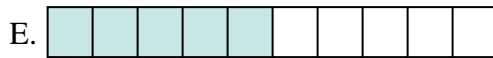
2. _____

3) $\frac{1}{5} + \frac{1}{5} + \frac{1}{5}$



3. _____

4) $\frac{1}{8} + \frac{1}{8}$



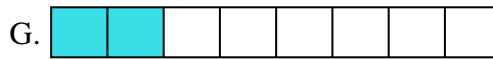
4. _____

5) $\frac{1}{10} + \frac{1}{10} + \frac{1}{10} + \frac{1}{10} + \frac{1}{10}$




5. _____

6) $\frac{1}{3} + \frac{1}{3}$




6. _____

7) $\frac{1}{10} + \frac{1}{10} + \frac{1}{10} + \frac{1}{10}$



7. _____

8) $\frac{1}{4} + \frac{1}{4} + \frac{1}{4}$




8. _____

9) $\frac{1}{12} + \frac{1}{12}$




9. _____

10) $\frac{1}{8} + \frac{1}{8} + \frac{1}{8} + \frac{1}{8} + \frac{1}{8} + \frac{1}{8}$




10. _____

11) $\frac{1}{12} + \frac{1}{12} + \frac{1}{12} + \frac{1}{12}$



11. _____

12) $\frac{1}{6} + \frac{1}{6} + \frac{1}{6}$




12. _____

13) $\frac{1}{5} + \frac{1}{5} + \frac{1}{5} + \frac{1}{5}$




13. _____

14) $\frac{1}{8} + \frac{1}{8} + \frac{1}{8} + \frac{1}{8}$



14. _____

15) $\frac{1}{10} + \frac{1}{10} + \frac{1}{10}$



15. _____



Iguala cada ecuación para responder y escribe la respuesta.


Ej) $\frac{1}{4} + \frac{1}{4}$



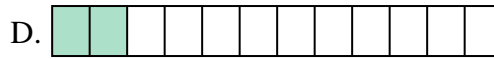
1) $\frac{1}{10} + \frac{1}{10} + \frac{1}{10} + \frac{1}{10} + \frac{1}{10} + \frac{1}{10} + \frac{1}{10}$



2) $\frac{1}{5} + \frac{1}{5}$




3) $\frac{1}{5} + \frac{1}{5} + \frac{1}{5}$



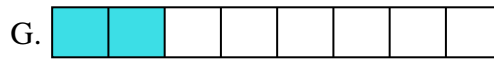
4) $\frac{1}{8} + \frac{1}{8}$




5) $\frac{1}{10} + \frac{1}{10} + \frac{1}{10} + \frac{1}{10} + \frac{1}{10}$




6) $\frac{1}{3} + \frac{1}{3}$



7) $\frac{1}{10} + \frac{1}{10} + \frac{1}{10} + \frac{1}{10}$




8) $\frac{1}{4} + \frac{1}{4} + \frac{1}{4}$



9) $\frac{1}{12} + \frac{1}{12}$




10) $\frac{1}{8} + \frac{1}{8} + \frac{1}{8} + \frac{1}{8} + \frac{1}{8} + \frac{1}{8}$



11) $\frac{1}{12} + \frac{1}{12} + \frac{1}{12} + \frac{1}{12}$



12) $\frac{1}{6} + \frac{1}{6} + \frac{1}{6}$




13) $\frac{1}{5} + \frac{1}{5} + \frac{1}{5} + \frac{1}{5}$



14) $\frac{1}{8} + \frac{1}{8} + \frac{1}{8} + \frac{1}{8}$



15) $\frac{1}{10} + \frac{1}{10} + \frac{1}{10}$

**Respuestas**Ej. **I** 1. **L** 2. **K** 3. **M** 4. **G** 5. **E** 6. **N** 7. **J** 8. **A** 9. **D** 10. **C** 11. **H** 12. **B** 13. **P** 14. **O** 15. **F**