



Iguala cada ecuación para responder y escribe la respuesta.

**Respuestas**

Ej)  $\frac{1}{12} + \frac{1}{12} + \frac{1}{12}$




Ej.           N          

1)  $\frac{1}{6} + \frac{1}{6} + \frac{1}{6} + \frac{1}{6} + \frac{1}{6}$



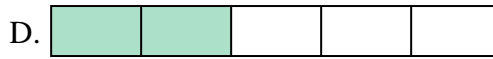
1. \_\_\_\_\_

2)  $\frac{1}{8} + \frac{1}{8} + \frac{1}{8} + \frac{1}{8} + \frac{1}{8}$



2. \_\_\_\_\_

3)  $\frac{1}{5} + \frac{1}{5}$




3. \_\_\_\_\_

4)  $\frac{1}{3} + \frac{1}{3}$



4. \_\_\_\_\_

5)  $\frac{1}{10} + \frac{1}{10} + \frac{1}{10} + \frac{1}{10} + \frac{1}{10} + \frac{1}{10} + \frac{1}{10}$



6. \_\_\_\_\_

6)  $\frac{1}{5} + \frac{1}{5} + \frac{1}{5} + \frac{1}{5}$




7. \_\_\_\_\_

7)  $\frac{1}{4} + \frac{1}{4}$



8. \_\_\_\_\_

8)  $\frac{1}{6} + \frac{1}{6}$




9. \_\_\_\_\_

9)  $\frac{1}{10} + \frac{1}{10} + \frac{1}{10} + \frac{1}{10} + \frac{1}{10}$



10. \_\_\_\_\_

10)  $\frac{1}{6} + \frac{1}{6} + \frac{1}{6}$



11. \_\_\_\_\_

11)  $\frac{1}{8} + \frac{1}{8} + \frac{1}{8}$



12. \_\_\_\_\_

12)  $\frac{1}{12} + \frac{1}{12} + \frac{1}{12} + \frac{1}{12}$




13. \_\_\_\_\_

13)  $\frac{1}{6} + \frac{1}{6} + \frac{1}{6} + \frac{1}{6}$




14. \_\_\_\_\_

14)  $\frac{1}{10} + \frac{1}{10}$



15. \_\_\_\_\_

15)  $\frac{1}{12} + \frac{1}{12} + \frac{1}{12} + \frac{1}{12} + \frac{1}{12} + \frac{1}{12} + \frac{1}{12}$





Iguala cada ecuación para responder y escribe la respuesta.


Ej)  $\frac{1}{12} + \frac{1}{12} + \frac{1}{12}$



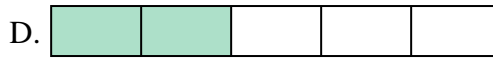
1)  $\frac{1}{6} + \frac{1}{6} + \frac{1}{6} + \frac{1}{6} + \frac{1}{6}$




2)  $\frac{1}{8} + \frac{1}{8} + \frac{1}{8} + \frac{1}{8} + \frac{1}{8}$



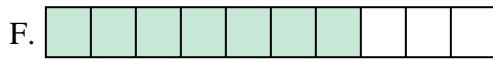
3)  $\frac{1}{5} + \frac{1}{5}$



4)  $\frac{1}{3} + \frac{1}{3}$



5)  $\frac{1}{10} + \frac{1}{10} + \frac{1}{10} + \frac{1}{10} + \frac{1}{10} + \frac{1}{10} + \frac{1}{10}$




6)  $\frac{1}{5} + \frac{1}{5} + \frac{1}{5} + \frac{1}{5}$



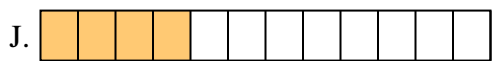
7)  $\frac{1}{4} + \frac{1}{4}$



8)  $\frac{1}{6} + \frac{1}{6}$



9)  $\frac{1}{10} + \frac{1}{10} + \frac{1}{10} + \frac{1}{10} + \frac{1}{10}$



10)  $\frac{1}{6} + \frac{1}{6} + \frac{1}{6}$



11)  $\frac{1}{8} + \frac{1}{8} + \frac{1}{8}$



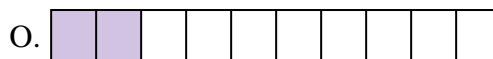
12)  $\frac{1}{12} + \frac{1}{12} + \frac{1}{12} + \frac{1}{12}$




13)  $\frac{1}{6} + \frac{1}{6} + \frac{1}{6} + \frac{1}{6}$



14)  $\frac{1}{10} + \frac{1}{10}$



15)  $\frac{1}{12} + \frac{1}{12} + \frac{1}{12} + \frac{1}{12} + \frac{1}{12} + \frac{1}{12} + \frac{1}{12}$



**Respuestas**

Ej.     N    

1.     I    

2.     C    

3.     D    

4.     M    

5.     F    

6.     A    

7.     E    

8.     B    

9.     P    

10.    G   

11.    L   

12.    J   

13.    K   

14.    O   

15.    H