




Iguala cada ecuación para responder y escribe la respuesta.

Respuestas

Ej) $\frac{1}{4} + \frac{1}{4} + \frac{1}{4}$

Ej. **N**

1) $\frac{1}{8} + \frac{1}{8} + \frac{1}{8} + \frac{1}{8} + \frac{1}{8} + \frac{1}{8} + \frac{1}{8}$



1. _____

2) $\frac{1}{10} + \frac{1}{10} + \frac{1}{10}$




2. _____

3) $\frac{1}{6} + \frac{1}{6} + \frac{1}{6} + \frac{1}{6}$




3. _____

4) $\frac{1}{10} + \frac{1}{10} + \frac{1}{10} + \frac{1}{10} + \frac{1}{10} + \frac{1}{10} + \frac{1}{10}$



4. _____

5) $\frac{1}{8} + \frac{1}{8} + \frac{1}{8}$



5. _____

6) $\frac{1}{12} + \frac{1}{12} + \frac{1}{12} + \frac{1}{12} + \frac{1}{12} + \frac{1}{12}$




6. _____

7) $\frac{1}{5} + \frac{1}{5} + \frac{1}{5}$



7. _____

8) $\frac{1}{3} + \frac{1}{3}$




8. _____

9) $\frac{1}{5} + \frac{1}{5} + \frac{1}{5} + \frac{1}{5}$



9. _____

10) $\frac{1}{12} + \frac{1}{12} + \frac{1}{12}$



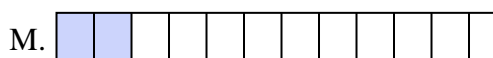
10. _____

11) $\frac{1}{10} + \frac{1}{10} + \frac{1}{10} + \frac{1}{10} + \frac{1}{10} + \frac{1}{10}$



11. _____

12) $\frac{1}{12} + \frac{1}{12}$



12. _____

13) $\frac{1}{10} + \frac{1}{10}$



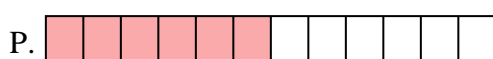
13. _____

14) $\frac{1}{6} + \frac{1}{6} + \frac{1}{6}$



14. _____

15) $\frac{1}{8} + \frac{1}{8} + \frac{1}{8} + \frac{1}{8} + \frac{1}{8} + \frac{1}{8}$



15. _____

16. _____

17. _____

18. _____



Iguala cada ecuación para responder y escribe la respuesta.

Ej) $\frac{1}{4} + \frac{1}{4} + \frac{1}{4}$



1) $\frac{1}{8} + \frac{1}{8} + \frac{1}{8} + \frac{1}{8} + \frac{1}{8} + \frac{1}{8} + \frac{1}{8}$




2) $\frac{1}{10} + \frac{1}{10} + \frac{1}{10}$



3) $\frac{1}{6} + \frac{1}{6} + \frac{1}{6} + \frac{1}{6}$



4) $\frac{1}{10} + \frac{1}{10} + \frac{1}{10} + \frac{1}{10} + \frac{1}{10} + \frac{1}{10} + \frac{1}{10}$



5) $\frac{1}{8} + \frac{1}{8} + \frac{1}{8}$




6) $\frac{1}{12} + \frac{1}{12} + \frac{1}{12} + \frac{1}{12} + \frac{1}{12} + \frac{1}{12}$



7) $\frac{1}{5} + \frac{1}{5} + \frac{1}{5}$



8) $\frac{1}{3} + \frac{1}{3}$



9) $\frac{1}{5} + \frac{1}{5} + \frac{1}{5} + \frac{1}{5}$



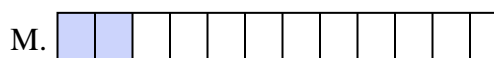
10) $\frac{1}{12} + \frac{1}{12} + \frac{1}{12}$



11) $\frac{1}{10} + \frac{1}{10} + \frac{1}{10} + \frac{1}{10} + \frac{1}{10} + \frac{1}{10}$



12) $\frac{1}{12} + \frac{1}{12}$



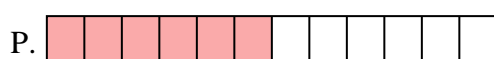
13) $\frac{1}{10} + \frac{1}{10}$



14) $\frac{1}{6} + \frac{1}{6} + \frac{1}{6}$



15) $\frac{1}{8} + \frac{1}{8} + \frac{1}{8} + \frac{1}{8} + \frac{1}{8} + \frac{1}{8}$

**Respuestas**Ej. **N** 1. **J** 2. **G** 3. **E** 4. **K** 5. **O** 6. **P** 7. **H** 8. **C** 9. **F** 10. **D** 11. **I** 12. **M** 13. **B** 14. **L** 15. **A**