



Iguala cada ecuación para responder y escribe la respuesta.

Respuestas

Ej) $\frac{1}{10} + \frac{1}{10} + \frac{1}{10} + \frac{1}{10} + \frac{1}{10} + \frac{1}{10}$



Ej. **F** _____

1) $\frac{1}{8} + \frac{1}{8} + \frac{1}{8} + \frac{1}{8}$



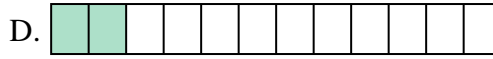
1. _____

2) $\frac{1}{8} + \frac{1}{8} + \frac{1}{8}$



2. _____

3) $\frac{1}{12} + \frac{1}{12}$




3. _____

4) $\frac{1}{6} + \frac{1}{6} + \frac{1}{6}$



4. _____

5) $\frac{1}{12} + \frac{1}{12} + \frac{1}{12} + \frac{1}{12} + \frac{1}{12} + \frac{1}{12} + \frac{1}{12}$




5. _____

6) $\frac{1}{4} + \frac{1}{4}$




6. _____

7) $\frac{1}{5} + \frac{1}{5} + \frac{1}{5} + \frac{1}{5}$



7. _____

8) $\frac{1}{5} + \frac{1}{5}$




8. _____

9) $\frac{1}{6} + \frac{1}{6} + \frac{1}{6} + \frac{1}{6} + \frac{1}{6}$



9. _____

10) $\frac{1}{12} + \frac{1}{12} + \frac{1}{12} + \frac{1}{12} + \frac{1}{12}$



10. _____

11) $\frac{1}{4} + \frac{1}{4} + \frac{1}{4}$



11. _____

12) $\frac{1}{6} + \frac{1}{6} + \frac{1}{6} + \frac{1}{6}$




12. _____

13) $\frac{1}{5} + \frac{1}{5} + \frac{1}{5}$




13. _____

14) $\frac{1}{8} + \frac{1}{8} + \frac{1}{8} + \frac{1}{8} + \frac{1}{8} + \frac{1}{8}$



14. _____

15) $\frac{1}{3} + \frac{1}{3}$



15. _____



Iguala cada ecuación para responder y escribe la respuesta.

Ej) $\frac{1}{10} + \frac{1}{10} + \frac{1}{10} + \frac{1}{10} + \frac{1}{10} + \frac{1}{10}$



1) $\frac{1}{8} + \frac{1}{8} + \frac{1}{8} + \frac{1}{8}$



2) $\frac{1}{8} + \frac{1}{8} + \frac{1}{8}$




3) $\frac{1}{12} + \frac{1}{12}$



4) $\frac{1}{6} + \frac{1}{6} + \frac{1}{6}$




5) $\frac{1}{12} + \frac{1}{12} + \frac{1}{12} + \frac{1}{12} + \frac{1}{12} + \frac{1}{12} + \frac{1}{12}$




6) $\frac{1}{4} + \frac{1}{4}$



7) $\frac{1}{5} + \frac{1}{5} + \frac{1}{5} + \frac{1}{5}$




8) $\frac{1}{5} + \frac{1}{5}$



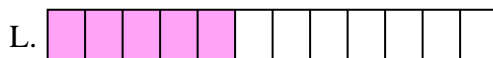
9) $\frac{1}{6} + \frac{1}{6} + \frac{1}{6} + \frac{1}{6} + \frac{1}{6}$



10) $\frac{1}{12} + \frac{1}{12} + \frac{1}{12} + \frac{1}{12} + \frac{1}{12}$



11) $\frac{1}{4} + \frac{1}{4} + \frac{1}{4}$




12) $\frac{1}{6} + \frac{1}{6} + \frac{1}{6} + \frac{1}{6}$




13) $\frac{1}{5} + \frac{1}{5} + \frac{1}{5}$



14) $\frac{1}{8} + \frac{1}{8} + \frac{1}{8} + \frac{1}{8} + \frac{1}{8} + \frac{1}{8}$



15) $\frac{1}{3} + \frac{1}{3}$

**Respuestas**Ej. **F** 1. **E** 2. **O** 3. **D** 4. **M** 5. **I** 6. **A** 7. **J** 8. **H** 9. **K** 10. **L** 11. **C** 12. **N** 13. **G** 14. **P** 15. **B**