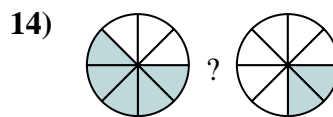
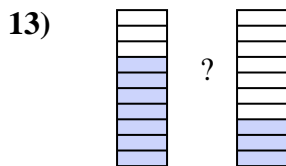
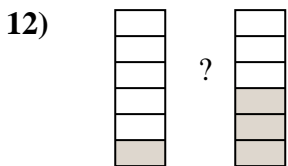
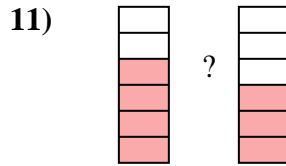
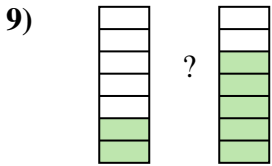
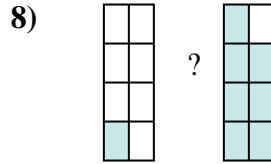
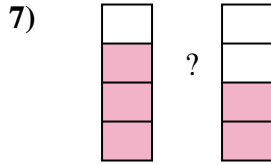
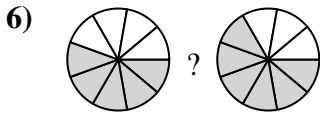
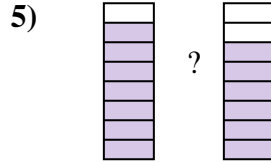
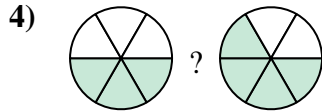
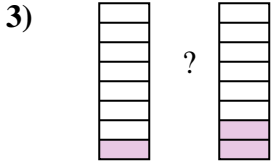
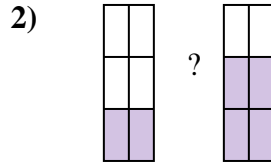
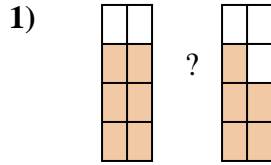
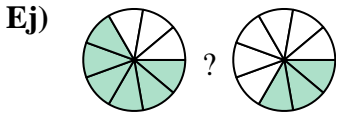




Compara el tamaño de las fracciones usando $<$, $>$ o $=$.



Respuestas

Ej. $\frac{6}{9}$ $>$ $\frac{3}{9}$

1. _____

2. _____

3. _____

4. _____

5. _____

6. _____

7. _____

8. _____

9. _____

10. _____

11. _____

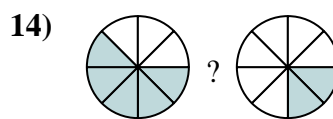
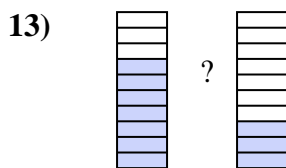
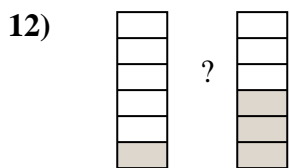
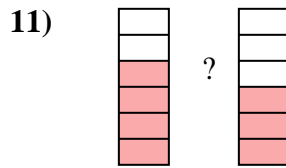
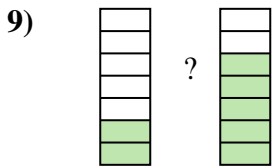
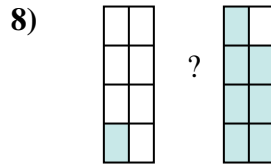
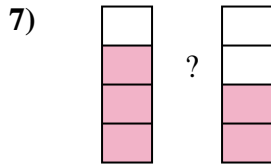
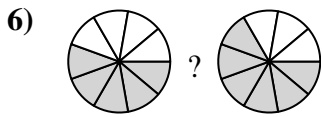
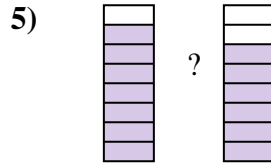
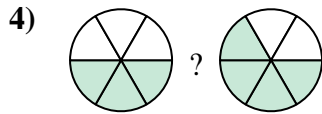
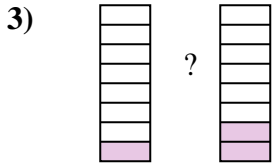
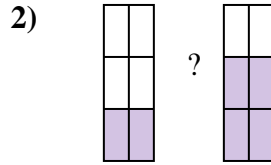
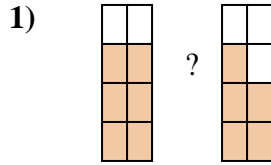
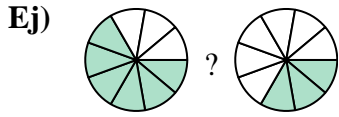
12. _____

13. _____

14. _____



Compara el tamaño de las fracciones usando $<$, $>$ o $=$.



Respuestas

| | | | |
|-----|----------------|-----|----------------|
| Ej. | $\frac{6}{9}$ | $>$ | $\frac{3}{9}$ |
| 1. | $\frac{6}{8}$ | $>$ | $\frac{5}{8}$ |
| 2. | $\frac{2}{6}$ | $<$ | $\frac{4}{6}$ |
| 3. | $\frac{1}{8}$ | $<$ | $\frac{2}{8}$ |
| 4. | $\frac{3}{6}$ | $<$ | $\frac{4}{6}$ |
| 5. | $\frac{7}{8}$ | $>$ | $\frac{6}{8}$ |
| 6. | $\frac{5}{9}$ | $<$ | $\frac{6}{9}$ |
| 7. | $\frac{3}{4}$ | $>$ | $\frac{2}{4}$ |
| 8. | $\frac{1}{8}$ | $<$ | $\frac{7}{8}$ |
| 9. | $\frac{2}{7}$ | $<$ | $\frac{5}{7}$ |
| 10. | $\frac{2}{5}$ | $<$ | $\frac{4}{5}$ |
| 11. | $\frac{4}{6}$ | $>$ | $\frac{3}{6}$ |
| 12. | $\frac{1}{6}$ | $<$ | $\frac{3}{6}$ |
| 13. | $\frac{7}{10}$ | $>$ | $\frac{3}{10}$ |
| 14. | $\frac{5}{8}$ | $>$ | $\frac{2}{8}$ |