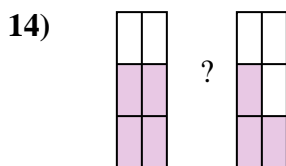
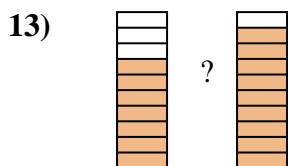
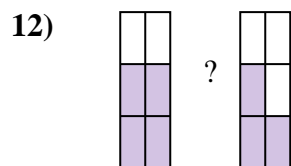
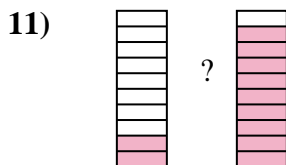
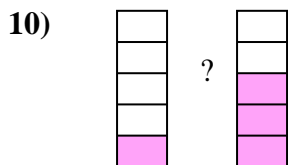
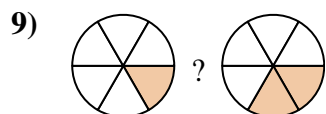
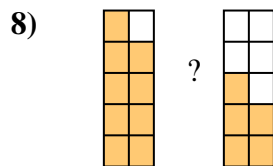
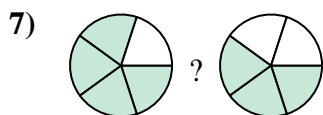
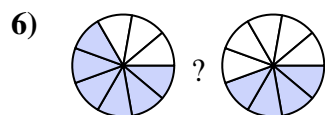
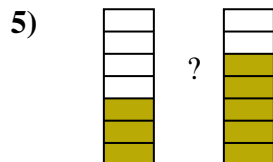
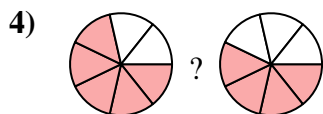
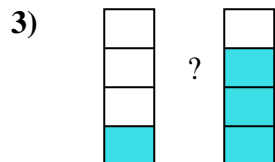
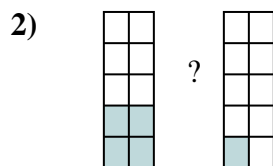
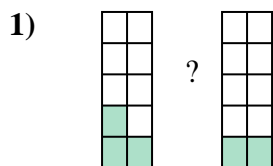
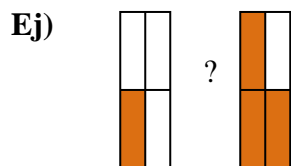




Compara el tamaño de las fracciones usando $<$, $>$ o $=$.



Respuestas

Ej. $\frac{1}{4}$ $<$ $\frac{3}{4}$

1. _____

2. _____

3. _____

4. _____

5. _____

6. _____

7. _____

8. _____

9. _____

10. _____

11. _____

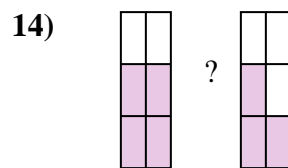
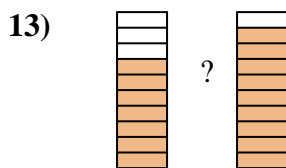
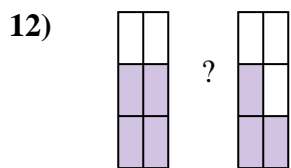
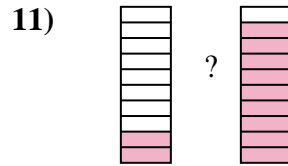
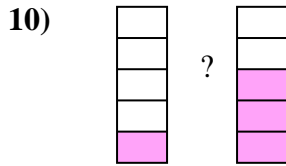
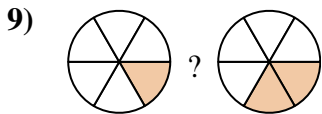
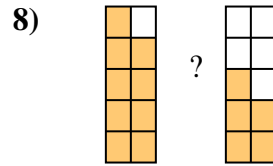
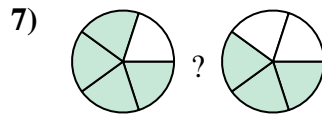
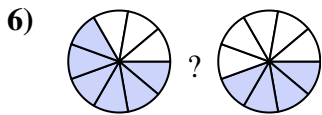

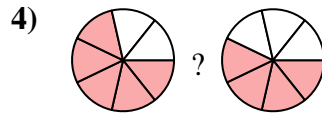

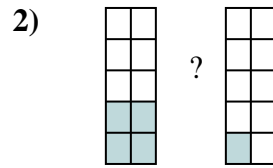
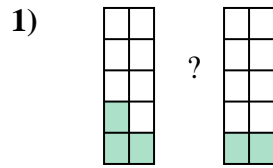
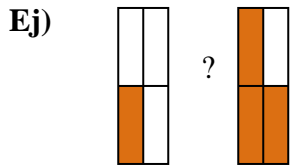
12. _____

13. _____

14. _____



Compara el tamaño de las fracciones usando $<$, $>$ o $=$.



Respuestas

Ej. $\frac{1}{4} < \frac{3}{4}$

1. $\frac{3}{10} > \frac{2}{10}$

2. $\frac{4}{10} > \frac{1}{10}$

3. $\frac{1}{4} < \frac{3}{4}$

4. $\frac{5}{7} > \frac{4}{7}$

5. $\frac{3}{7} < \frac{5}{7}$

6. $\frac{6}{9} > \frac{4}{9}$

7. $\frac{4}{5} > \frac{3}{5}$

8. $\frac{9}{10} > \frac{5}{10}$

9. $\frac{1}{6} < \frac{2}{6}$

10. $\frac{1}{5} < \frac{3}{5}$

11. $\frac{2}{10} < \frac{9}{10}$

12. $\frac{4}{6} > \frac{3}{6}$

13. $\frac{7}{10} < \frac{9}{10}$

14. $\frac{4}{6} > \frac{3}{6}$