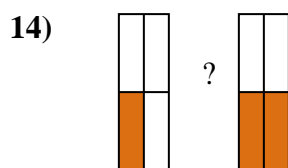
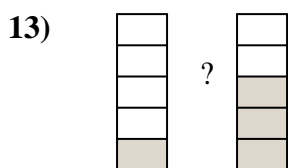
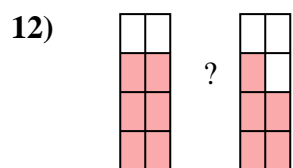
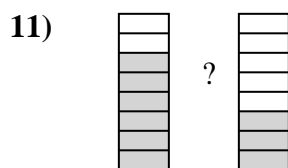
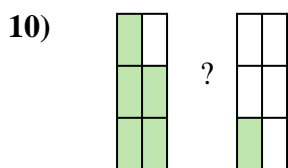
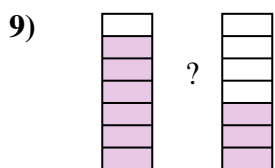
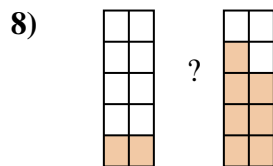
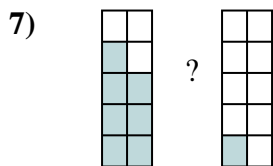
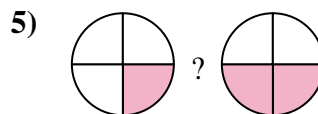
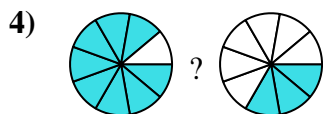
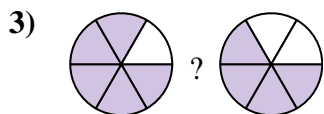
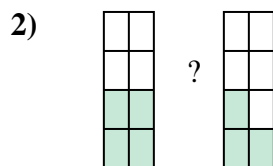
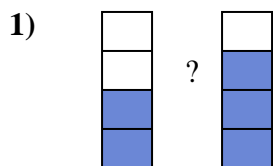
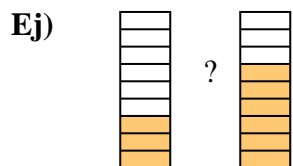




Compara el tamaño de las fracciones usando $<$, $>$ o $=$.



Respuestas

Ej. $\frac{3}{9}$ $<$ $\frac{6}{9}$

1. _____

2. _____

3. _____

4. _____

5. _____

6. _____

7. _____

8. _____

9. _____

10. _____

11. _____

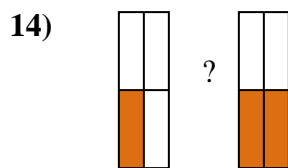
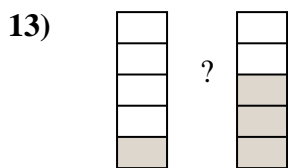
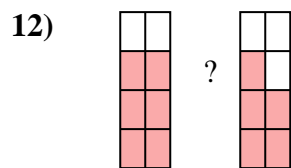
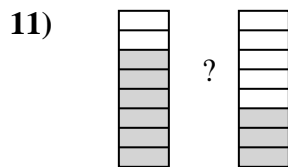
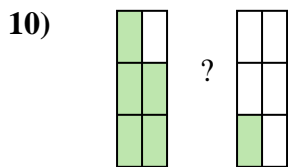
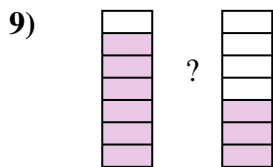
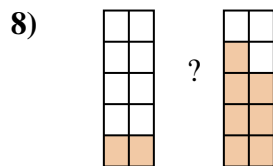
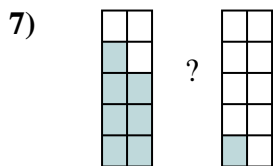
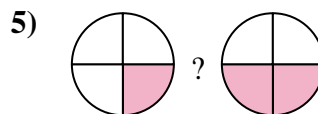
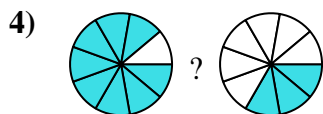
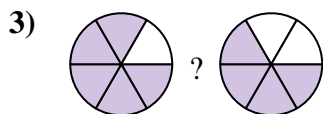
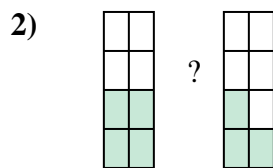

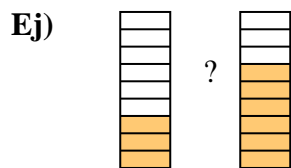
12. _____

13. _____

14. _____



Compara el tamaño de las fracciones usando $<$, $>$ o $=$.



Respuestas

Ej. $\frac{3}{9} < \frac{6}{9}$

1. $\frac{2}{4} < \frac{3}{4}$

2. $\frac{4}{8} > \frac{3}{8}$

3. $\frac{5}{6} > \frac{4}{6}$

4. $\frac{8}{9} > \frac{3}{9}$

5. $\frac{1}{4} < \frac{2}{4}$

6. $\frac{2}{7} < \frac{4}{7}$

7. $\frac{7}{10} > \frac{1}{10}$

8. $\frac{2}{10} < \frac{7}{10}$

9. $\frac{6}{7} > \frac{3}{7}$

10. $\frac{5}{6} > \frac{1}{6}$

11. $\frac{6}{8} > \frac{3}{8}$

12. $\frac{6}{8} > \frac{5}{8}$

13. $\frac{1}{5} < \frac{3}{5}$

14. $\frac{1}{4} < \frac{2}{4}$