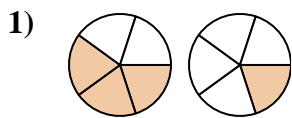


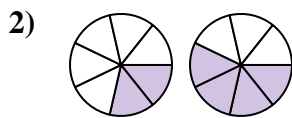


Determina cuál letra compara mejor las fracciones mostradas.

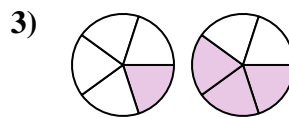
**Respuestas**



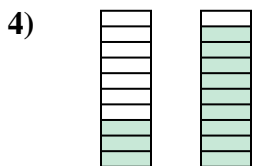
- A.  $\frac{5}{3} > \frac{5}{1}$
- B.  $\frac{3}{5} > \frac{1}{5}$
- C.  $\frac{3}{5} < \frac{1}{5}$
- D.  $\frac{3}{2} < \frac{1}{4}$



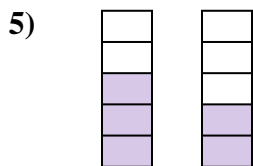
- A.  $\frac{2}{7} < \frac{4}{7}$
- B.  $\frac{2}{5} > \frac{4}{3}$
- C.  $\frac{7}{2} > \frac{7}{4}$
- D.  $\frac{2}{7} > \frac{4}{7}$



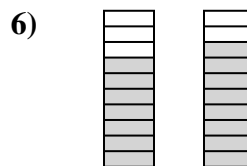
- A.  $\frac{4}{1} > \frac{2}{3}$
- B.  $\frac{1}{5} > \frac{3}{5}$
- C.  $\frac{1}{5} < \frac{3}{5}$
- D.  $\frac{5}{1} > \frac{5}{3}$



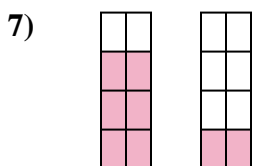
- A.  $\frac{7}{3} < \frac{1}{9}$
- B.  $\frac{3}{10} < \frac{9}{10}$
- C.  $\frac{7}{3} > \frac{1}{9}$
- D.  $\frac{10}{3} > \frac{10}{9}$



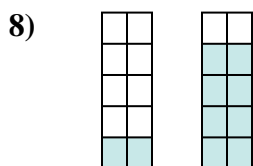
- A.  $\frac{3}{2} > \frac{2}{3}$
- B.  $\frac{2}{3} < \frac{3}{2}$
- C.  $\frac{3}{2} < \frac{2}{3}$
- D.  $\frac{3}{5} > \frac{2}{5}$



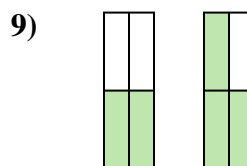
- A.  $\frac{3}{7} < \frac{2}{8}$
- B.  $\frac{7}{3} < \frac{8}{2}$
- C.  $\frac{7}{10} < \frac{8}{10}$
- D.  $\frac{10}{7} > \frac{10}{8}$



- A.  $\frac{6}{8} > \frac{2}{8}$
- B.  $\frac{6}{2} < \frac{2}{6}$
- C.  $\frac{2}{6} > \frac{6}{2}$
- D.  $\frac{6}{2} > \frac{2}{6}$



- A.  $\frac{2}{10} < \frac{8}{10}$
- B.  $\frac{2}{8} < \frac{8}{2}$
- C.  $\frac{8}{2} < \frac{2}{8}$
- D.  $\frac{8}{2} > \frac{2}{8}$



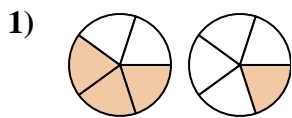
- A.  $\frac{2}{4} < \frac{3}{4}$
- B.  $\frac{2}{2} > \frac{1}{3}$
- C.  $\frac{2}{2} < \frac{3}{1}$
- D.  $\frac{4}{2} > \frac{4}{3}$

- 1. \_\_\_\_\_
- 2. \_\_\_\_\_
- 3. \_\_\_\_\_
- 4. \_\_\_\_\_
- 5. \_\_\_\_\_
- 6. \_\_\_\_\_
- 7. \_\_\_\_\_
- 8. \_\_\_\_\_
- 9. \_\_\_\_\_

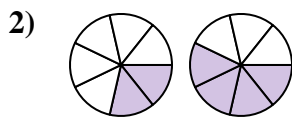


Determina cuál letra compara mejor las fracciones mostradas.

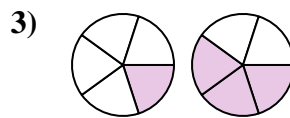
**Respuestas**



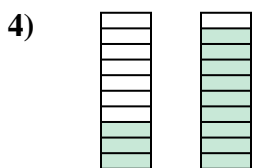
- A.  $\frac{5}{3} > \frac{5}{1}$
- B.  $\frac{3}{5} > \frac{1}{5}$
- C.  $\frac{3}{5} < \frac{1}{5}$
- D.  $\frac{3}{2} < \frac{1}{4}$



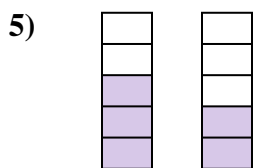
- A.  $\frac{2}{7} < \frac{4}{7}$
- B.  $\frac{2}{5} > \frac{4}{3}$
- C.  $\frac{7}{2} > \frac{7}{4}$
- D.  $\frac{2}{7} > \frac{4}{7}$



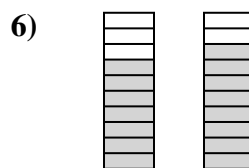
- A.  $\frac{4}{1} > \frac{2}{3}$
- B.  $\frac{1}{5} > \frac{3}{5}$
- C.  $\frac{1}{5} < \frac{3}{5}$
- D.  $\frac{5}{1} > \frac{5}{3}$



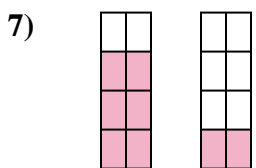
- A.  $\frac{7}{3} < \frac{1}{9}$
- B.  $\frac{3}{10} < \frac{9}{10}$
- C.  $\frac{7}{3} > \frac{1}{9}$
- D.  $\frac{10}{3} > \frac{10}{9}$



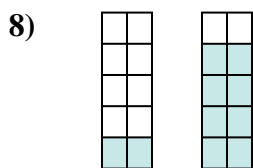
- A.  $\frac{3}{2} > \frac{2}{3}$
- B.  $\frac{2}{3} < \frac{3}{2}$
- C.  $\frac{3}{2} < \frac{2}{3}$
- D.  $\frac{3}{5} > \frac{2}{5}$



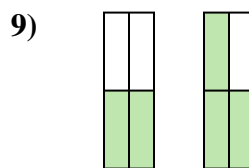
- A.  $\frac{3}{7} < \frac{2}{8}$
- B.  $\frac{7}{3} < \frac{8}{2}$
- C.  $\frac{7}{10} < \frac{8}{10}$
- D.  $\frac{10}{7} > \frac{10}{8}$



- A.  $\frac{6}{8} > \frac{2}{8}$
- B.  $\frac{6}{2} < \frac{2}{6}$
- C.  $\frac{2}{6} > \frac{6}{2}$
- D.  $\frac{6}{2} > \frac{2}{6}$



- A.  $\frac{2}{10} < \frac{8}{10}$
- B.  $\frac{2}{8} < \frac{8}{2}$
- C.  $\frac{8}{2} < \frac{2}{8}$
- D.  $\frac{8}{2} > \frac{2}{8}$



- A.  $\frac{2}{4} < \frac{3}{4}$
- B.  $\frac{2}{2} > \frac{1}{3}$
- C.  $\frac{2}{2} < \frac{3}{1}$
- D.  $\frac{4}{2} > \frac{4}{3}$

- 1.     **B**
- 2.     **A**
- 3.     **C**
- 4.     **B**
- 5.     **D**
- 6.     **C**
- 7.     **A**
- 8.     **A**
- 9.     **A**