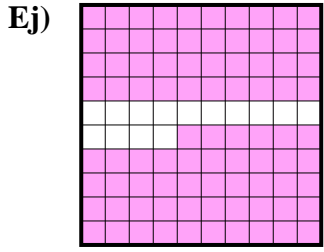
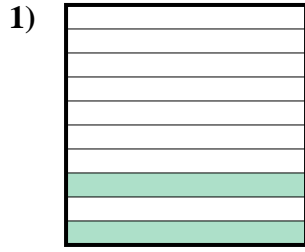




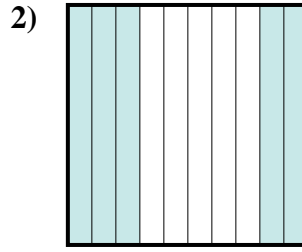
Determina el valor escrito como fracción, decimal y porcentaje.



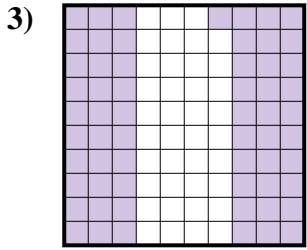
fracción  $\frac{86}{100}$   
 decimal 0.86  
 porcentaje 86



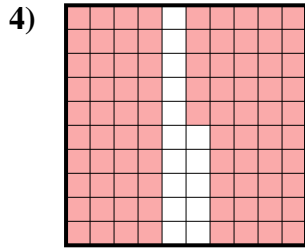
fracción \_\_\_\_\_  
 decimal \_\_\_\_\_  
 porcentaje \_\_\_\_\_



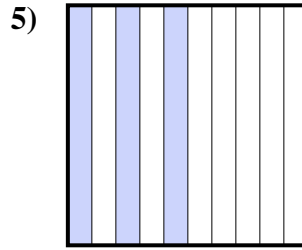
fracción \_\_\_\_\_  
 decimal \_\_\_\_\_  
 porcentaje \_\_\_\_\_



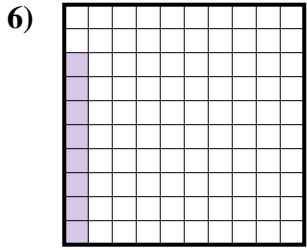
fracción \_\_\_\_\_  
 decimal \_\_\_\_\_  
 porcentaje \_\_\_\_\_



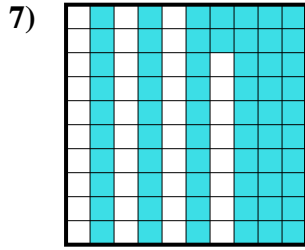
fracción \_\_\_\_\_  
 decimal \_\_\_\_\_  
 porcentaje \_\_\_\_\_



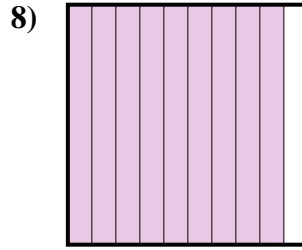
fracción \_\_\_\_\_  
 decimal \_\_\_\_\_  
 porcentaje \_\_\_\_\_



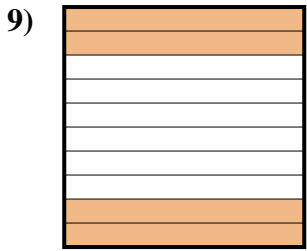
fracción \_\_\_\_\_  
 decimal \_\_\_\_\_  
 porcentaje \_\_\_\_\_



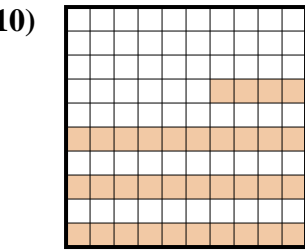
fracción \_\_\_\_\_  
 decimal \_\_\_\_\_  
 porcentaje \_\_\_\_\_



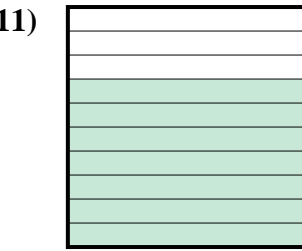
fracción \_\_\_\_\_  
 decimal \_\_\_\_\_  
 porcentaje \_\_\_\_\_



fracción \_\_\_\_\_  
 decimal \_\_\_\_\_  
 porcentaje \_\_\_\_\_



fracción \_\_\_\_\_  
 decimal \_\_\_\_\_  
 porcentaje \_\_\_\_\_



fracción \_\_\_\_\_  
 decimal \_\_\_\_\_  
 porcentaje \_\_\_\_\_

**Respuestas**

Ej.	$\frac{86}{100}$	0.86	86%
1.	_____	_____	_____
2.	_____	_____	_____
3.	_____	_____	_____
4.	_____	_____	_____
5.	_____	_____	_____
6.	_____	_____	_____
7.	_____	_____	_____
8.	_____	_____	_____
9.	_____	_____	_____
10.	_____	_____	_____
11.	_____	_____	_____

