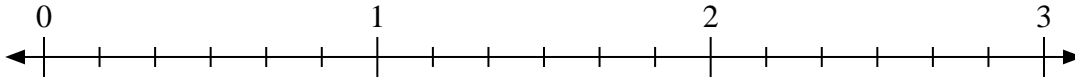


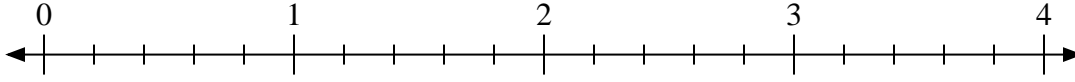


Usa la recta numérica para resolver.

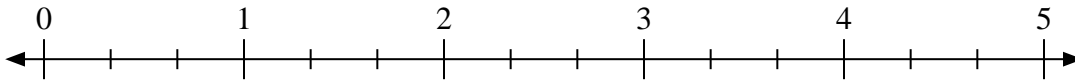
1)  $3 \div \frac{3}{6}$



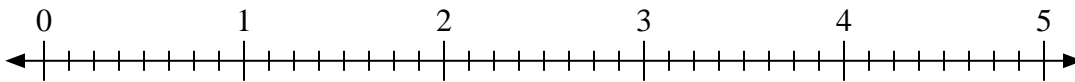
2)  $2 \div \frac{4}{5}$



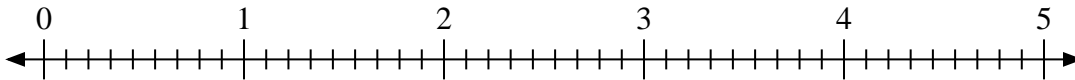
3)  $5 \div \frac{1}{3}$



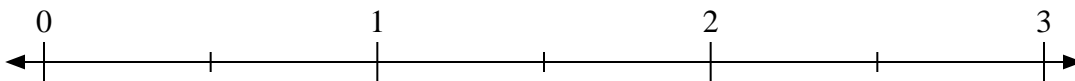
4)  $3 \div \frac{5}{8}$



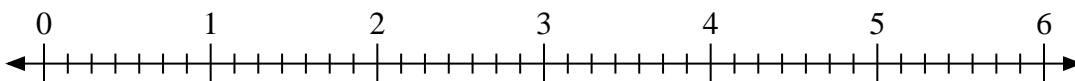
5)  $3 \div \frac{7}{9}$



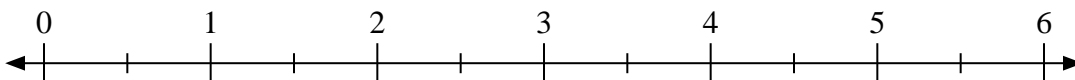
6)  $3 \div \frac{1}{2}$



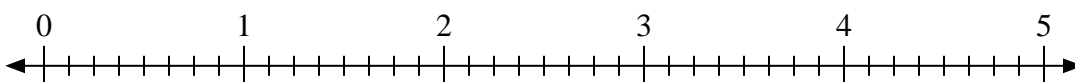
7)  $5 \div \frac{3}{7}$



8)  $5 \div \frac{1}{2}$



9)  $4 \div \frac{4}{8}$



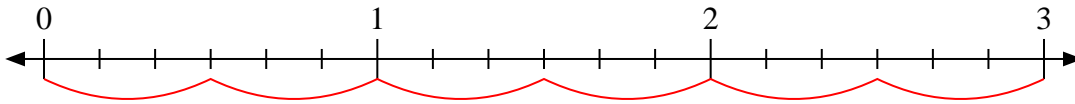
**Respuestas**

1. \_\_\_\_\_
2. \_\_\_\_\_
3. \_\_\_\_\_
4. \_\_\_\_\_
5. \_\_\_\_\_
6. \_\_\_\_\_
7. \_\_\_\_\_
8. \_\_\_\_\_
9. \_\_\_\_\_

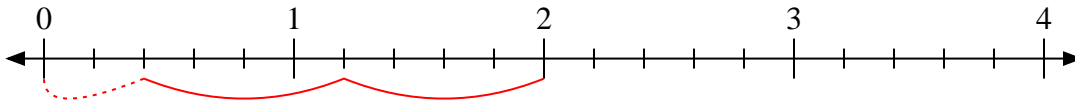


Usa la recta numérica para resolver.

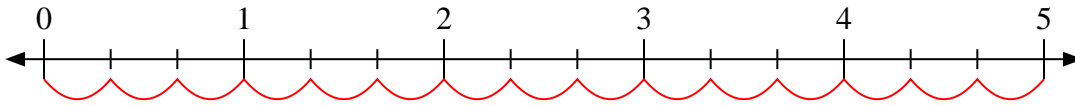
1)  $3 \div \frac{3}{6}$



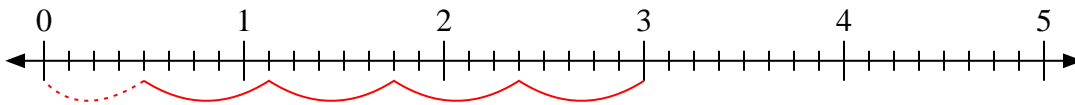
2)  $2 \div \frac{4}{5}$



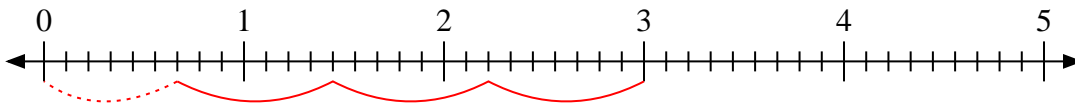
3)  $5 \div \frac{1}{3}$



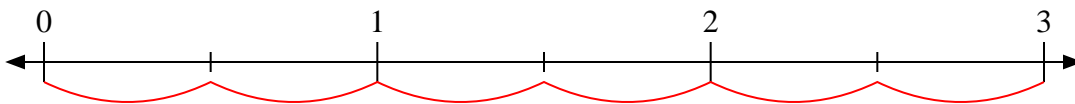
4)  $3 \div \frac{5}{8}$



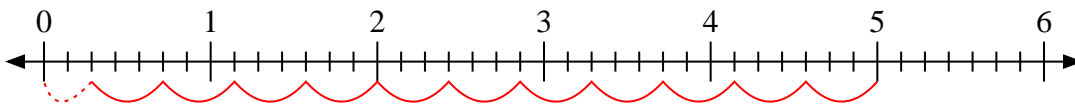
5)  $3 \div \frac{7}{9}$



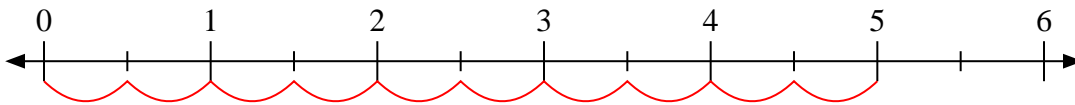
6)  $3 \div \frac{1}{2}$



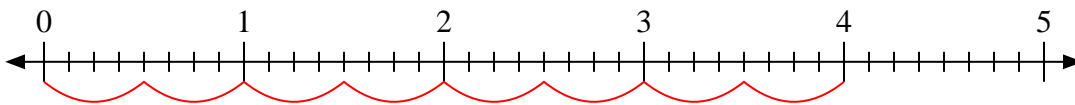
7)  $5 \div \frac{3}{7}$



8)  $5 \div \frac{1}{2}$



9)  $4 \div \frac{4}{8}$



**Respuestas**

1. 6
2.  $2 \frac{2}{4}$
3. 15
4.  $4 \frac{4}{5}$
5.  $3 \frac{6}{7}$
6. 6
7.  $11 \frac{2}{3}$
8. 10
9. 8