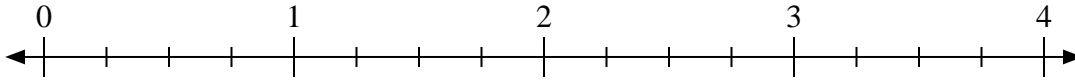


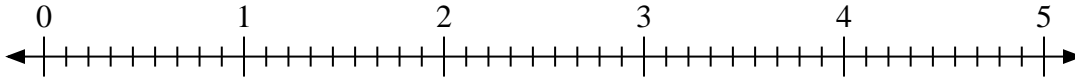


Usa la recta numérica para resolver.

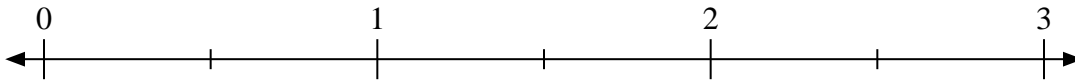
1)  $4 \div \frac{3}{4}$



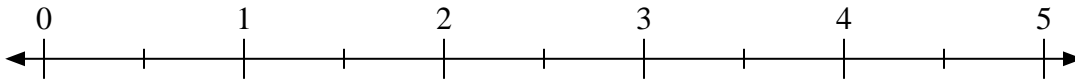
2)  $2 \div \frac{2}{9}$



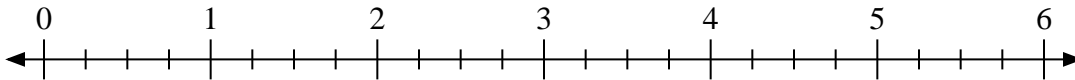
3)  $3 \div \frac{1}{2}$



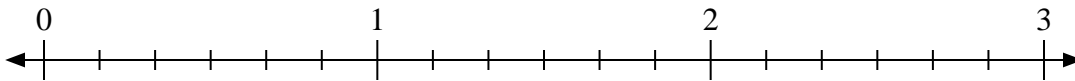
4)  $5 \div \frac{1}{2}$



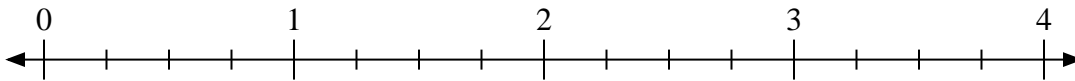
5)  $4 \div \frac{2}{4}$



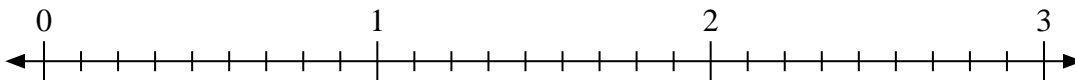
6)  $2 \div \frac{1}{6}$



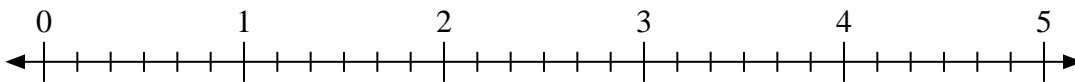
7)  $3 \div \frac{3}{4}$



8)  $2 \div \frac{7}{9}$



9)  $3 \div \frac{2}{6}$



**Respuestas**

1. \_\_\_\_\_

2. \_\_\_\_\_

3. \_\_\_\_\_

4. \_\_\_\_\_

5. \_\_\_\_\_

6. \_\_\_\_\_

7. \_\_\_\_\_

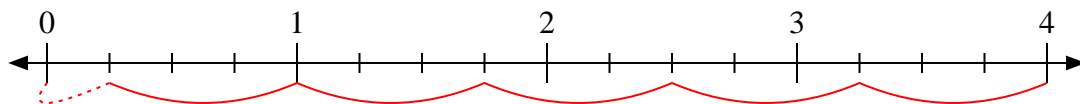
8. \_\_\_\_\_

9. \_\_\_\_\_

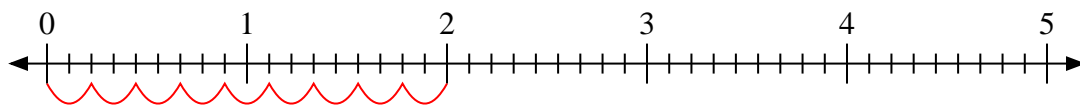


Usa la recta numérica para resolver.

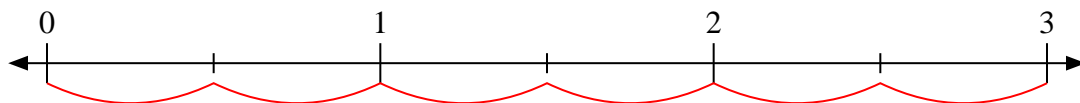
1)  $4 \div \frac{3}{4}$



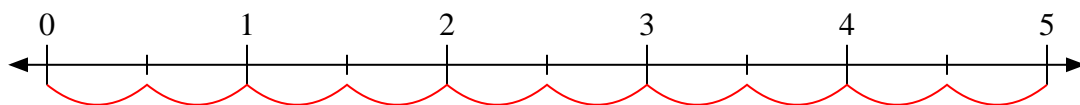
2)  $2 \div \frac{2}{9}$



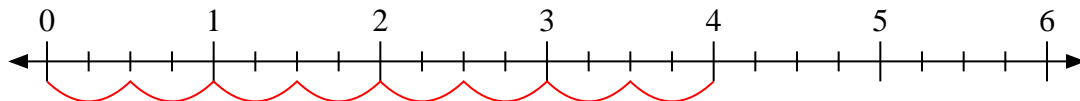
3)  $3 \div \frac{1}{2}$



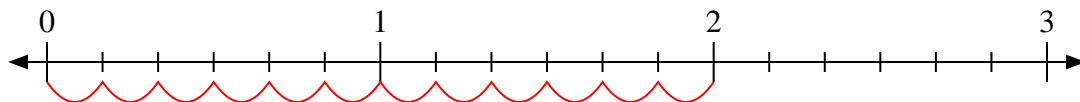
4)  $5 \div \frac{1}{2}$



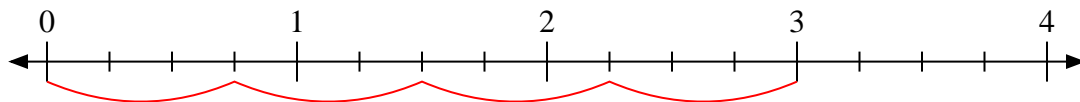
5)  $4 \div \frac{2}{4}$



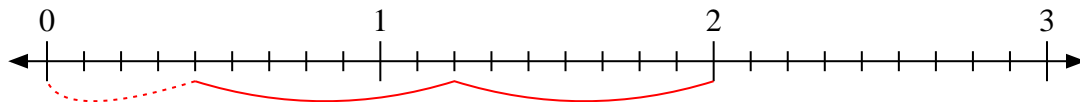
6)  $2 \div \frac{1}{6}$



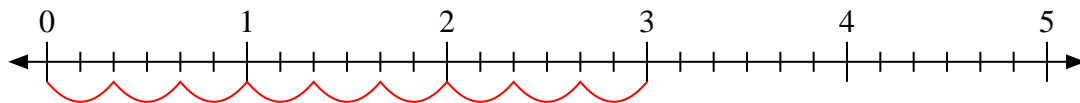
7)  $3 \div \frac{3}{4}$



8)  $2 \div \frac{7}{9}$



9)  $3 \div \frac{2}{6}$



**Respuestas**

1. 5  $\frac{1}{3}$

2. 9

3. 6

4. 10

5. 8

6. 12

7. 4

8. 2  $\frac{4}{7}$

9. 9