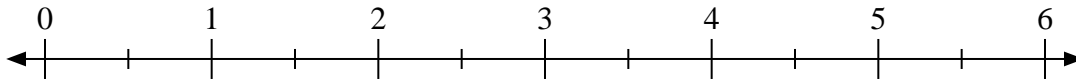


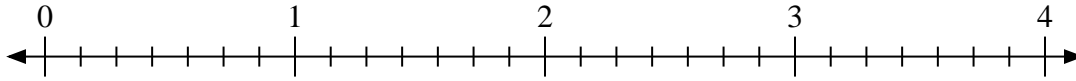


Usa la recta numérica para resolver.

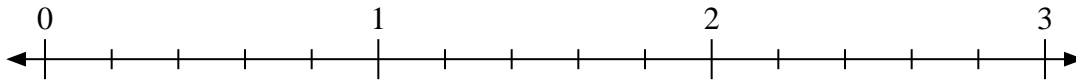
1) $5 \div \frac{1}{2}$



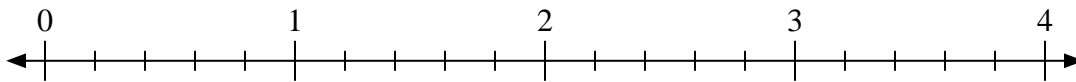
2) $4 \div \frac{4}{7}$



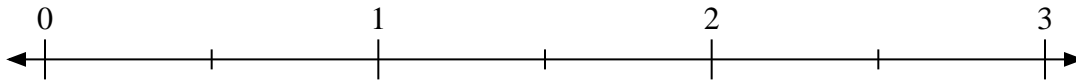
3) $3 \div \frac{1}{5}$



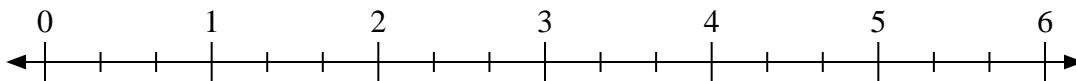
4) $2 \div \frac{2}{5}$



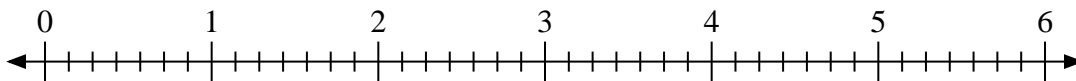
5) $2 \div \frac{1}{2}$



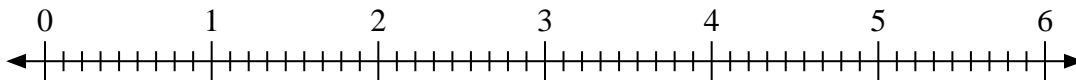
6) $3 \div \frac{2}{3}$



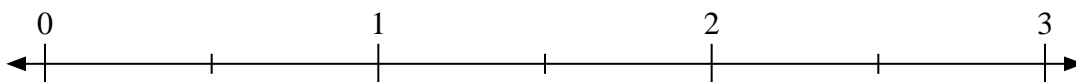
7) $2 \div \frac{2}{7}$



8) $2 \div \frac{4}{9}$



9) $3 \div \frac{1}{2}$



Respuestas

1. _____

2. _____

3. _____

4. _____

5. _____

6. _____

7. _____

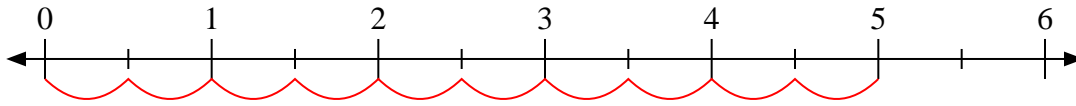
8. _____

9. _____

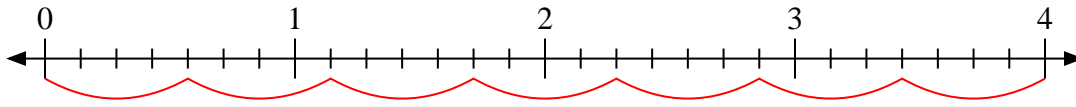


Usa la recta numérica para resolver.

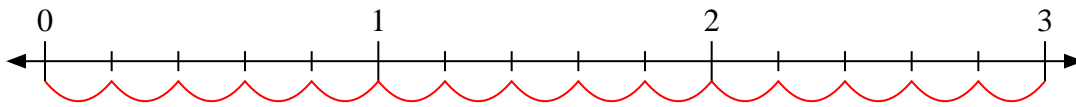
1) $5 \div \frac{1}{2}$



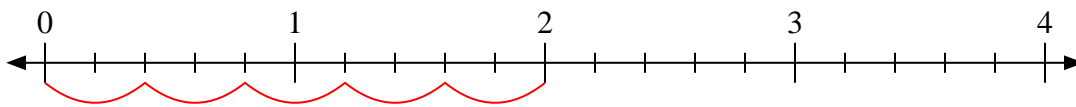
2) $4 \div \frac{4}{7}$



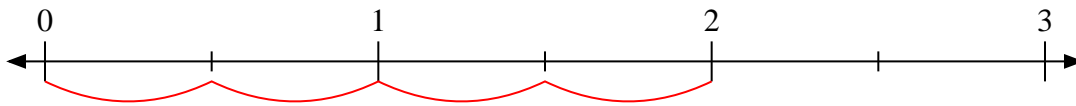
3) $3 \div \frac{1}{5}$



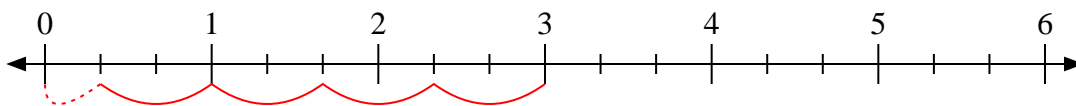
4) $2 \div \frac{2}{5}$



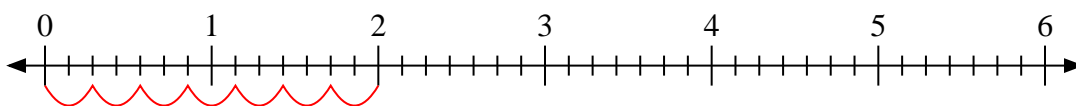
5) $2 \div \frac{1}{2}$



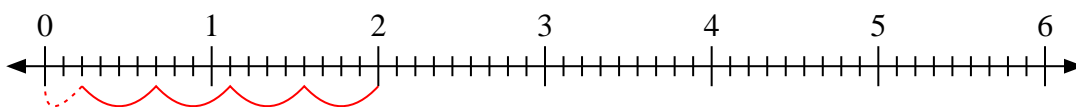
6) $3 \div \frac{2}{3}$



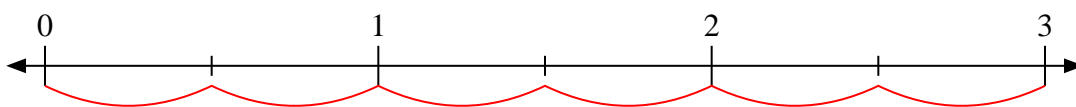
7) $2 \div \frac{2}{7}$



8) $2 \div \frac{4}{9}$



9) $3 \div \frac{1}{2}$



Respuestas

1. **10**

2. **7**

3. **15**

4. **5**

5. **4**

6. **$4 \frac{1}{2}$**

7. **7**

8. **$4 \frac{2}{4}$**

9. **6**