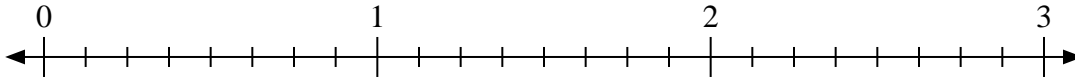


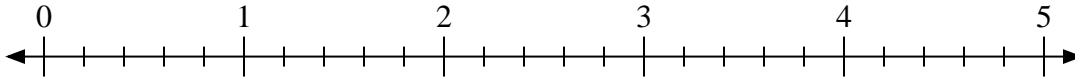


Usa la recta numérica para resolver.

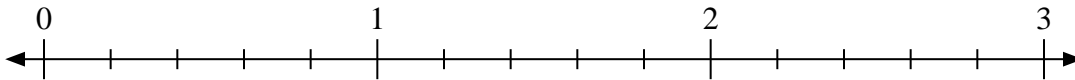
1) $3 \div \frac{2}{8}$



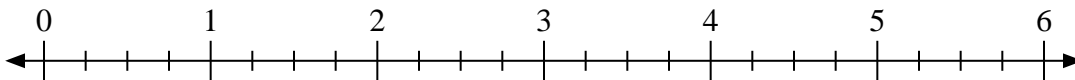
2) $3 \div \frac{4}{5}$



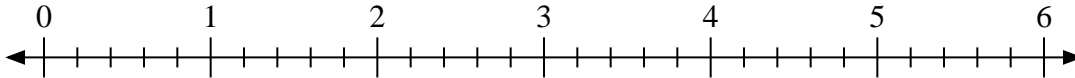
3) $3 \div \frac{4}{5}$



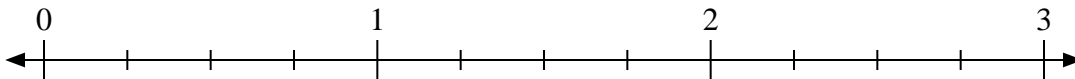
4) $5 \div \frac{2}{4}$



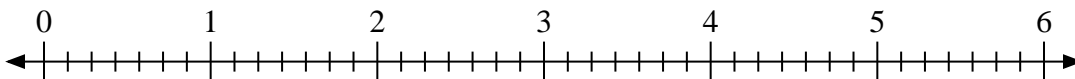
5) $6 \div \frac{1}{5}$



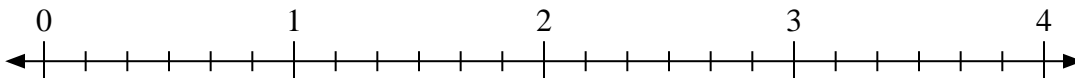
6) $3 \div \frac{3}{4}$




7) $4 \div \frac{2}{7}$



8) $2 \div \frac{3}{6}$



9) $2 \div \frac{1}{3}$

**Respuestas**

1. _____

2. _____

3. _____

4. _____

5. _____

6. _____

7. _____

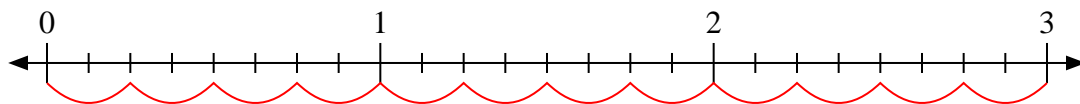
8. _____

9. _____

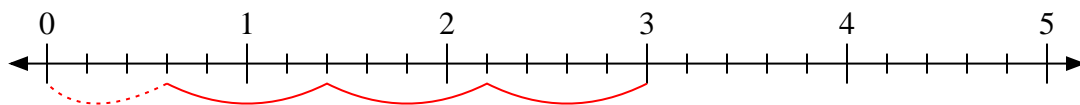


Usa la recta numérica para resolver.

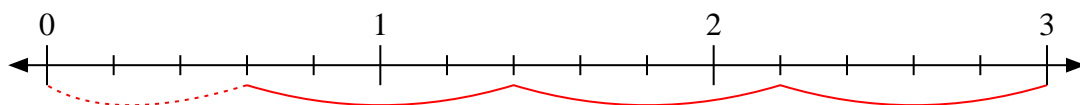
1) $3 \div \frac{2}{8}$



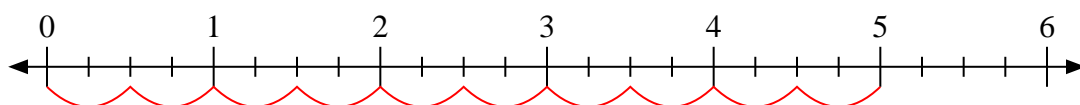
2) $3 \div \frac{4}{5}$



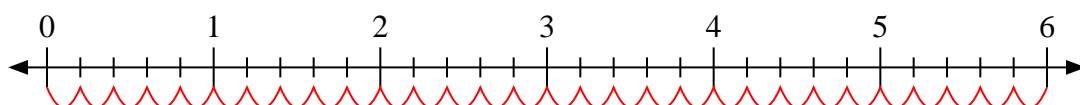
3) $3 \div \frac{4}{5}$



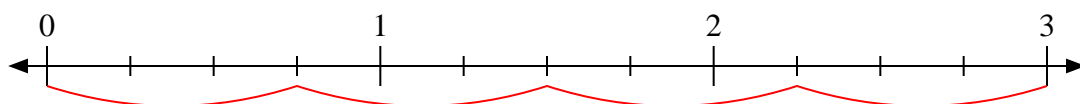
4) $5 \div \frac{2}{4}$



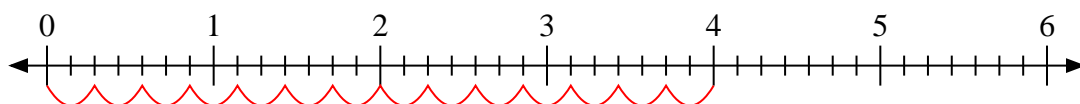
5) $6 \div \frac{1}{5}$



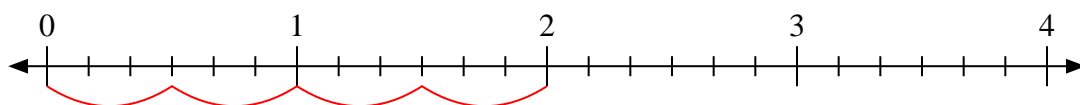
6) $3 \div \frac{3}{4}$



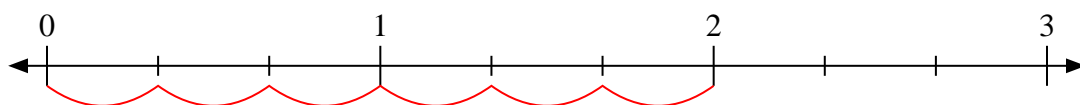
7) $4 \div \frac{2}{7}$



8) $2 \div \frac{3}{6}$



9) $2 \div \frac{1}{3}$



Respuestas

1. 12

2. $3 \frac{3}{4}$

3. $3 \frac{3}{4}$

4. 10

5. 30

6. 4

7. 14

8. 4

9. 6