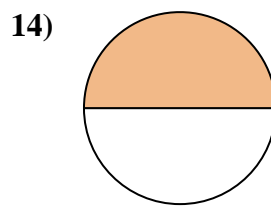
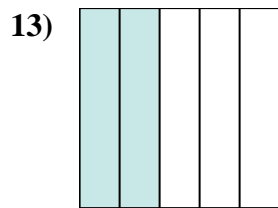
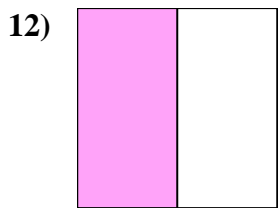
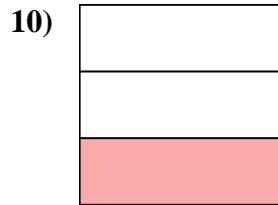
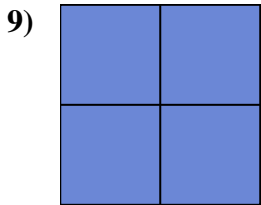
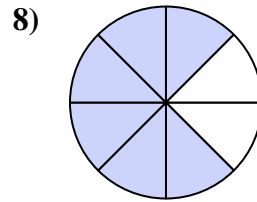
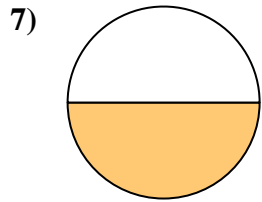
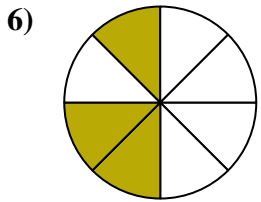
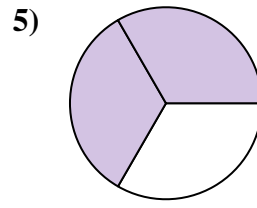
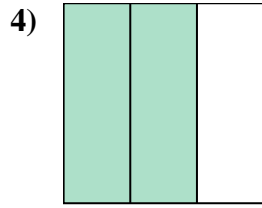
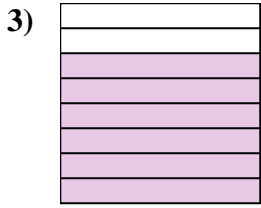
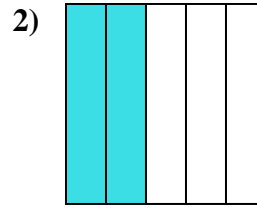
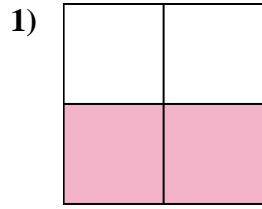
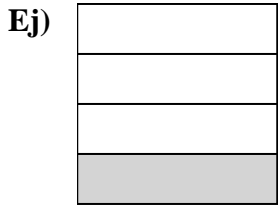




Escribe la cantidad sombreada como una fracción.



Respuestas

Ej. $\frac{1}{4}$

1. _____

2. _____

3. _____

4. _____

5. _____

6. _____

7. _____

8. _____

9. _____

10. _____

11. _____

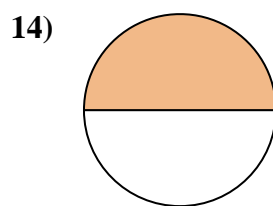
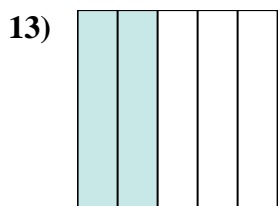
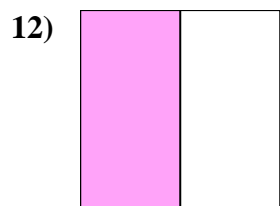

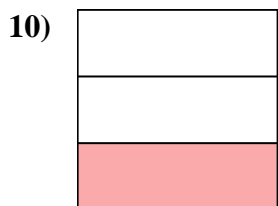
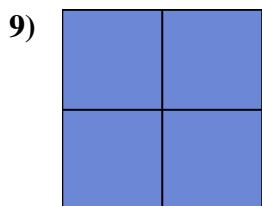
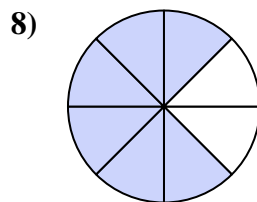
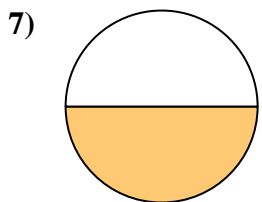
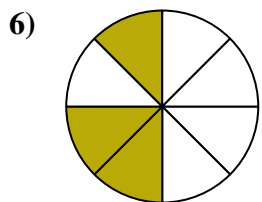
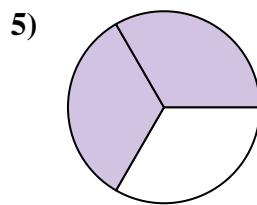
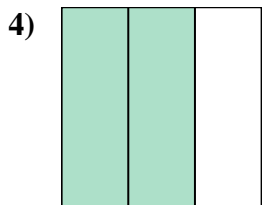
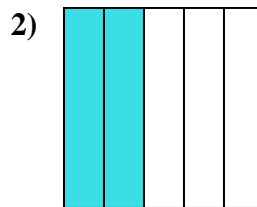
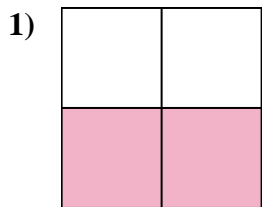
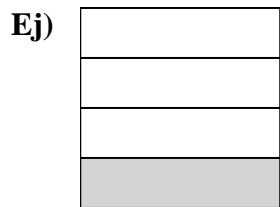
12. _____

13. _____

14. _____



Escribe la cantidad sombreada como una fracción.



Respuestas

Ej. $\frac{1}{4}$

1. $\frac{2}{4}$

2. $\frac{2}{5}$

3. $\frac{6}{8}$

4. $\frac{2}{3}$

5. $\frac{2}{3}$

6. $\frac{3}{8}$

7. $\frac{1}{2}$

8. $\frac{6}{8}$

9. $\frac{4}{4}$

10. $\frac{1}{3}$

11. $\frac{5}{5}$

12. $\frac{1}{2}$

13. $\frac{2}{5}$

14. $\frac{1}{2}$