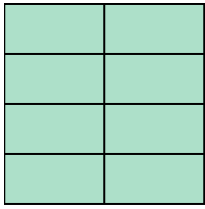





Escribe la cantidad sombreada como una fracción.

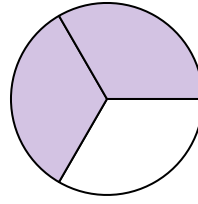
Ej)



1)



2)



**Respuestas**

Ej.  $\frac{8}{8}$

1. \_\_\_\_\_

2. \_\_\_\_\_

3. \_\_\_\_\_

4. \_\_\_\_\_

5. \_\_\_\_\_

6. \_\_\_\_\_

7. \_\_\_\_\_

8. \_\_\_\_\_

9. \_\_\_\_\_

10. \_\_\_\_\_

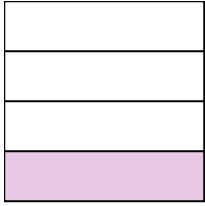
11. \_\_\_\_\_

12. \_\_\_\_\_

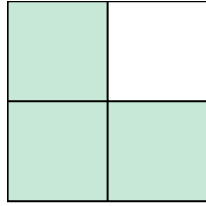
13. \_\_\_\_\_

14. \_\_\_\_\_


3)



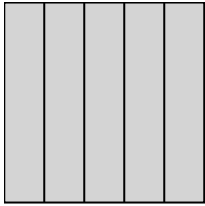
4)



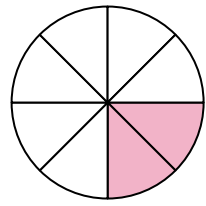
5)




6)




7)



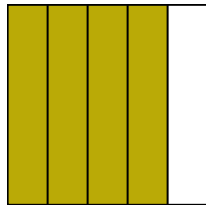
8)




9)




10)




11)




12)



13)

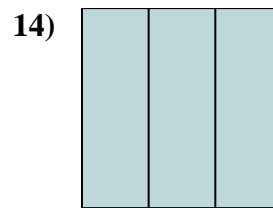
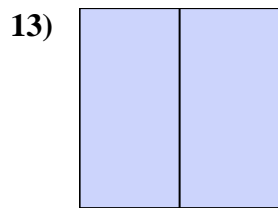
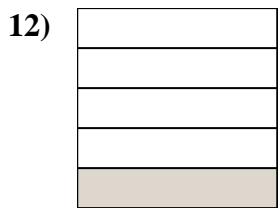
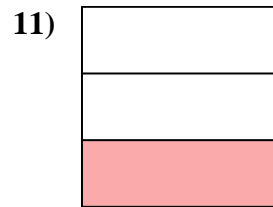
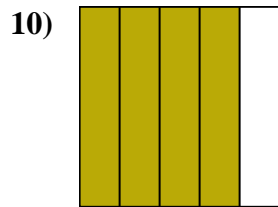
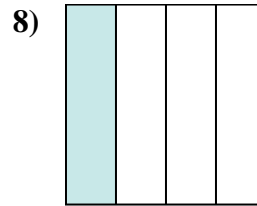
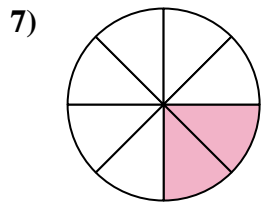
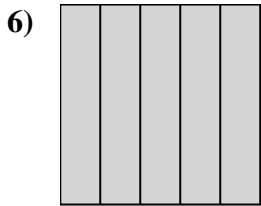
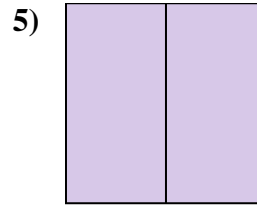
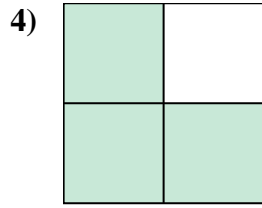
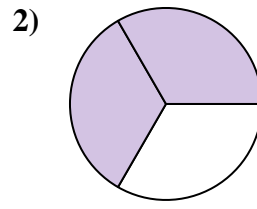
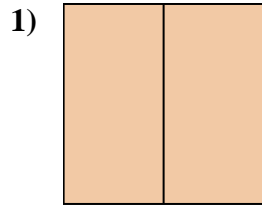
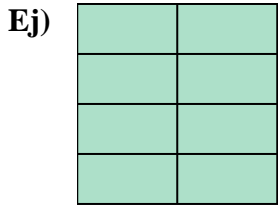


14)





Escribe la cantidad sombreada como una fracción.



**Respuestas**

Ej.  $\frac{8}{8}$

1.  $\frac{2}{2}$

2.  $\frac{2}{3}$

3.  $\frac{1}{4}$

4.  $\frac{3}{4}$

5.  $\frac{2}{2}$

6.  $\frac{5}{5}$

7.  $\frac{2}{8}$

8.  $\frac{1}{4}$

9.  $\frac{3}{8}$

10.  $\frac{4}{5}$

11.  $\frac{1}{3}$

12.  $\frac{1}{5}$

13.  $\frac{2}{2}$

14.  $\frac{3}{3}$