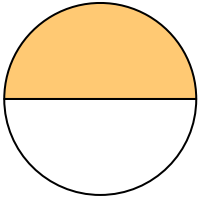





Escribe la cantidad sombreada como una fracción.

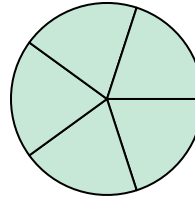
Ej)



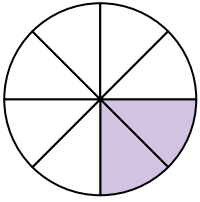
1)




2)




3)



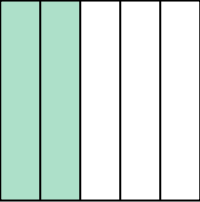
4)




5)



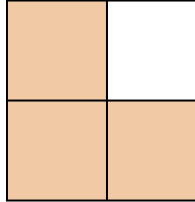
6)




7)




8)




9)



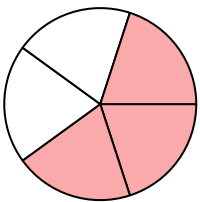
10)




11)



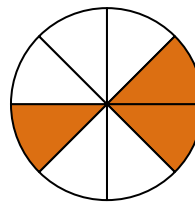
12)



13)



14)



Respuestas

Ej. $\frac{1}{2}$

1. _____

2. _____

3. _____

4. _____

5. _____

6. _____

7. _____

8. _____

9. _____

10. _____

11. _____

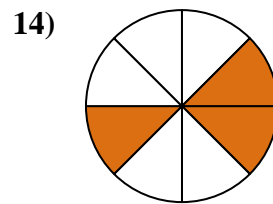
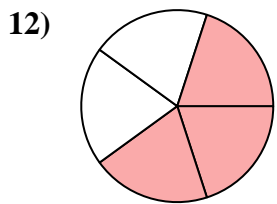
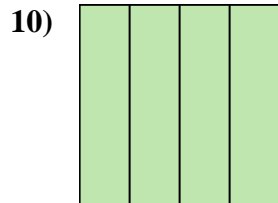

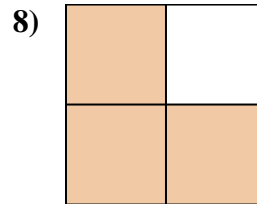
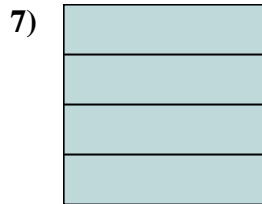
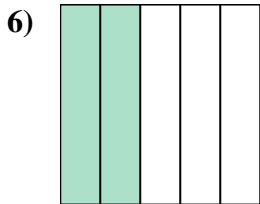
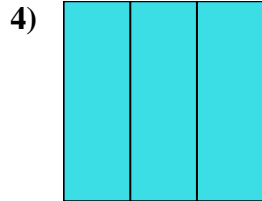
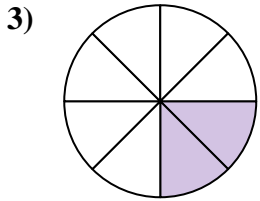
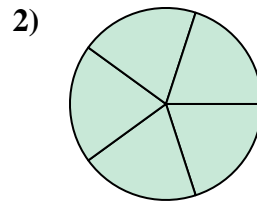
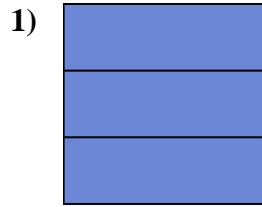
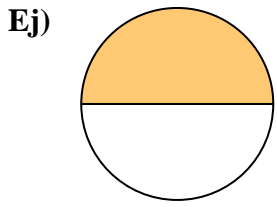
12. _____

13. _____

14. _____



Escribe la cantidad sombreada como una fracción.



Respuestas

Ej. 1/2

1. 3/3

2. 5/5

3. 2/8

4. 3/3

5. 1/8

6. 2/5

7. 4/4

8. 3/4

9. 2/2

10. 4/4

11. 3/3

12. 3/5

13. 1/2

14. 3/8