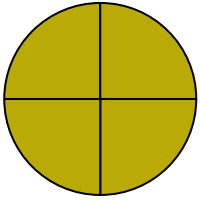


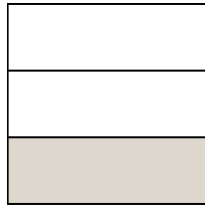


Escribe la cantidad sombreada como una fracción.

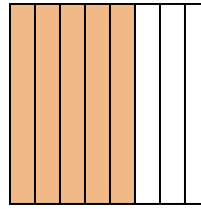
Ej)



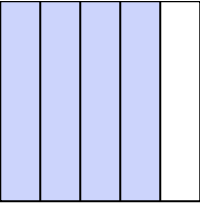
1)



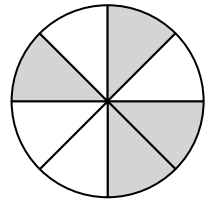
2)



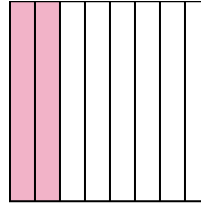
3)




4)



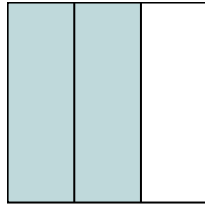
5)




6)



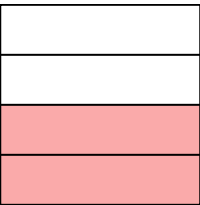
7)




8)



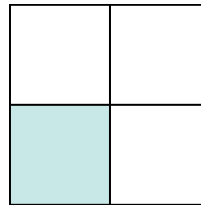
9)




10)




11)




12)



13)



14)



Respuestas

Ej. $\frac{4}{4}$

1. _____

2. _____

3. _____

4. _____

5. _____

6. _____

7. _____

8. _____

9. _____

10. _____

11. _____

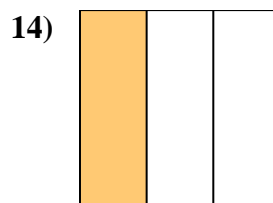

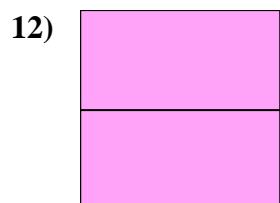
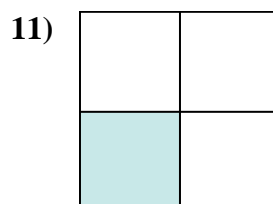
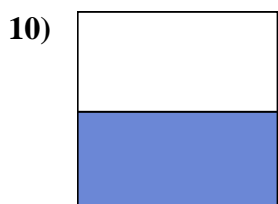
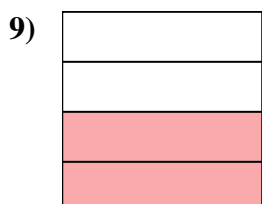
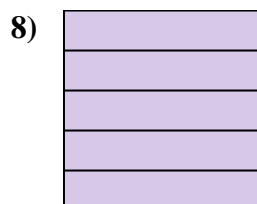
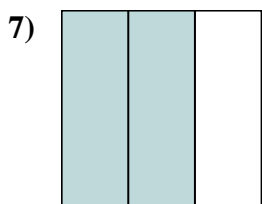

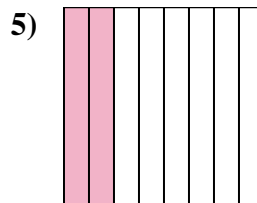
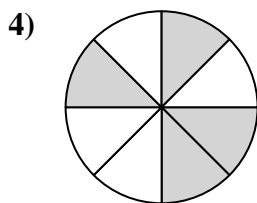
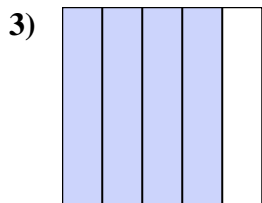
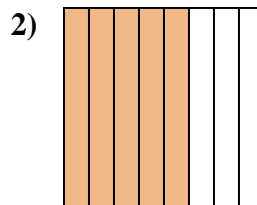
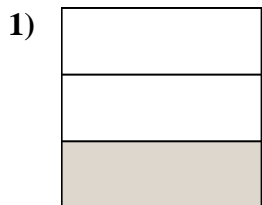
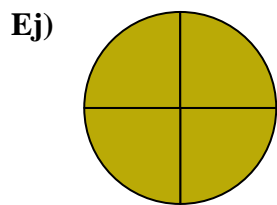
12. _____

13. _____

14. _____



Escribe la cantidad sombreada como una fracción.



Respuestas

Ej. $\frac{4}{4}$

1. $\frac{1}{3}$

2. $\frac{5}{8}$

3. $\frac{4}{5}$

4. $\frac{4}{8}$

5. $\frac{2}{8}$

6. $\frac{1}{2}$

7. $\frac{2}{3}$

8. $\frac{5}{5}$

9. $\frac{2}{4}$

10. $\frac{1}{2}$

11. $\frac{1}{4}$

12. $\frac{2}{2}$

13. $\frac{1}{5}$

14. $\frac{1}{3}$