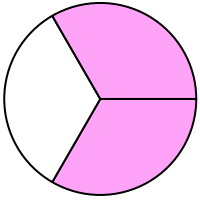


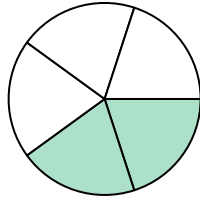


Escribe la cantidad sombreada como una fracción.

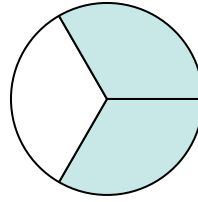
Ej)



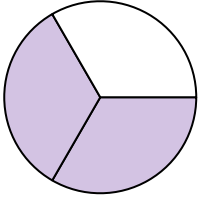
1)



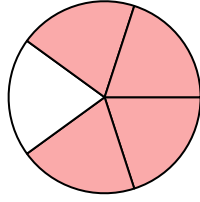
2)




3)




4)




5)




6)



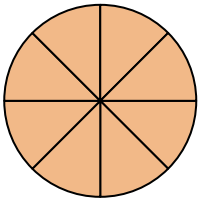
7)



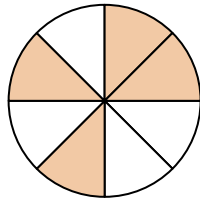
8)




9)



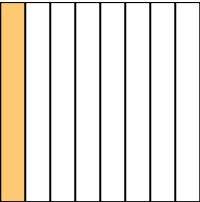
10)



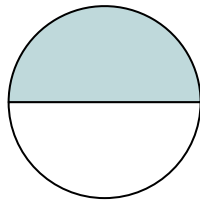
11)



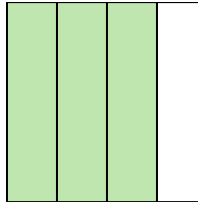
12)



13)



14)



Respuestas

Ej. $\frac{2}{3}$

1. _____

2. _____

3. _____

4. _____

5. _____

6. _____

7. _____

8. _____

9. _____

10. _____

11. _____

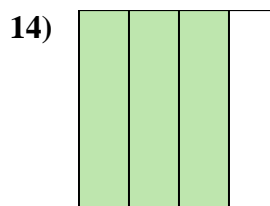
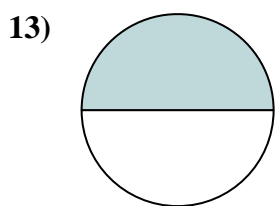
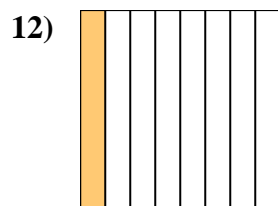
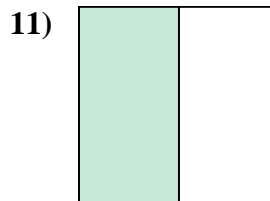
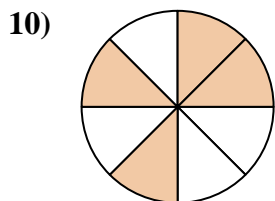
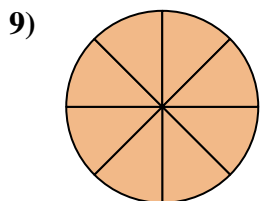
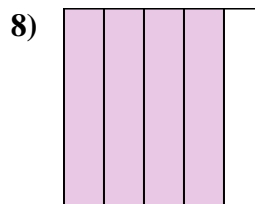
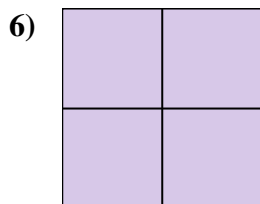
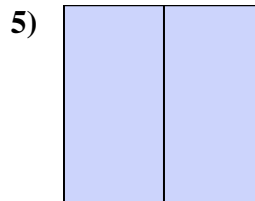
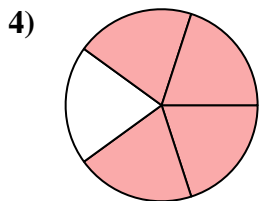
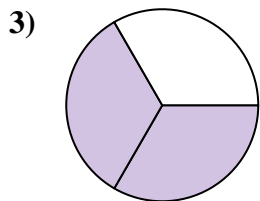
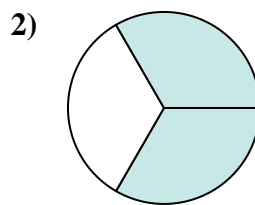
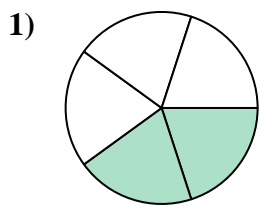
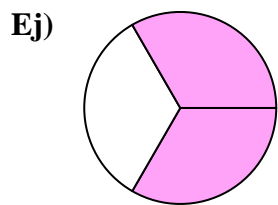
12. _____

13. _____

14. _____



Escribe la cantidad sombreada como una fracción.



Respuestas

Ej. $\frac{2}{3}$

1. $\frac{2}{5}$

2. $\frac{2}{3}$

3. $\frac{2}{3}$

4. $\frac{4}{5}$

5. $\frac{2}{2}$

6. $\frac{4}{4}$

7. $\frac{1}{4}$

8. $\frac{4}{5}$

9. $\frac{8}{8}$

10. $\frac{4}{8}$

11. $\frac{1}{2}$

12. $\frac{1}{8}$

13. $\frac{1}{2}$

14. $\frac{3}{4}$