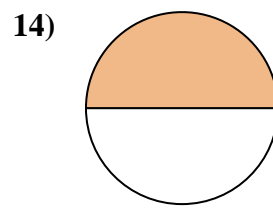
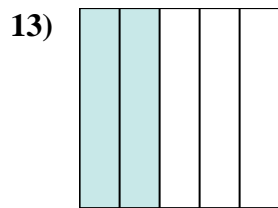
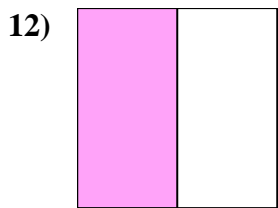

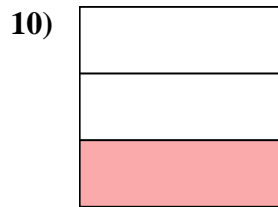
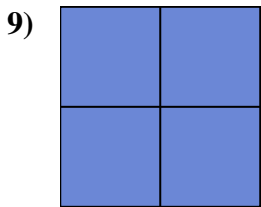
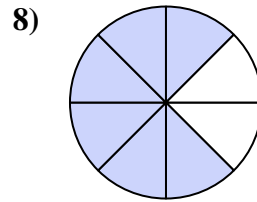
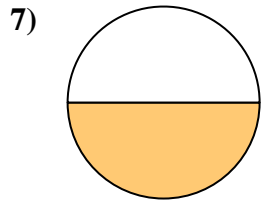
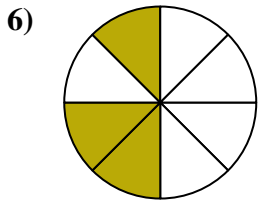
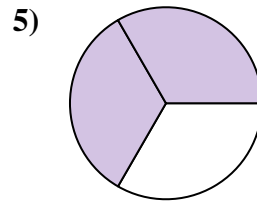
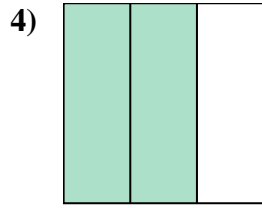
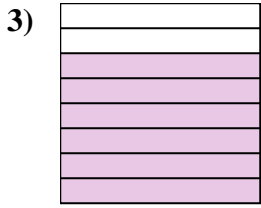
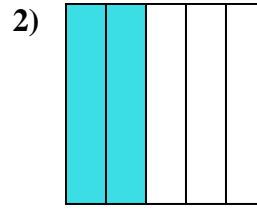
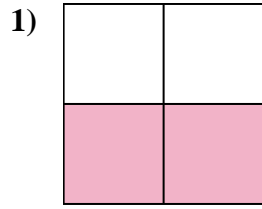
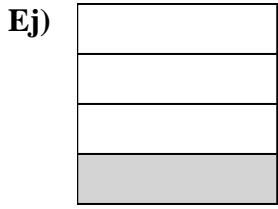




Escribe la cantidad sombreada como una fracción.



Respuestas

Ej. $\frac{1}{4}$

1. _____

2. _____

3. _____

4. _____

5. _____

6. _____

7. _____

8. _____

9. _____

10. _____

11. _____

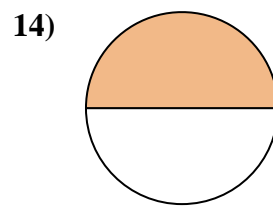
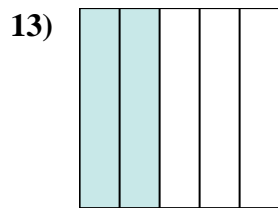
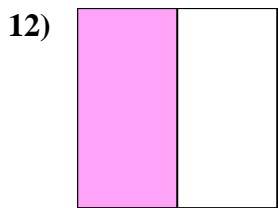

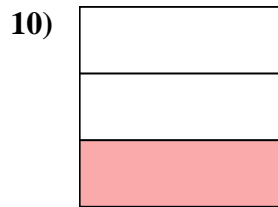
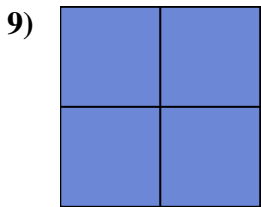
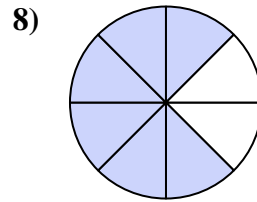
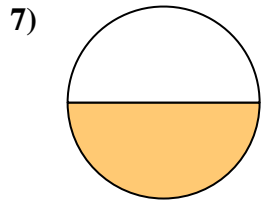
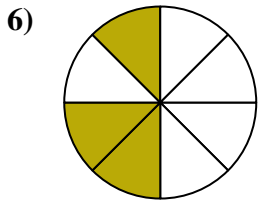
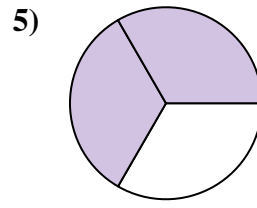
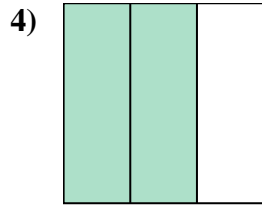
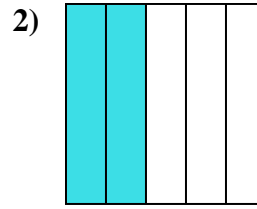
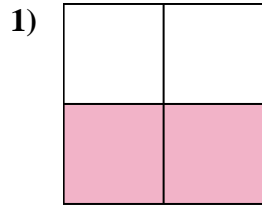
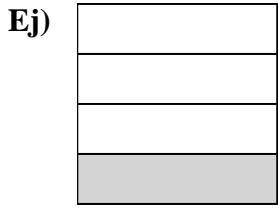
12. _____

13. _____

14. _____



Escribe la cantidad sombreada como una fracción.



Respuestas

Ej. $\frac{1}{4}$

1. $\frac{2}{4}$

2. $\frac{2}{5}$

3. $\frac{6}{8}$

4. $\frac{2}{3}$

5. $\frac{2}{3}$

6. $\frac{3}{8}$

7. $\frac{1}{2}$

8. $\frac{6}{8}$

9. $\frac{4}{4}$

10. $\frac{1}{3}$

11. $\frac{5}{5}$

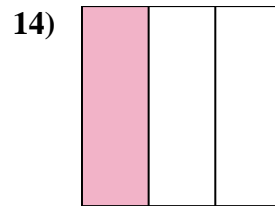
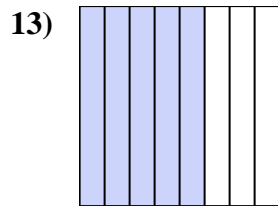
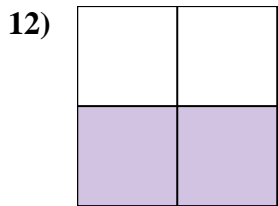
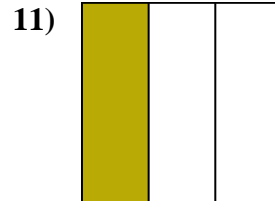
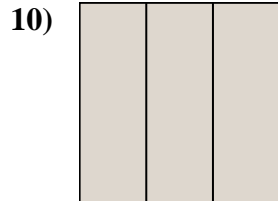
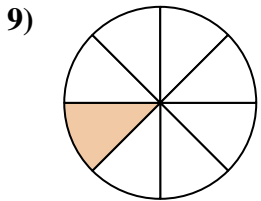
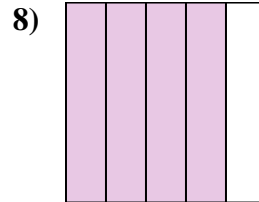
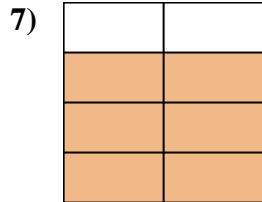
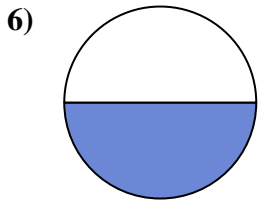
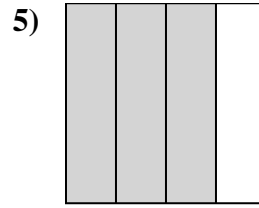
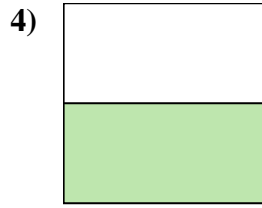
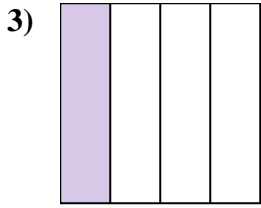
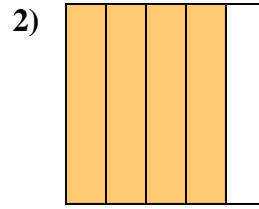
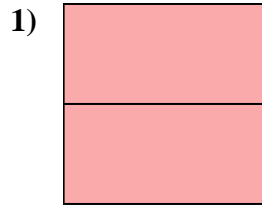
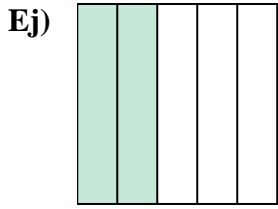
12. $\frac{1}{2}$

13. $\frac{2}{5}$

14. $\frac{1}{2}$



Escribe la cantidad sombreada como una fracción.



Respuestas

Ej. $\frac{2}{5}$

1. _____

2. _____

3. _____

4. _____

5. _____

6. _____

7. _____

8. _____

9. _____

10. _____

11. _____

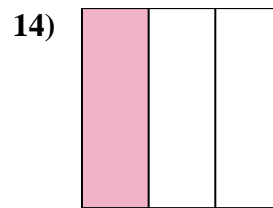
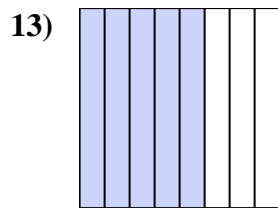
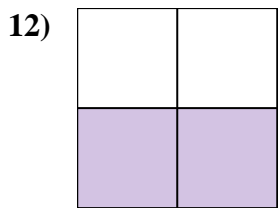
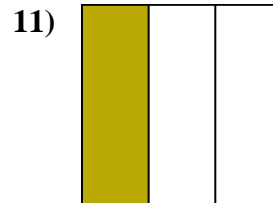
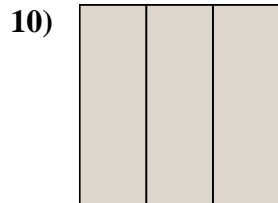
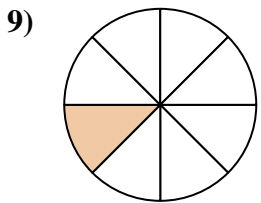
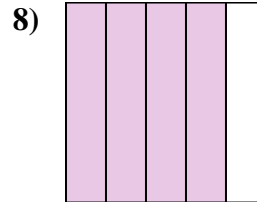
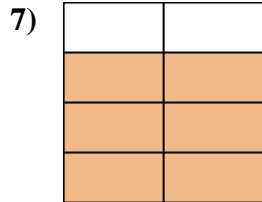
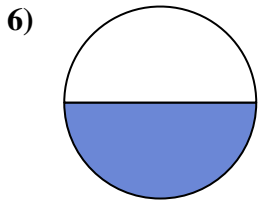
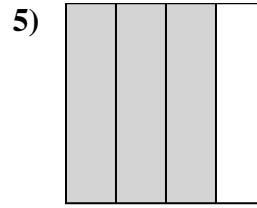
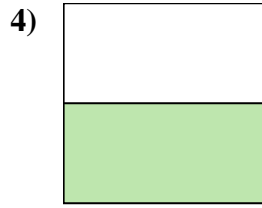
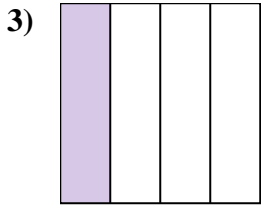
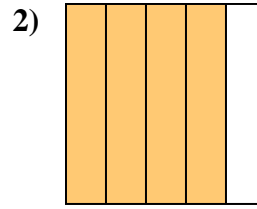
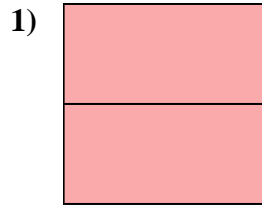
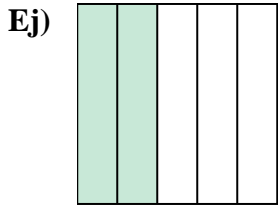
12. _____

13. _____

14. _____



Escribe la cantidad sombreada como una fracción.



Respuestas

Ej. $\frac{2}{5}$

1. $\frac{2}{2}$

2. $\frac{4}{5}$

3. $\frac{1}{4}$

4. $\frac{1}{2}$

5. $\frac{3}{4}$

6. $\frac{1}{2}$

7. $\frac{6}{8}$

8. $\frac{4}{5}$

9. $\frac{1}{8}$

10. $\frac{3}{3}$

11. $\frac{1}{3}$

12. $\frac{2}{4}$

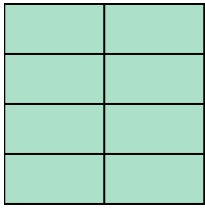
13. $\frac{5}{8}$

14. $\frac{1}{3}$




Escribe la cantidad sombreada como una fracción.

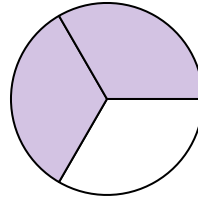
Ej)



1)



2)



Respuestas

Ej. $\frac{8}{8}$

1. _____

2. _____

3. _____

4. _____

5. _____

6. _____

7. _____

8. _____

9. _____

10. _____

11. _____

12. _____

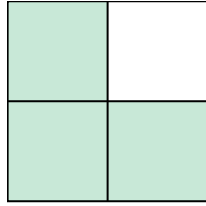
13. _____

14. _____


3)



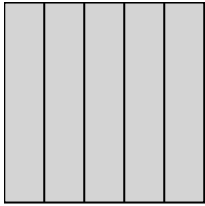
4)



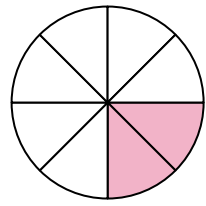
5)




6)




7)



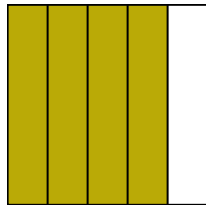
8)




9)




10)




11)




12)



13)

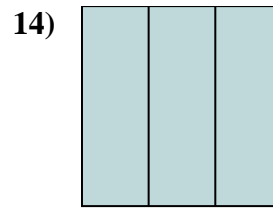
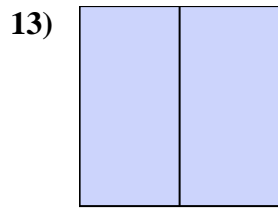
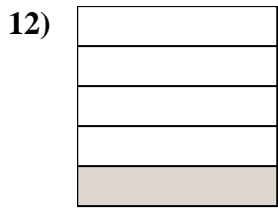
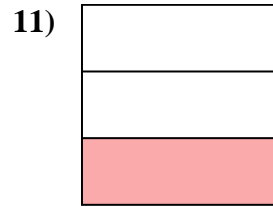
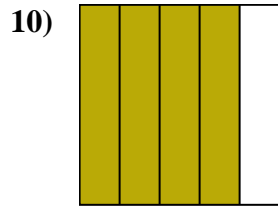
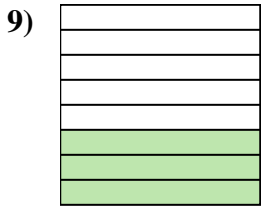
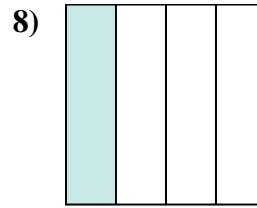
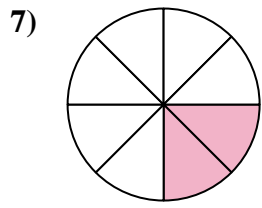
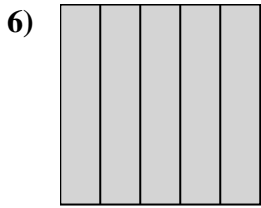
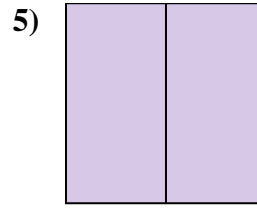
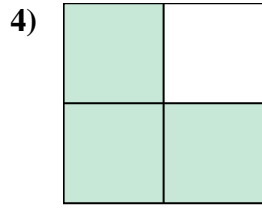
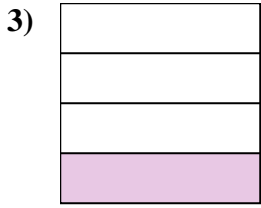
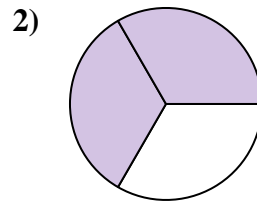
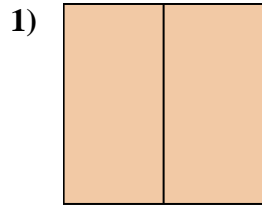
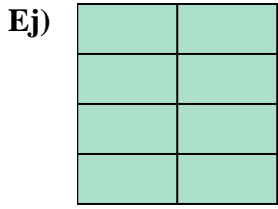


14)





Escribe la cantidad sombreada como una fracción.



Respuestas

Ej. $\frac{8}{8}$

1. $\frac{2}{2}$

2. $\frac{2}{3}$

3. $\frac{1}{4}$

4. $\frac{3}{4}$

5. $\frac{2}{2}$

6. $\frac{5}{5}$

7. $\frac{2}{8}$

8. $\frac{1}{4}$

9. $\frac{3}{8}$

10. $\frac{4}{5}$

11. $\frac{1}{3}$

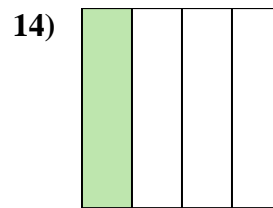
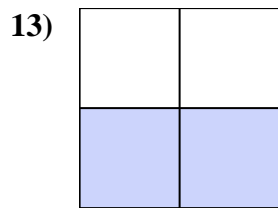
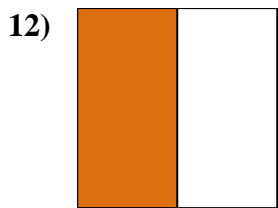
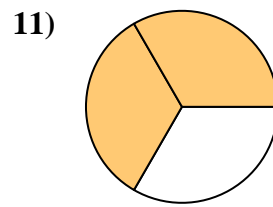
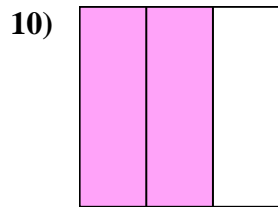
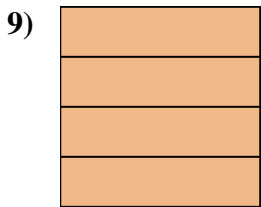
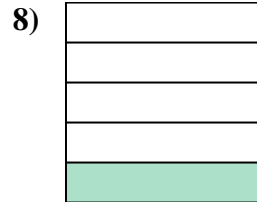
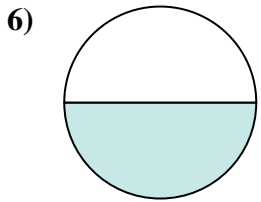
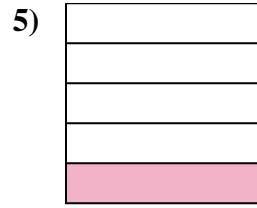
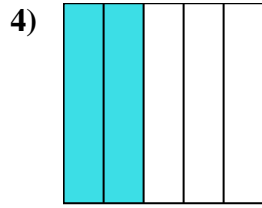
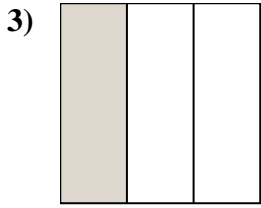
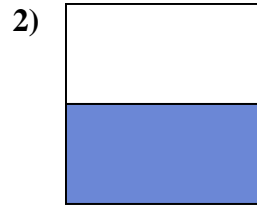
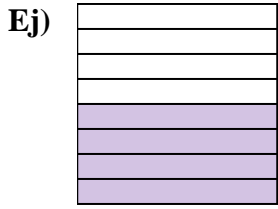
12. $\frac{1}{5}$

13. $\frac{2}{2}$

14. $\frac{3}{3}$



Escribe la cantidad sombreada como una fracción.



Respuestas

Ej. $\frac{4}{8}$

1. _____

2. _____

3. _____

4. _____

5. _____

6. _____

7. _____

8. _____

9. _____

10. _____

11. _____

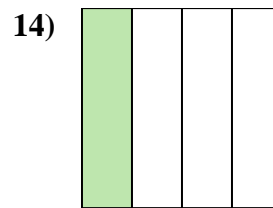
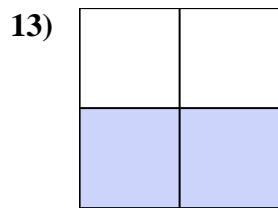
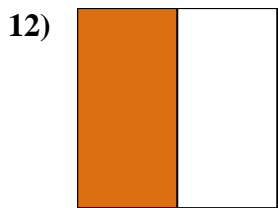
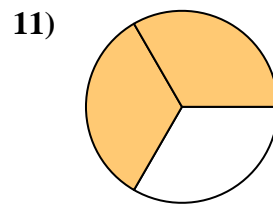
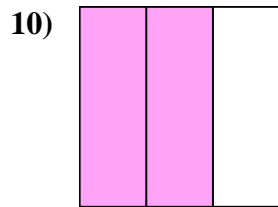
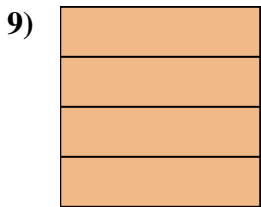
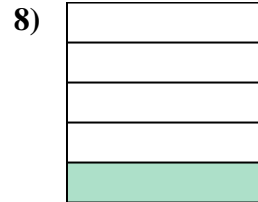
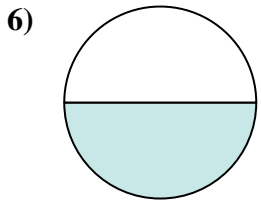
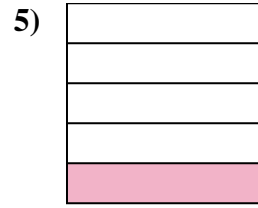
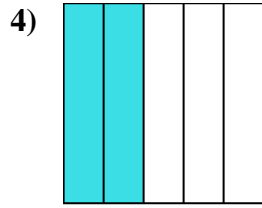
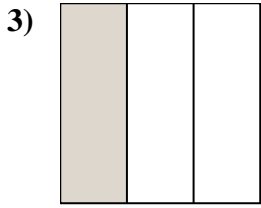
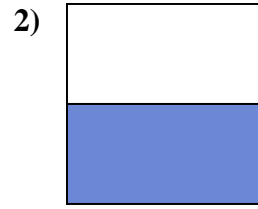
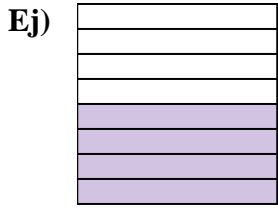
12. _____

13. _____

14. _____



Escribe la cantidad sombreada como una fracción.



Respuestas

Ej. $\frac{4}{8}$

1. $\frac{2}{8}$

2. $\frac{1}{2}$

3. $\frac{1}{3}$

4. $\frac{2}{5}$

5. $\frac{1}{5}$

6. $\frac{1}{2}$

7. $\frac{1}{8}$

8. $\frac{1}{5}$

9. $\frac{4}{4}$

10. $\frac{2}{3}$

11. $\frac{2}{3}$

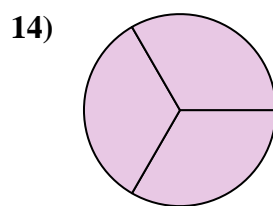
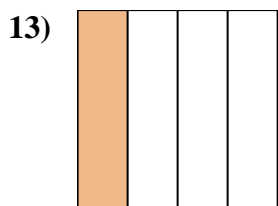
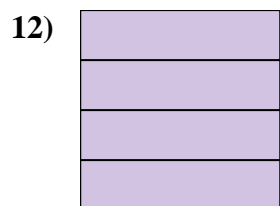
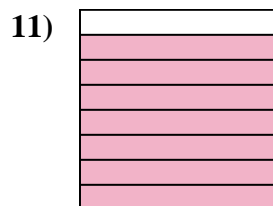
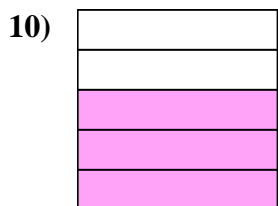
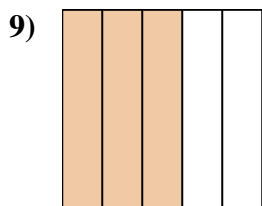
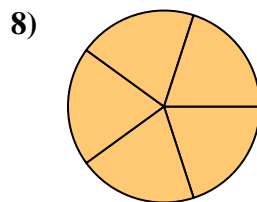
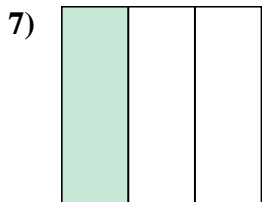
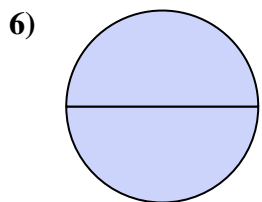
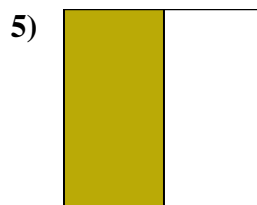
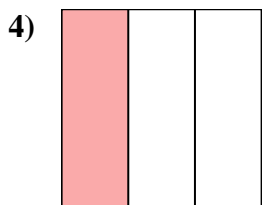
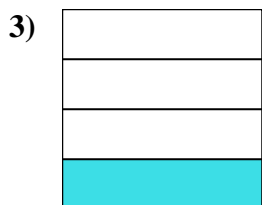

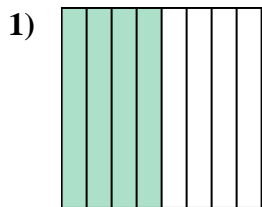
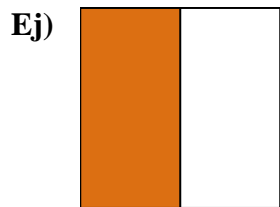
12. $\frac{1}{2}$

13. $\frac{2}{4}$

14. $\frac{1}{4}$



Escribe la cantidad sombreada como una fracción.



Respuestas

Ej. $\frac{1}{2}$

1. _____

2. _____

3. _____

4. _____

5. _____

6. _____

7. _____

8. _____

9. _____

10. _____

11. _____

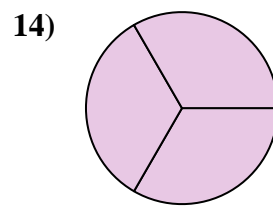
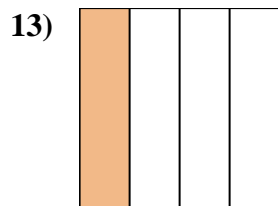
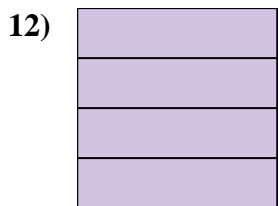
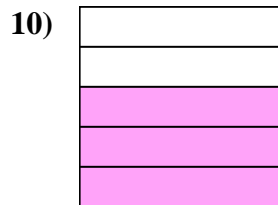
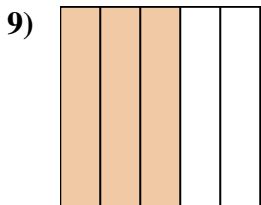
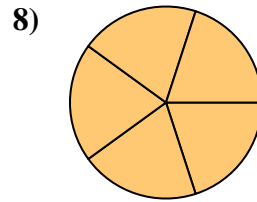
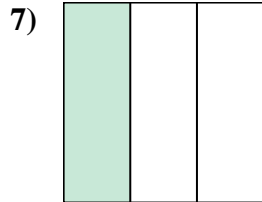
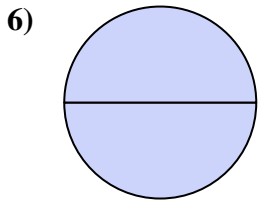
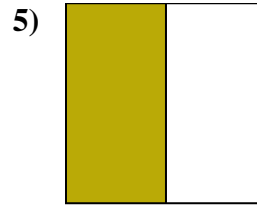
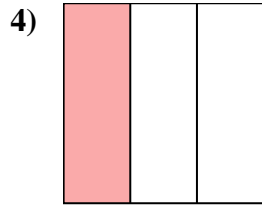
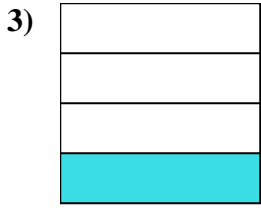
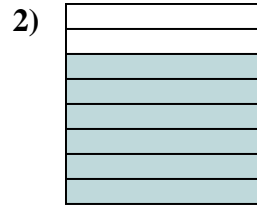
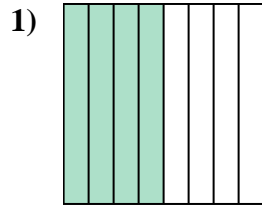
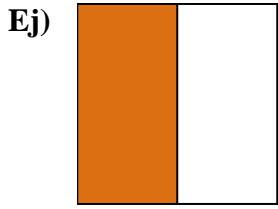
12. _____

13. _____

14. _____



Escribe la cantidad sombreada como una fracción.



Respuestas

Ej. $\frac{1}{2}$

1. $\frac{4}{8}$

2. $\frac{6}{8}$

3. $\frac{1}{4}$

4. $\frac{1}{3}$

5. $\frac{1}{2}$

6. $\frac{2}{2}$

7. $\frac{1}{3}$

8. $\frac{5}{5}$

9. $\frac{3}{5}$

10. $\frac{3}{5}$

11. $\frac{7}{8}$

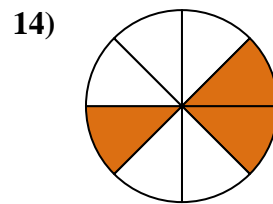
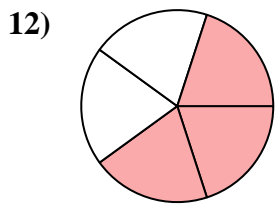
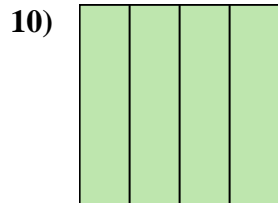

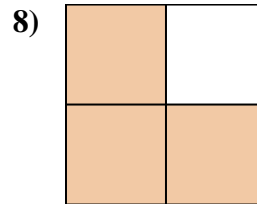
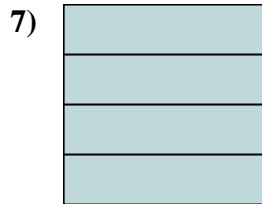
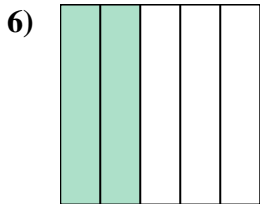
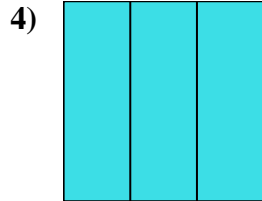
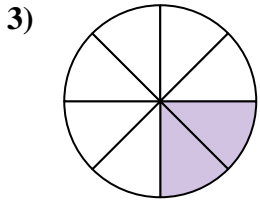
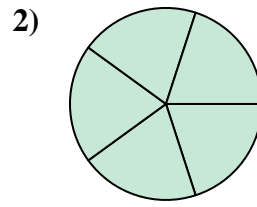
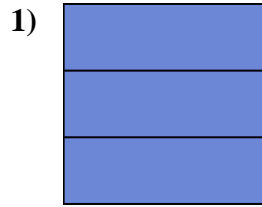
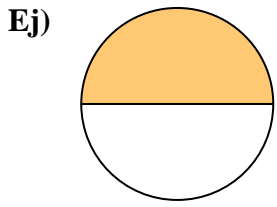
12. $\frac{4}{4}$

13. $\frac{1}{4}$

14. $\frac{3}{3}$



Escribe la cantidad sombreada como una fracción.



Respuestas

Ej. $\frac{1}{2}$

1. _____

2. _____

3. _____

4. _____

5. _____

6. _____

7. _____

8. _____

9. _____

10. _____

11. _____

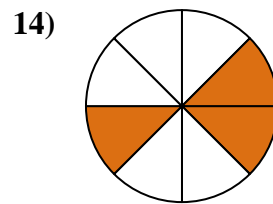
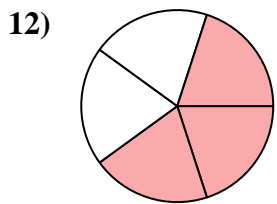
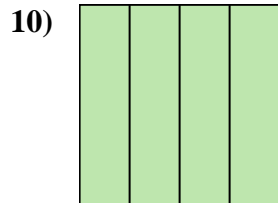

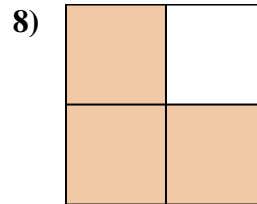
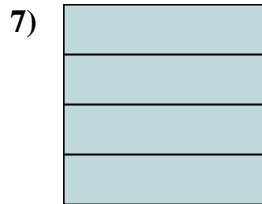
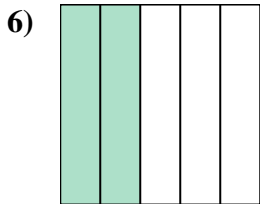
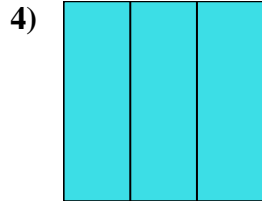
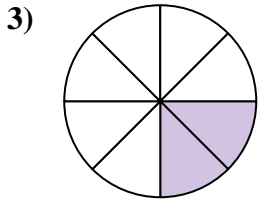
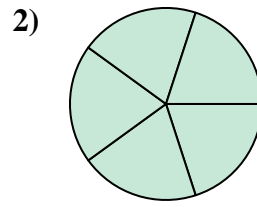
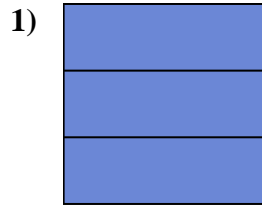
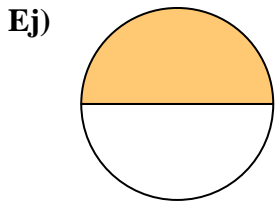
12. _____

13. _____

14. _____



Escribe la cantidad sombreada como una fracción.



Respuestas

Ej. $\frac{1}{2}$

1. $\frac{3}{3}$

2. $\frac{5}{5}$

3. $\frac{2}{8}$

4. $\frac{3}{3}$

5. $\frac{1}{8}$

6. $\frac{2}{5}$

7. $\frac{4}{4}$

8. $\frac{3}{4}$

9. $\frac{2}{2}$

10. $\frac{4}{4}$

11. $\frac{3}{3}$

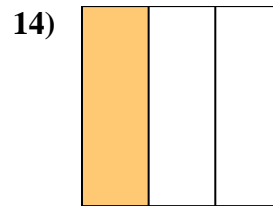
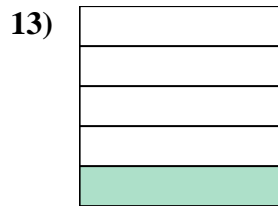
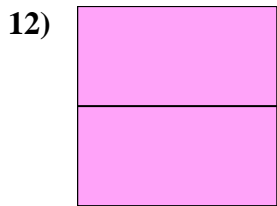
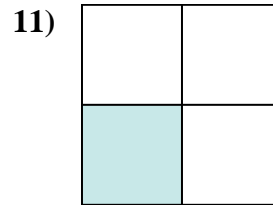
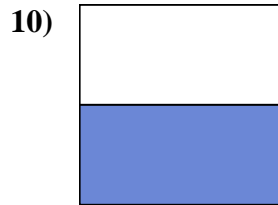
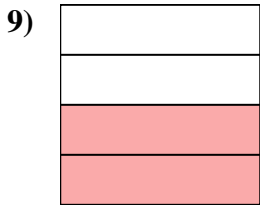
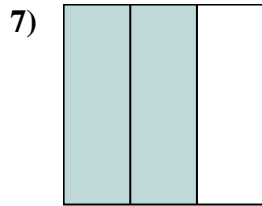
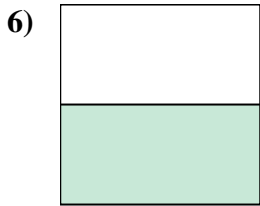
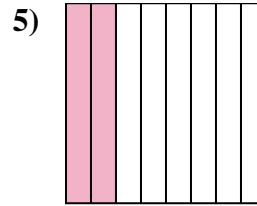
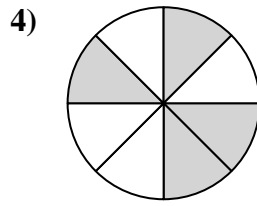
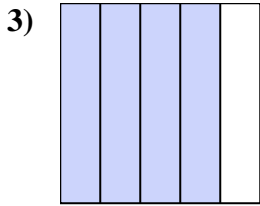
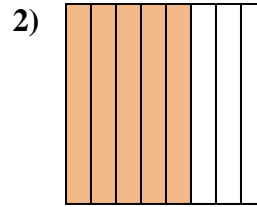
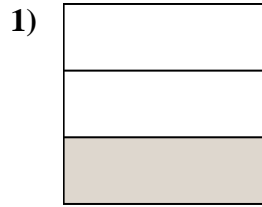
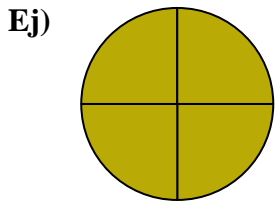
12. $\frac{3}{5}$

13. $\frac{1}{2}$

14. $\frac{3}{8}$



Escribe la cantidad sombreada como una fracción.



Respuestas

Ej. $\frac{4}{4}$

1. _____

2. _____

3. _____

4. _____

5. _____

6. _____

7. _____

8. _____

9. _____

10. _____

11. _____

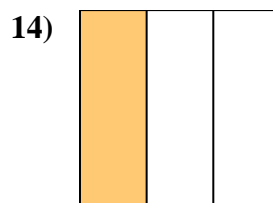

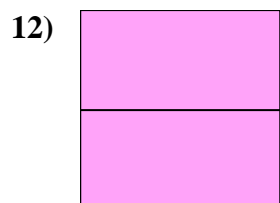
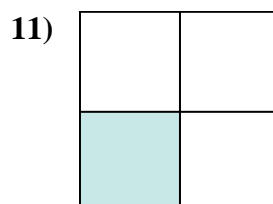
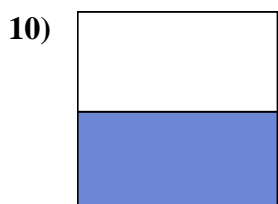
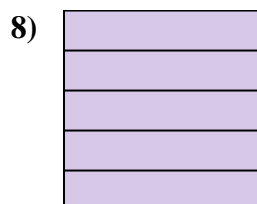
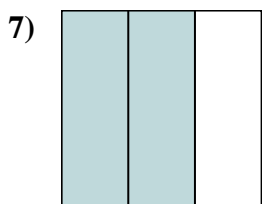

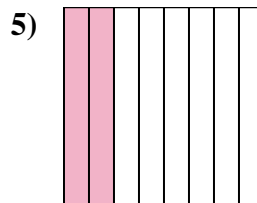
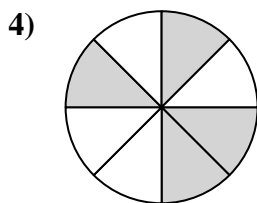
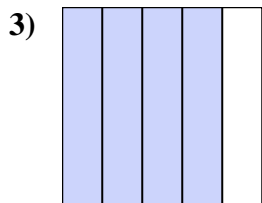
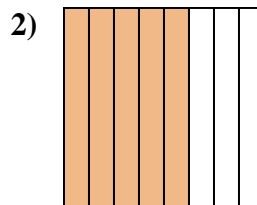
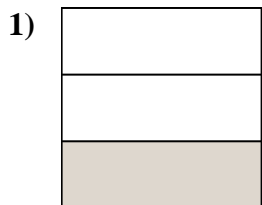
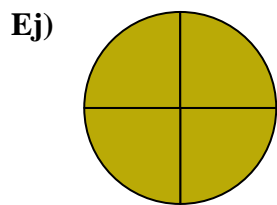
12. _____

13. _____

14. _____



Escribe la cantidad sombreada como una fracción.



Respuestas

Ej. 4/4

1. 1/3

2. 5/8

3. 4/5

4. 4/8

5. 2/8

6. 1/2

7. 2/3

8. 5/5

9. 2/4

10. 1/2

11. 1/4

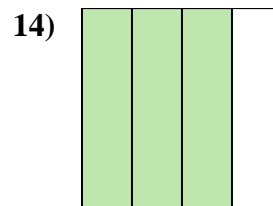
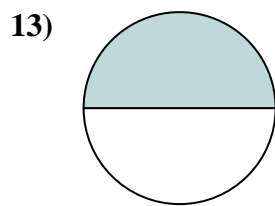
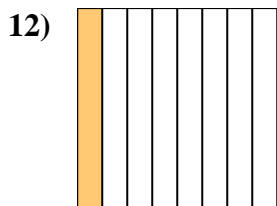
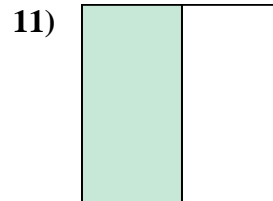
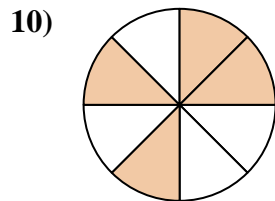
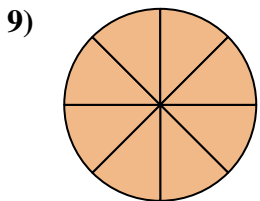
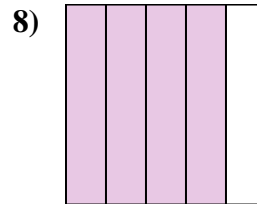
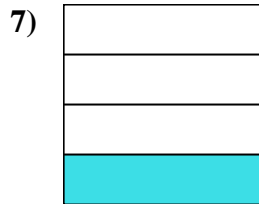
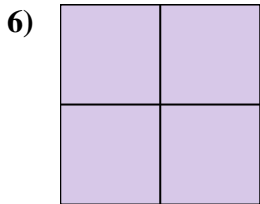
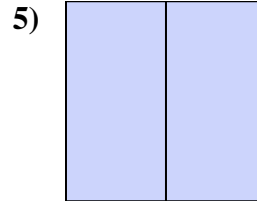
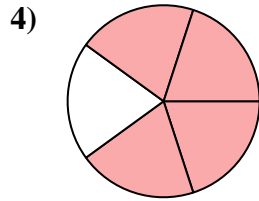
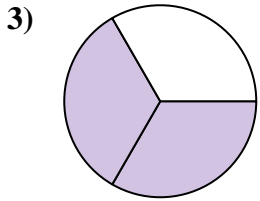
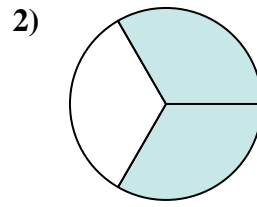
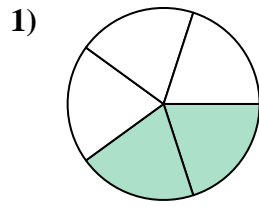
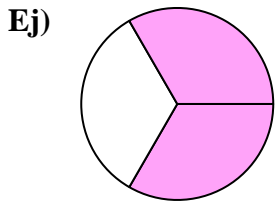
12. 2/2

13. 1/5

14. 1/3



Escribe la cantidad sombreada como una fracción.



Respuestas

Ej. $\frac{2}{3}$

1. _____

2. _____

3. _____

4. _____

5. _____

6. _____

7. _____

8. _____

9. _____

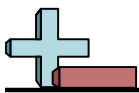
10. _____

11. _____

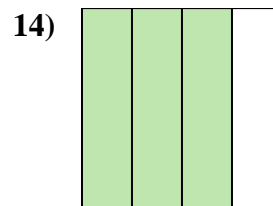
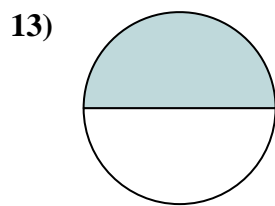
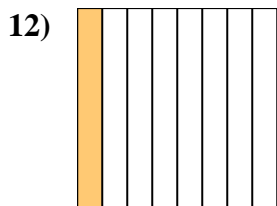
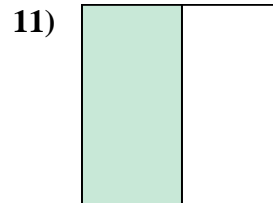
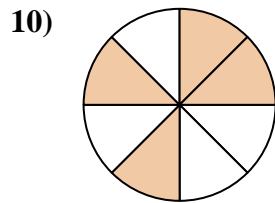
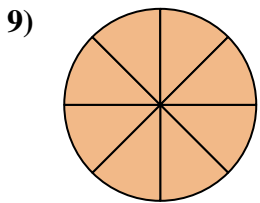
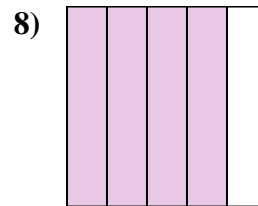
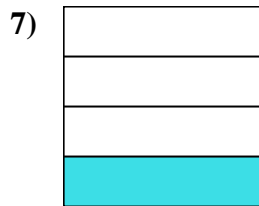
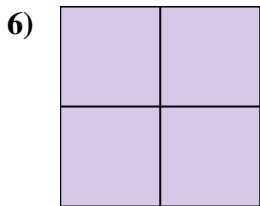
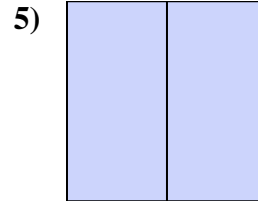
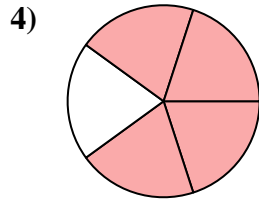
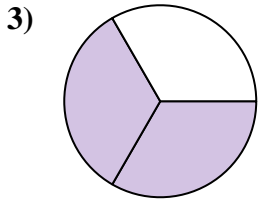
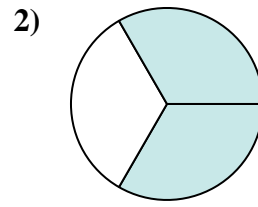
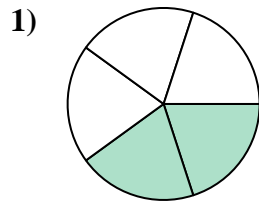
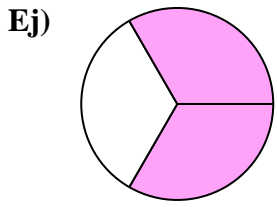
12. _____

13. _____

14. _____



Escribe la cantidad sombreada como una fracción.



Respuestas

Ej. $\frac{2}{3}$

1. $\frac{2}{5}$

2. $\frac{2}{3}$

3. $\frac{2}{3}$

4. $\frac{4}{5}$

5. $\frac{2}{2}$

6. $\frac{4}{4}$

7. $\frac{1}{4}$

8. $\frac{4}{5}$

9. $\frac{8}{8}$

10. $\frac{4}{8}$

11. $\frac{1}{2}$

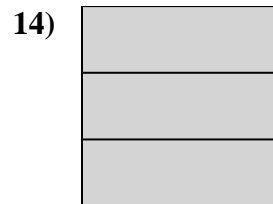

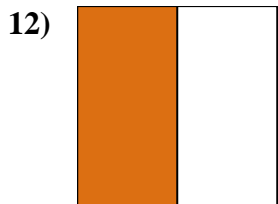
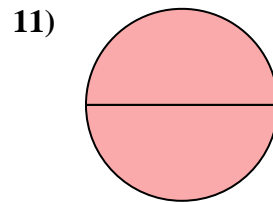
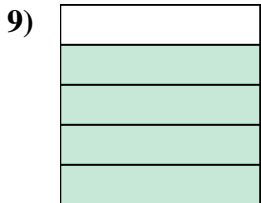
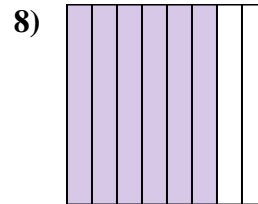
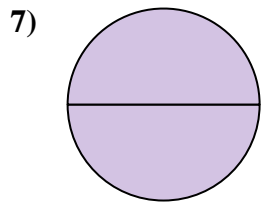
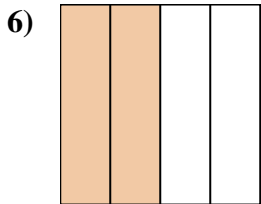
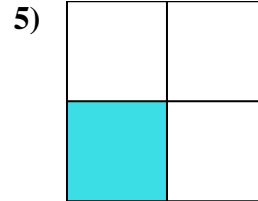
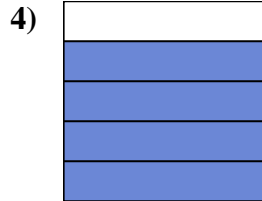
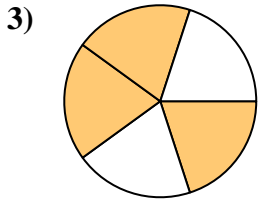
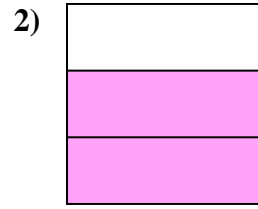
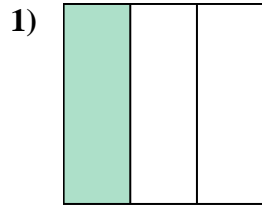
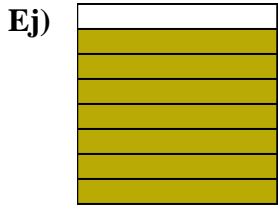
12. $\frac{1}{8}$

13. $\frac{1}{2}$

14. $\frac{3}{4}$



Escribe la cantidad sombreada como una fracción.



Respuestas

Ej. $\frac{7}{8}$

1. _____

2. _____

3. _____

4. _____

5. _____

6. _____

7. _____

8. _____

9. _____

10. _____

11. _____

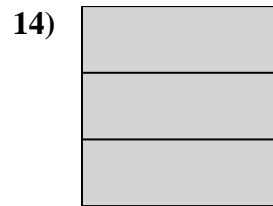

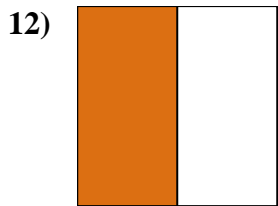
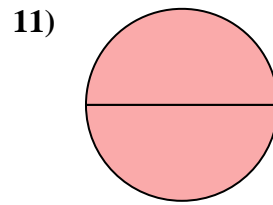
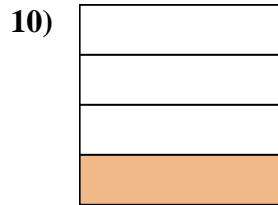
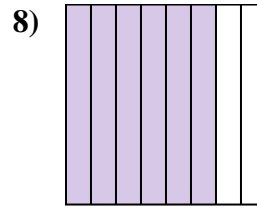
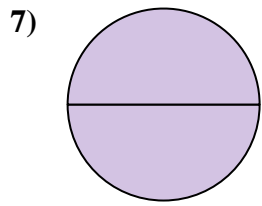
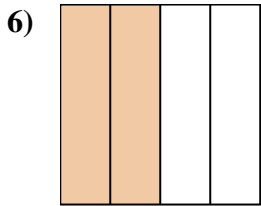
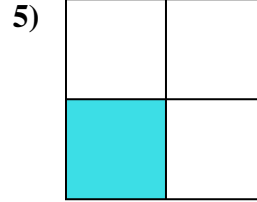
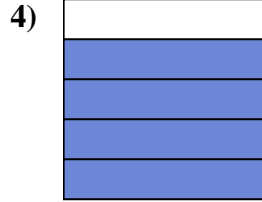
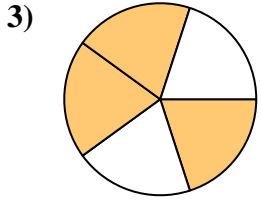
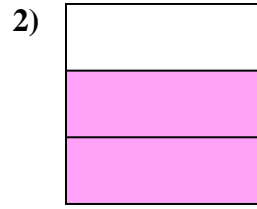
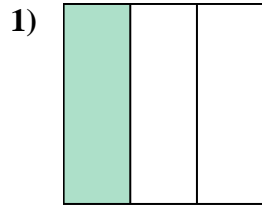
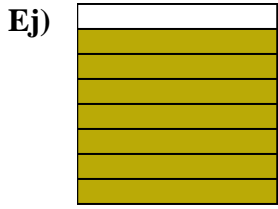
12. _____

13. _____

14. _____



Escribe la cantidad sombreada como una fracción.



Respuestas

Ej. $\frac{7}{8}$

1. $\frac{1}{3}$

2. $\frac{2}{3}$

3. $\frac{3}{5}$

4. $\frac{4}{5}$

5. $\frac{1}{4}$

6. $\frac{2}{4}$

7. $\frac{2}{2}$

8. $\frac{6}{8}$

9. $\frac{4}{5}$

10. $\frac{1}{4}$

11. $\frac{2}{2}$

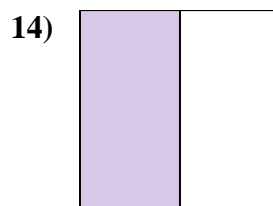
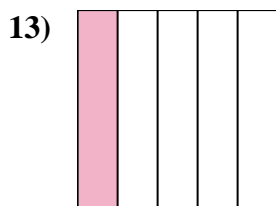
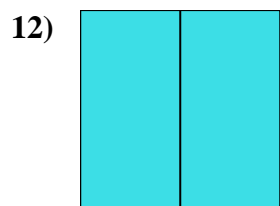
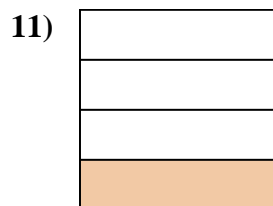
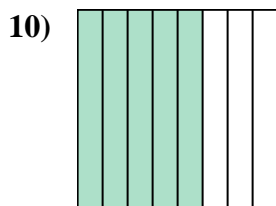
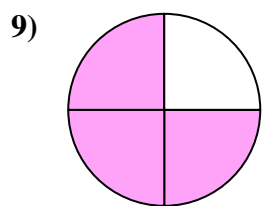
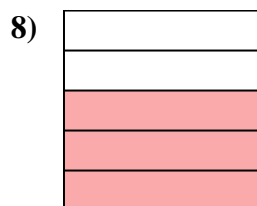
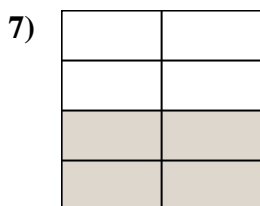
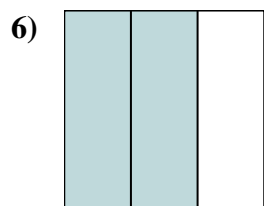
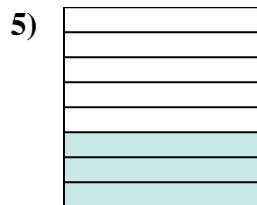
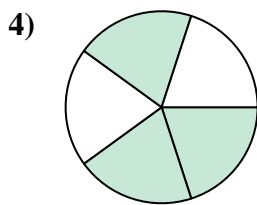
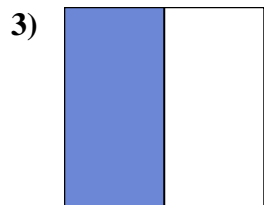
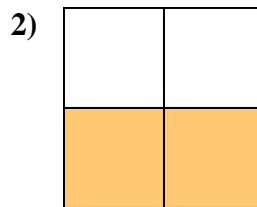

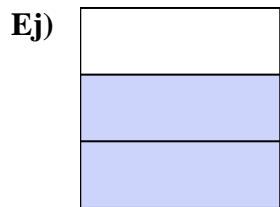
12. $\frac{1}{2}$

13. $\frac{5}{8}$

14. $\frac{3}{3}$



Escribe la cantidad sombreada como una fracción.



Respuestas

Ej. $\frac{2}{3}$

1. _____

2. _____

3. _____

4. _____

5. _____

6. _____

7. _____

8. _____

9. _____

10. _____

11. _____

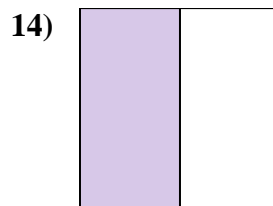
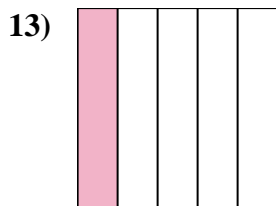
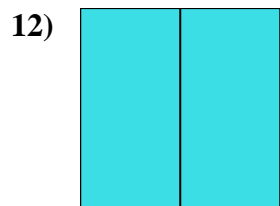
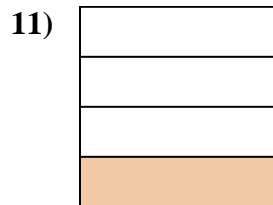
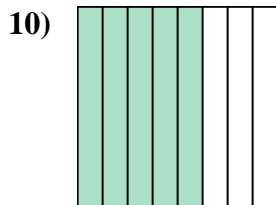
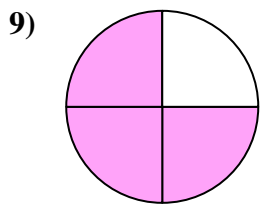
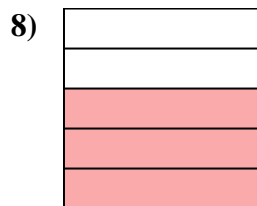
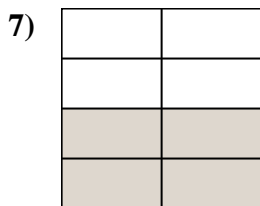
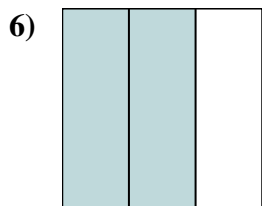
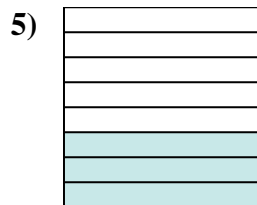
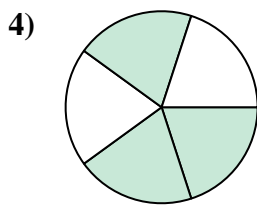
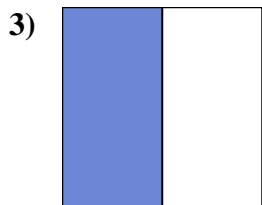
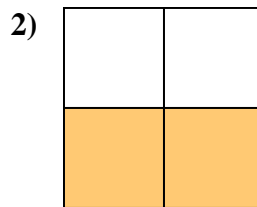

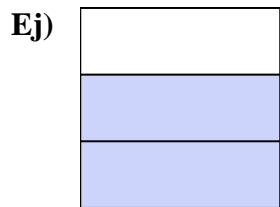
12. _____

13. _____

14. _____



Escribe la cantidad sombreada como una fracción.



Respuestas

Ej. $\frac{2}{3}$

1. $\frac{3}{3}$

2. $\frac{2}{4}$

3. $\frac{1}{2}$

4. $\frac{3}{5}$

5. $\frac{3}{8}$

6. $\frac{2}{3}$

7. $\frac{4}{8}$

8. $\frac{3}{5}$

9. $\frac{3}{4}$

10. $\frac{5}{8}$

11. $\frac{1}{4}$

12. $\frac{2}{2}$

13. $\frac{1}{5}$

14. $\frac{1}{2}$