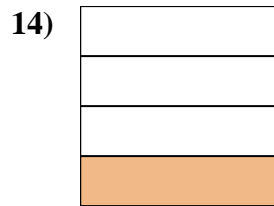
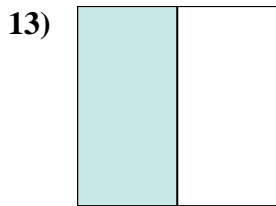
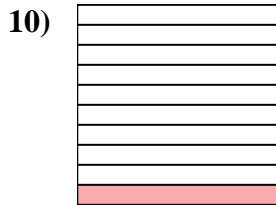
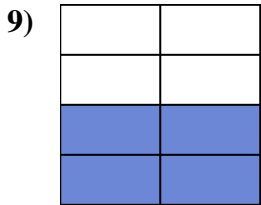
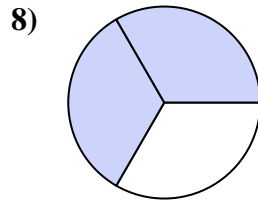
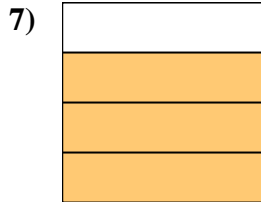
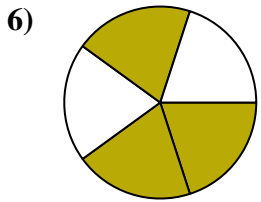
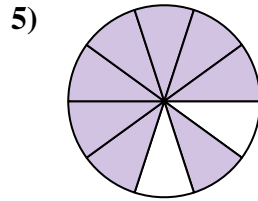
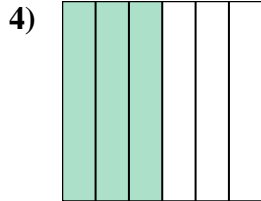
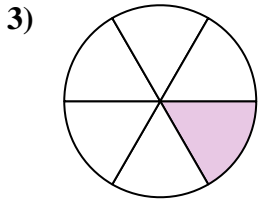

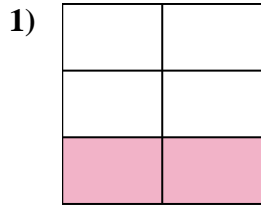
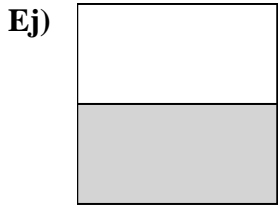




Escribe la cantidad sombreada en forma escrita.



Respuestas

Ej. una mitad

1. _____

2. _____

3. _____

4. _____

5. _____

6. _____

7. _____

8. _____

9. _____

10. _____

11. _____

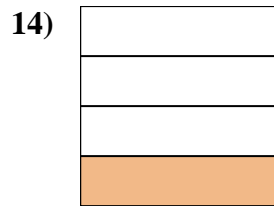
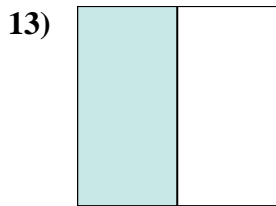
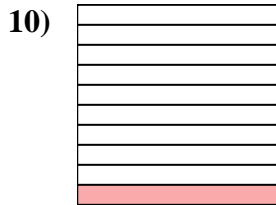
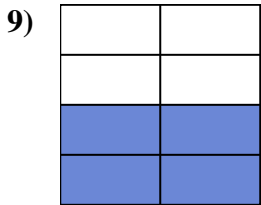
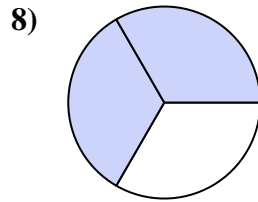
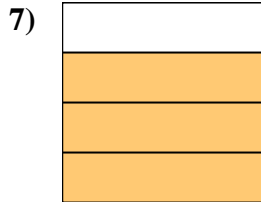
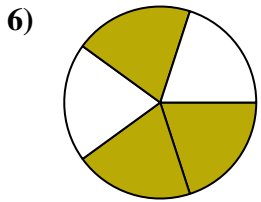
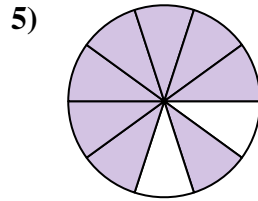
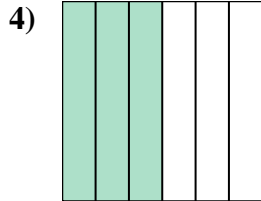
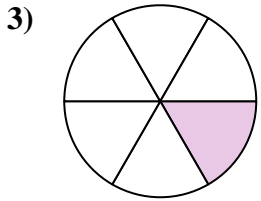

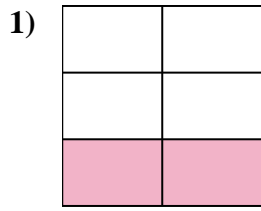
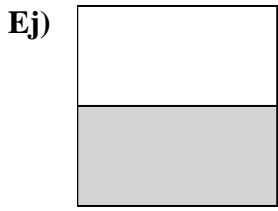
12. _____

13. _____

14. _____



Escriba la cantidad sombreada en forma escrita.



Respuestas

Ej. una mitad

1. dos quintas partes

2. dos novenos

3. un sexto

4. tres sextos

5. ocho décimas

6. tres quintos

7. tres cuartos

8. dos tercios

9. cuatro séptimos

10. una décima parte

11. dos tercios

12. cuatro octavos

13. una mitad

14. un cuarto