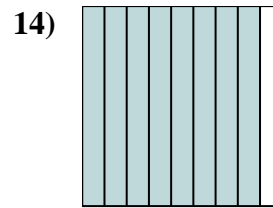
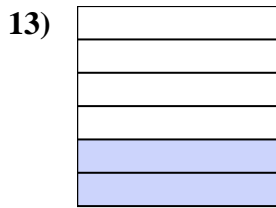
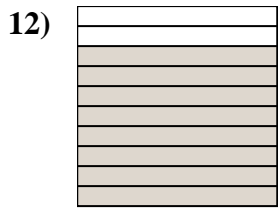
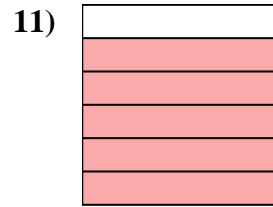
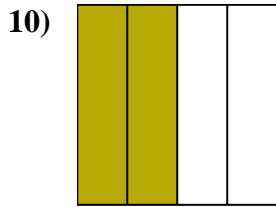
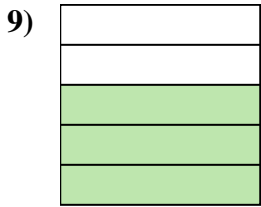
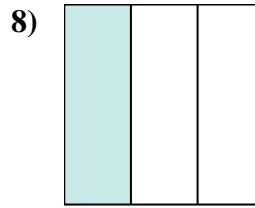
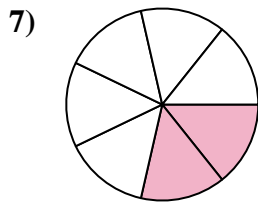
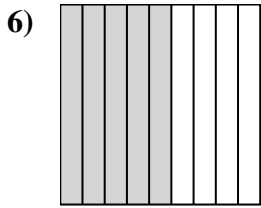
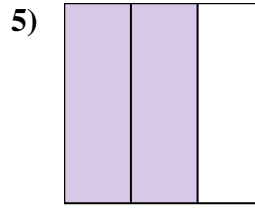
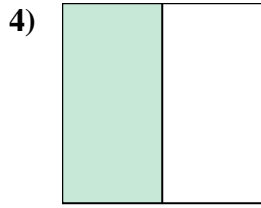
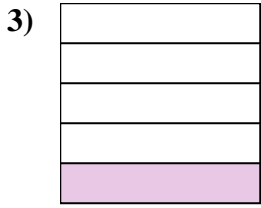
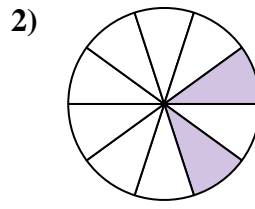
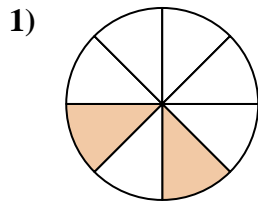
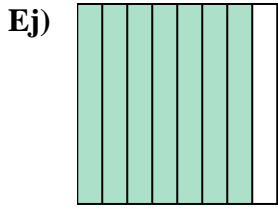




Escriba la cantidad sombreada en forma escrita.



**Respuestas**

Ej. siete octavos

1. \_\_\_\_\_

2. \_\_\_\_\_

3. \_\_\_\_\_

4. \_\_\_\_\_

5. \_\_\_\_\_

6. \_\_\_\_\_

7. \_\_\_\_\_

8. \_\_\_\_\_

9. \_\_\_\_\_

10. \_\_\_\_\_

11. \_\_\_\_\_

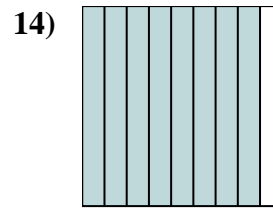
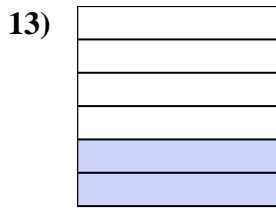
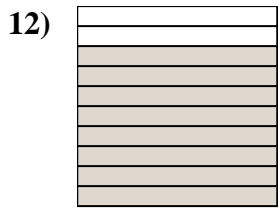
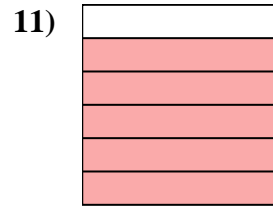
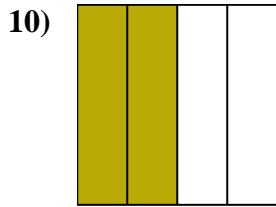
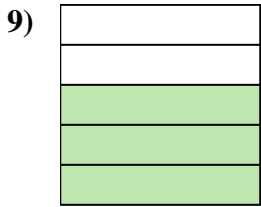
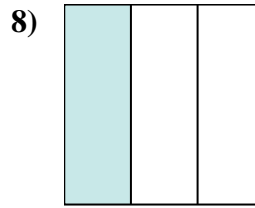
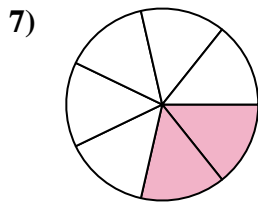
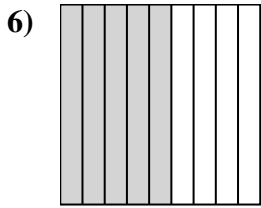
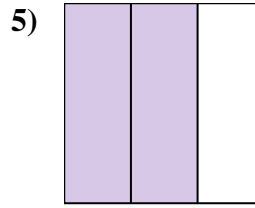
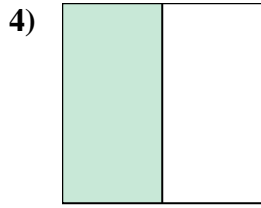
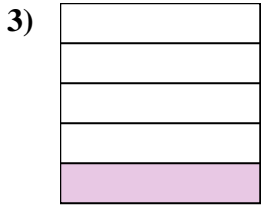
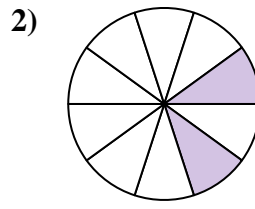
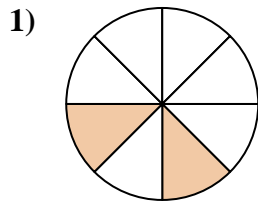
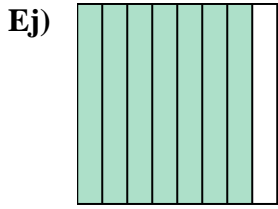
12. \_\_\_\_\_

13. \_\_\_\_\_

14. \_\_\_\_\_



Escriba la cantidad sombreada en forma escrita.



**Respuestas**

Ej. siete octavos

1. dos octavos

2. dos décimas

3. un quinto

4. una mitad

5. dos tercios

6. cinco novenos

7. dos séptimos

8. un tercio

9. tres quintos

10. dos cuartos

11. cinco sextos

12. ocho décimas

13. dos sextos

14. ocho novenos