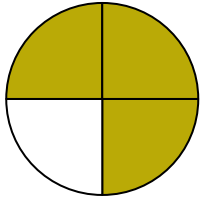





Escribe la cantidad sombreada en forma escrita.

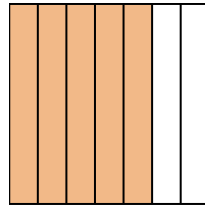
Ej)



1)



2)



**Respuestas**

Ej. **tres cuartos**

1. \_\_\_\_\_

2. \_\_\_\_\_

3. \_\_\_\_\_

4. \_\_\_\_\_

5. \_\_\_\_\_

6. \_\_\_\_\_

7. \_\_\_\_\_

8. \_\_\_\_\_

9. \_\_\_\_\_

10. \_\_\_\_\_


11. \_\_\_\_\_

12. \_\_\_\_\_

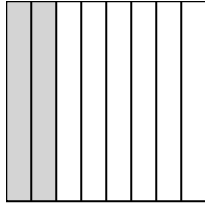
13. \_\_\_\_\_

14. \_\_\_\_\_

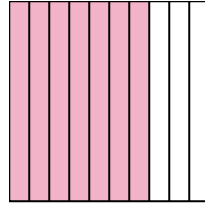
3)



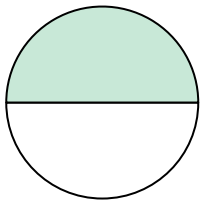
4)



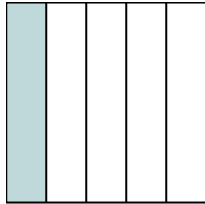
5)



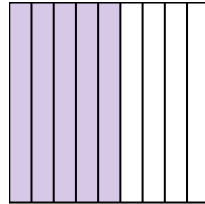
6)




7)



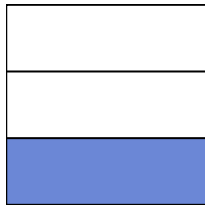
8)



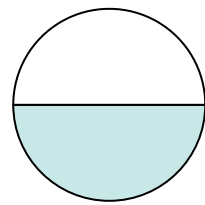
9)



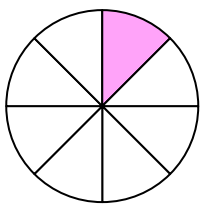
10)



11)



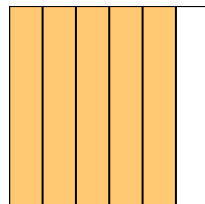
12)



13)

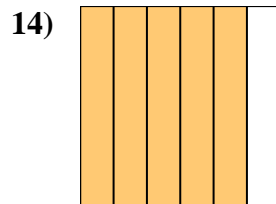
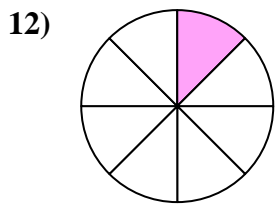
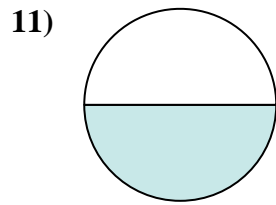
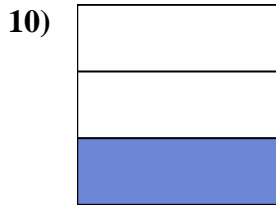
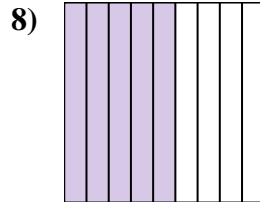
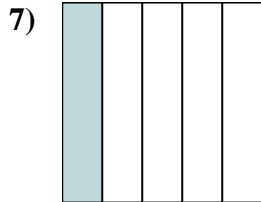
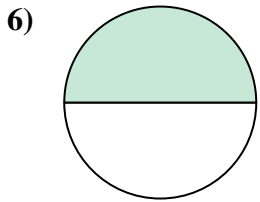
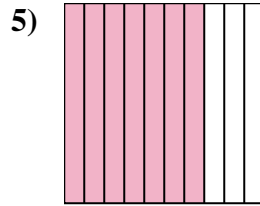
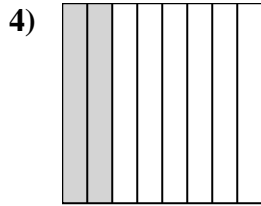
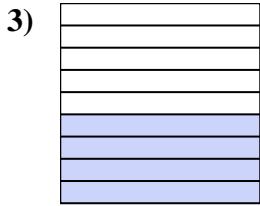
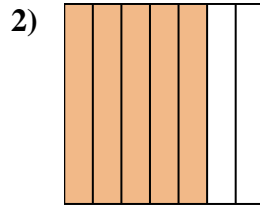
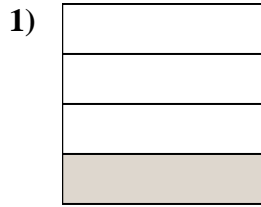
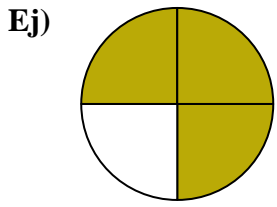


14)





Escriba la cantidad sombreada en forma escrita.



**Respuestas**

Ej. tres cuartos

1. un cuarto

2. cinco séptimos

3. cuatro novenos

4. dos octavos

5. siete décimas

6. una mitad

7. un quinto

8. cinco novenos

9. dos quintas partes

10. un tercio

11. una mitad

12. uno ocho

13. dos décimas

14. cinco sextos