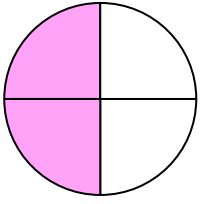


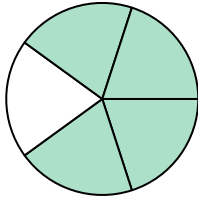


Escribe la cantidad sombreada en forma escrita.

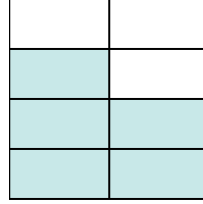
Ej)



1)



2)



Ej.

**dos cuartos**

1.

2.

3.

4.

5.

6.

7.

8.

9.

10.


11.

12.


13.

14.

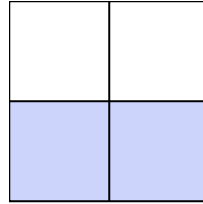
3)




4)



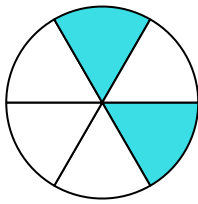
5)



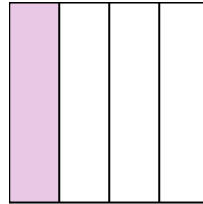
6)




7)



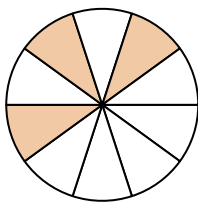
8)



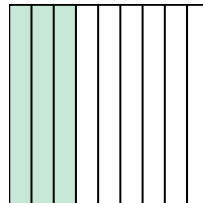
9)



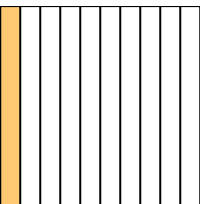
10)



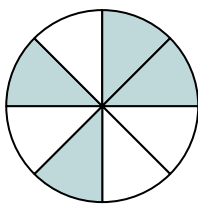
11)



12)



13)


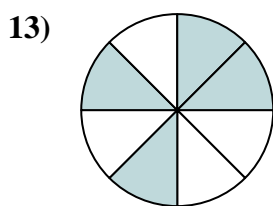
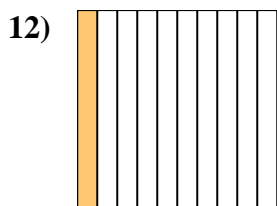
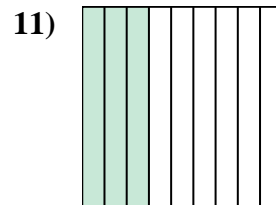
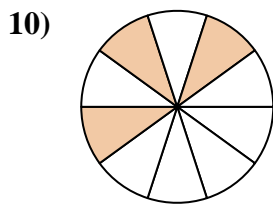
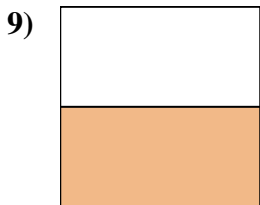
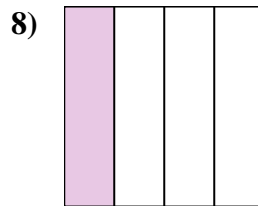
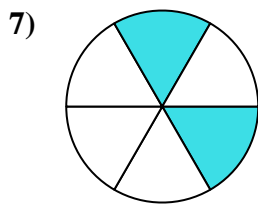
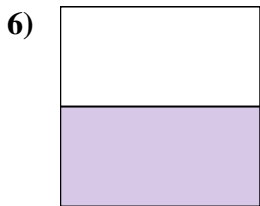
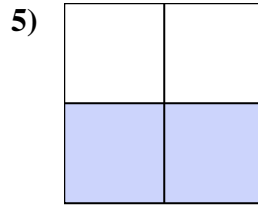
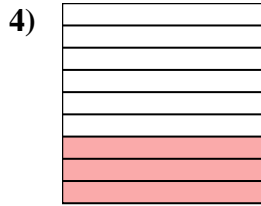
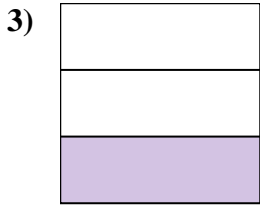
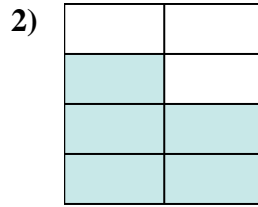
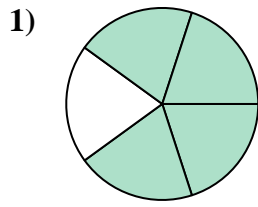
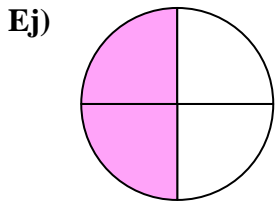


14)





Escriba la cantidad sombreada en forma escrita.



**Respuestas**

Ej. dos cuartos

1. cuatro quintos

2. cinco séptimos

3. un tercio

4. tres novenos

5. dos tercios

6. una mitad

7. dos sextos

8. un cuarto

9. una mitad

10. tres décimas

11. tres novenos

12. una décima parte

13. cuatro octavos

14. cinco octavos