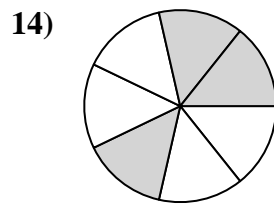
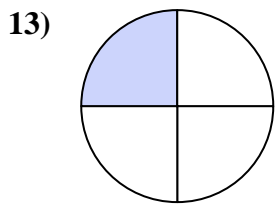
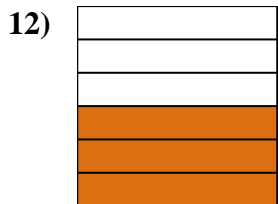
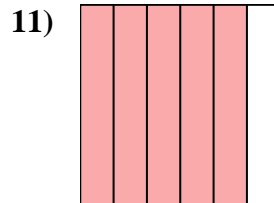

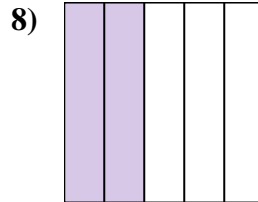
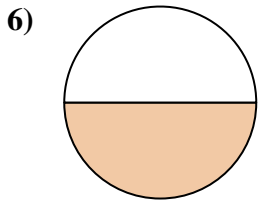
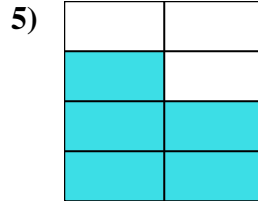
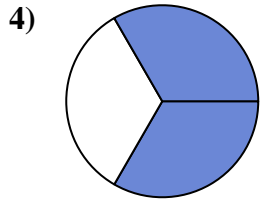
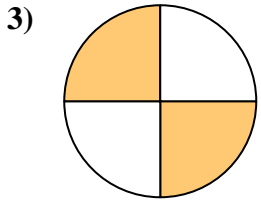
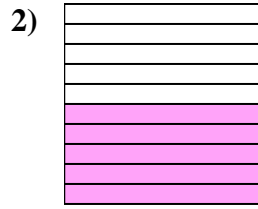
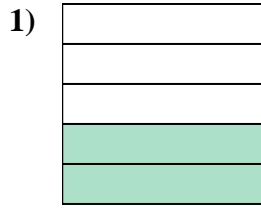
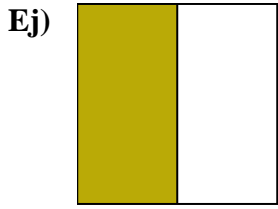




Escribe la cantidad sombreada en forma escrita.



**Respuestas**

Ej. una mitad

1. \_\_\_\_\_

2. \_\_\_\_\_

3. \_\_\_\_\_

4. \_\_\_\_\_

5. \_\_\_\_\_

6. \_\_\_\_\_

7. \_\_\_\_\_

8. \_\_\_\_\_

9. \_\_\_\_\_

10. \_\_\_\_\_

11. \_\_\_\_\_

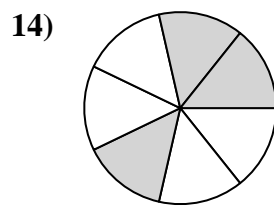
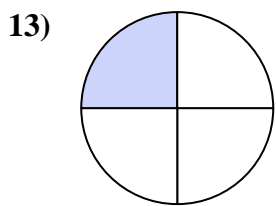
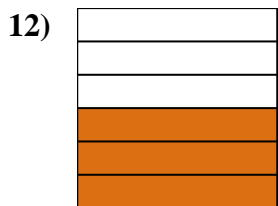
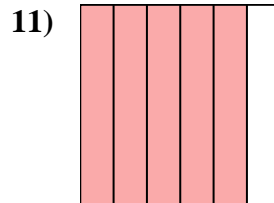

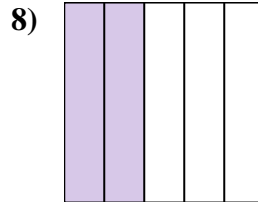
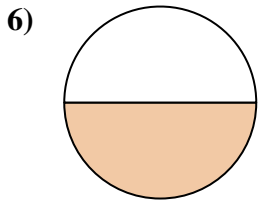
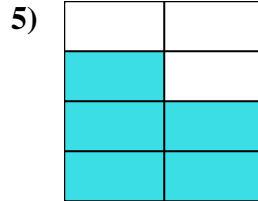
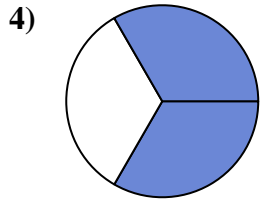
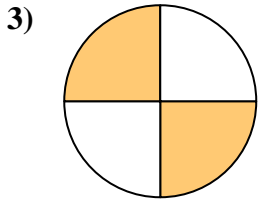
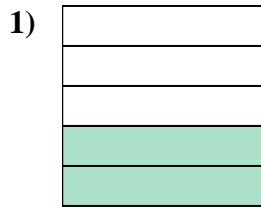
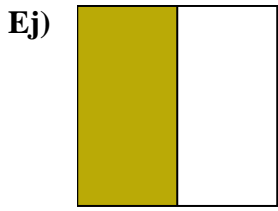
12. \_\_\_\_\_

13. \_\_\_\_\_

14. \_\_\_\_\_



Escriba la cantidad sombreada en forma escrita.



**Respuestas**

Ej. una mitad

1. dos quintas partes

2. cinco décimas

3. dos cuartos

4. dos tercios

5. cinco séptimos

6. una mitad

7. cuatro octavos

8. dos quintas partes

9. dos tercios

10. un noveno

11. cinco sextos

12. tres sextos

13. un cuarto

14. tres séptimos