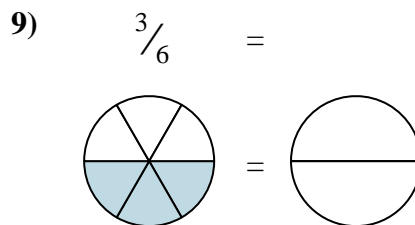
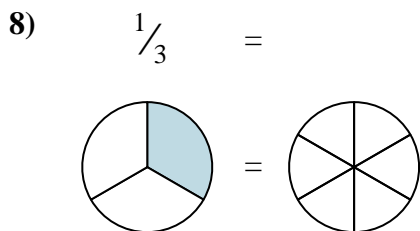
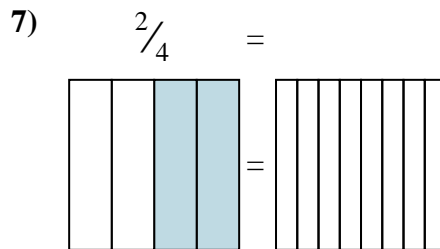
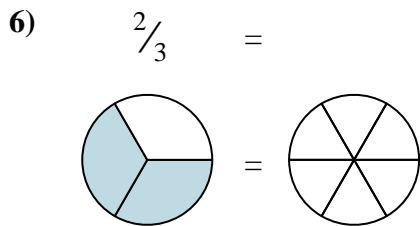
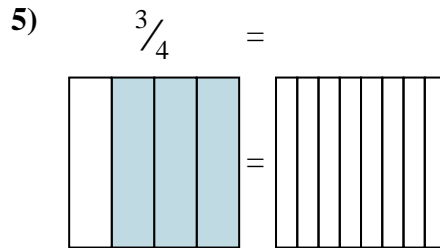
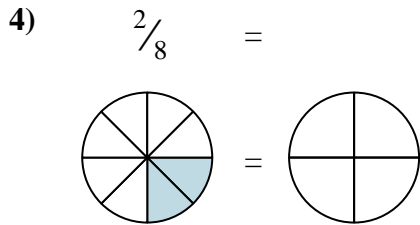
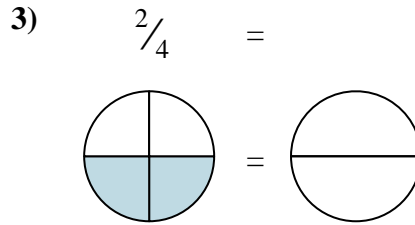
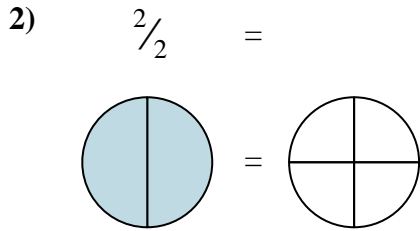
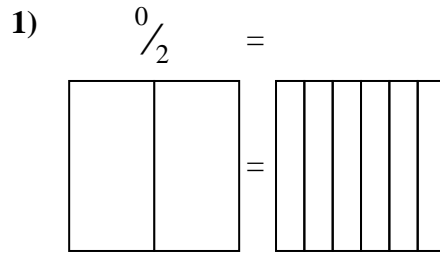
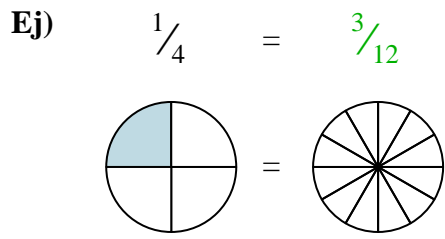




Sombrea la fracción visual para encontrar la fracción equivalente.

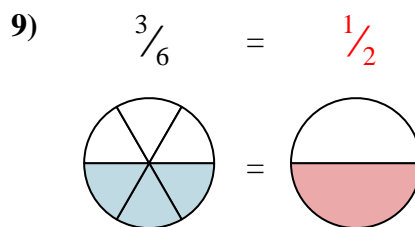
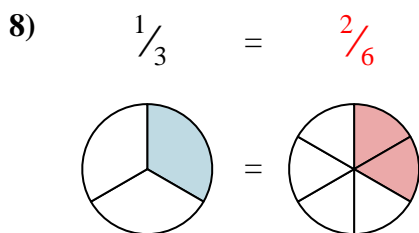
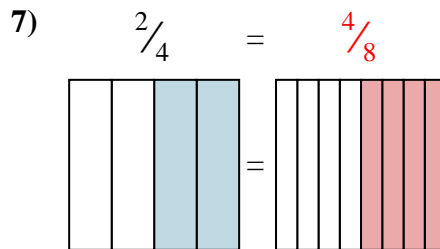
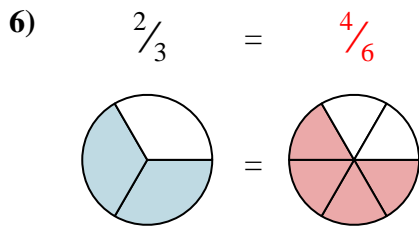
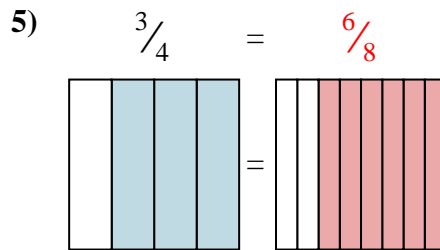
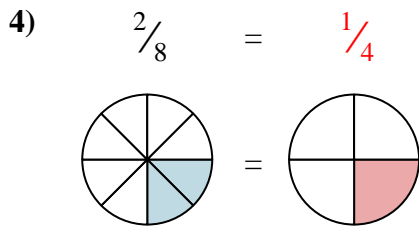
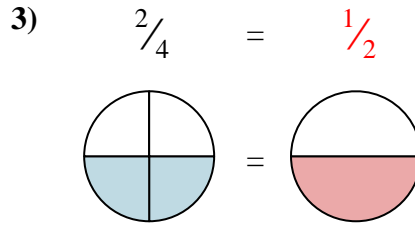
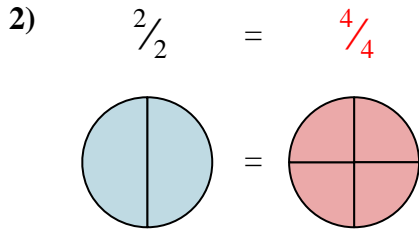
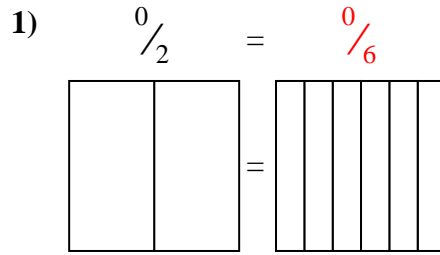
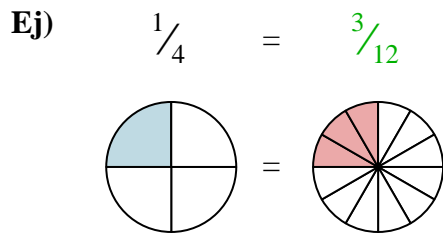


**Respuestas**

- Ej.  $\frac{3}{12}$
1. \_\_\_\_\_
2. \_\_\_\_\_
3. \_\_\_\_\_
4. \_\_\_\_\_
5. \_\_\_\_\_
6. \_\_\_\_\_
7. \_\_\_\_\_
8. \_\_\_\_\_
9. \_\_\_\_\_



Sombrea la fracción visual para encontrar la fracción equivalente.

**Respuestas**

- Ej.  $\frac{3}{12}$
1.  $\frac{0}{6}$
2.  $\frac{4}{4}$
3.  $\frac{1}{2}$
4.  $\frac{1}{4}$
5.  $\frac{6}{8}$
6.  $\frac{4}{6}$
7.  $\frac{4}{8}$
8.  $\frac{2}{6}$
9.  $\frac{1}{2}$