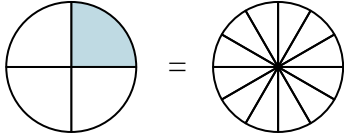


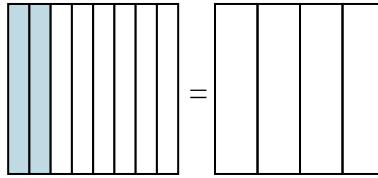


Sombrea la fracción visual para encontrar la fracción equivalente.

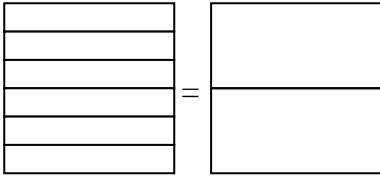
Ej) $\frac{1}{4} = \frac{3}{12}$



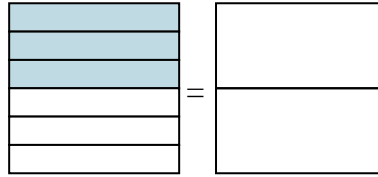
1) $\frac{2}{8} =$



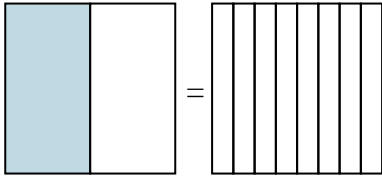
2) $\frac{0}{6} =$



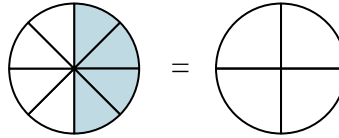
3) $\frac{3}{6} =$



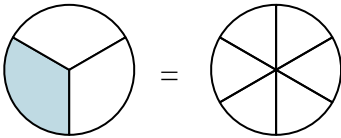
4) $\frac{1}{2} =$



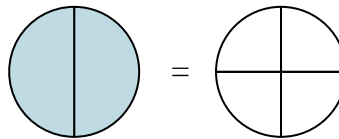
5) $\frac{4}{8} =$



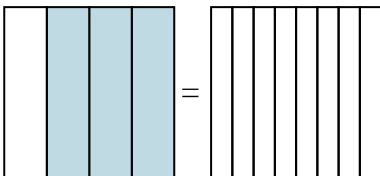
6) $\frac{1}{3} =$



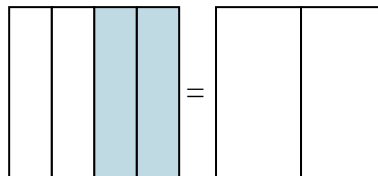
7) $\frac{2}{2} =$



8) $\frac{3}{4} =$



9) $\frac{2}{4} =$



Respuestas

Ej. $\frac{3}{12}$

1. _____

2. _____

3. _____

4. _____

5. _____

6. _____

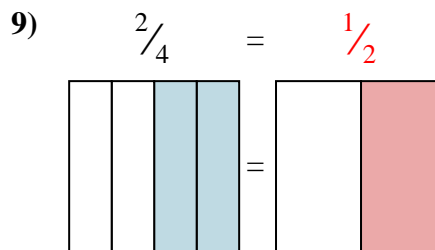
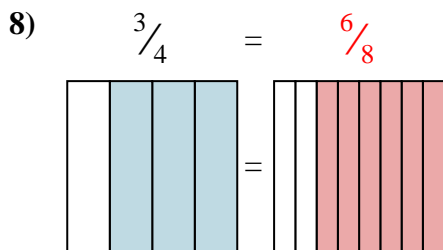
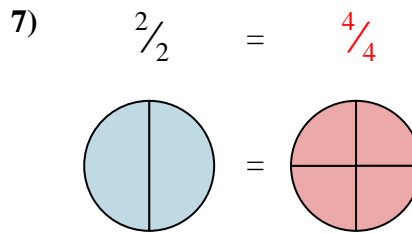
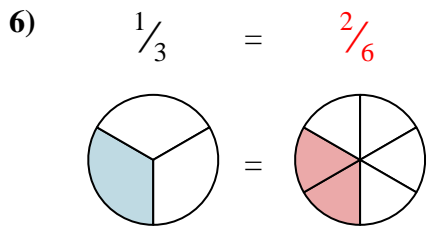
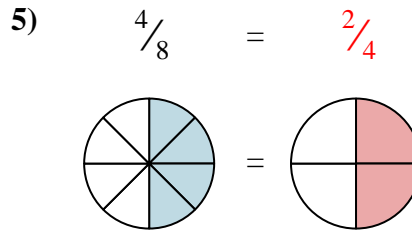
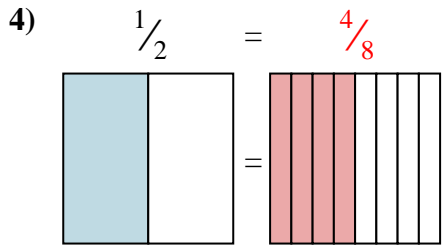
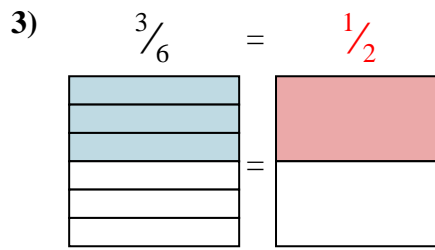
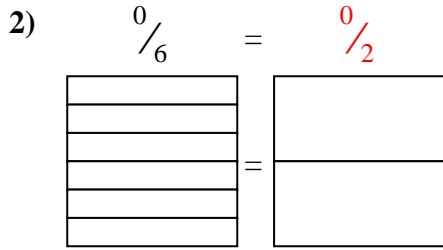
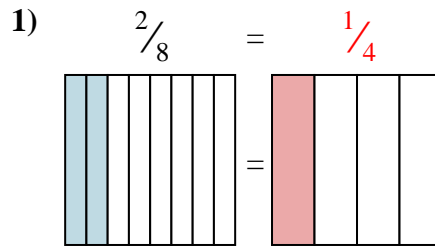
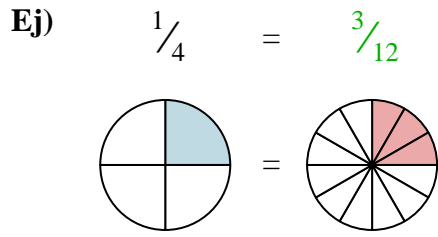
7. _____

8. _____

9. _____



Sombrea la fracción visual para encontrar la fracción equivalente.

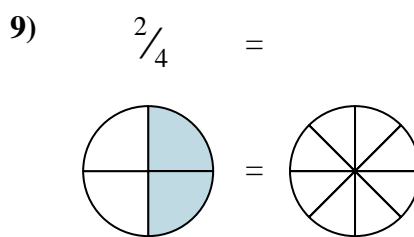
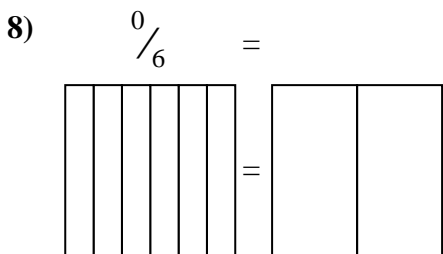
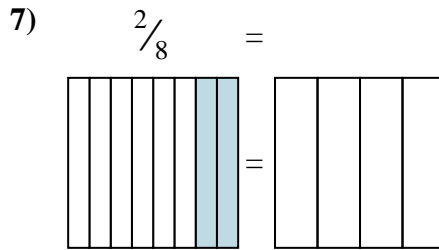
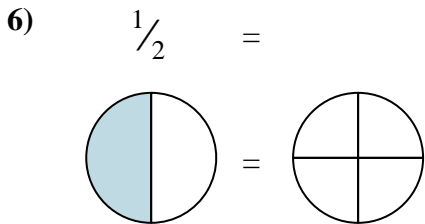
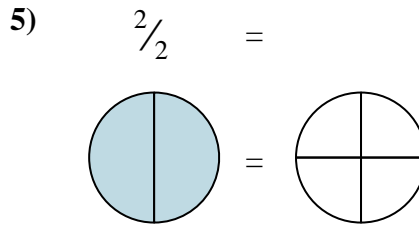
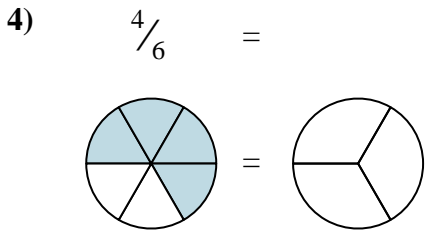
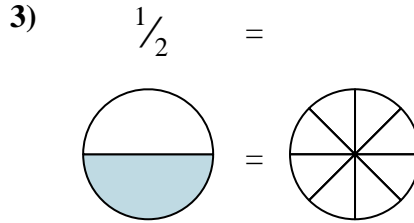
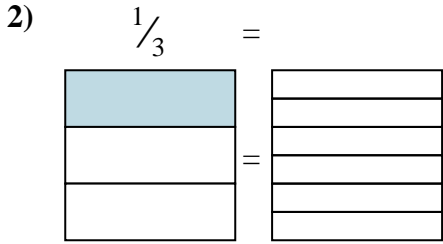
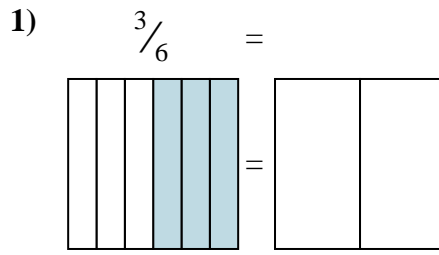
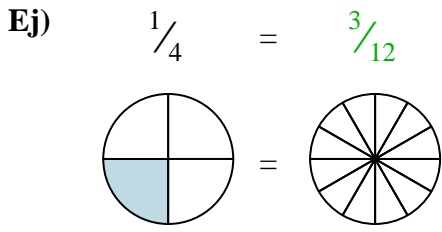


Respuestas

- Ej. $\frac{3}{12}$
1. $\frac{1}{4}$
2. $\frac{0}{2}$
3. $\frac{1}{2}$
4. $\frac{4}{8}$
5. $\frac{2}{4}$
6. $\frac{2}{6}$
7. $\frac{4}{4}$
8. $\frac{6}{8}$
9. $\frac{1}{2}$



Sombrea la fracción visual para encontrar la fracción equivalente.



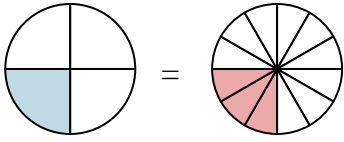
Respuestas

- Ej. $\frac{3}{12}$
1. _____
2. _____
3. _____
4. _____
5. _____
6. _____
7. _____
8. _____
9. _____

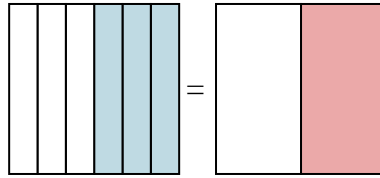


Sombrea la fracción visual para encontrar la fracción equivalente.

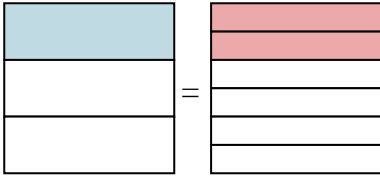
Ej) $\frac{1}{4} = \frac{3}{12}$



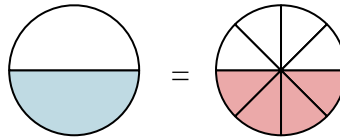
1) $\frac{3}{6} = \frac{1}{2}$



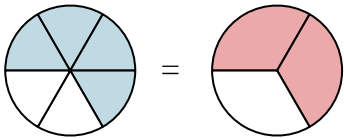
2) $\frac{1}{3} = \frac{2}{6}$



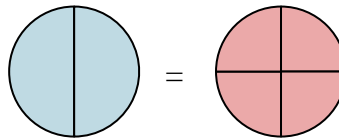
3) $\frac{1}{2} = \frac{4}{8}$



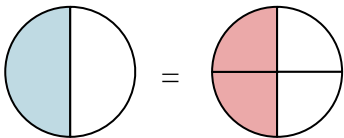
4) $\frac{4}{6} = \frac{2}{3}$



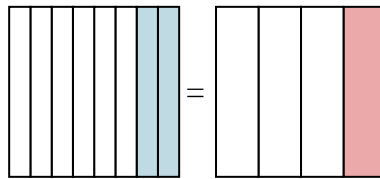
5) $\frac{2}{2} = \frac{4}{4}$



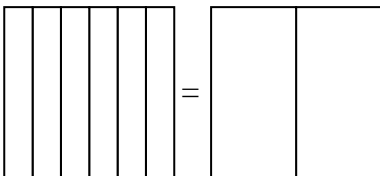
6) $\frac{1}{2} = \frac{2}{4}$



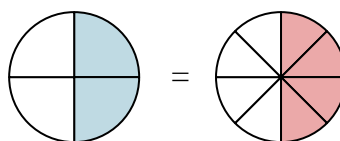
7) $\frac{2}{8} = \frac{1}{4}$



8) $\frac{0}{6} = \frac{0}{2}$



9) $\frac{2}{4} = \frac{4}{8}$

**Respuestas**

Ej. $\frac{3}{12}$

1. $\frac{1}{2}$

2. $\frac{2}{6}$

3. $\frac{4}{8}$

4. $\frac{2}{3}$

5. $\frac{4}{4}$

6. $\frac{2}{4}$

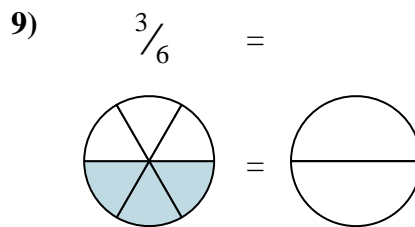
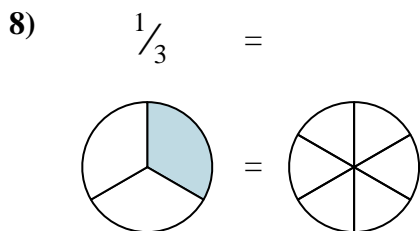
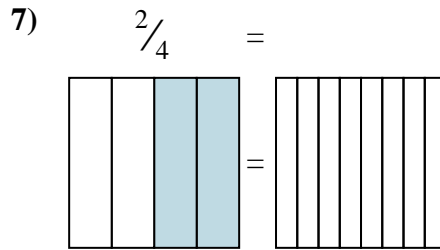
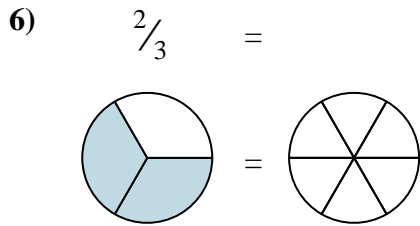
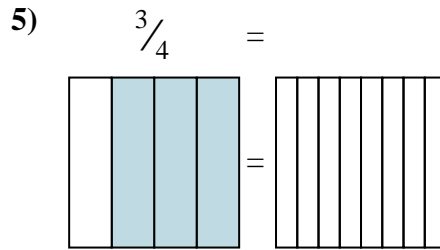
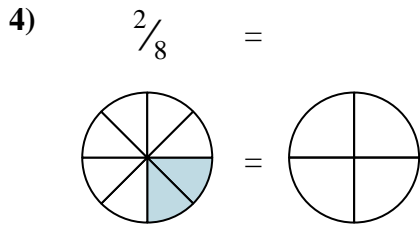
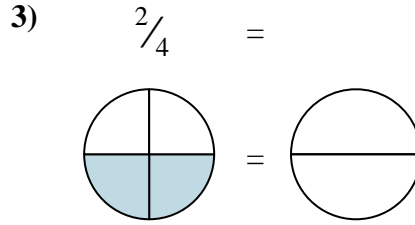
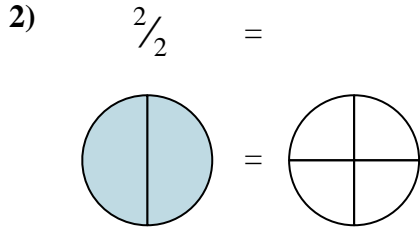
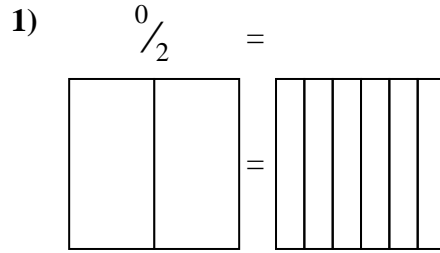
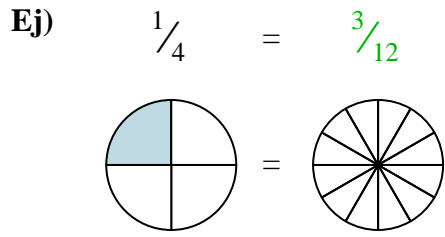
7. $\frac{1}{4}$

8. $\frac{0}{2}$

9. $\frac{4}{8}$



Sombrea la fracción visual para encontrar la fracción equivalente.

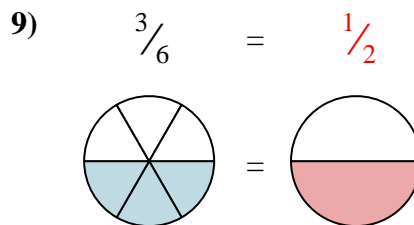
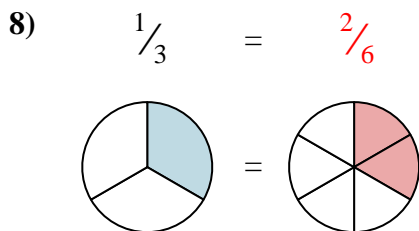
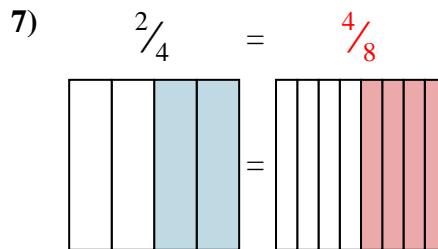
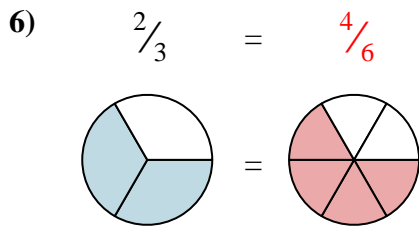
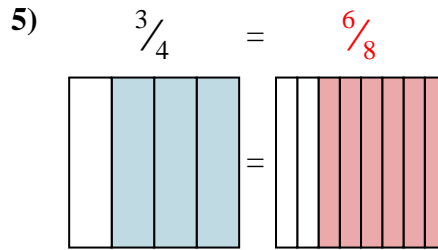
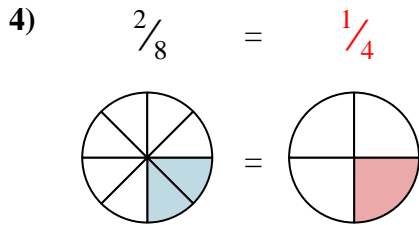
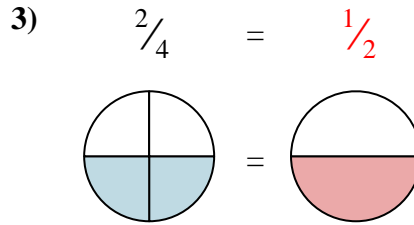
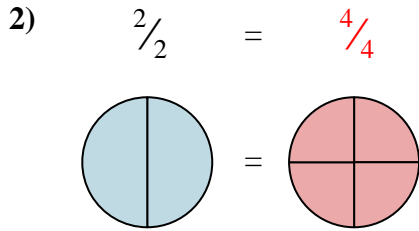
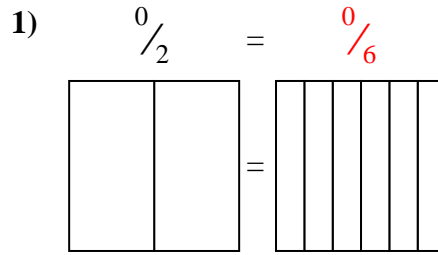
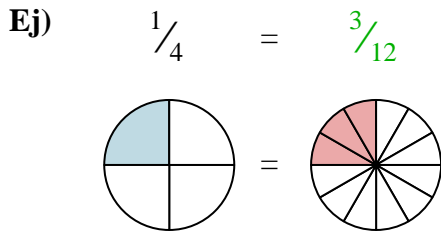


Respuestas

- Ej. $\frac{3}{12}$
1. _____
2. _____
3. _____
4. _____
5. _____
6. _____
7. _____
8. _____
9. _____



Sombrea la fracción visual para encontrar la fracción equivalente.

**Respuestas**

- Ej. $\frac{3}{12}$
1. $\frac{0}{6}$
2. $\frac{4}{4}$
3. $\frac{1}{2}$
4. $\frac{1}{4}$
5. $\frac{6}{8}$
6. $\frac{4}{6}$
7. $\frac{4}{8}$
8. $\frac{2}{6}$
9. $\frac{1}{2}$



Sombrea la fracción visual para encontrar la fracción equivalente.

Ej) $\frac{1}{4} = \frac{3}{12}$

1) $\frac{3}{6} =$

2) $\frac{2}{4} =$

3) $\frac{2}{2} =$

4) $\frac{1}{4} =$

5) $\frac{0}{2} =$

6) $\frac{1}{2} =$

7) $\frac{4}{8} =$

8) $\frac{1}{3} =$

9) $\frac{6}{8} =$

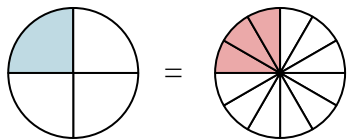
Respuestas

- Ej. $\frac{3}{12}$
1. _____
2. _____
3. _____
4. _____
5. _____
6. _____
7. _____
8. _____
9. _____

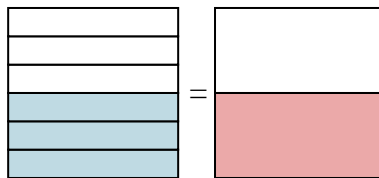


Sombrea la fracción visual para encontrar la fracción equivalente.

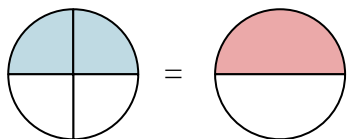
Ej) $\frac{1}{4} = \frac{3}{12}$



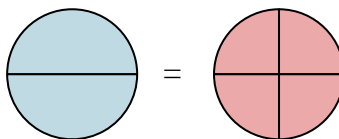
1) $\frac{3}{6} = \frac{1}{2}$



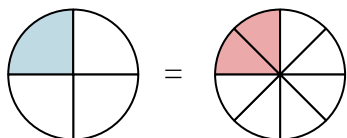
2) $\frac{2}{4} = \frac{1}{2}$



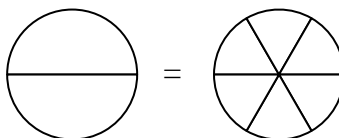
3) $\frac{2}{2} = \frac{4}{4}$



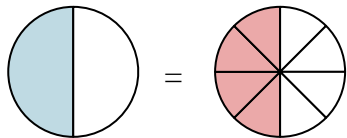
4) $\frac{1}{4} = \frac{2}{8}$



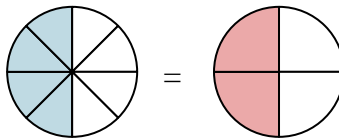
5) $\frac{0}{2} = \frac{0}{6}$



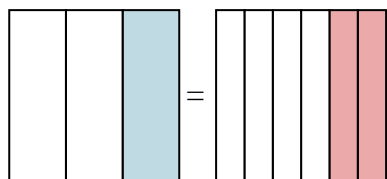
6) $\frac{1}{2} = \frac{4}{8}$



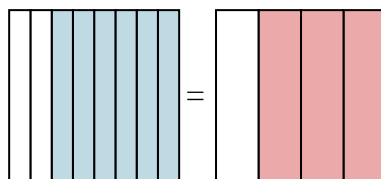
7) $\frac{4}{8} = \frac{2}{4}$



8) $\frac{1}{3} = \frac{2}{6}$



9) $\frac{6}{8} = \frac{3}{4}$

**Respuestas**

Ej. $\frac{3}{12}$

1. $\frac{1}{2}$

2. $\frac{1}{2}$

3. $\frac{4}{4}$

4. $\frac{2}{8}$

5. $\frac{0}{6}$

6. $\frac{4}{8}$

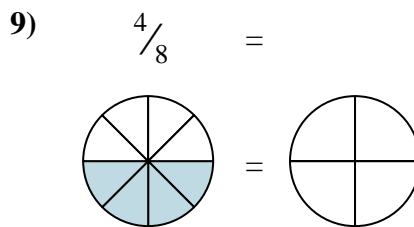
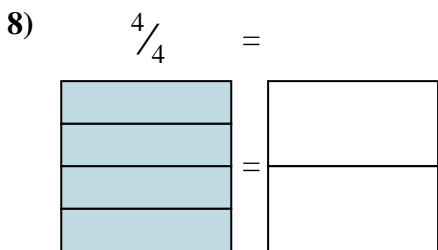
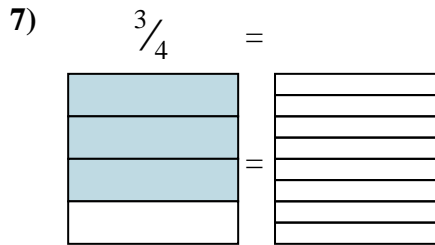
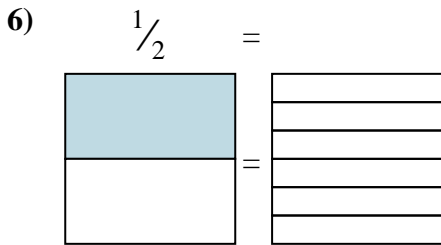
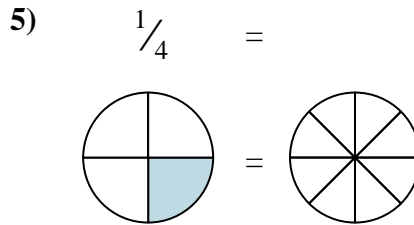
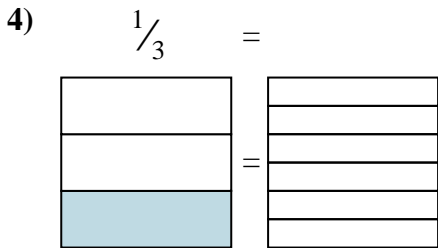
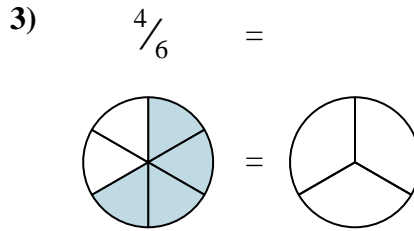
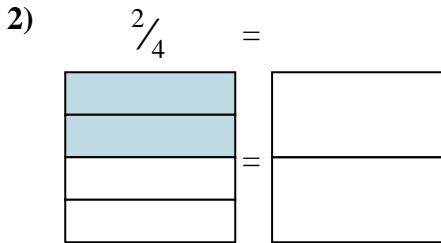
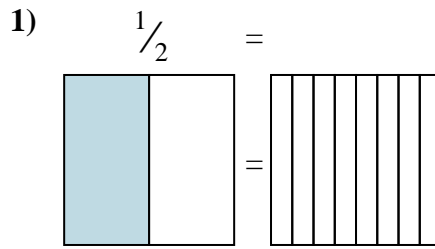
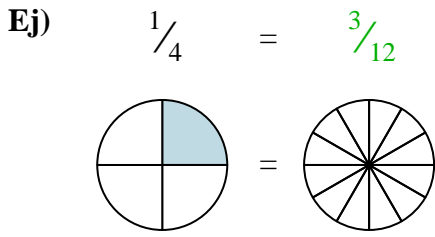
7. $\frac{2}{4}$

8. $\frac{2}{6}$

9. $\frac{3}{4}$



Sombrea la fracción visual para encontrar la fracción equivalente.



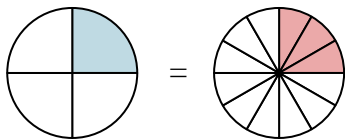
Respuestas

- Ej. $\frac{3}{12}$
1. _____
2. _____
3. _____
4. _____
5. _____
6. _____
7. _____
8. _____
9. _____

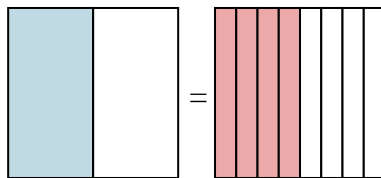


Sombrea la fracción visual para encontrar la fracción equivalente.

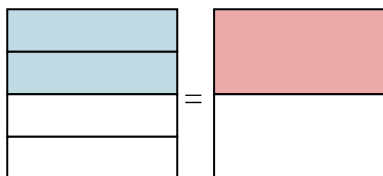
Ej) $\frac{1}{4} = \frac{3}{12}$



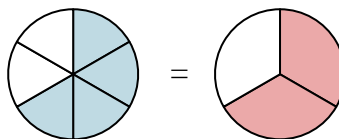
1) $\frac{1}{2} = \frac{4}{8}$



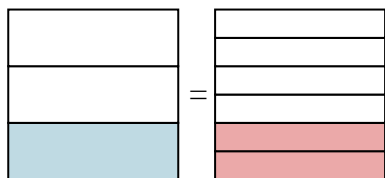
2) $\frac{2}{4} = \frac{1}{2}$



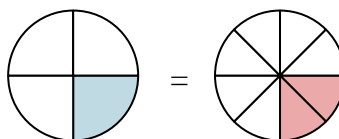
3) $\frac{4}{6} = \frac{2}{3}$



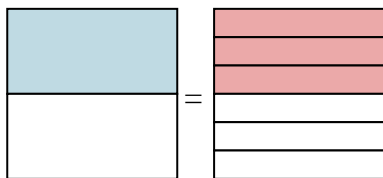
4) $\frac{1}{3} = \frac{2}{6}$



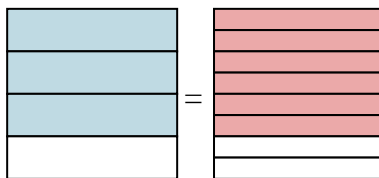
5) $\frac{1}{4} = \frac{2}{8}$



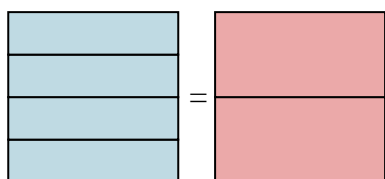
6) $\frac{1}{2} = \frac{3}{6}$



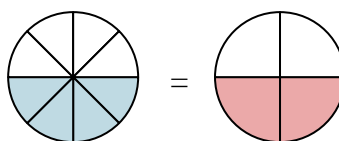
7) $\frac{3}{4} = \frac{6}{8}$



8) $\frac{4}{4} = \frac{2}{2}$



9) $\frac{4}{8} = \frac{2}{4}$

**Respuestas**

Ej. $\frac{3}{12}$

1. $\frac{4}{8}$

2. $\frac{1}{2}$

3. $\frac{2}{3}$

4. $\frac{2}{6}$

5. $\frac{2}{8}$

6. $\frac{3}{6}$

7. $\frac{6}{8}$

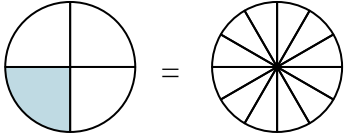
8. $\frac{2}{2}$

9. $\frac{2}{4}$

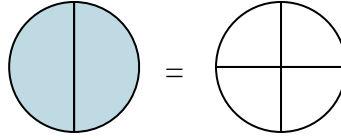


Sombrea la fracción visual para encontrar la fracción equivalente.

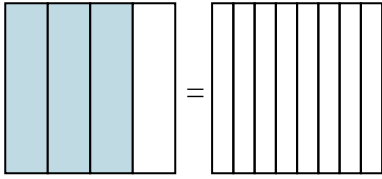
Ej) $\frac{1}{4} = \frac{3}{12}$



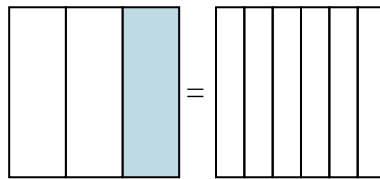
1) $\frac{2}{2} =$



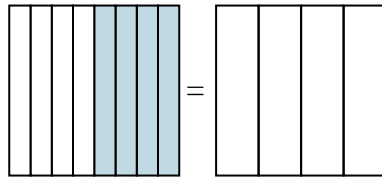
2) $\frac{3}{4} =$



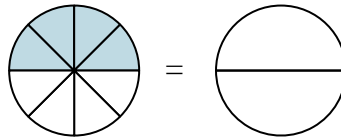
3) $\frac{1}{3} =$



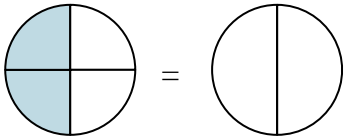
4) $\frac{4}{8} =$



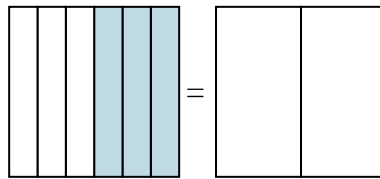
5) $\frac{4}{8} =$



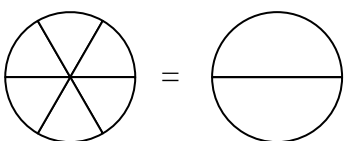
6) $\frac{2}{4} =$



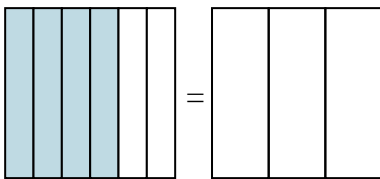
7) $\frac{3}{6} =$



8) $\frac{0}{6} =$



9) $\frac{4}{6} =$

**Respuestas**Ej. $\frac{3}{12}$

1. _____

2. _____

3. _____

4. _____

5. _____

6. _____

7. _____

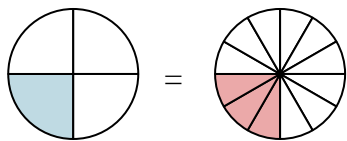
8. _____

9. _____

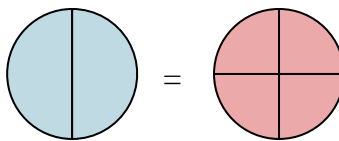


Sombrea la fracción visual para encontrar la fracción equivalente.

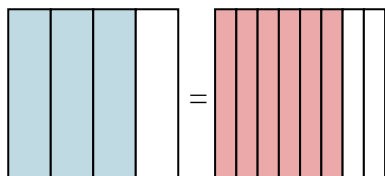
Ej) $\frac{1}{4} = \frac{3}{12}$



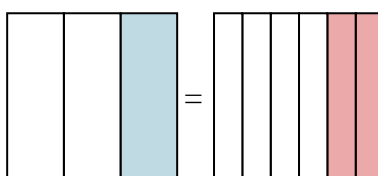
1) $\frac{2}{2} = \frac{4}{4}$



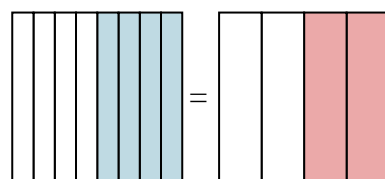
2) $\frac{3}{4} = \frac{6}{8}$



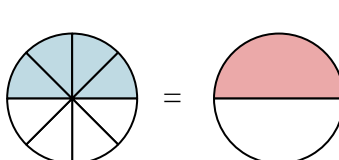
3) $\frac{1}{3} = \frac{2}{6}$



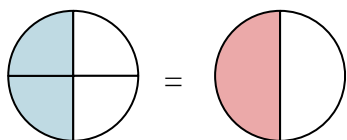
4) $\frac{4}{8} = \frac{2}{4}$



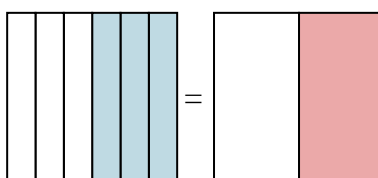
5) $\frac{4}{8} = \frac{1}{2}$



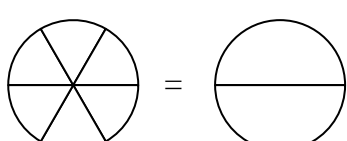
6) $\frac{2}{4} = \frac{1}{2}$



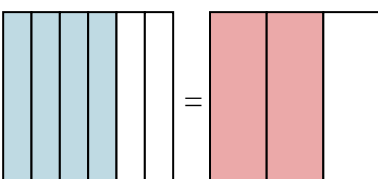
7) $\frac{3}{6} = \frac{1}{2}$



8) $\frac{0}{6} = \frac{0}{2}$



9) $\frac{4}{6} = \frac{2}{3}$

**Respuestas**

Ej. $\frac{3}{12}$

1. $\frac{4}{4}$

2. $\frac{6}{8}$

3. $\frac{2}{6}$

4. $\frac{2}{4}$

5. $\frac{1}{2}$

6. $\frac{1}{2}$

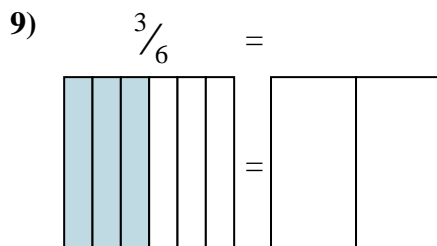
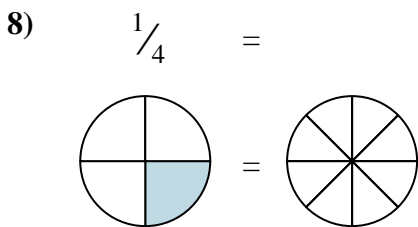
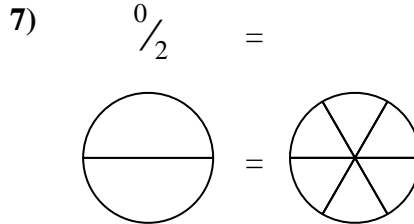
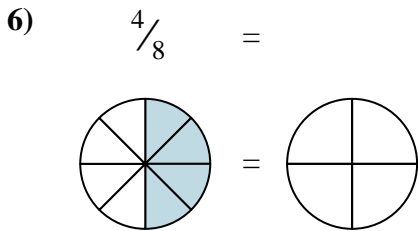
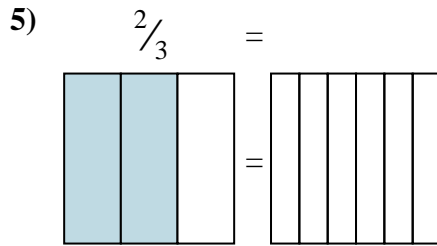
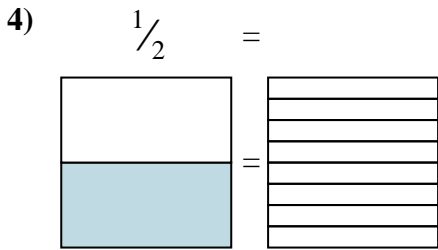
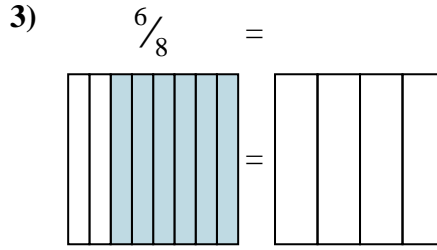
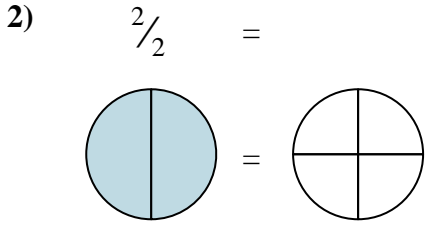
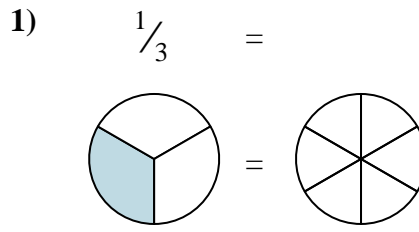
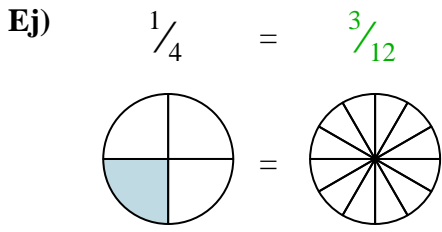
7. $\frac{1}{2}$

8. $\frac{0}{2}$

9. $\frac{2}{3}$



Sombrea la fracción visual para encontrar la fracción equivalente.



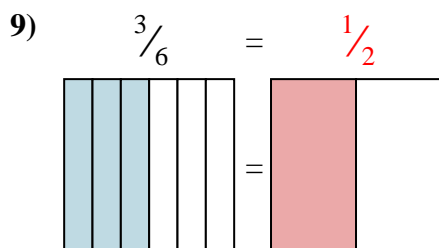
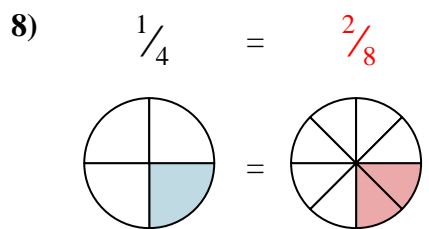
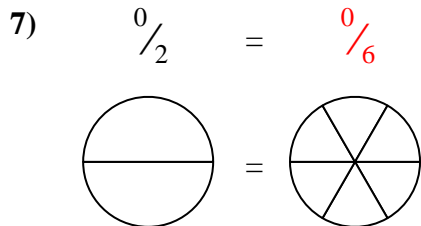
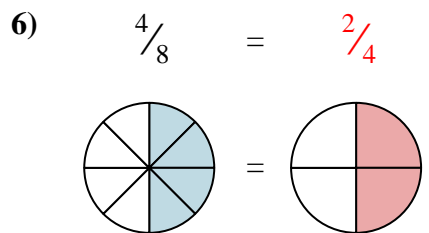
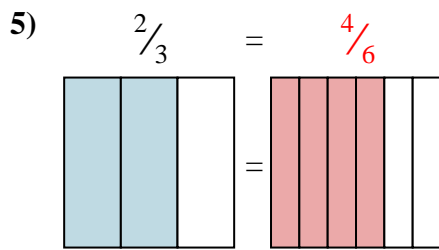
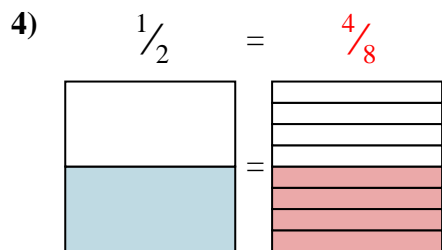
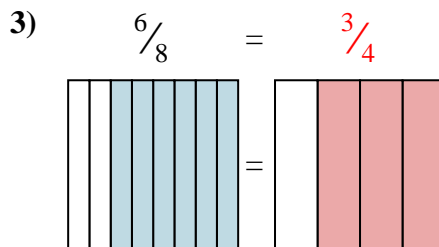
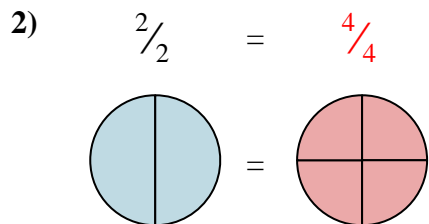
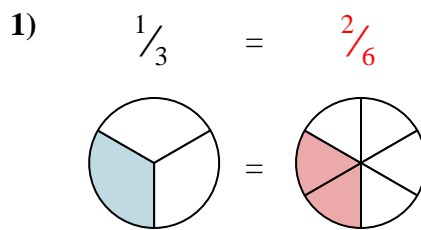
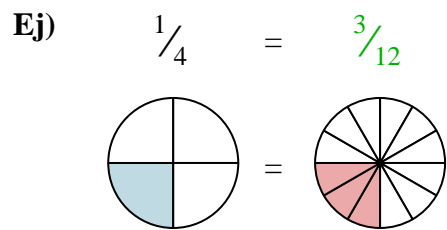
Respuestas

Ej. $\frac{3}{12}$

1. _____
2. _____
3. _____
4. _____
5. _____
6. _____
7. _____
8. _____
9. _____

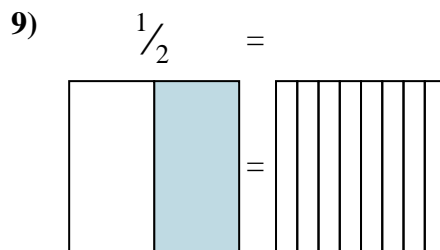
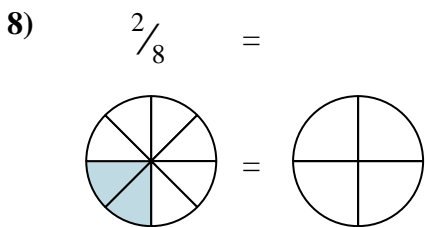
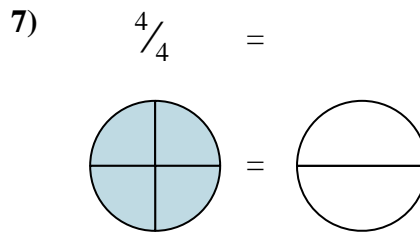
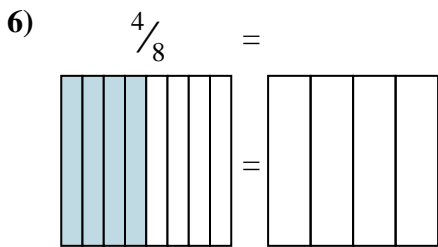
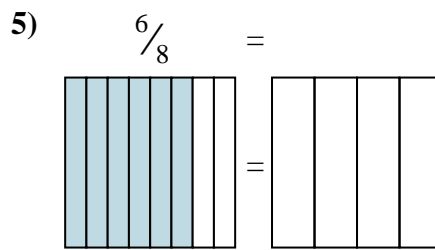
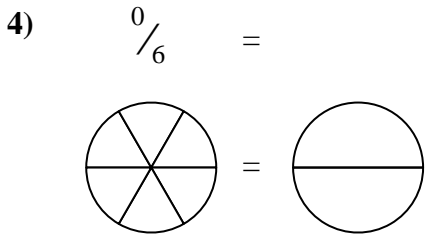
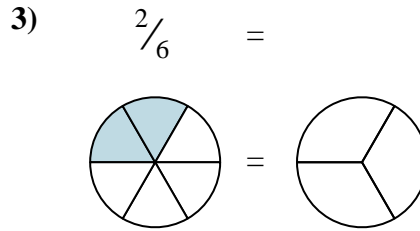
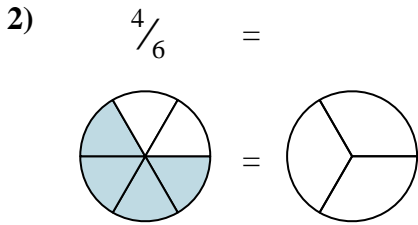
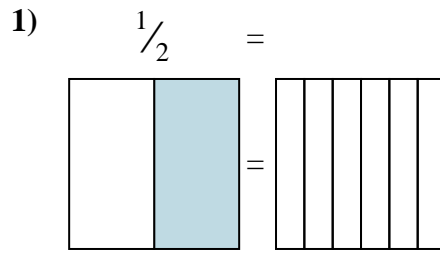
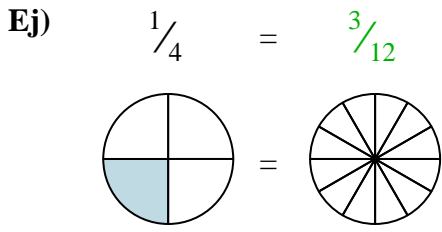


Sombrea la fracción visual para encontrar la fracción equivalente.

**Respuestas**Ej. $\frac{3}{12}$ 1. $\frac{2}{6}$ 2. $\frac{4}{4}$ 3. $\frac{3}{4}$ 4. $\frac{4}{8}$ 5. $\frac{4}{6}$ 6. $\frac{2}{4}$ 7. $\frac{0}{6}$ 8. $\frac{2}{8}$ 9. $\frac{1}{2}$



Sombrea la fracción visual para encontrar la fracción equivalente.

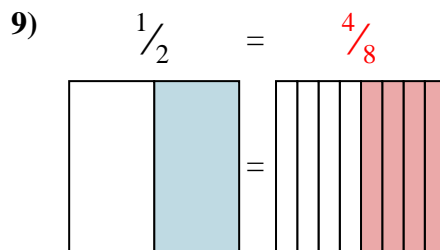
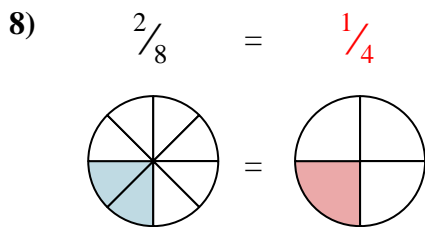
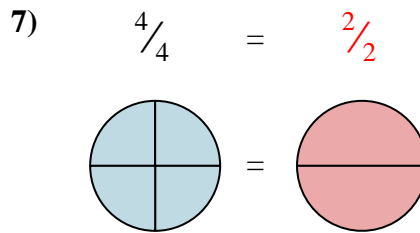
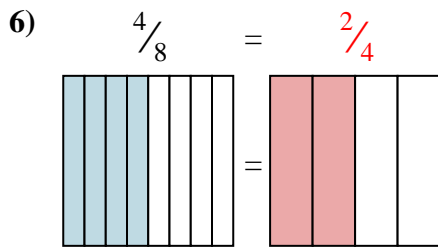
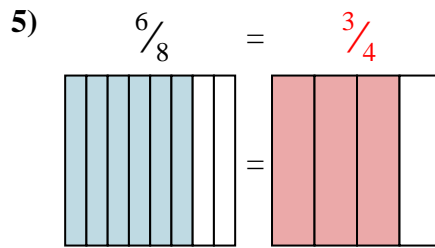
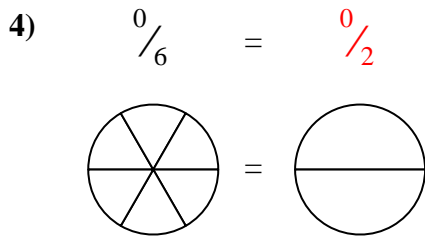
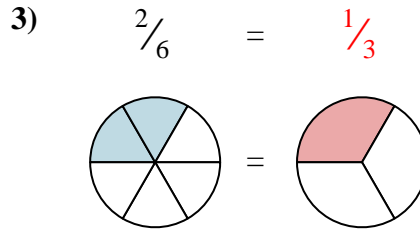
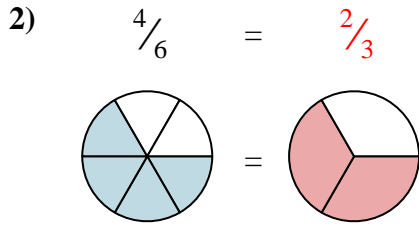
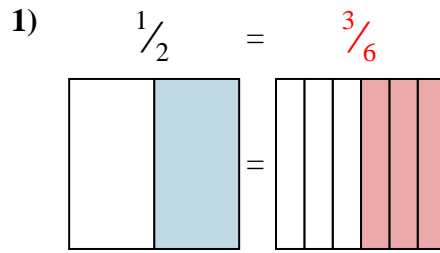
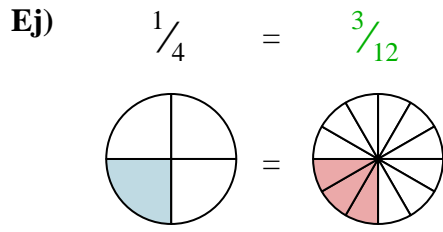


Respuestas

- Ej. $\frac{3}{12}$
1. _____
2. _____
3. _____
4. _____
5. _____
6. _____
7. _____
8. _____
9. _____



Sombrea la fracción visual para encontrar la fracción equivalente.

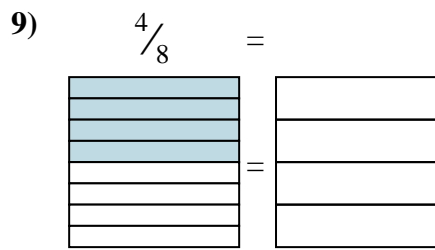
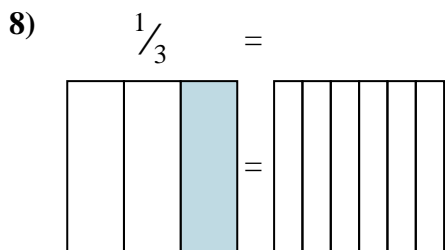
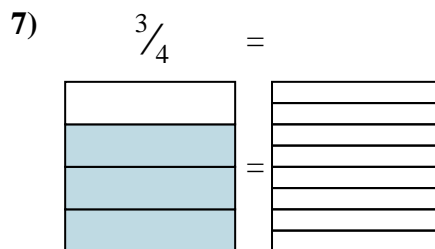
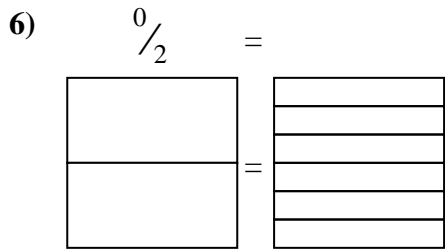
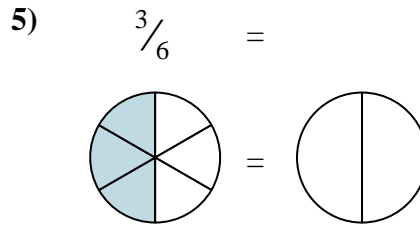
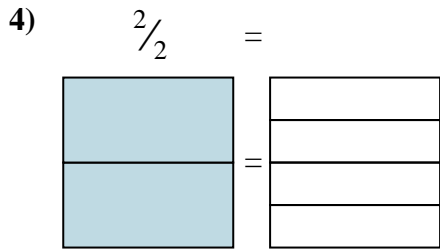
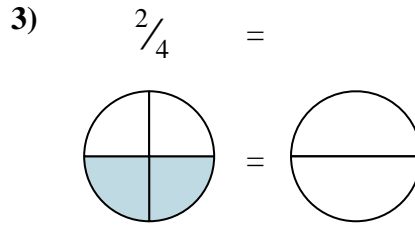
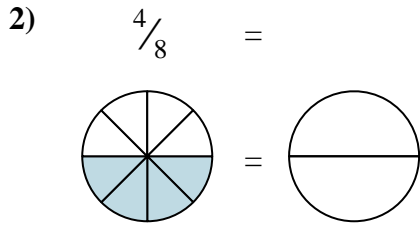
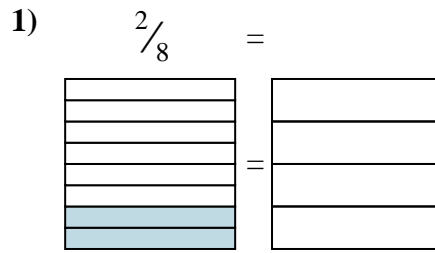
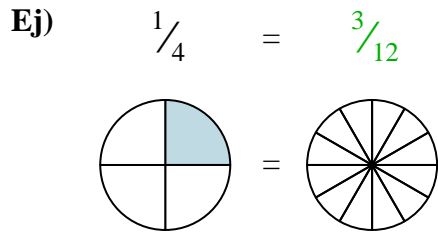


Respuestas

- Ej. $\frac{3}{12}$
1. $\frac{3}{6}$
2. $\frac{2}{3}$
3. $\frac{1}{3}$
4. $\frac{0}{2}$
5. $\frac{3}{4}$
6. $\frac{2}{4}$
7. $\frac{2}{2}$
8. $\frac{1}{4}$
9. $\frac{4}{8}$



Sombrea la fracción visual para encontrar la fracción equivalente.

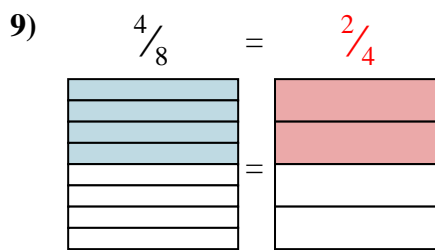
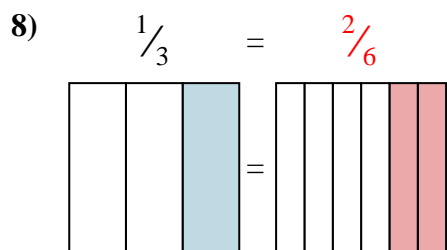
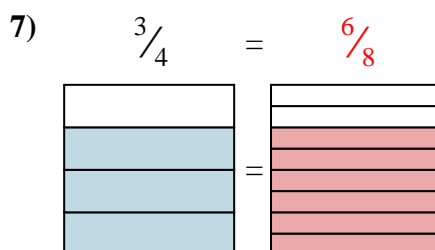
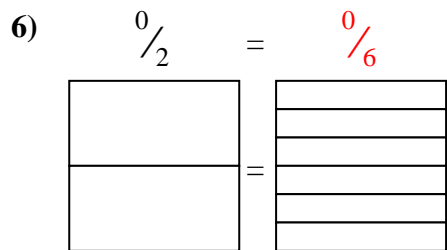
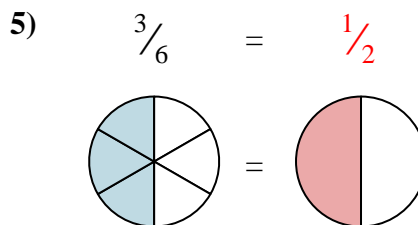
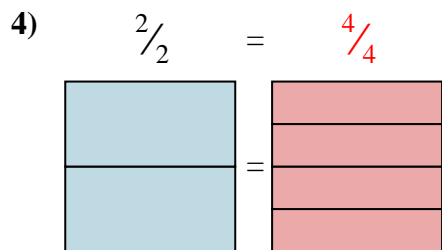
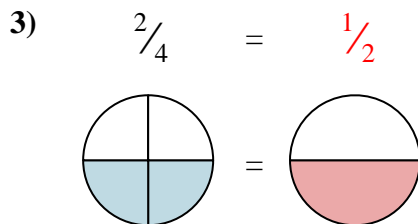
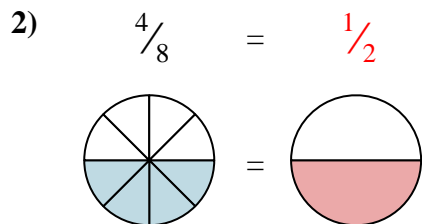
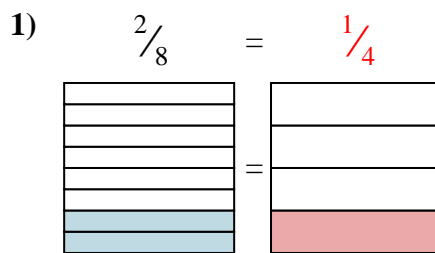
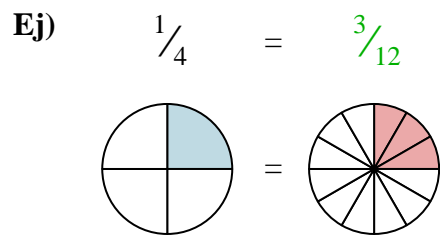


Respuestas

- Ej. $\frac{3}{12}$
1. _____
2. _____
3. _____
4. _____
5. _____
6. _____
7. _____
8. _____
9. _____



Sombrea la fracción visual para encontrar la fracción equivalente.



Respuestas

- Ej. $\frac{3}{12}$
1. $\frac{1}{4}$
2. $\frac{1}{2}$
3. $\frac{1}{2}$
4. $\frac{4}{4}$
5. $\frac{1}{2}$
6. $\frac{0}{6}$
7. $\frac{6}{8}$
8. $\frac{2}{6}$
9. $\frac{2}{4}$



Sombrea la fracción visual para encontrar la fracción equivalente.

Ej) $\frac{1}{4} = \frac{3}{12}$

1) $\frac{4}{4} =$

2) $\frac{4}{6} =$

3) $\frac{0}{6} =$

4) $\frac{4}{8} =$

5) $\frac{2}{6} =$

6) $\frac{6}{8} =$

7) $\frac{4}{8} =$

8) $\frac{3}{6} =$

9) $\frac{1}{4} =$

Respuestas

Ej. $\frac{3}{12}$

1. _____

2. _____

3. _____

4. _____

5. _____

6. _____

7. _____

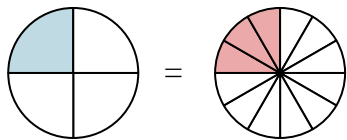
8. _____

9. _____

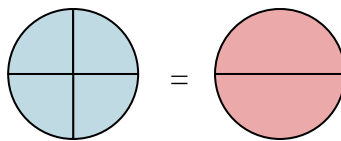


Sombrea la fracción visual para encontrar la fracción equivalente.

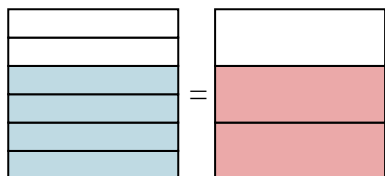
Ej) $\frac{1}{4} = \frac{3}{12}$



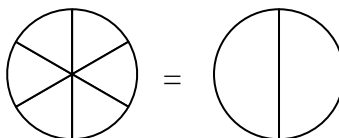
1) $\frac{4}{4} = \frac{2}{2}$



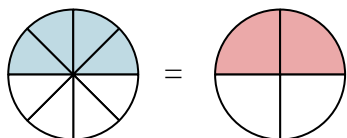
2) $\frac{4}{6} = \frac{2}{3}$



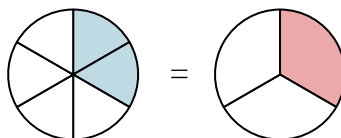
3) $\frac{0}{6} = \frac{0}{2}$



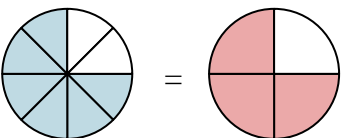
4) $\frac{4}{8} = \frac{2}{4}$



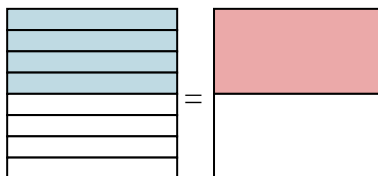
5) $\frac{2}{6} = \frac{1}{3}$



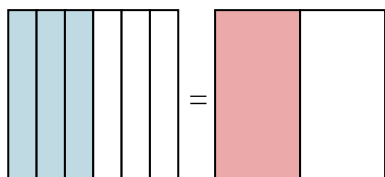
6) $\frac{6}{8} = \frac{3}{4}$



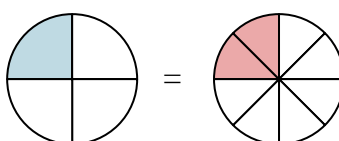
7) $\frac{4}{8} = \frac{1}{2}$



8) $\frac{3}{6} = \frac{1}{2}$



9) $\frac{1}{4} = \frac{2}{8}$

**Respuestas**

Ej. $\frac{3}{12}$

1. $\frac{2}{2}$

2. $\frac{2}{3}$

3. $\frac{0}{2}$

4. $\frac{2}{4}$

5. $\frac{1}{3}$

6. $\frac{3}{4}$

7. $\frac{1}{2}$

8. $\frac{1}{2}$

9. $\frac{2}{8}$