




Resuelve cada problema.


Respuestas

1) 10:30

A.




B.




2) 1:15

A.




B.




3) 6:00

A.




B.




4) 5:00

A.



B.



5) 7:15

A.




B.




6) 10:45

A.



B.




7) 10:15

A.




B.




8) 12:30

A.



B.



9) 9:45

A.




B.




10) 9:30

A.




B.




11) 9:30

A.



B.




12) 3:30

A.



B.



1. \_\_\_\_\_

2. \_\_\_\_\_

3. \_\_\_\_\_

4. \_\_\_\_\_

5. \_\_\_\_\_

6. \_\_\_\_\_

7. \_\_\_\_\_

8. \_\_\_\_\_

9. \_\_\_\_\_

10. \_\_\_\_\_

11. \_\_\_\_\_

12. \_\_\_\_\_




Resuelve cada problema.


**Respuestas**

1) 10:30

A.




B.




2) 1:15

A.




B.




3) 6:00

A.




B.




4) 5:00

A.



B.




5) 7:15

A.




B.




6) 10:45

A.



B.




7) 10:15

A.




B.




8) 12:30

A.




B.




9) 9:45

A.




B.




10) 9:30

A.



B.




11) 9:30

A.



B.




12) 3:30

A.



B.

1.     **A**    2.     **B**    3.     **B**    4.     **B**    5.     **B**    6.     **A**    7.     **A**    8.     **A**    9.     **A**    10.     **B**    11.     **B**    12.     **B**