




Nombre: _____

Resuelve cada problema.


Respuestas

1) 2:30

A.




B.




2) 2:15

A.




B.




3) 8:15

A.




B.




4) 4:45

A.




B.




5) 10:00

A.




B.




6) 11:15

A.




B.




7) 4:45

A.




B.




8) 5:00

A.



B.




9) 2:45

A.




B.




10) 5:00

A.




B.



11) 8:00

A.



B.



12) 5:30

A.



B.



1. _____

2. _____

3. _____

4. _____

5. _____

6. _____

7. _____

8. _____

9. _____

10. _____

11. _____

12. _____




Resuelve cada problema.


Respuestas

1) 2:30

A.




B.




2) 2:15

A.




B.




3) 8:15

A.



B.




4) 4:45

A.




B.




5) 10:00

A.




B.




6) 11:15

A.




B.




7) 4:45

A.




B.




8) 5:00

A.




B.




9) 2:45

A.




B.




10) 5:00

A.



B.



11) 8:00

A.




B.



12) 5:30

A.



B.

1. **A** 2. **B** 3. **A** 4. **B** 5. **B** 6. **A** 7. **A** 8. **A** 9. **A** 10. **A** 11. **A** 12. **A**