

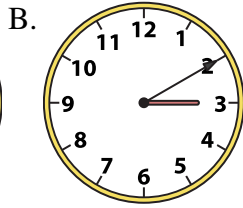
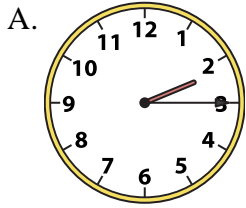


Nombre: \_\_\_\_\_

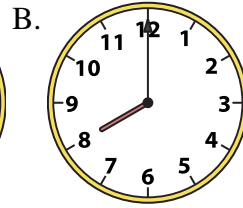
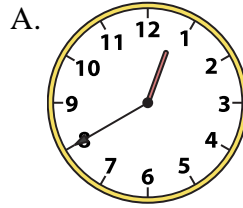
Resuelve cada problema.

Resuestas


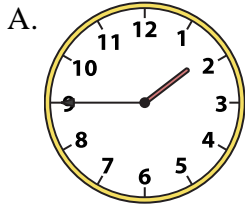
1) 2:15



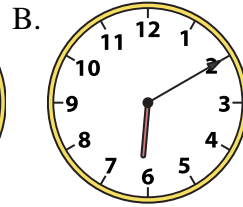
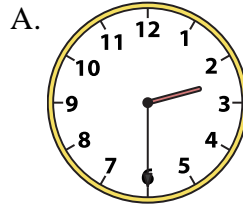
2) 8:00




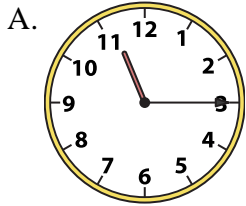
3) 1:45



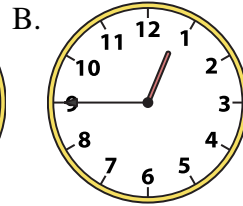
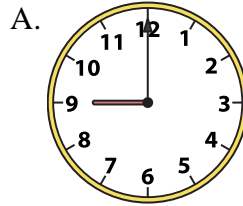
4) 2:30



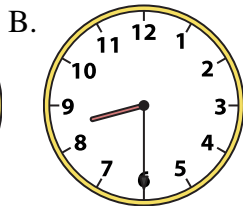
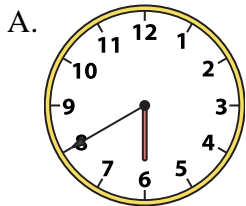
5) 11:15



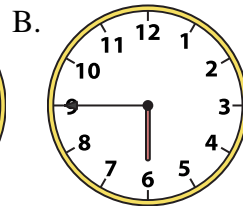
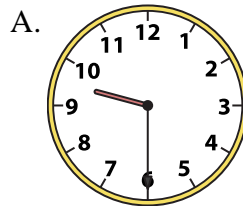
6) 9:00



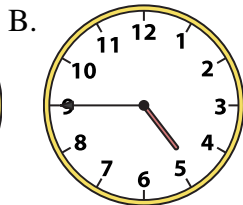
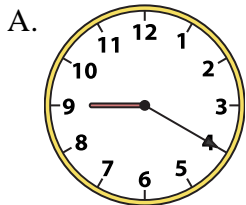
7) 8:30



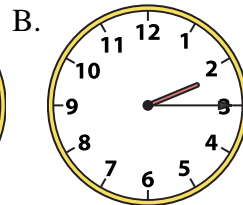
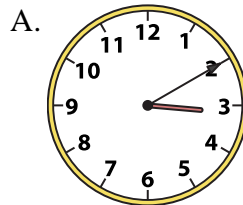
8) 9:30



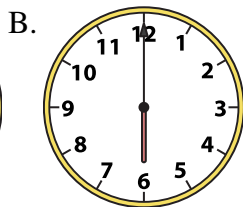
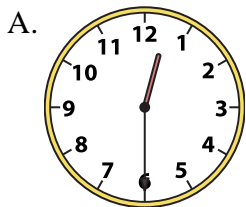
9) 4:45



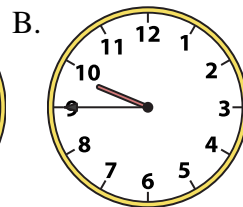
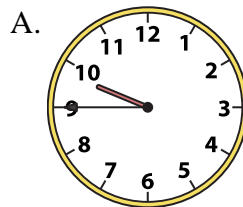
10) 2:15



11) 12:30



12) 9:45



1. \_\_\_\_\_

2. \_\_\_\_\_

3. \_\_\_\_\_

4. \_\_\_\_\_

5. \_\_\_\_\_

6. \_\_\_\_\_

7. \_\_\_\_\_

8. \_\_\_\_\_

9. \_\_\_\_\_

10. \_\_\_\_\_

11. \_\_\_\_\_

12. \_\_\_\_\_



Resuelve cada problema.


**Respuestas**

1) 2:15

A.




B.




2) 8:00

A.




B.



3) 1:45

A.




B.




4) 2:30

A.




B.




5) 11:15

A.




B.




6) 9:00

A.




B.




7) 8:30

A.




B.




8) 9:30

A.




B.




9) 4:45

A.



B.




10) 2:15

A.




B.




11) 12:30

A.




B.




12) 9:45

A.



B.

1.     **A**    2.     **B**    3.     **A**    4.     **A**    5.     **A**    6.     **A**    7.     **B**    8.     **A**    9.     **B**    10.     **B**    11.     **A**    12.     **B**