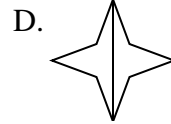
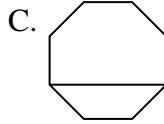
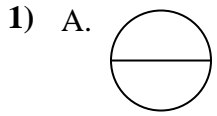




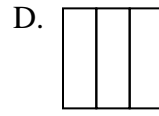
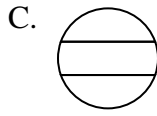
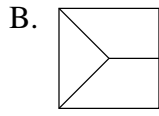
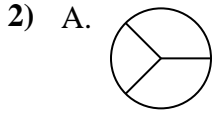
Determina cuál opción(es) muestran la forma dividida para que cada pieza tenga un área igual. Si ninguna, escriba 'ninguna'.

Respuestas



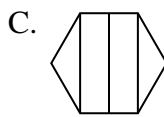
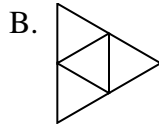
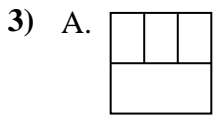
1. _____

2. _____



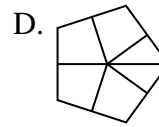
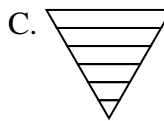
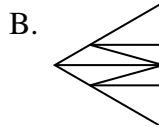
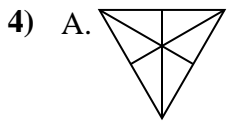
3. _____

4. _____



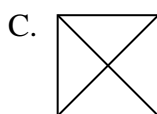
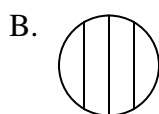
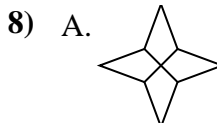
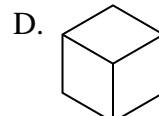
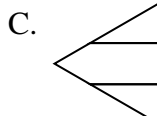
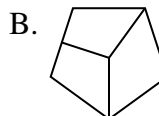
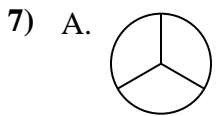
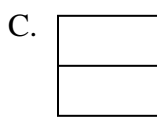
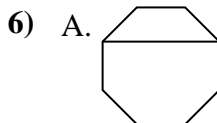
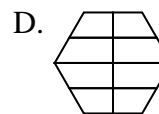
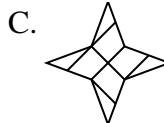
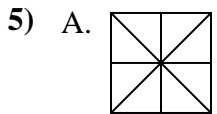
5. _____

6. _____



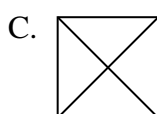
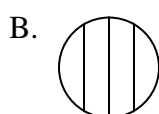
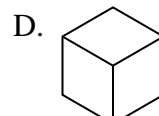
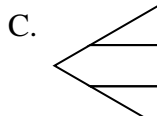
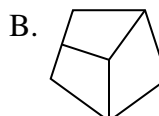
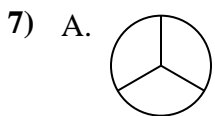
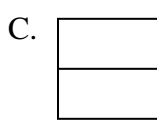
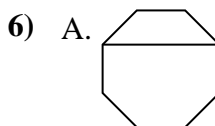
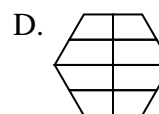
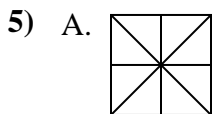
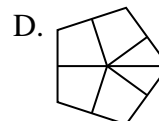
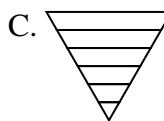
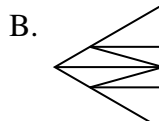
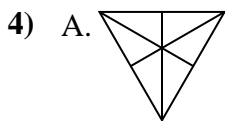
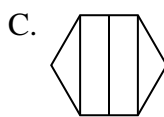
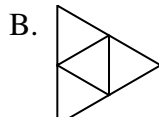
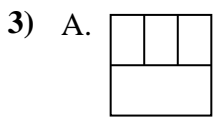
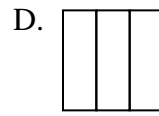
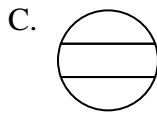
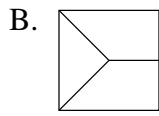
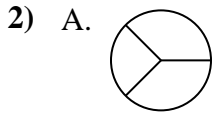
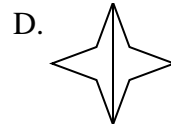
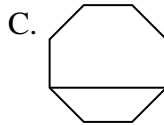
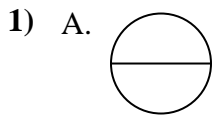
7. _____

8. _____





Determina cuál opción(es) muestran la forma dividida para que cada pieza tenga un área igual. Si ninguna, escriba 'ninguna'.



Respuestas

1. **A,B,D**

2. **D**

3. **B,D**

4. **A**

5. **A**

6. **B,C,D**

7. **A,D**

8. **A,C**