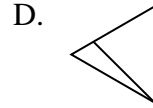
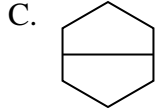
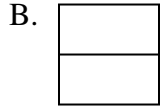




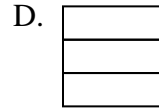
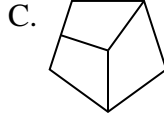
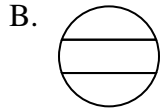
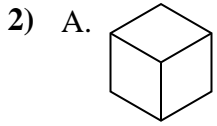
Determina cuál opción(es) muestran la forma dividida para que cada pieza tenga un área igual. Si ninguna, escriba 'ninguna'.

Respuestas



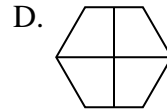
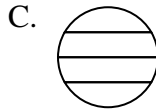

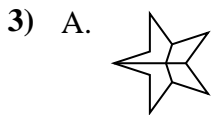
1. _____

2. _____



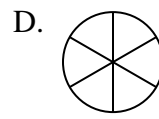
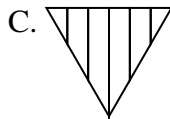
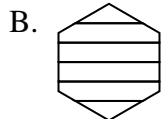
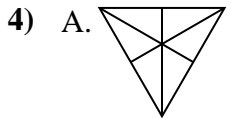
3. _____

4. _____



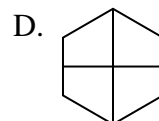
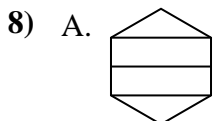
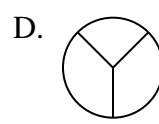

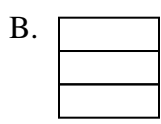
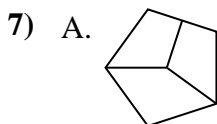
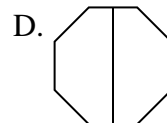
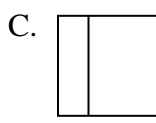
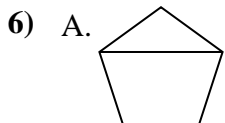
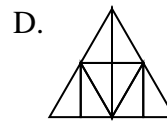
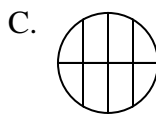
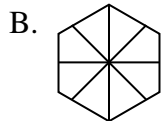
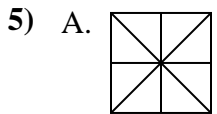
5. _____

6. _____



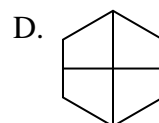
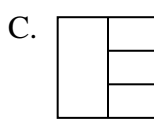
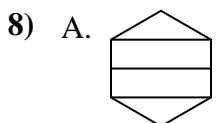
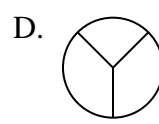
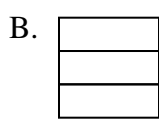
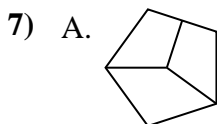
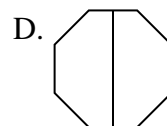
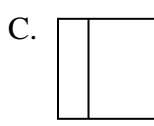
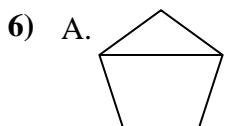
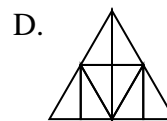
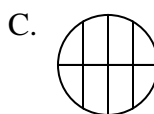
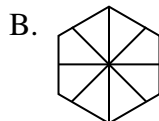
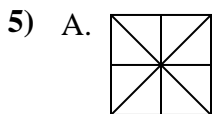
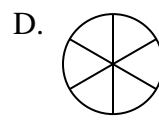
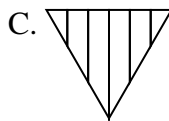
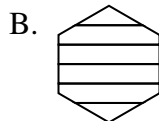
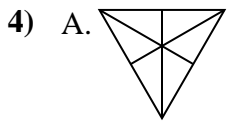
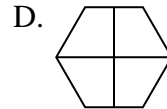
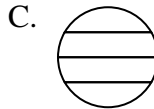

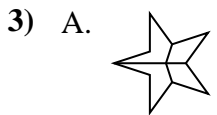
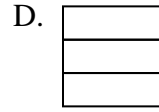
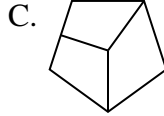
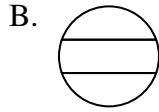
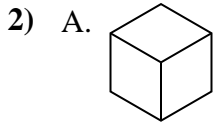
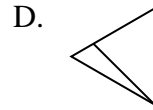
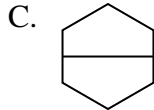
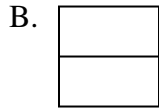
7. _____

8. _____





Determina cuál opción(es) muestran la forma dividida para que cada pieza tenga un área igual. Si ninguna, escriba 'ninguna'.



Respuestas

1. **B,C**

2. **A,D**

3. **B,D**

4. **A,D**

5. **A,D**

6. **B,D**

7. **B**

8. **D**