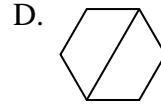
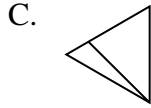
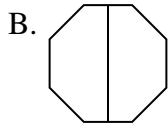
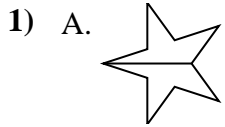




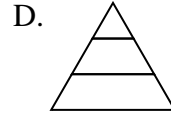
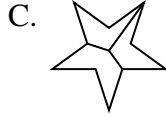
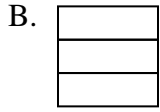
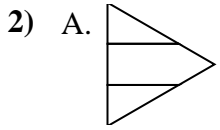
Determina cuál opción(es) muestran la forma dividida para que cada pieza tenga un área igual. Si ninguna, escriba 'ninguna'.

**Respuestas**



1. \_\_\_\_\_

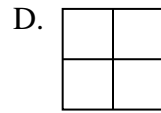
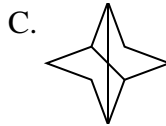

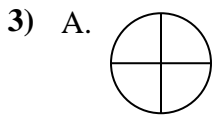
2. \_\_\_\_\_



3. \_\_\_\_\_

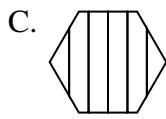
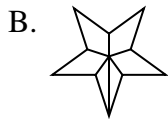
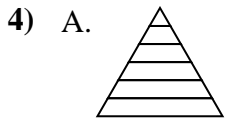
4. \_\_\_\_\_

5. \_\_\_\_\_

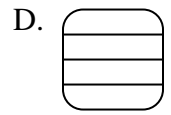
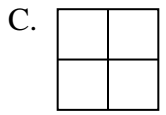
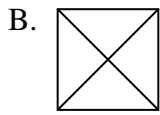
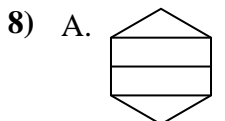
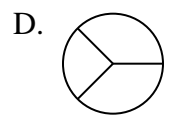
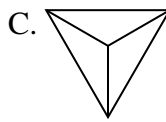
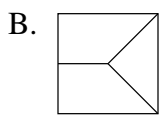
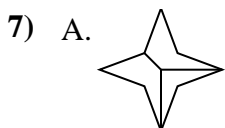
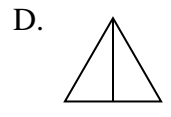
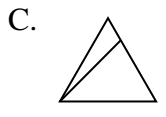
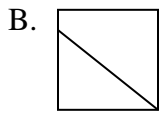
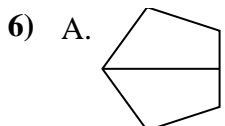
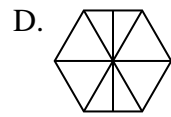
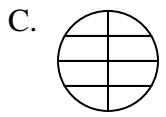
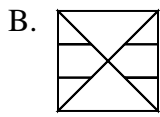
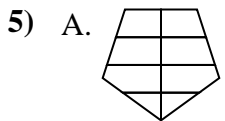


6. \_\_\_\_\_

7. \_\_\_\_\_

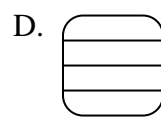
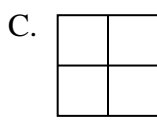
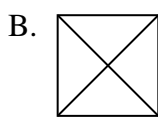
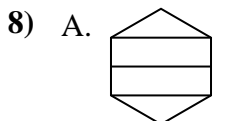
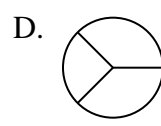
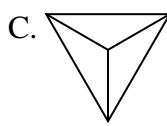
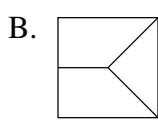
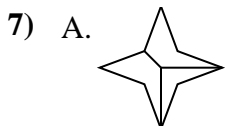
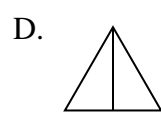
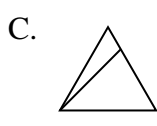
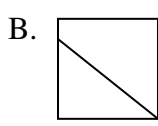
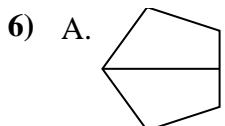
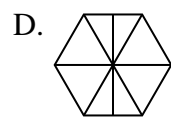
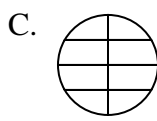
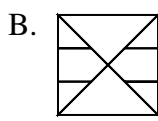
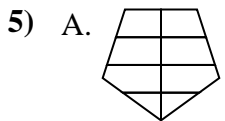
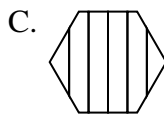
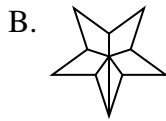
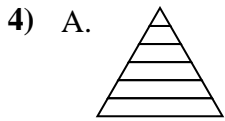
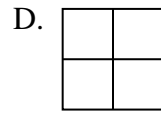
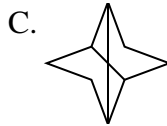
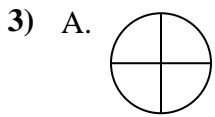
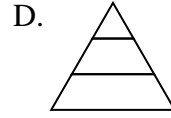
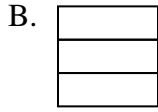
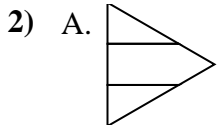
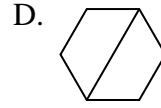
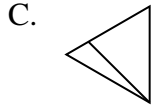
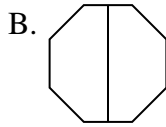
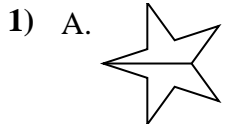


8. \_\_\_\_\_





Determina cuál opción(es) muestran la forma dividida para que cada pieza tenga un área igual. Si ninguna, escriba 'ninguna'.



**Respuestas**

1. **A,B,D**

2. **B**

3. **A,B,D**

4. **ninguna**

5. **ninguna**

6. **A,D**

7. **C**

8. **B,C**