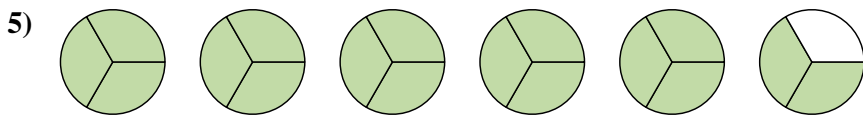
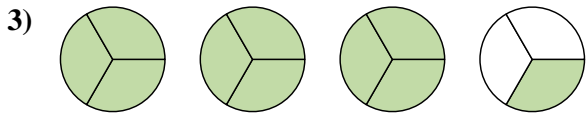
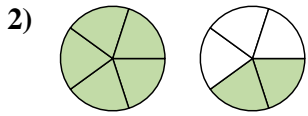
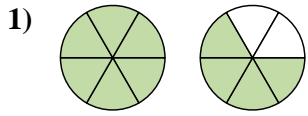
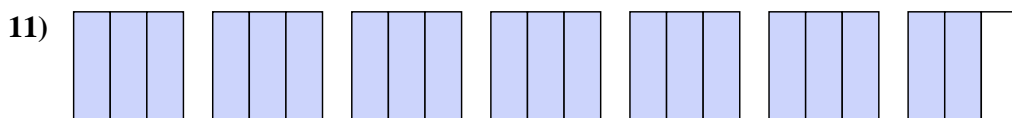
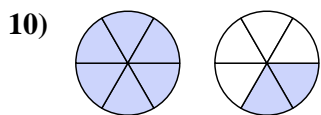
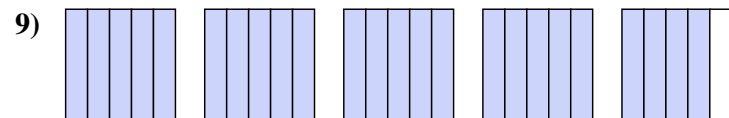
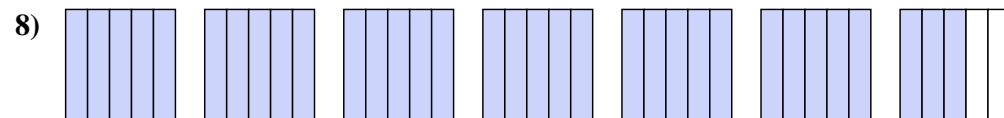
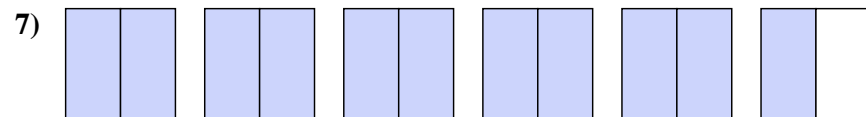
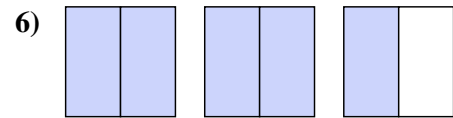




Escribe cada cantidad como un número mixto.



Escribe cada cantidad como una fracción impropia.

**Respuestas**

1. $1\frac{4}{6}$

2. $1\frac{2}{5}$

3. $3\frac{1}{3}$

4. $3\frac{4}{6}$

5. $5\frac{2}{3}$

6. $\frac{5}{2}$

7. $\frac{11}{2}$

8. $\frac{33}{5}$

9. $\frac{24}{5}$

10. $\frac{8}{6}$

11. $\frac{20}{3}$

