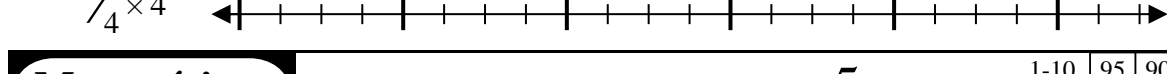
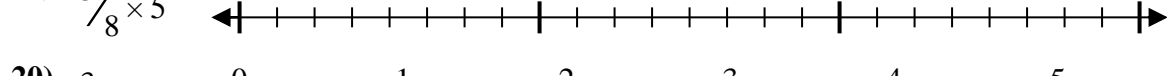
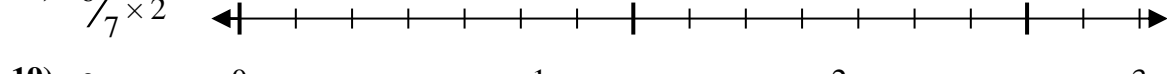
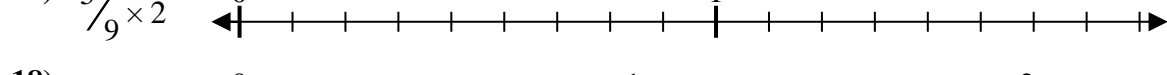
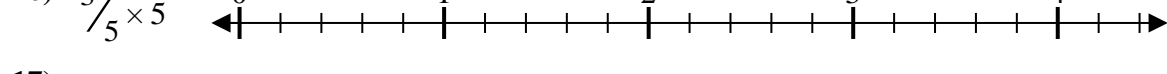
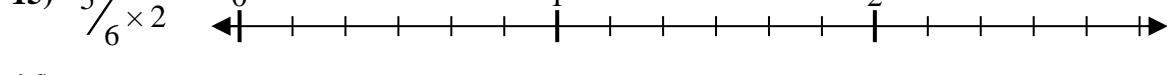
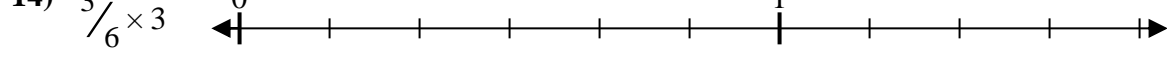
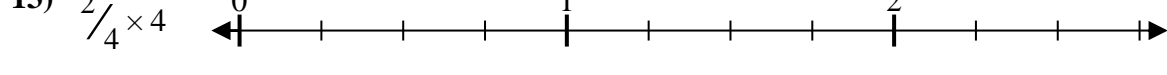
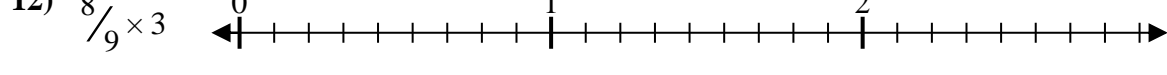
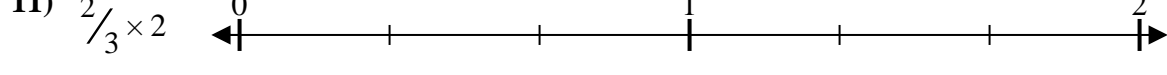
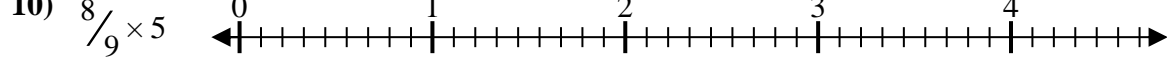
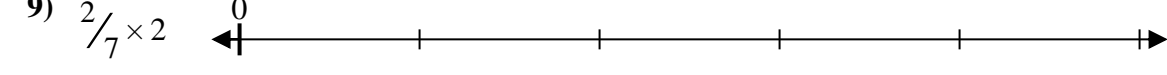
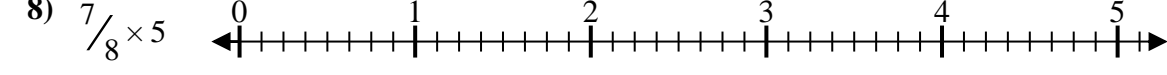
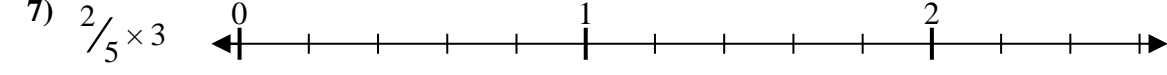
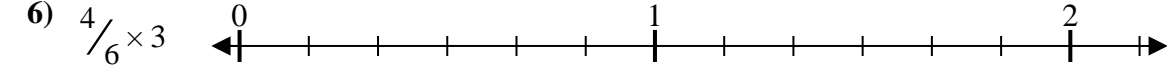
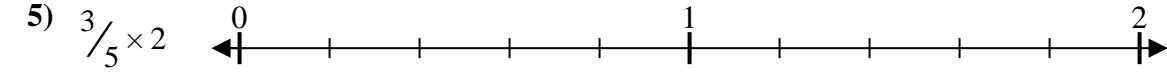
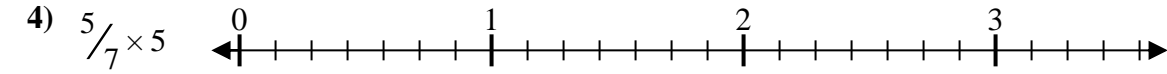
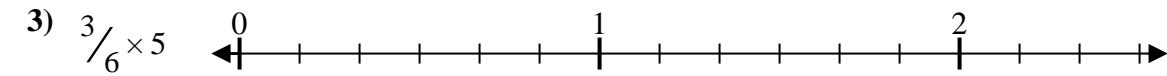
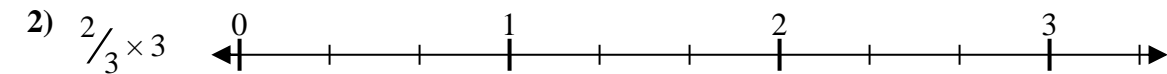
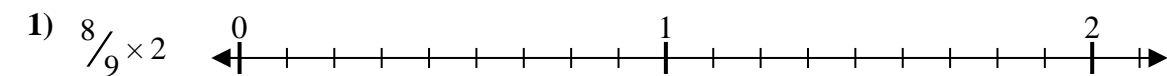




Resuelve cada problema.

Respuestas



1. _____

2. _____

3. _____

4. _____

5. _____

6. _____

7. _____

8. _____

9. _____

10. _____

11. _____

12. _____

13. _____

14. _____

15. _____

16. _____

17. _____

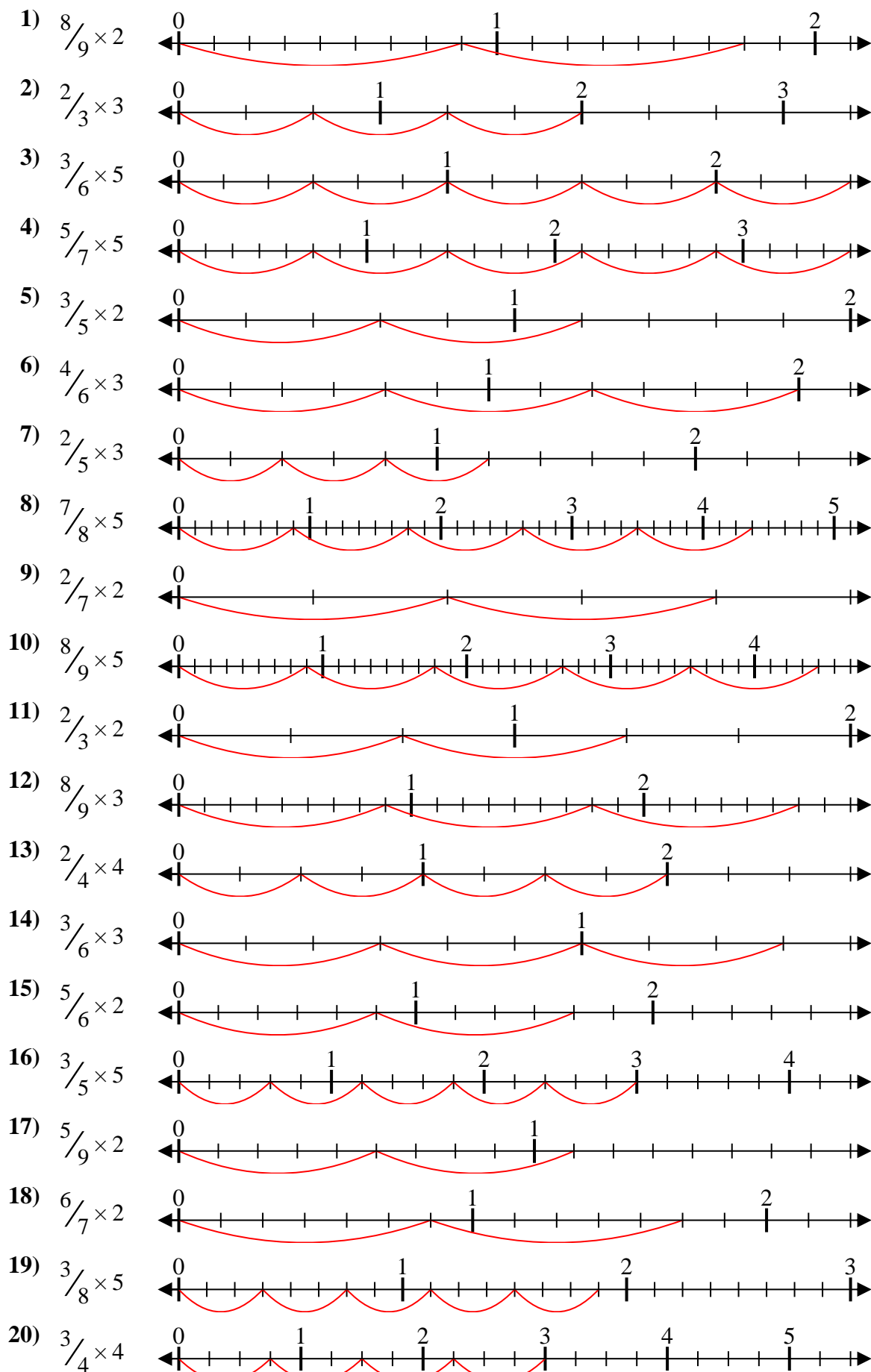
18. _____

19. _____

20. _____



Resuelve cada problema.



Respuestas

1. $\frac{16}{9} = 1\frac{7}{9}$
2. $\frac{6}{3} = 2$
3. $\frac{15}{6} = 2\frac{1}{2}$
4. $\frac{25}{7} = 3\frac{4}{7}$
5. $\frac{6}{5} = 1\frac{1}{5}$
6. $\frac{12}{6} = 2$
7. $\frac{6}{5} = 1\frac{1}{5}$
8. $\frac{35}{8} = 4\frac{3}{8}$
9. $\frac{4}{7} = \frac{4}{7}$
10. $\frac{40}{9} = 4\frac{4}{9}$
11. $\frac{4}{3} = 1\frac{1}{3}$
12. $\frac{24}{9} = 2\frac{2}{3}$
13. $\frac{8}{4} = 2$
14. $\frac{9}{6} = 1\frac{1}{2}$
15. $\frac{10}{6} = 1\frac{2}{3}$
16. $\frac{15}{5} = 3$
17. $\frac{10}{9} = 1\frac{1}{9}$
18. $\frac{12}{7} = 1\frac{5}{7}$
19. $\frac{15}{8} = 1\frac{7}{8}$
20. $\frac{12}{4} = 3$