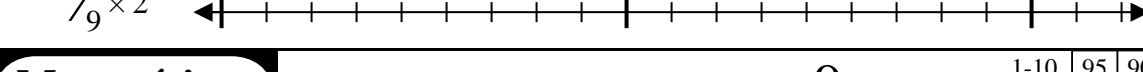
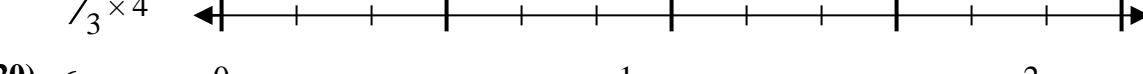
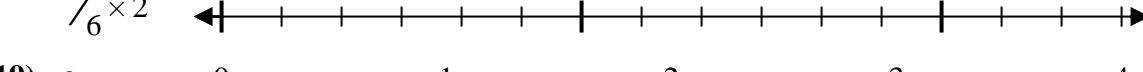
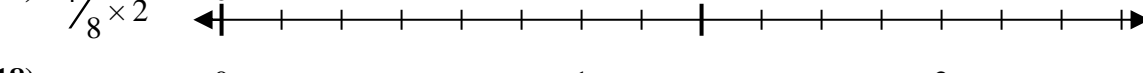
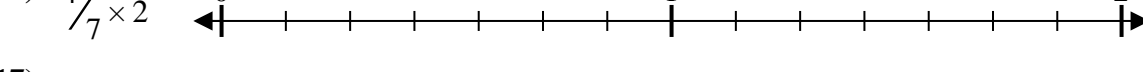
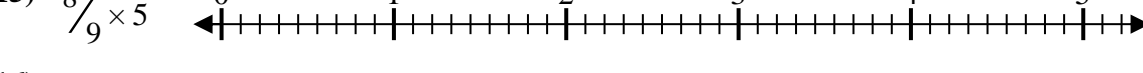
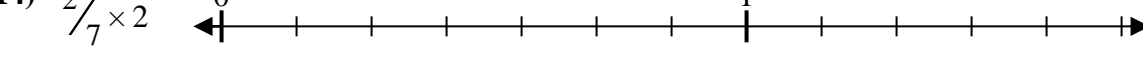
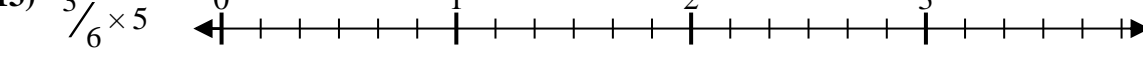
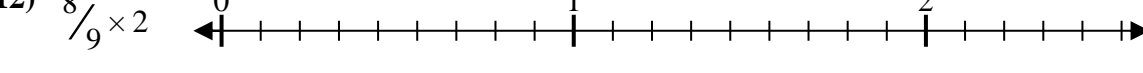
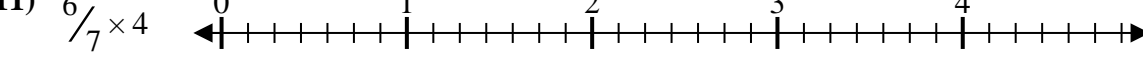
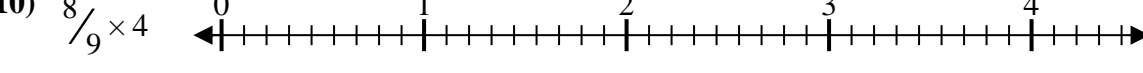
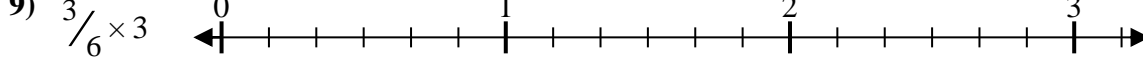
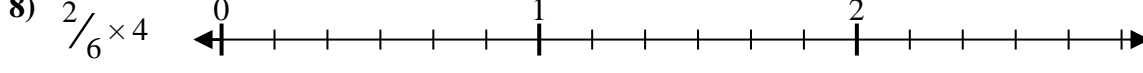
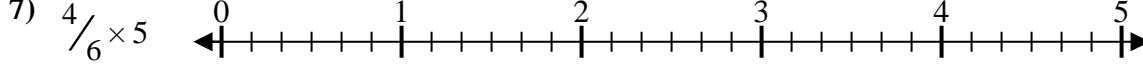
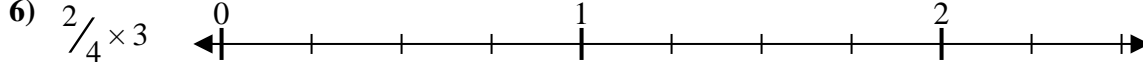
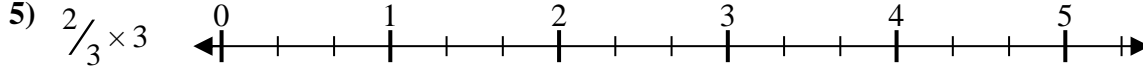
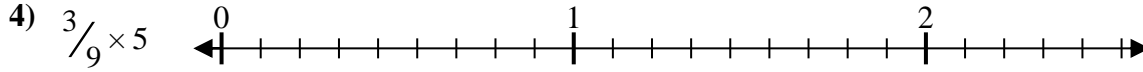
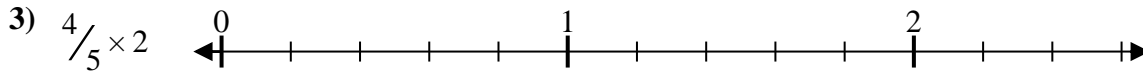
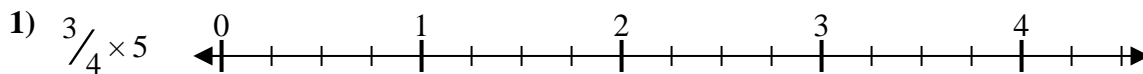




Resuelve cada problema.

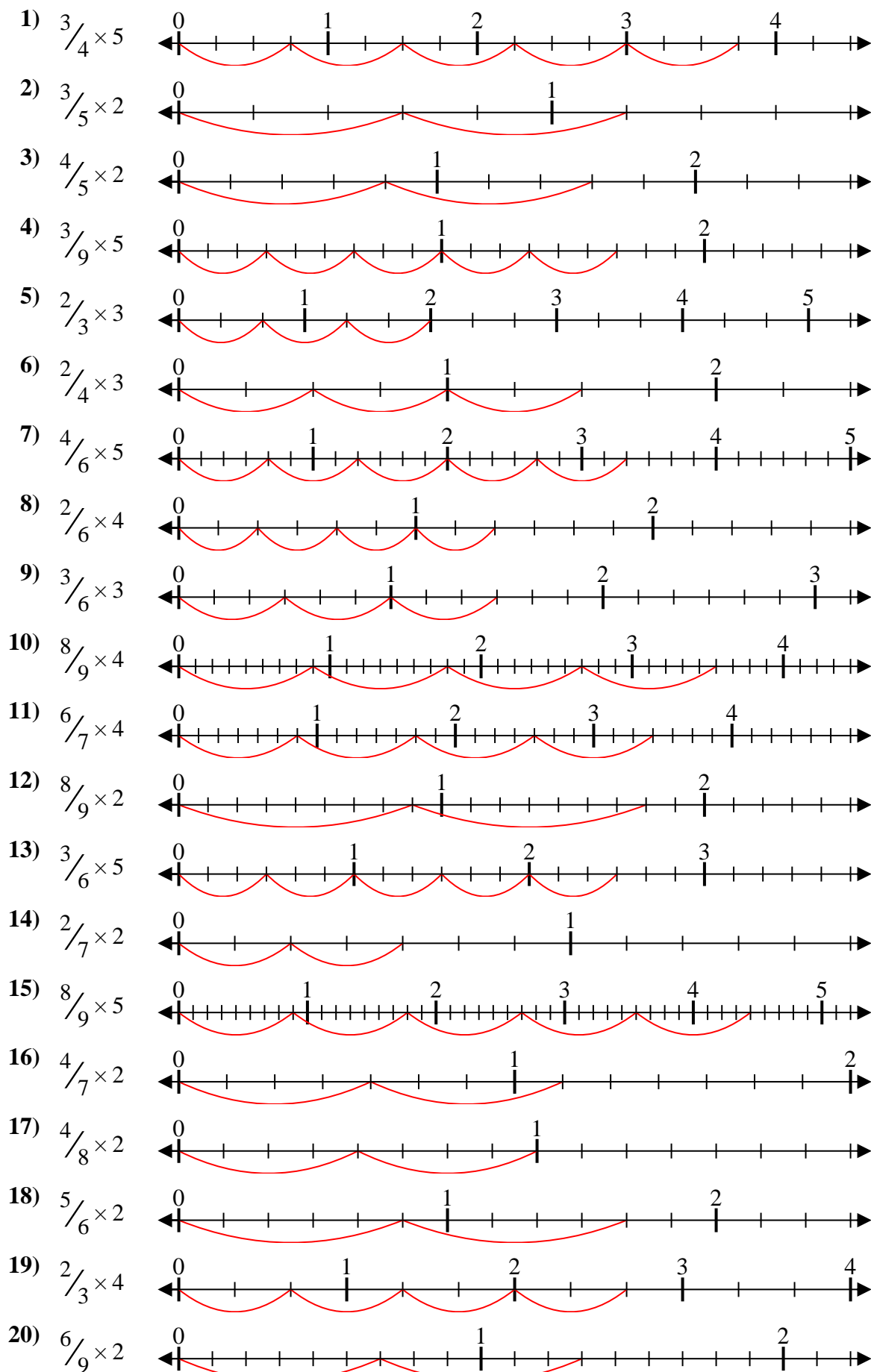
**Respuestas**



1. \_\_\_\_\_
2. \_\_\_\_\_
3. \_\_\_\_\_
4. \_\_\_\_\_
5. \_\_\_\_\_
6. \_\_\_\_\_
7. \_\_\_\_\_
8. \_\_\_\_\_
9. \_\_\_\_\_
10. \_\_\_\_\_
11. \_\_\_\_\_
12. \_\_\_\_\_
13. \_\_\_\_\_
14. \_\_\_\_\_
15. \_\_\_\_\_
16. \_\_\_\_\_
17. \_\_\_\_\_
18. \_\_\_\_\_
19. \_\_\_\_\_
20. \_\_\_\_\_



Resuelve cada problema.



**Respuestas**

1.  $\frac{15}{4} = 3\frac{3}{4}$
2.  $\frac{6}{5} = 1\frac{1}{5}$
3.  $\frac{8}{5} = 1\frac{3}{5}$
4.  $\frac{15}{9} = 1\frac{2}{3}$
5.  $\frac{6}{3} = 2$
6.  $\frac{6}{4} = 1\frac{1}{2}$
7.  $\frac{20}{6} = 3\frac{1}{3}$
8.  $\frac{8}{6} = 1\frac{1}{3}$
9.  $\frac{9}{6} = 1\frac{1}{2}$
10.  $\frac{32}{9} = 3\frac{5}{9}$
11.  $\frac{24}{7} = 3\frac{3}{7}$
12.  $\frac{16}{9} = 1\frac{7}{9}$
13.  $\frac{15}{6} = 2\frac{1}{2}$
14.  $\frac{4}{7} = \frac{4}{7}$
15.  $\frac{40}{9} = 4\frac{4}{9}$
16.  $\frac{8}{7} = 1\frac{1}{7}$
17.  $\frac{8}{8} = 1$
18.  $\frac{10}{6} = 1\frac{2}{3}$
19.  $\frac{8}{3} = 2\frac{2}{3}$
20.  $\frac{12}{9} = 1\frac{1}{3}$