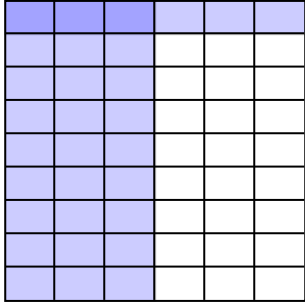


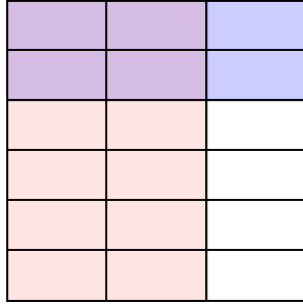


Usa la caja para mostrar de manera visual cómo multiplicar dos fracciones.

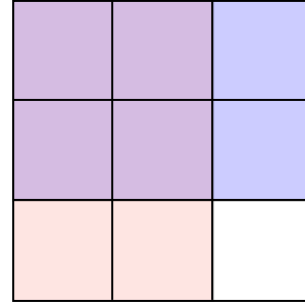
Ej) $\frac{3}{6} \times \frac{1}{9} =$



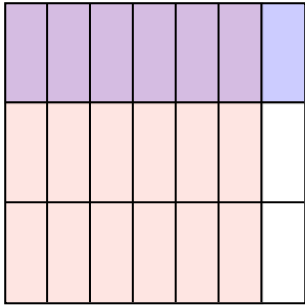
1) $\frac{2}{3} \times \frac{2}{6} =$



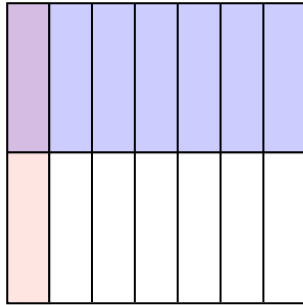
2) $\frac{2}{3} \times \frac{2}{3} =$



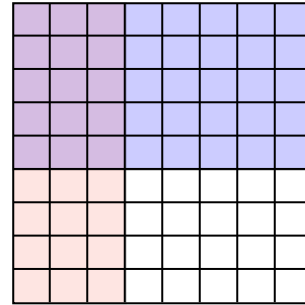
3) $\frac{6}{7} \times \frac{1}{3} =$



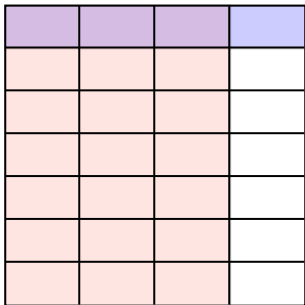
4) $\frac{1}{7} \times \frac{1}{2} =$



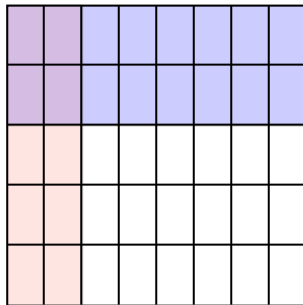
5) $\frac{3}{8} \times \frac{5}{9} =$



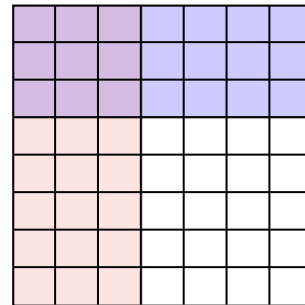
6) $\frac{3}{4} \times \frac{1}{7} =$



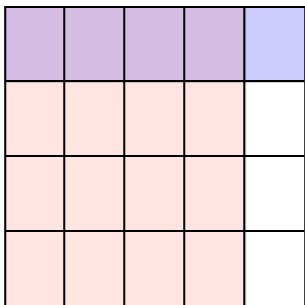
7) $\frac{2}{8} \times \frac{2}{5} =$



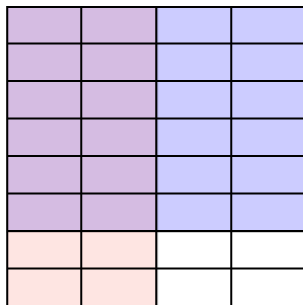
8) $\frac{3}{7} \times \frac{3}{8} =$



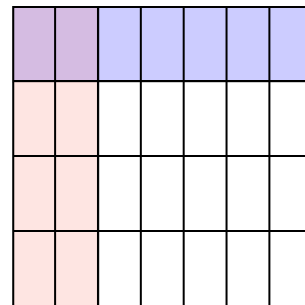
9) $\frac{4}{5} \times \frac{1}{4} =$



10) $\frac{2}{4} \times \frac{6}{8} =$



11) $\frac{2}{7} \times \frac{1}{4} =$



Respuestas

- Ej. $\frac{3}{54}$
- 1. $\frac{4}{18}$
- 2. $\frac{4}{9}$
- 3. $\frac{6}{21}$
- 4. $\frac{1}{14}$
- 5. $\frac{15}{72}$
- 6. $\frac{3}{28}$
- 7. $\frac{4}{40}$
- 8. $\frac{9}{56}$
- 9. $\frac{4}{20}$
- 10. $\frac{12}{32}$
- 11. $\frac{2}{28}$