




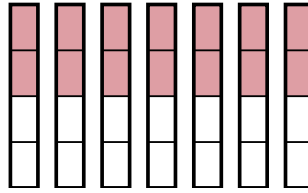


Usa los modelos visuales para resolver.

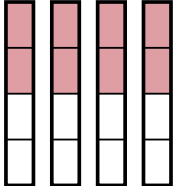
1)  $\frac{1}{2} \times 6 =$



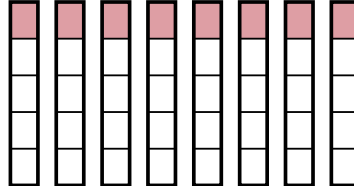
2)  $\frac{2}{4} \times 7 =$



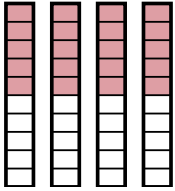
3)  $\frac{2}{4} \times 4 =$



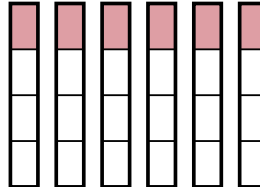
4)  $\frac{1}{5} \times 8 =$



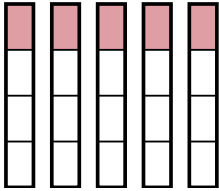
5)  $\frac{5}{10} \times 4 =$



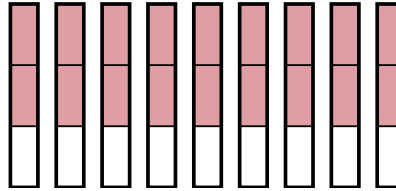
6)  $\frac{1}{4} \times 6 =$



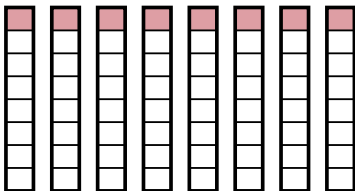
7)  $\frac{1}{4} \times 5 =$



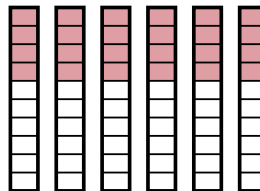
8)  $\frac{2}{3} \times 9 =$



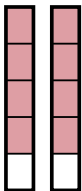
9)  $\frac{1}{8} \times 8 =$



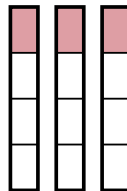
10)  $\frac{4}{10} \times 6 =$



11)  $\frac{4}{5} \times 2 =$



12)  $\frac{1}{4} \times 3 =$



**Respuestas**

1.  $\frac{6}{2}$
2.  $\frac{14}{4}$
3.  $\frac{8}{4}$
4.  $\frac{8}{5}$
5.  $\frac{20}{10}$
6.  $\frac{6}{4}$
7.  $\frac{5}{4}$
8.  $\frac{18}{3}$
9.  $\frac{8}{8}$
10.  $\frac{24}{10}$
11.  $\frac{8}{5}$
12.  $\frac{3}{4}$