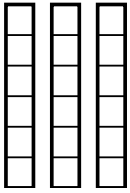


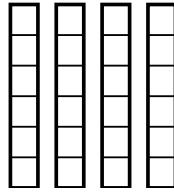


Usa los modelos visuales para resolver.

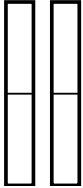
1)  $\frac{5}{6} \times 3 =$



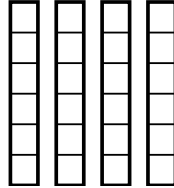
2)  $\frac{5}{6} \times 4 =$



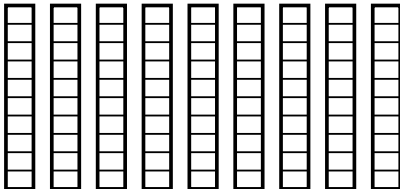
3)  $\frac{1}{2} \times 2 =$



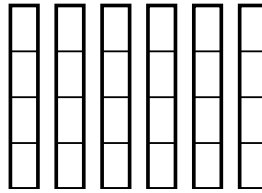
4)  $\frac{4}{6} \times 4 =$



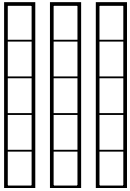
5)  $\frac{7}{10} \times 9 =$



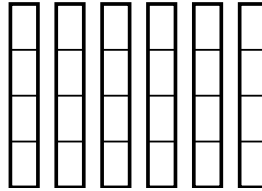
6)  $\frac{2}{4} \times 6 =$



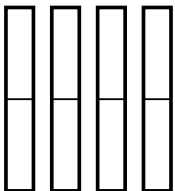
7)  $\frac{2}{5} \times 3 =$



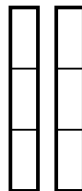
8)  $\frac{3}{4} \times 6 =$



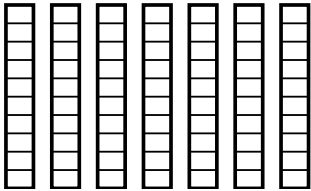
9)  $\frac{1}{2} \times 4 =$



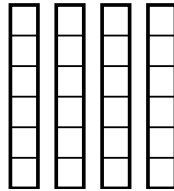
10)  $\frac{2}{3} \times 2 =$



11)  $\frac{8}{10} \times 7 =$



12)  $\frac{3}{6} \times 4 =$



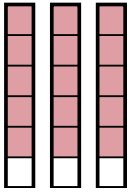
**Respuestas**

1. \_\_\_\_\_
2. \_\_\_\_\_
3. \_\_\_\_\_
4. \_\_\_\_\_
5. \_\_\_\_\_
6. \_\_\_\_\_
7. \_\_\_\_\_
8. \_\_\_\_\_
9. \_\_\_\_\_
10. \_\_\_\_\_
11. \_\_\_\_\_
12. \_\_\_\_\_

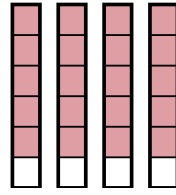


Usa los modelos visuales para resolver.

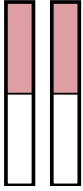
1)  $\frac{5}{6} \times 3 =$



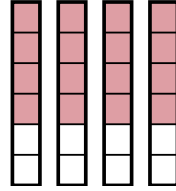
2)  $\frac{5}{6} \times 4 =$



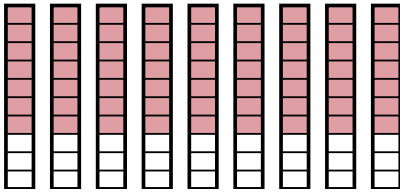
3)  $\frac{1}{2} \times 2 =$



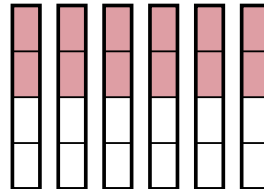
4)  $\frac{4}{6} \times 4 =$



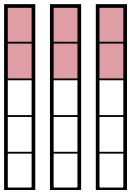
5)  $\frac{7}{10} \times 9 =$



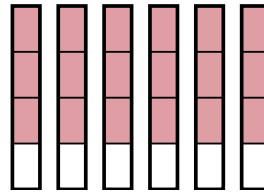
6)  $\frac{2}{4} \times 6 =$



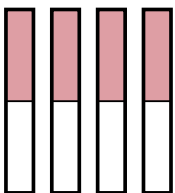
7)  $\frac{2}{5} \times 3 =$



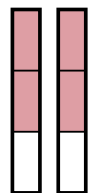
8)  $\frac{3}{4} \times 6 =$



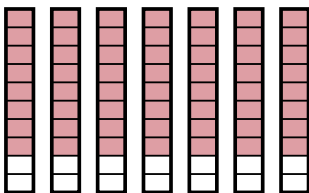
9)  $\frac{1}{2} \times 4 =$



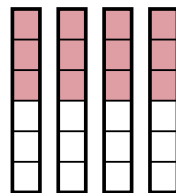
10)  $\frac{2}{3} \times 2 =$



11)  $\frac{8}{10} \times 7 =$



12)  $\frac{3}{6} \times 4 =$



**Respuestas**

1.  $\frac{15}{6}$

2.  $\frac{20}{6}$

3.  $\frac{2}{2}$

4.  $\frac{16}{6}$

5.  $\frac{63}{10}$

6.  $\frac{12}{4}$

7.  $\frac{6}{5}$

8.  $\frac{18}{4}$

9.  $\frac{4}{2}$

10.  $\frac{4}{3}$

11.  $\frac{56}{10}$

12.  $\frac{12}{6}$