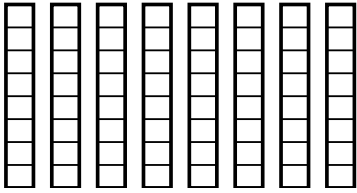


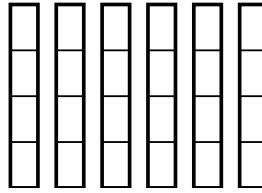


Usa los modelos visuales para resolver.

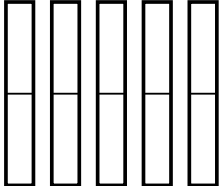
1) $\frac{7}{8} \times 8 =$



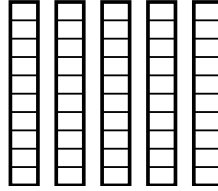
2) $\frac{1}{4} \times 6 =$



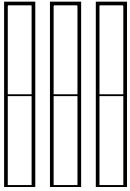
3) $\frac{1}{2} \times 5 =$



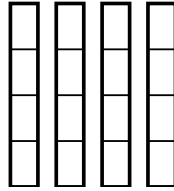
4) $\frac{3}{10} \times 5 =$



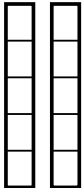
5) $\frac{1}{2} \times 3 =$



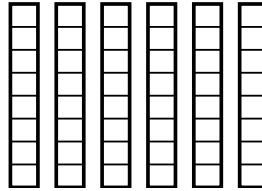
6) $\frac{3}{4} \times 4 =$



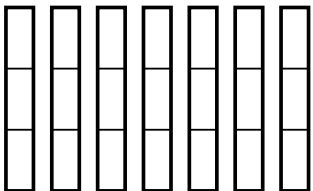
7) $\frac{1}{5} \times 2 =$



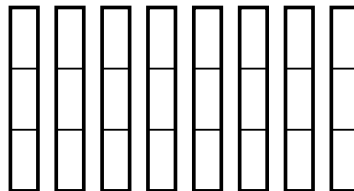
8) $\frac{2}{8} \times 6 =$



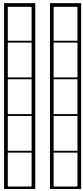
9) $\frac{2}{3} \times 7 =$



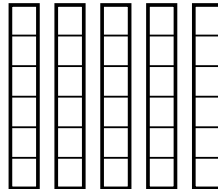
10) $\frac{1}{3} \times 8 =$



11) $\frac{2}{5} \times 2 =$



12) $\frac{5}{6} \times 5 =$



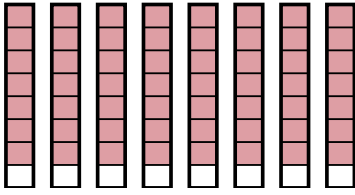
Respuestas

1. _____
2. _____
3. _____
4. _____
5. _____
6. _____
7. _____
8. _____
9. _____
10. _____
11. _____
12. _____

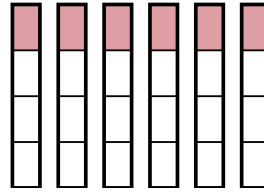


Usa los modelos visuales para resolver.

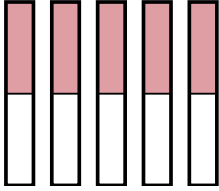
1) $\frac{7}{8} \times 8 =$



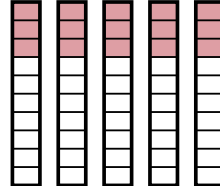
2) $\frac{1}{4} \times 6 =$



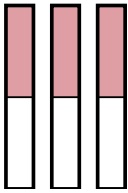
3) $\frac{1}{2} \times 5 =$



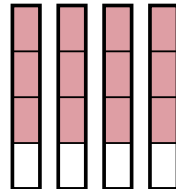
4) $\frac{3}{10} \times 5 =$



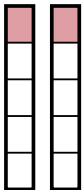
5) $\frac{1}{2} \times 3 =$



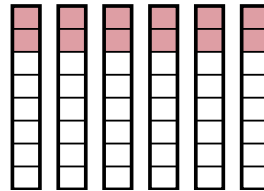
6) $\frac{3}{4} \times 4 =$



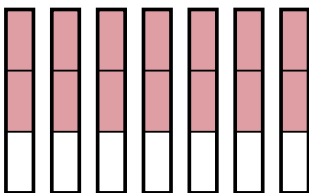
7) $\frac{1}{5} \times 2 =$



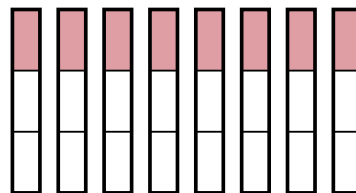
8) $\frac{2}{8} \times 6 =$



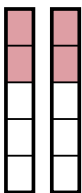
9) $\frac{2}{3} \times 7 =$



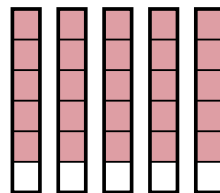
10) $\frac{1}{3} \times 8 =$



11) $\frac{2}{5} \times 2 =$



12) $\frac{5}{6} \times 5 =$



Respuestas

1. $\frac{56}{8}$

2. $\frac{6}{4}$

3. $\frac{5}{2}$

4. $\frac{15}{10}$

5. $\frac{3}{2}$

6. $\frac{12}{4}$

7. $\frac{2}{5}$

8. $\frac{12}{8}$

9. $\frac{14}{3}$

10. $\frac{8}{3}$

11. $\frac{4}{5}$

12. $\frac{25}{6}$