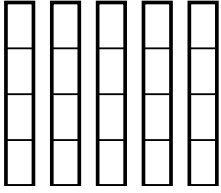


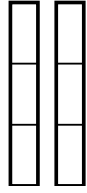


Usa los modelos visuales para resolver.

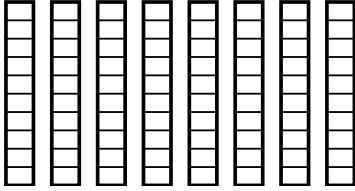
1) $\frac{2}{4} \times 5 =$



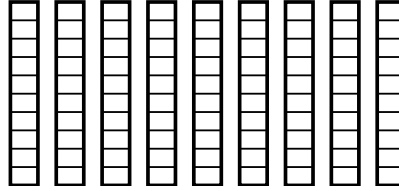
2) $\frac{1}{3} \times 2 =$



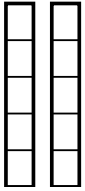
3) $\frac{5}{10} \times 8 =$



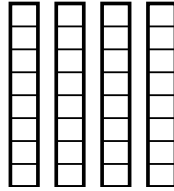
4) $\frac{2}{10} \times 9 =$



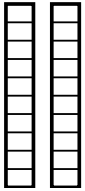
5) $\frac{1}{5} \times 2 =$



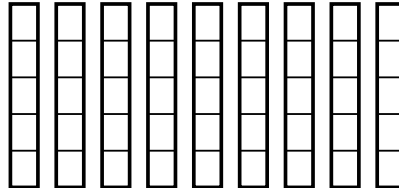
6) $\frac{3}{8} \times 4 =$



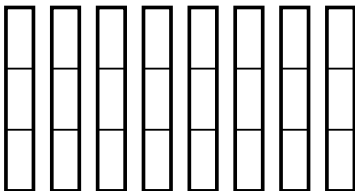
7) $\frac{3}{10} \times 2 =$



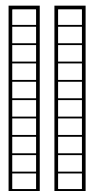
8) $\frac{2}{5} \times 9 =$



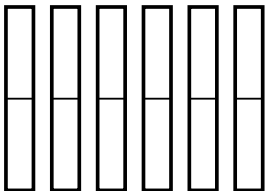
9) $\frac{1}{3} \times 8 =$



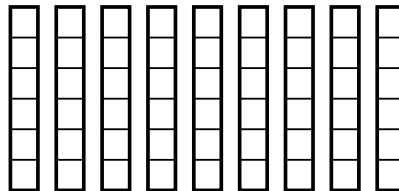
10) $\frac{7}{10} \times 2 =$



11) $\frac{1}{2} \times 6 =$



12) $\frac{5}{6} \times 9 =$



Respuestas

1. _____

2. _____

3. _____

4. _____

5. _____

6. _____

7. _____

8. _____

9. _____

10. _____

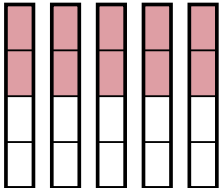
11. _____

12. _____

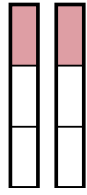


Usa los modelos visuales para resolver.

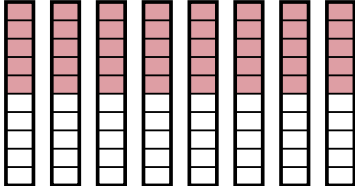
1) $\frac{2}{4} \times 5 =$



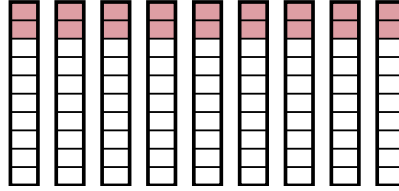
2) $\frac{1}{3} \times 2 =$



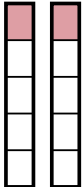
3) $\frac{5}{10} \times 8 =$



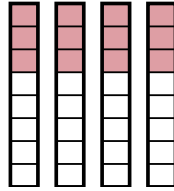
4) $\frac{2}{10} \times 9 =$



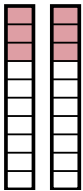
5) $\frac{1}{5} \times 2 =$



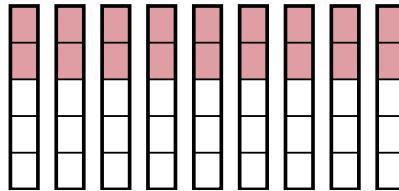
6) $\frac{3}{8} \times 4 =$



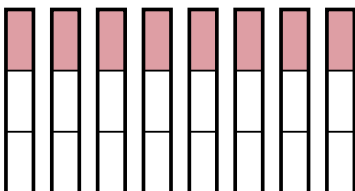
7) $\frac{3}{10} \times 2 =$



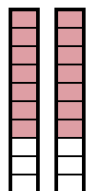
8) $\frac{2}{5} \times 9 =$



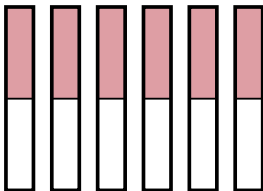
9) $\frac{1}{3} \times 8 =$



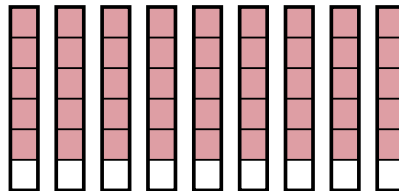
10) $\frac{7}{10} \times 2 =$



11) $\frac{1}{2} \times 6 =$



12) $\frac{5}{6} \times 9 =$



Respuestas

1. $\frac{10}{4}$

2. $\frac{2}{3}$

3. $\frac{40}{10}$

4. $\frac{18}{10}$

5. $\frac{2}{5}$

6. $\frac{12}{8}$

7. $\frac{6}{10}$

8. $\frac{18}{5}$

9. $\frac{8}{3}$

10. $\frac{14}{10}$

11. $\frac{6}{2}$

12. $\frac{45}{6}$