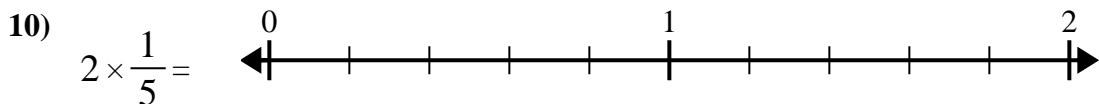
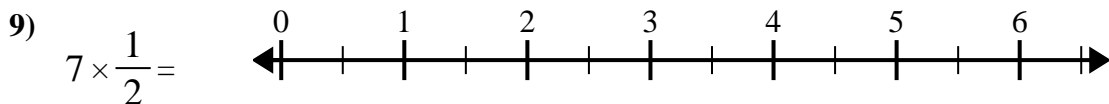
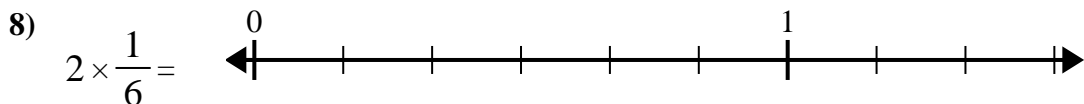
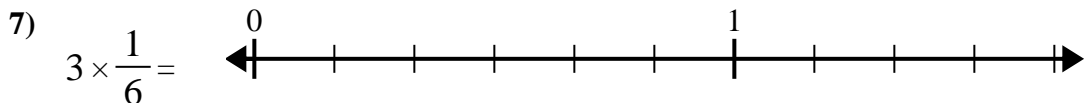
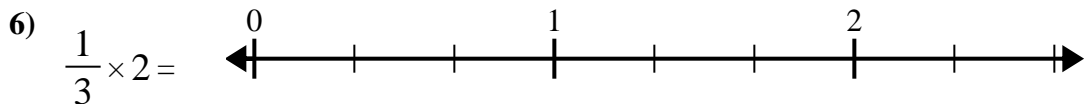
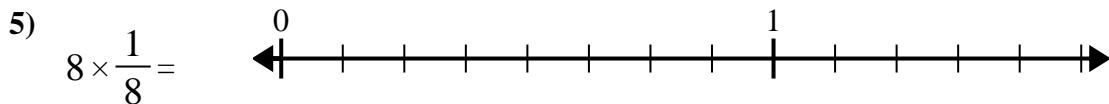
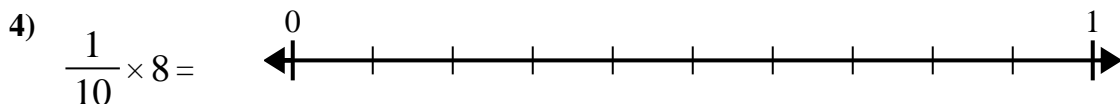
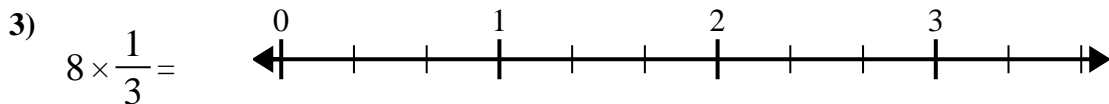
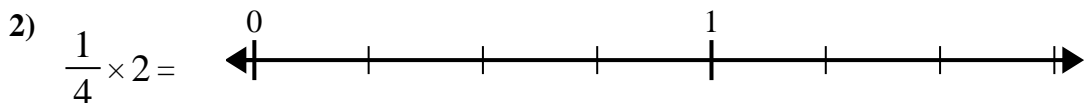
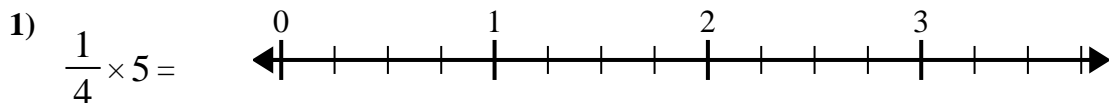




Usa la recta numérica para resolver.



Respuestas

1. _____

2. _____

3. _____

4. _____

5. _____

6. _____

7. _____

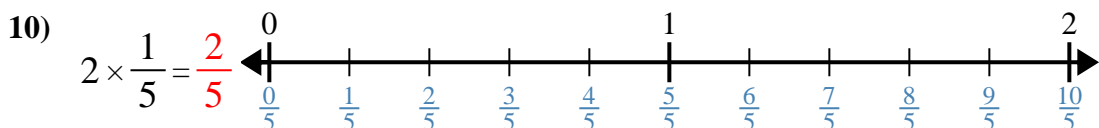
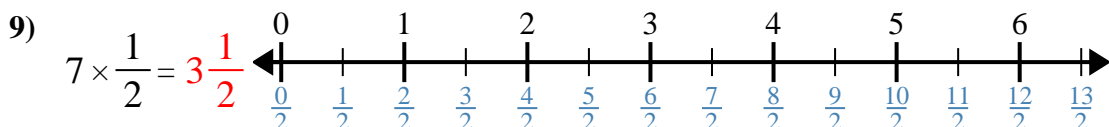
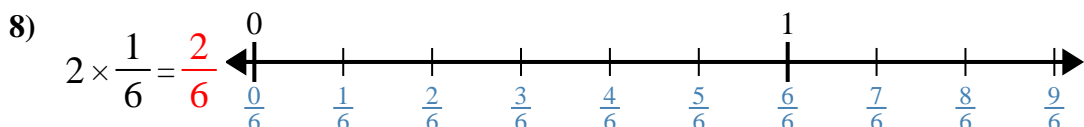
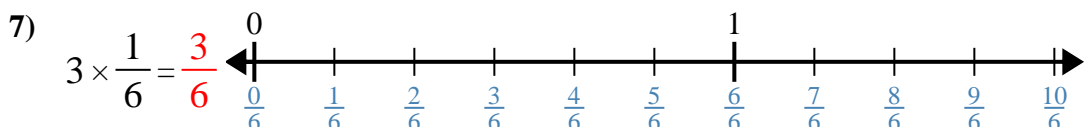
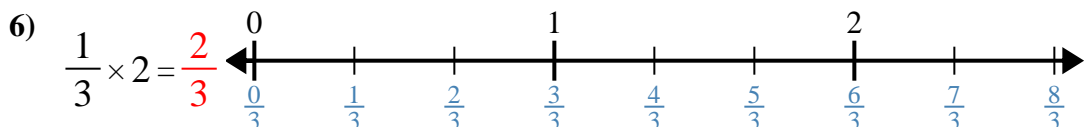
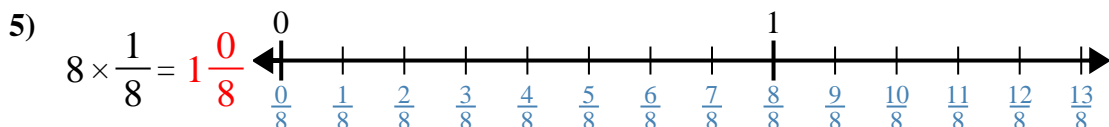
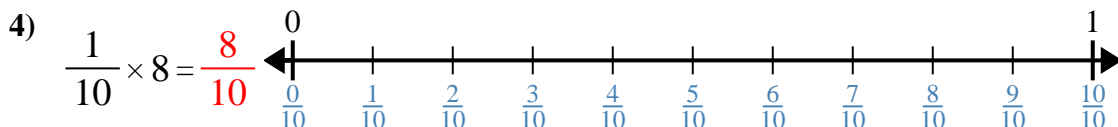
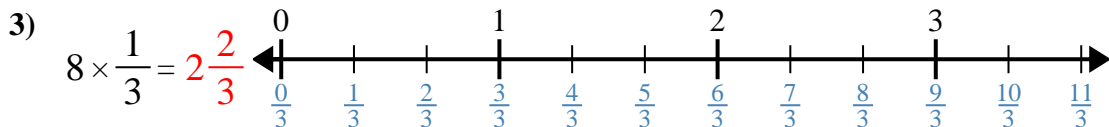
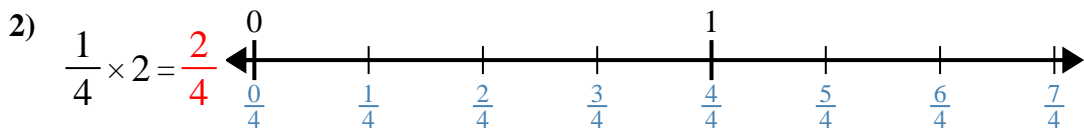
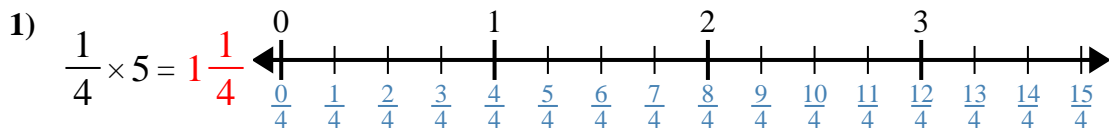
8. _____

9. _____

10. _____



Usa la recta numérica para resolver.



Respuestas

1. $1\frac{1}{4}$

2. $\frac{2}{4}$

3. $2\frac{2}{3}$

4. $\frac{8}{10}$

5. $1\frac{0}{8}$

6. $\frac{2}{3}$

7. $\frac{3}{6}$

8. $\frac{2}{6}$

9. $3\frac{1}{2}$

10. $\frac{2}{5}$



Usa la recta numérica para resolver.

$\frac{2}{3}$	$2\frac{2}{3}$	$3\frac{1}{2}$	$\frac{2}{6}$
$\frac{2}{4}$	$\frac{2}{5}$	$\frac{8}{10}$	$1\frac{0}{8}$
$\frac{3}{6}$	$1\frac{1}{4}$		

Respuestas

1) $\frac{1}{4} \times 5 =$

2) $\frac{1}{4} \times 2 =$

3) $8 \times \frac{1}{3} =$

4) $\frac{1}{10} \times 8 =$

5) $8 \times \frac{1}{8} =$

6) $\frac{1}{3} \times 2 =$

7) $3 \times \frac{1}{6} =$

8) $2 \times \frac{1}{6} =$

9) $7 \times \frac{1}{2} =$

10) $2 \times \frac{1}{5} =$

1. _____
2. _____
3. _____
4. _____
5. _____
6. _____
7. _____
8. _____
9. _____
10. _____