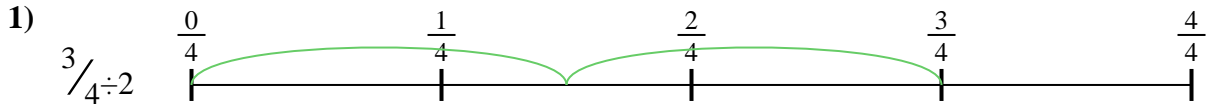




Usa la recta numérica para resolver cada problema. El primero ya está marcado como ejemplo.

Respuestas




1. _____

2. _____




3. _____

4. _____




5. _____

6. _____

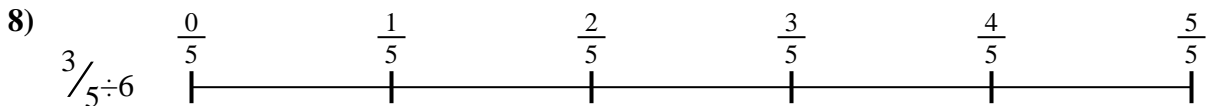

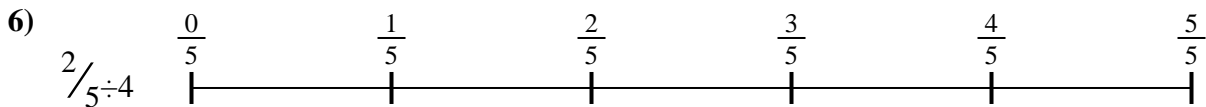


7. _____

8. _____



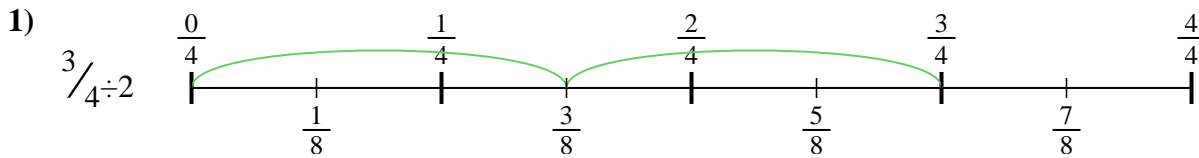
9. _____



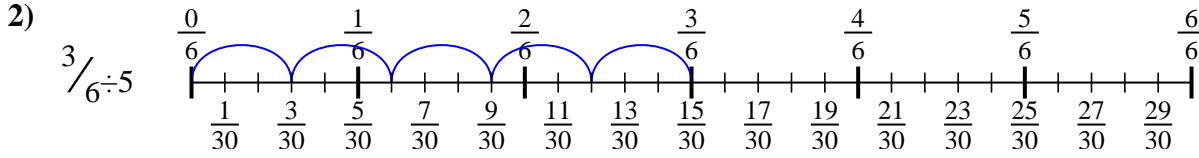


Usa la recta numérica para resolver cada problema. El primero ya está marcado como ejemplo.

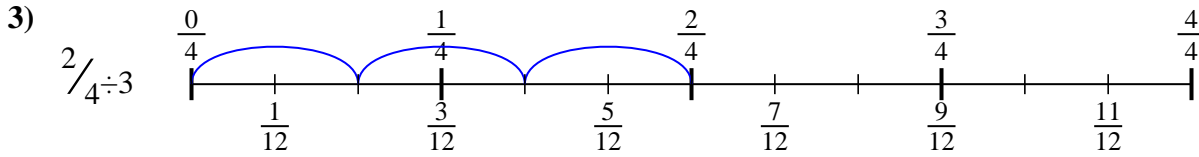
Respuestas



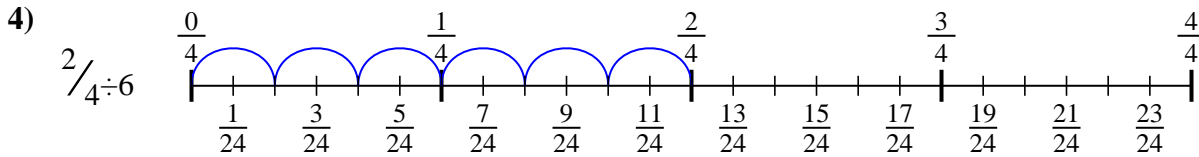
1. $\frac{3}{8}$



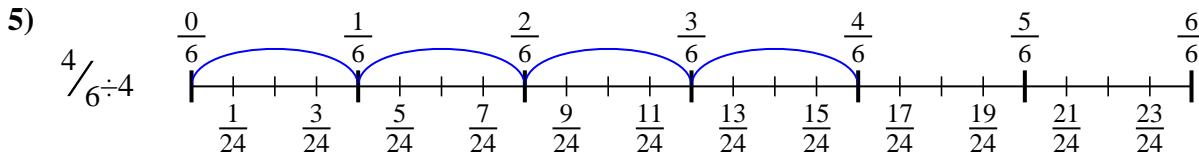
2. $\frac{3}{30}$



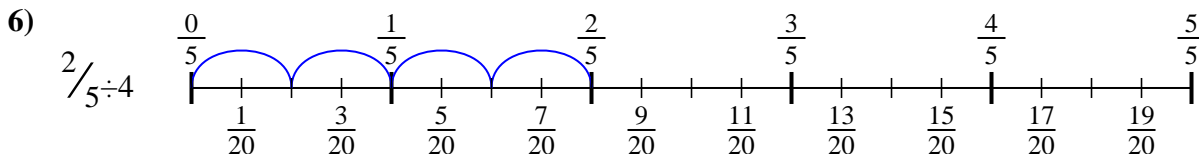
3. $\frac{2}{12}$



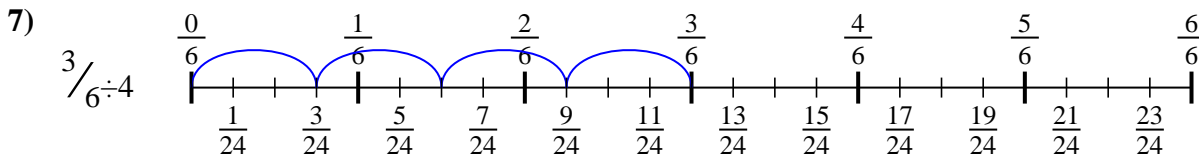
4. $\frac{2}{24}$



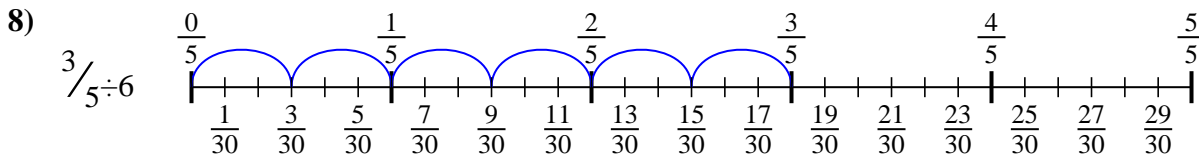
5. $\frac{4}{24}$



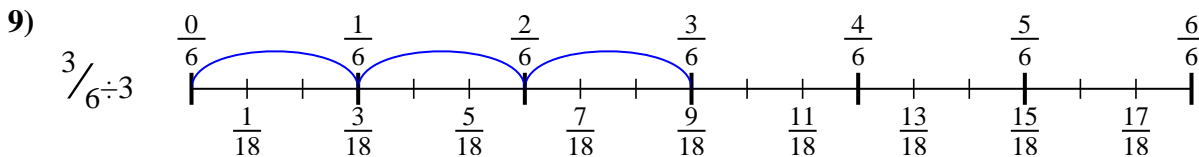
6. $\frac{2}{20}$



7. $\frac{3}{24}$



8. $\frac{3}{30}$



9. $\frac{3}{18}$



Usa la recta numérica para resolver cada problema. El primero ya está marcado como ejemplo.

Respuestas

$\frac{3}{24}$	$\frac{3}{30}$	$\frac{2}{20}$	$\frac{3}{30}$
$\frac{4}{24}$	$\frac{2}{12}$	$\frac{3}{8}$	$\frac{2}{24}$
$\frac{3}{18}$			

1) $\frac{3}{4} \div 2$

2) $\frac{3}{6} \div 5$

3) $\frac{2}{4} \div 3$

4) $\frac{2}{4} \div 6$

5) $\frac{4}{6} \div 4$

6) $\frac{2}{5} \div 4$

7) $\frac{3}{6} \div 4$

8) $\frac{3}{5} \div 6$

9) $\frac{3}{6} \div 3$

1. _____
2. _____
3. _____
4. _____
5. _____
6. _____
7. _____
8. _____
9. _____