




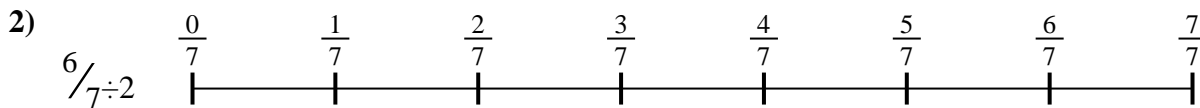
Usa la recta numérica para resolver cada problema. El primero ya está marcado como ejemplo.

**Respuestas**



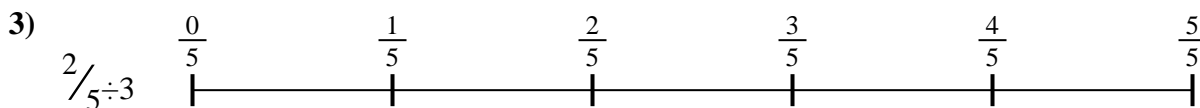
1. \_\_\_\_\_

2. \_\_\_\_\_



3. \_\_\_\_\_

4. \_\_\_\_\_



5. \_\_\_\_\_

6. \_\_\_\_\_

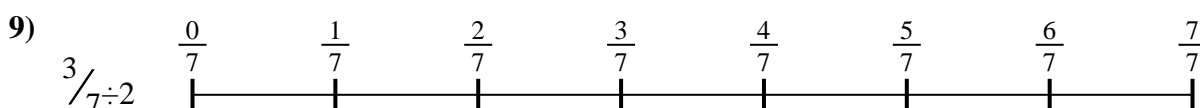
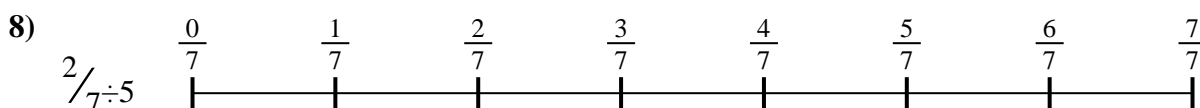


7. \_\_\_\_\_

8. \_\_\_\_\_



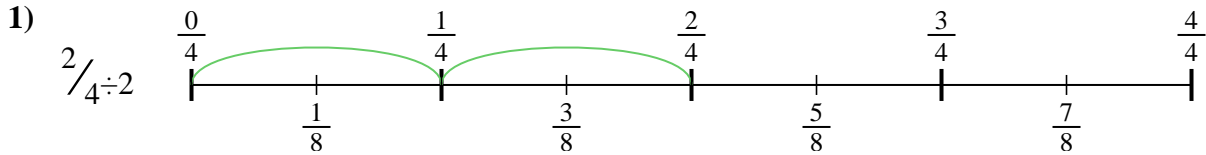
9. \_\_\_\_\_



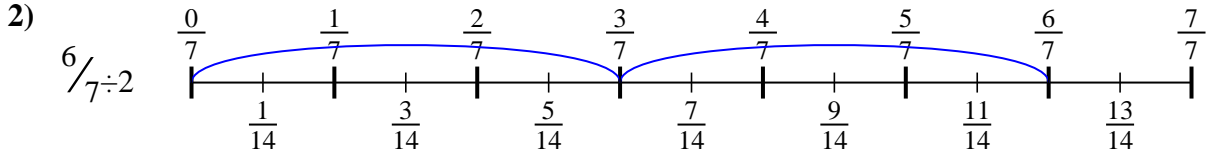


Usa la recta numérica para resolver cada problema. El primero ya está marcado como ejemplo.

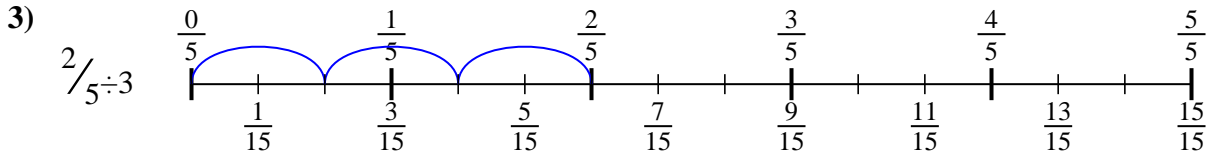
**Respuestas**



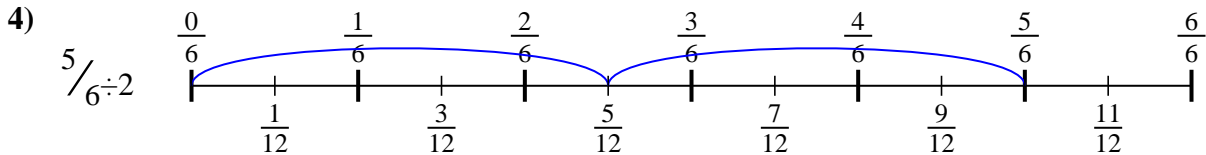
1.  $\frac{2}{8}$



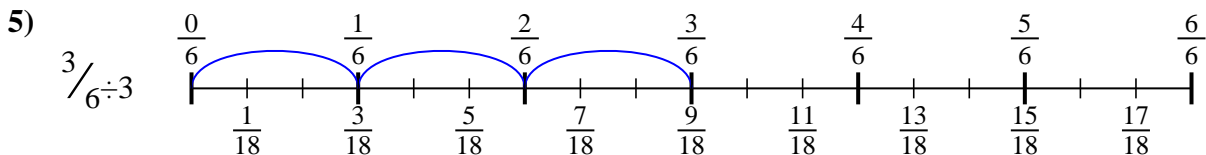
2.  $\frac{6}{14}$



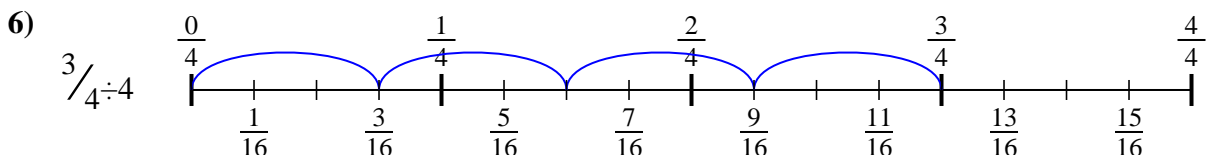
3.  $\frac{2}{15}$



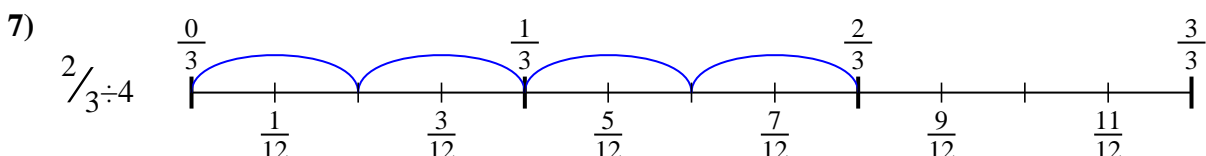
4.  $\frac{5}{12}$



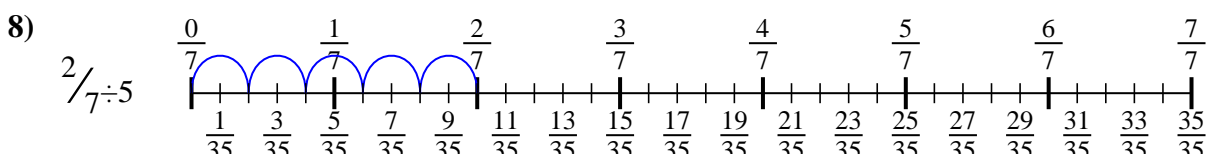
5.  $\frac{3}{18}$



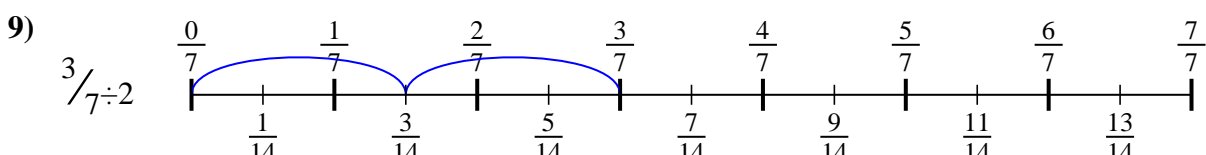
6.  $\frac{3}{16}$



7.  $\frac{2}{12}$



8.  $\frac{2}{35}$



9.  $\frac{3}{14}$



Usa la recta numérica para resolver cada problema. El primero ya está marcado como ejemplo.

Respuestas

$\frac{2}{15}$

$\frac{2}{8}$

$\frac{2}{35}$

$\frac{5}{12}$

$\frac{2}{12}$

$\frac{3}{18}$

$\frac{6}{14}$

$\frac{3}{14}$

$\frac{3}{16}$

1. \_\_\_\_\_

2. \_\_\_\_\_

3. \_\_\_\_\_

4. \_\_\_\_\_

5. \_\_\_\_\_

6. \_\_\_\_\_

7. \_\_\_\_\_

8. \_\_\_\_\_

9. \_\_\_\_\_

