



Usa la recta numérica para resolver cada problema. El primero ya está marcado como ejemplo.

Respuestas

1. _____

2. _____




3. _____

4. _____




5. _____

6. _____


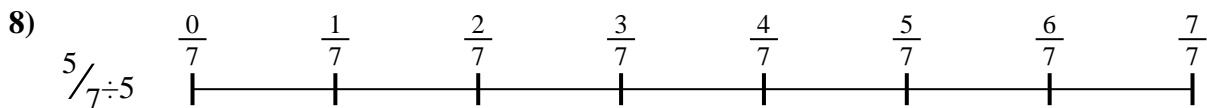
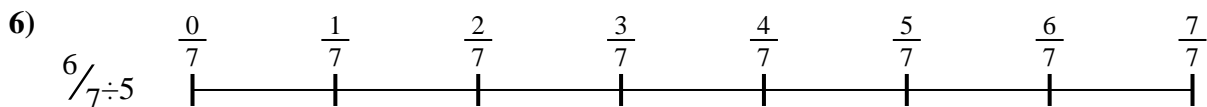


7. _____

8. _____



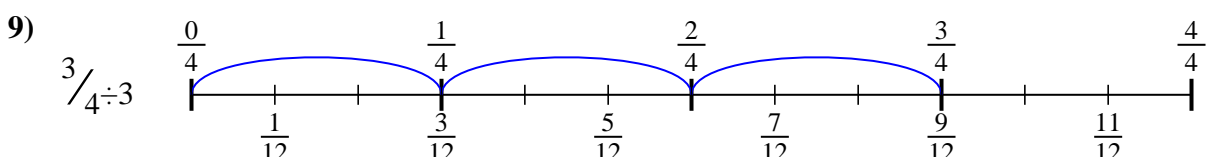
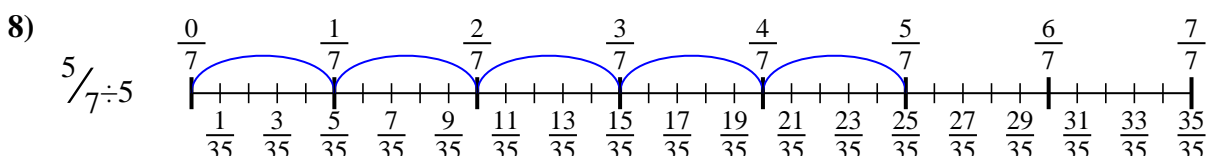
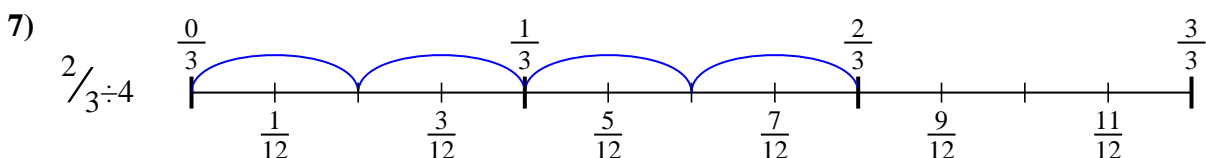
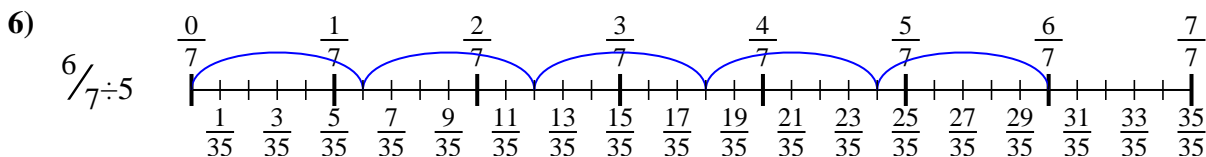
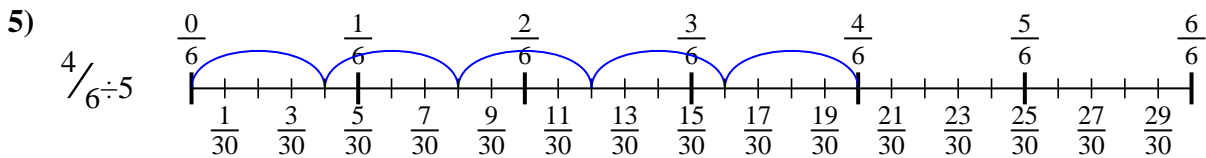
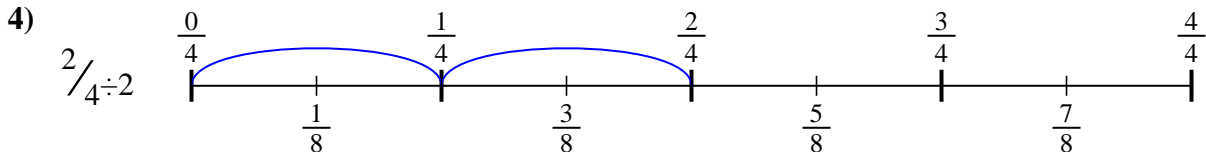
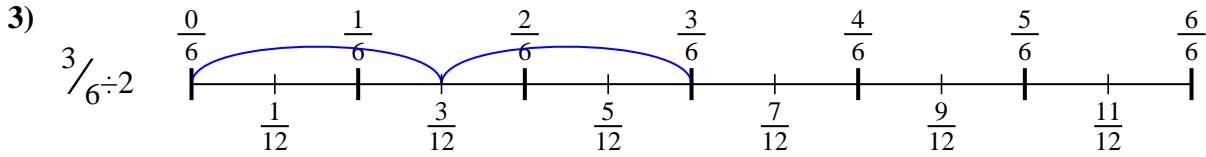
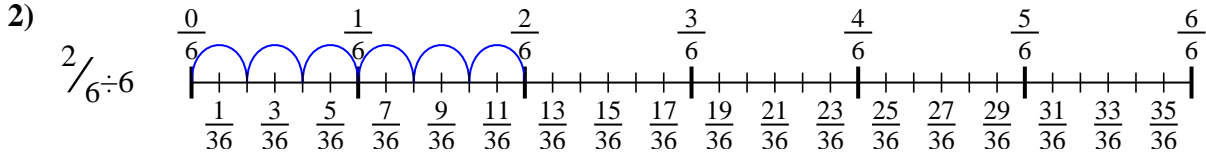
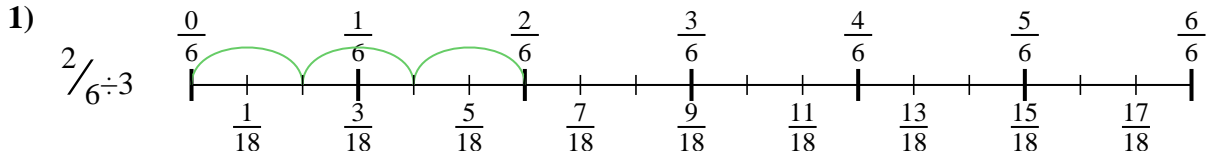
9. _____





Usa la recta numérica para resolver cada problema. El primero ya está marcado como ejemplo.

Respuestas



1. $\frac{2}{18}$
2. $\frac{2}{36}$
3. $\frac{3}{12}$
4. $\frac{2}{8}$
5. $\frac{4}{30}$
6. $\frac{6}{35}$
7. $\frac{2}{12}$
8. $\frac{5}{35}$
9. $\frac{3}{12}$



Usa la recta numérica para resolver cada problema. El primero ya está marcado como ejemplo.

Respuestas

$\frac{2}{18}$

$\frac{2}{8}$

$\frac{2}{36}$

$\frac{3}{12}$

$\frac{6}{35}$

$\frac{5}{35}$

$\frac{4}{30}$

$\frac{2}{12}$

$\frac{3}{12}$

1. _____

2. _____

3. _____

4. _____

5. _____

6. _____

7. _____

8. _____

9. _____

