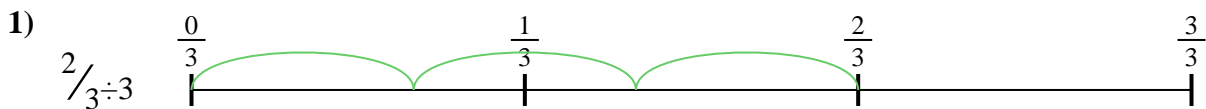




Usa la recta numérica para resolver cada problema. El primero ya está marcado como ejemplo.

**Respuestas**




1. \_\_\_\_\_

2. \_\_\_\_\_



3. \_\_\_\_\_

4. \_\_\_\_\_



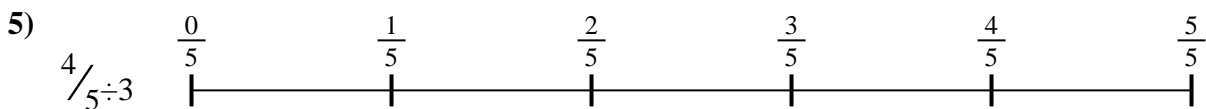
5. \_\_\_\_\_

6. \_\_\_\_\_

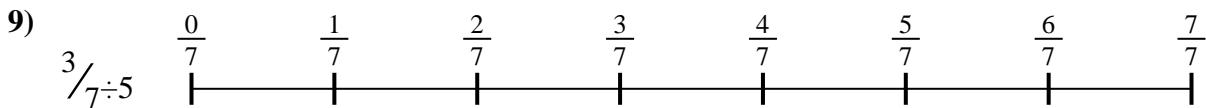
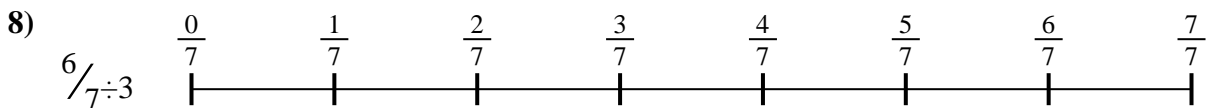
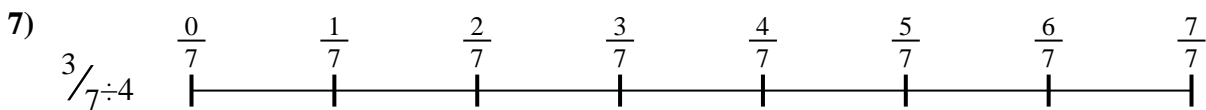


7. \_\_\_\_\_

8. \_\_\_\_\_



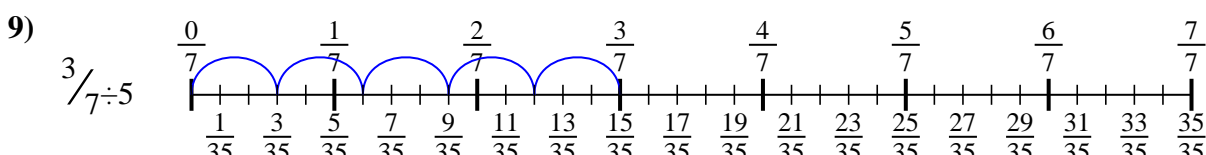
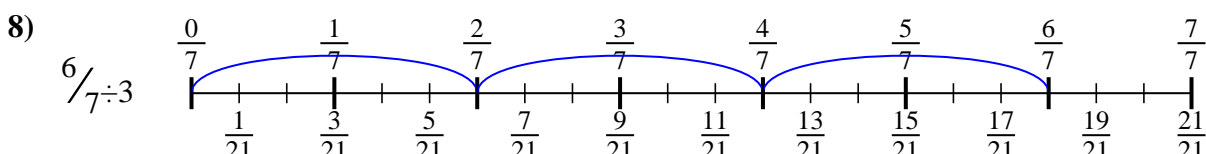
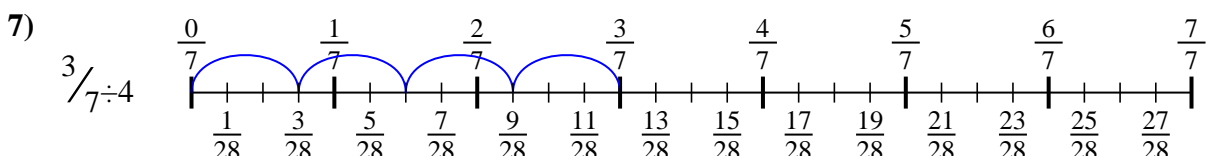
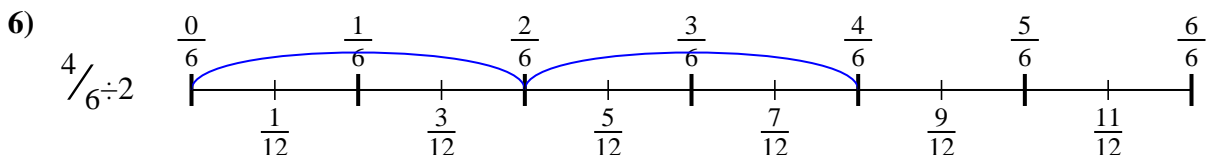
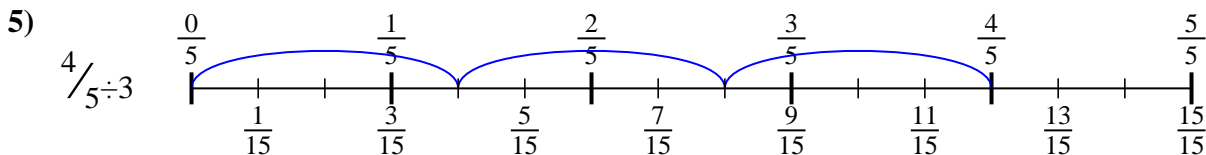
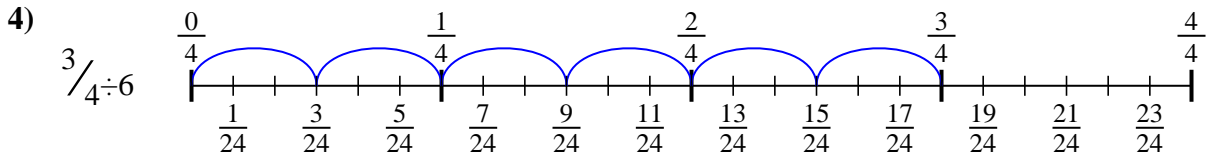
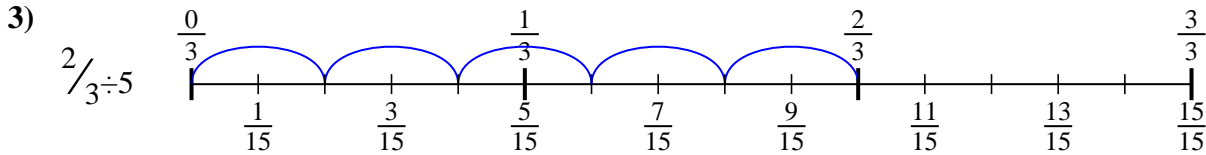
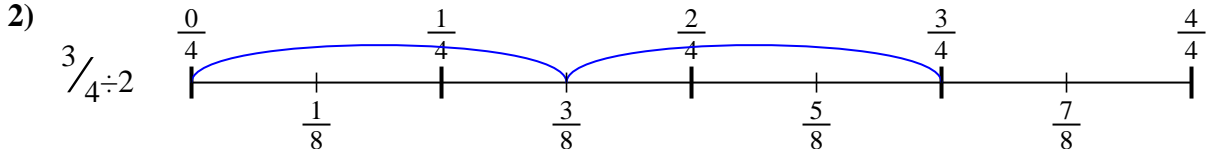
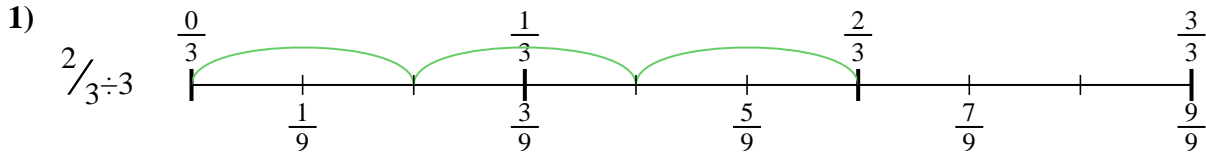
9. \_\_\_\_\_





Usa la recta numérica para resolver cada problema. El primero ya está marcado como ejemplo.

**Respuestas**



1.  $\frac{2}{9}$
2.  $\frac{3}{8}$
3.  $\frac{2}{15}$
4.  $\frac{3}{24}$
5.  $\frac{4}{15}$
6.  $\frac{4}{12}$
7.  $\frac{3}{28}$
8.  $\frac{6}{21}$
9.  $\frac{3}{35}$



Usa la recta numérica para resolver cada problema. El primero ya está marcado como ejemplo.

**Respuestas**

$\frac{3}{24}$

$\frac{2}{15}$

$\frac{3}{28}$

$\frac{2}{9}$

$\frac{6}{21}$

$\frac{4}{12}$

$\frac{3}{8}$

$\frac{3}{35}$

$\frac{4}{15}$

1. \_\_\_\_\_

2. \_\_\_\_\_

3. \_\_\_\_\_

4. \_\_\_\_\_

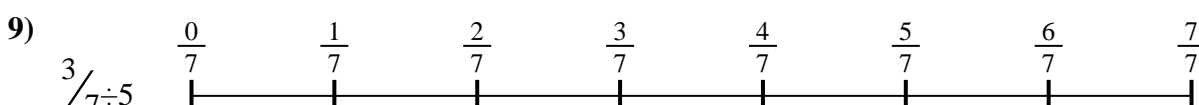
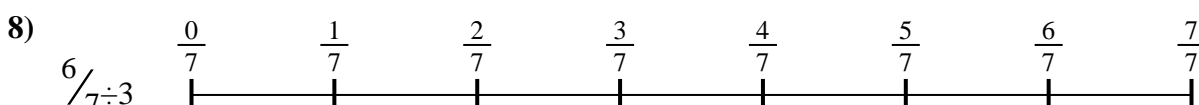
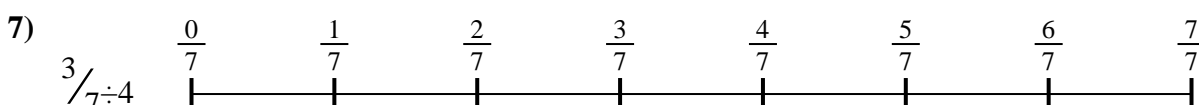

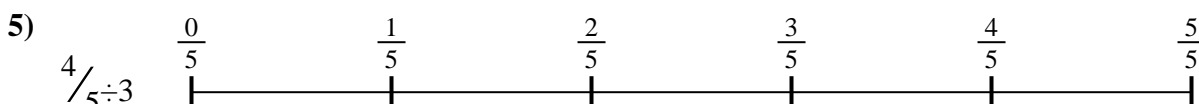

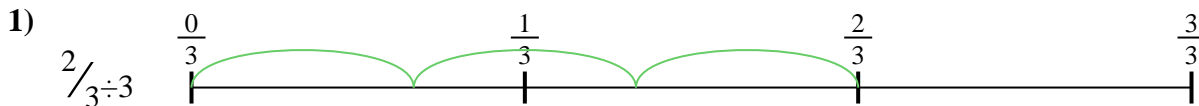
5. \_\_\_\_\_

6. \_\_\_\_\_

7. \_\_\_\_\_

8. \_\_\_\_\_

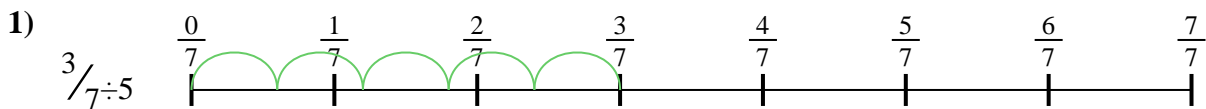
9. \_\_\_\_\_





Usa la recta numérica para resolver cada problema. El primero ya está marcado como ejemplo.

**Respuestas**



1. \_\_\_\_\_

2. \_\_\_\_\_



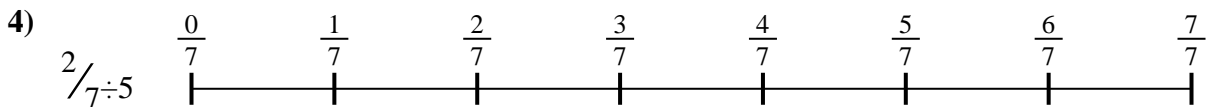
3. \_\_\_\_\_

4. \_\_\_\_\_



5. \_\_\_\_\_

6. \_\_\_\_\_





7. \_\_\_\_\_

8. \_\_\_\_\_



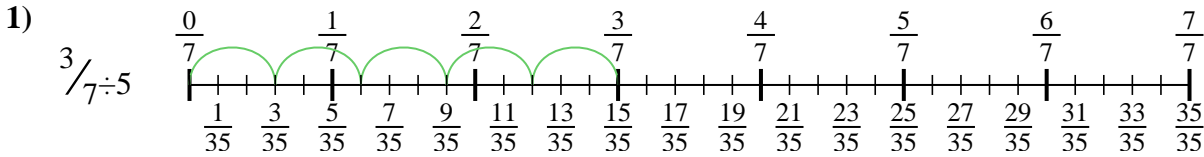
9. \_\_\_\_\_



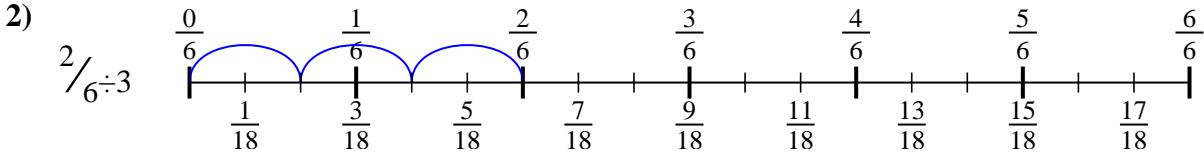


Usa la recta numérica para resolver cada problema. El primero ya está marcado como ejemplo.

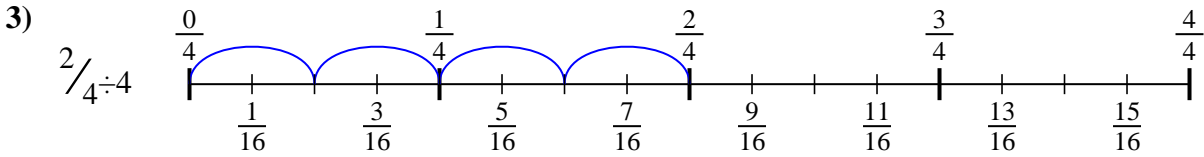
**Respuestas**



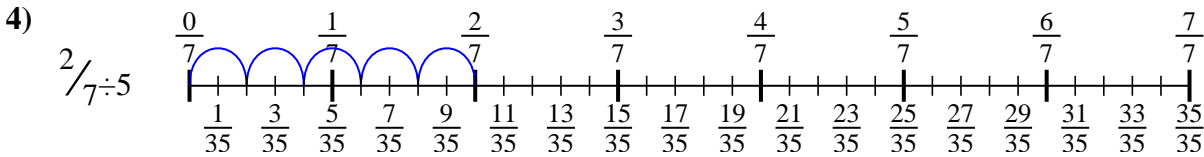
1.  $\frac{3}{35}$



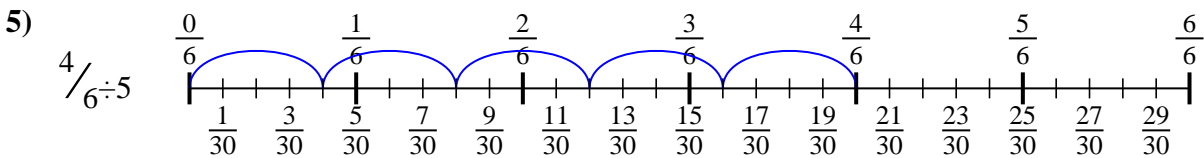
2.  $\frac{2}{18}$



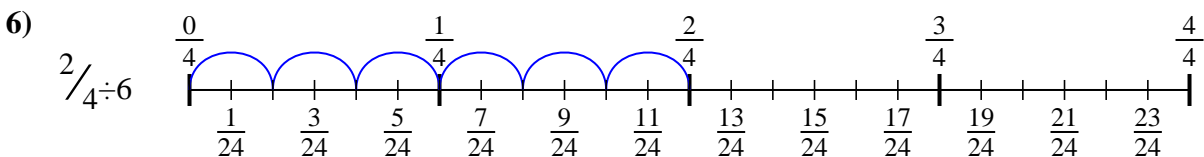
3.  $\frac{2}{16}$



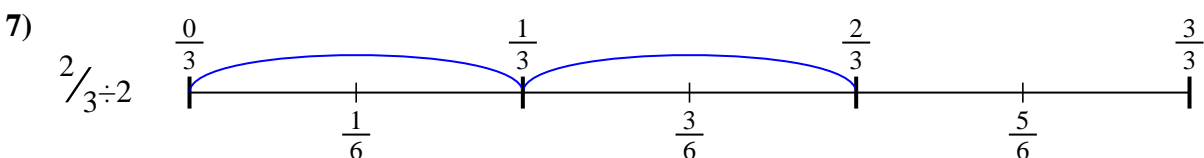
4.  $\frac{2}{35}$



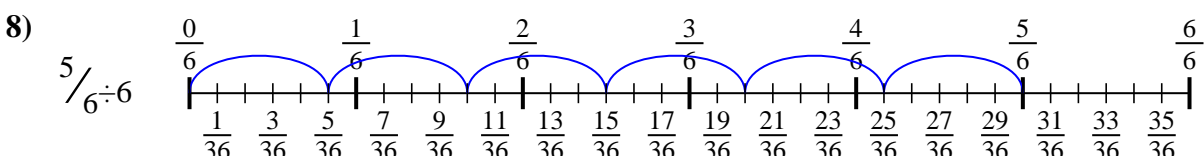
5.  $\frac{4}{30}$



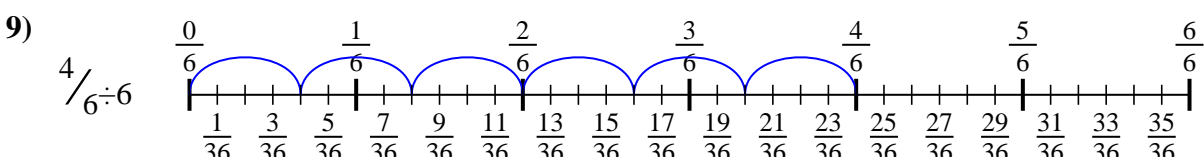
6.  $\frac{2}{24}$



7.  $\frac{2}{6}$



8.  $\frac{5}{36}$



9.  $\frac{4}{36}$



Usa la recta numérica para resolver cada problema. El primero ya está marcado como ejemplo.

Respuestas

$\frac{2}{18}$

$\frac{2}{24}$

$\frac{5}{36}$

$\frac{2}{16}$

$\frac{4}{36}$

$\frac{3}{35}$

$\frac{2}{35}$

$\frac{4}{30}$

$\frac{2}{6}$

1. \_\_\_\_\_

2. \_\_\_\_\_

3. \_\_\_\_\_

4. \_\_\_\_\_



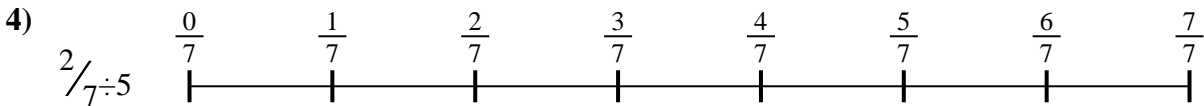


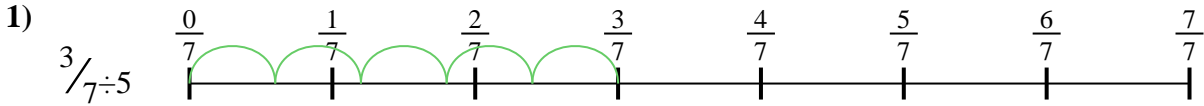
5. \_\_\_\_\_

6. \_\_\_\_\_

7. \_\_\_\_\_

8. \_\_\_\_\_

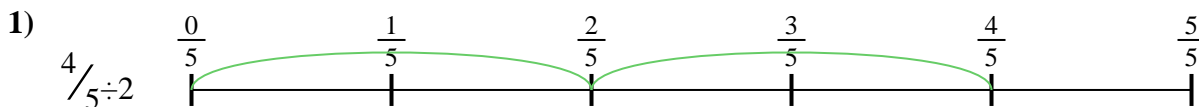
9. \_\_\_\_\_






Usa la recta numérica para resolver cada problema. El primero ya está marcado como ejemplo.

**Respuestas**



1. \_\_\_\_\_

2. \_\_\_\_\_



3. \_\_\_\_\_

4. \_\_\_\_\_



5. \_\_\_\_\_

6. \_\_\_\_\_


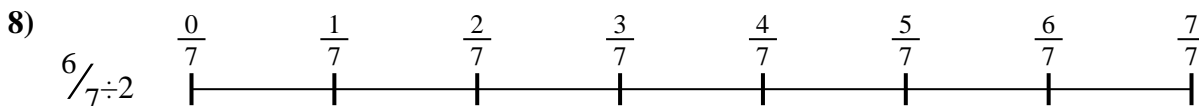
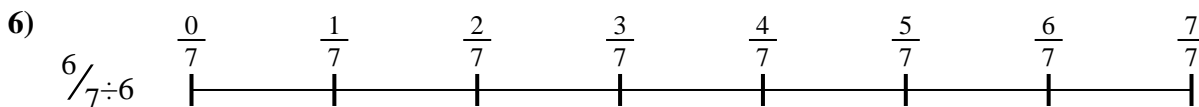


7. \_\_\_\_\_

8. \_\_\_\_\_

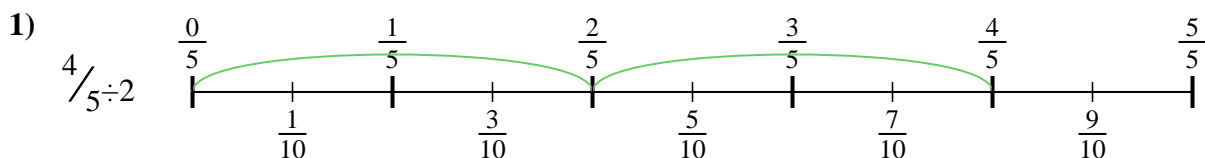


9. \_\_\_\_\_

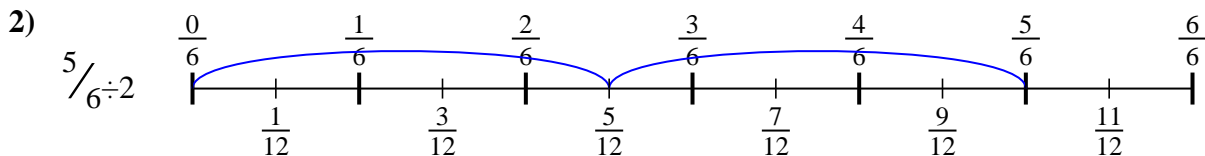




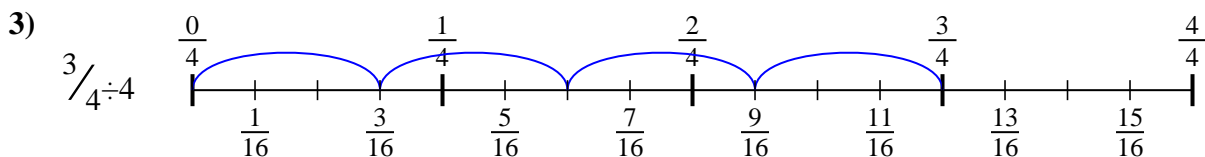
Usa la recta numérica para resolver cada problema. El primero ya está marcado como ejemplo.

**Respuestas**

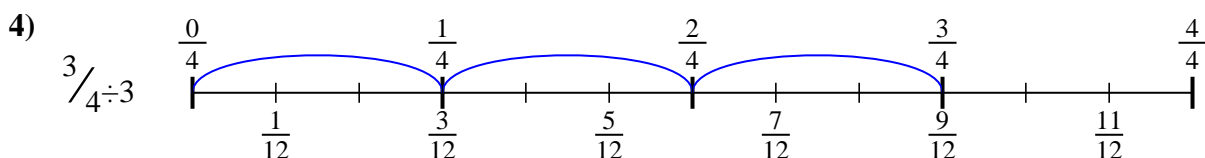
1.  $\frac{4}{10}$



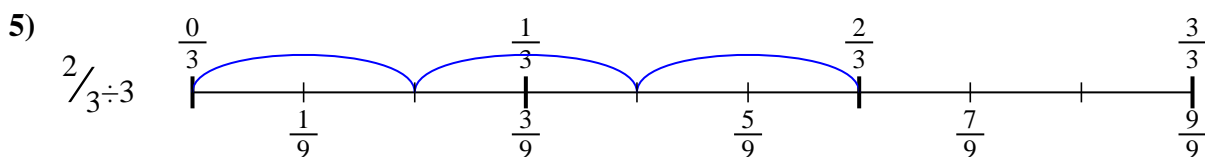
2.  $\frac{5}{12}$



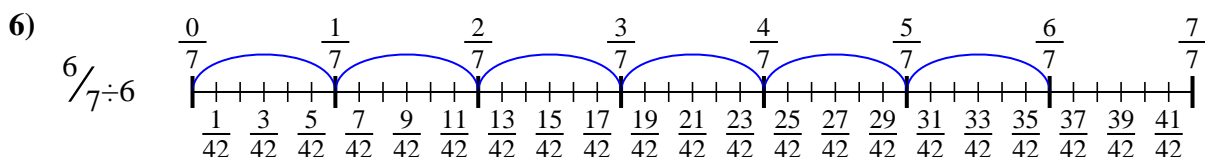
3.  $\frac{3}{16}$



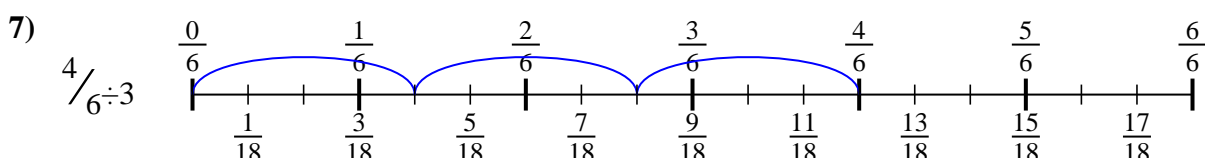
4.  $\frac{3}{12}$



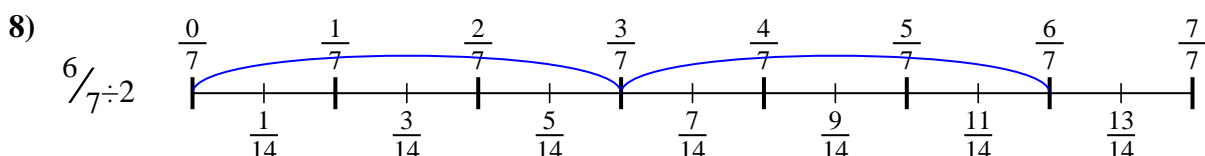
5.  $\frac{2}{9}$



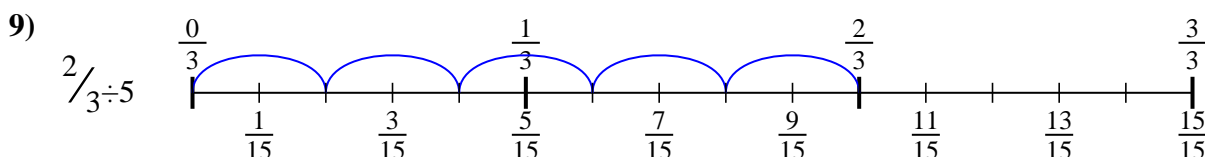
6.  $\frac{6}{42}$



7.  $\frac{4}{18}$



8.  $\frac{6}{14}$



9.  $\frac{2}{15}$





Usa la recta numérica para resolver cada problema. El primero ya está marcado como ejemplo.

**Respuestas**

$\frac{6}{14}$

$\frac{4}{10}$

$\frac{3}{12}$

$\frac{2}{9}$

$\frac{2}{15}$

$\frac{6}{42}$

$\frac{4}{18}$

$\frac{3}{16}$

$\frac{5}{12}$

1. \_\_\_\_\_

2. \_\_\_\_\_

3. \_\_\_\_\_

4. \_\_\_\_\_


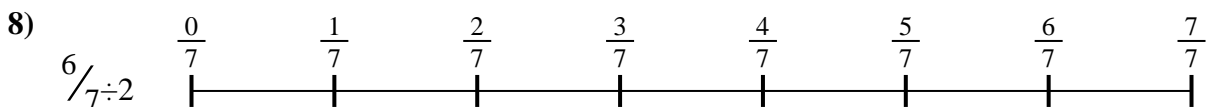
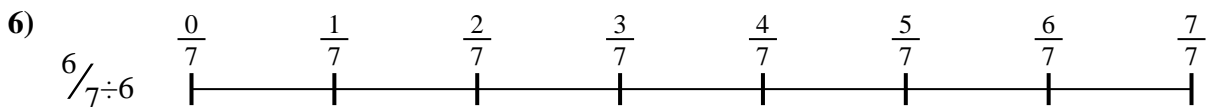



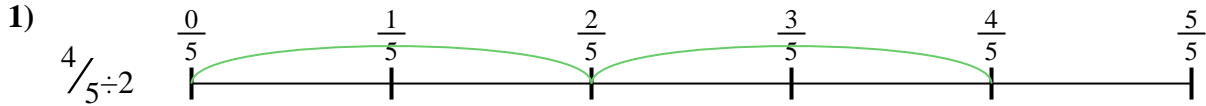
5. \_\_\_\_\_

6. \_\_\_\_\_

7. \_\_\_\_\_

8. \_\_\_\_\_

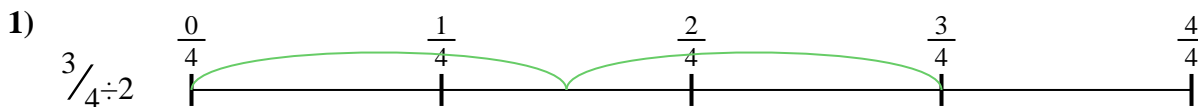
9. \_\_\_\_\_





Usa la recta numérica para resolver cada problema. El primero ya está marcado como ejemplo.

**Respuestas**



1. \_\_\_\_\_

2. \_\_\_\_\_




3. \_\_\_\_\_

4. \_\_\_\_\_



5. \_\_\_\_\_

6. \_\_\_\_\_


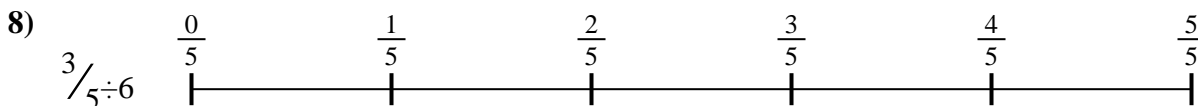
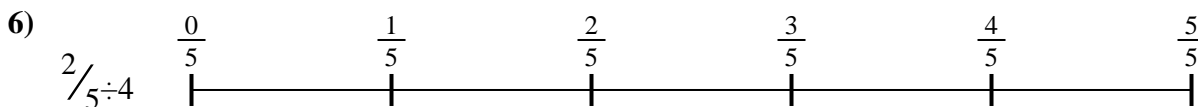


7. \_\_\_\_\_

8. \_\_\_\_\_



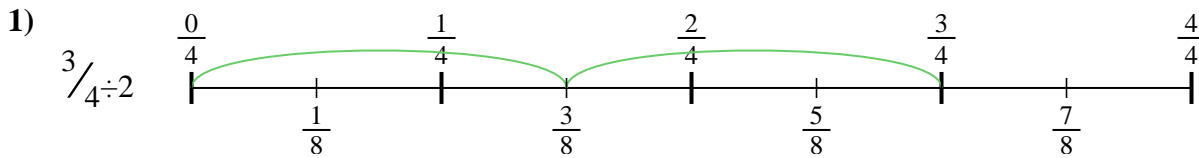
9. \_\_\_\_\_



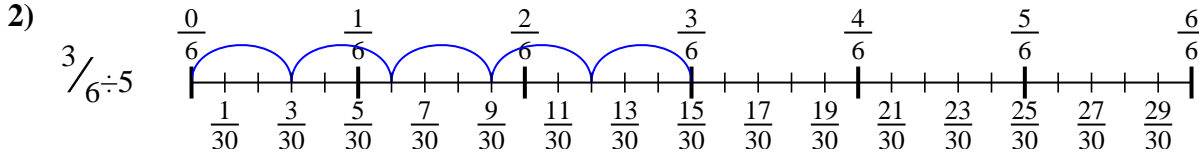


Usa la recta numérica para resolver cada problema. El primero ya está marcado como ejemplo.

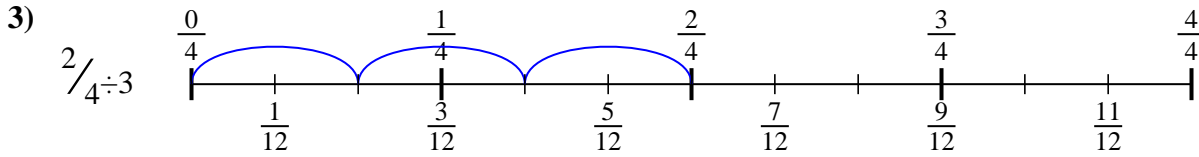
**Respuestas**



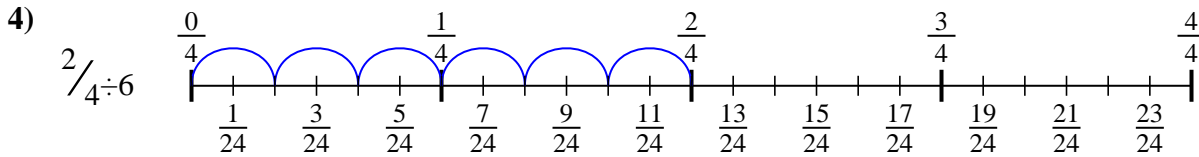
1.  $\frac{3}{8}$



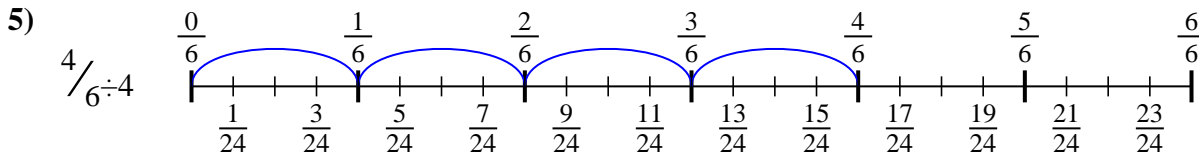
2.  $\frac{3}{30}$



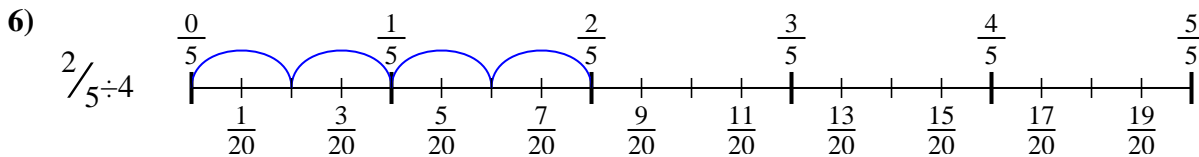
3.  $\frac{2}{12}$



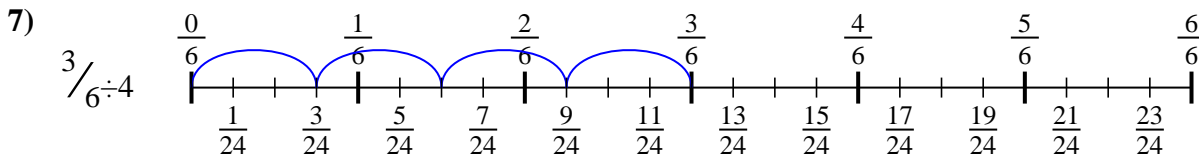
4.  $\frac{2}{24}$



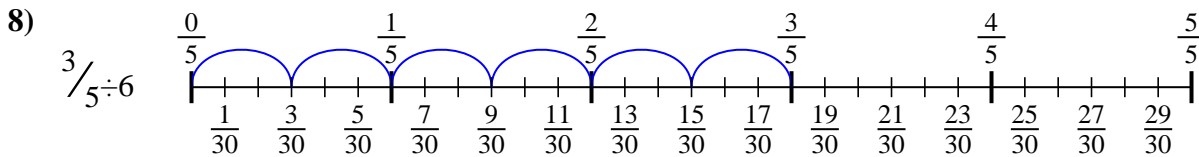
5.  $\frac{4}{24}$



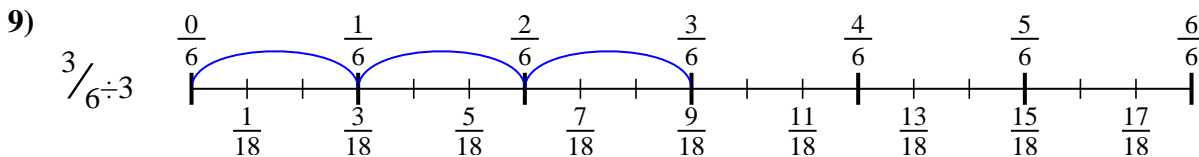
6.  $\frac{2}{20}$



7.  $\frac{3}{24}$



8.  $\frac{3}{30}$



9.  $\frac{3}{18}$



Usa la recta numérica para resolver cada problema. El primero ya está marcado como ejemplo.

**Respuestas**

$\frac{3}{24}$

$\frac{3}{30}$

$\frac{2}{20}$

$\frac{3}{30}$

$\frac{4}{24}$

$\frac{2}{12}$

$\frac{3}{8}$

$\frac{2}{24}$

$\frac{3}{18}$

1. \_\_\_\_\_

2. \_\_\_\_\_

3. \_\_\_\_\_

4. \_\_\_\_\_


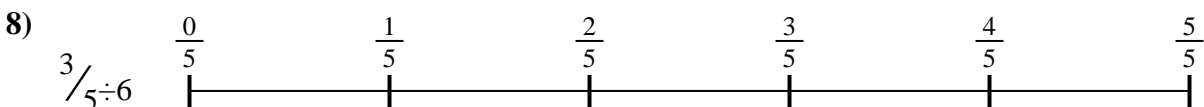
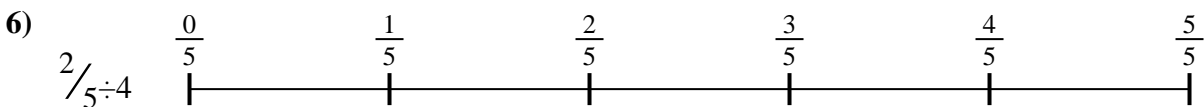



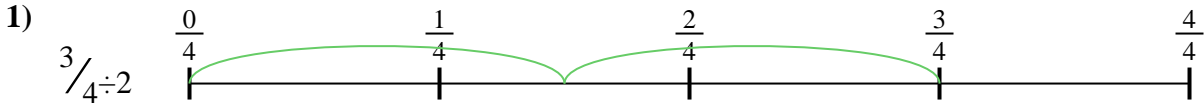
5. \_\_\_\_\_

6. \_\_\_\_\_

7. \_\_\_\_\_

8. \_\_\_\_\_

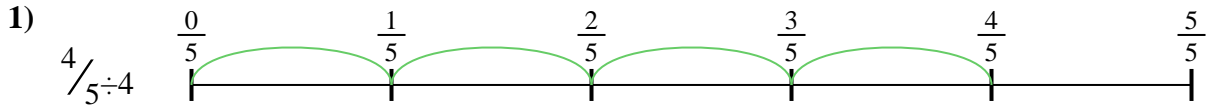
9. \_\_\_\_\_





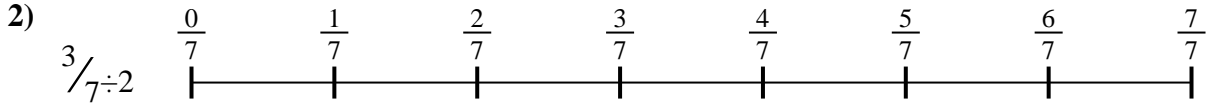
Usa la recta numérica para resolver cada problema. El primero ya está marcado como ejemplo.

**Respuestas**



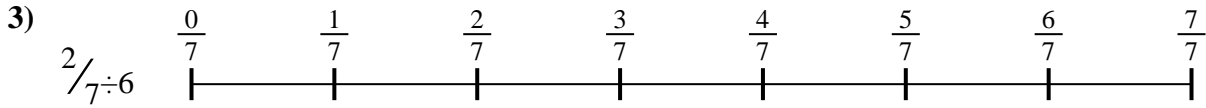
1. \_\_\_\_\_

2. \_\_\_\_\_



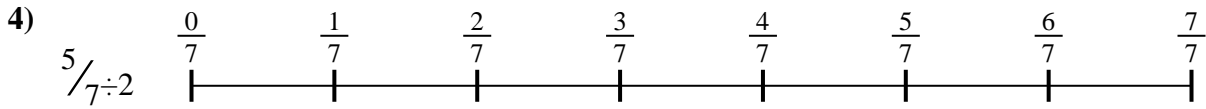
3. \_\_\_\_\_

4. \_\_\_\_\_




5. \_\_\_\_\_

6. \_\_\_\_\_

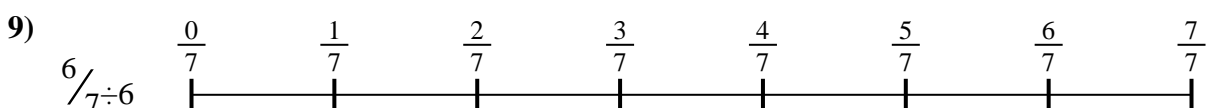
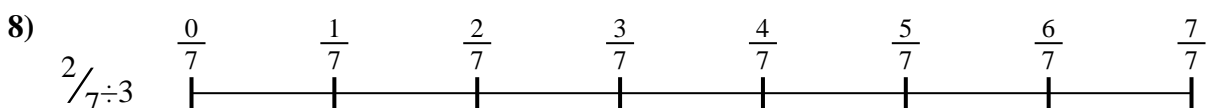
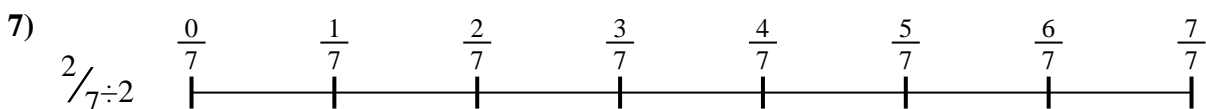


7. \_\_\_\_\_

8. \_\_\_\_\_



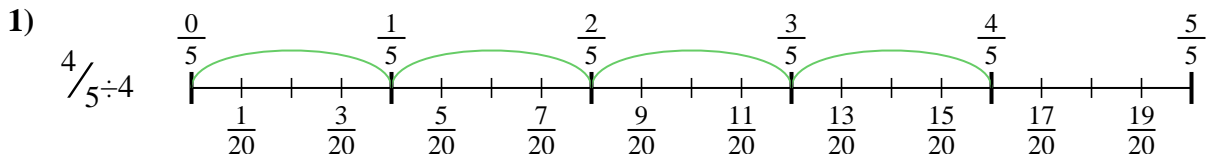
9. \_\_\_\_\_



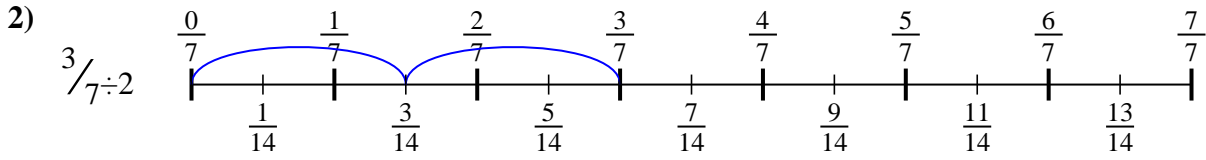


Usa la recta numérica para resolver cada problema. El primero ya está marcado como ejemplo.

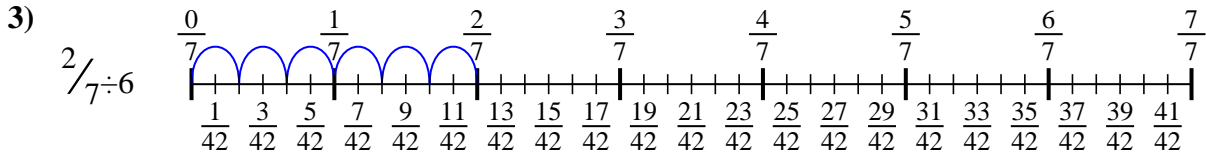
**Respuestas**



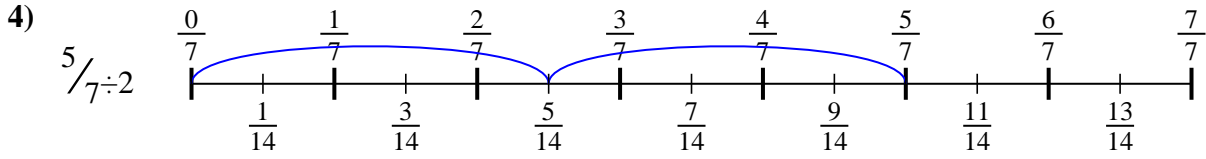
1.  $\frac{4}{20}$



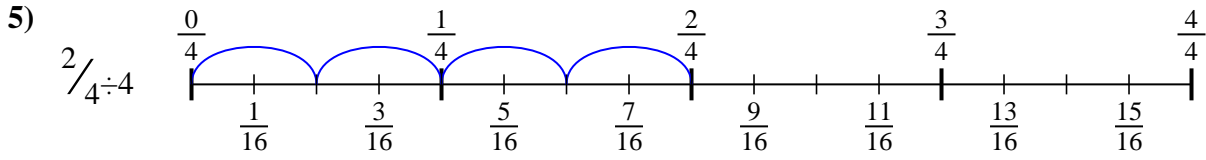
2.  $\frac{3}{14}$



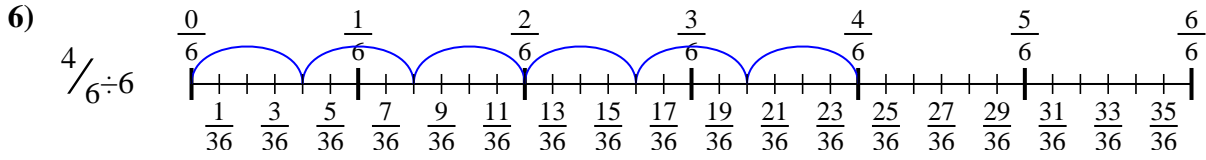
3.  $\frac{2}{42}$



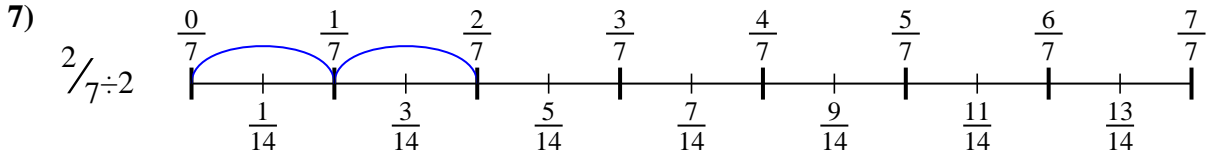
4.  $\frac{5}{14}$



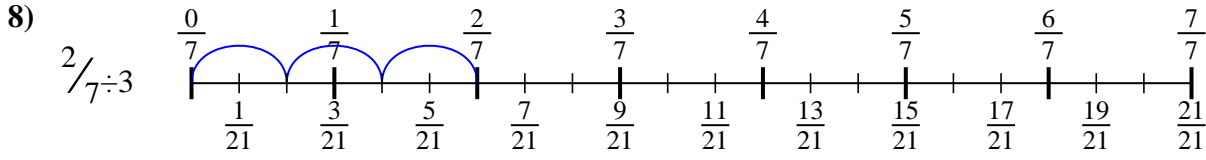
5.  $\frac{2}{16}$



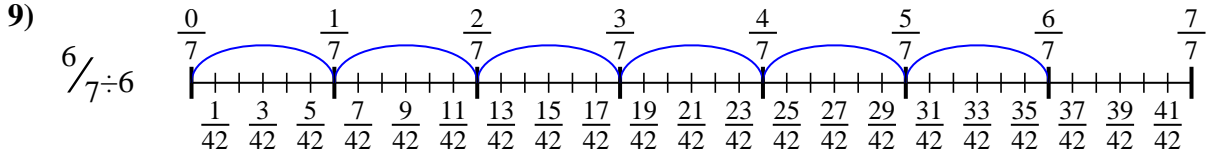
6.  $\frac{4}{36}$



7.  $\frac{2}{14}$



8.  $\frac{2}{21}$



9.  $\frac{6}{42}$



Usa la recta numérica para resolver cada problema. El primero ya está marcado como ejemplo.

Respuestas

$$\frac{2}{21}$$

$$\frac{2}{16}$$

$$\frac{2}{42}$$

$$\frac{4}{20}$$

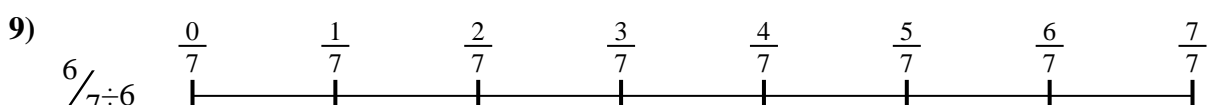
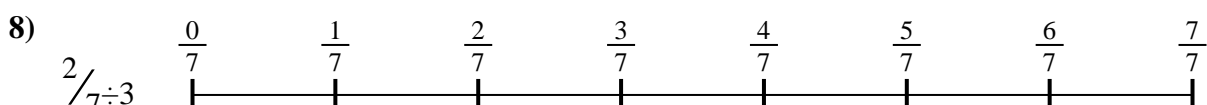
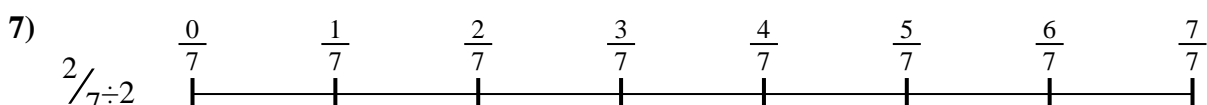


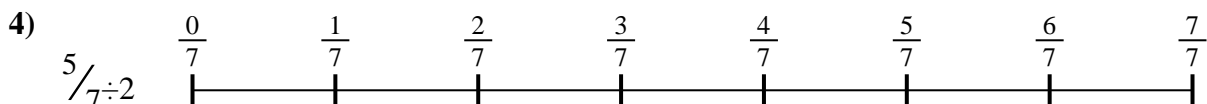
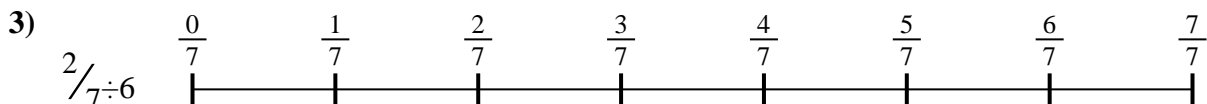
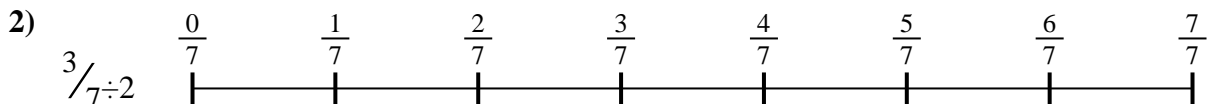
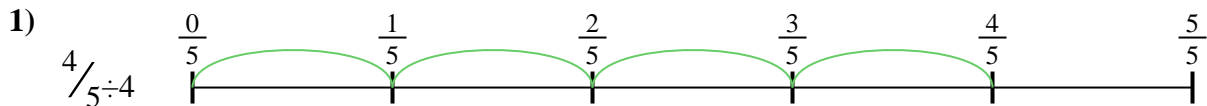
$$\frac{6}{42}$$

$$\frac{3}{14}$$

$$\frac{2}{14}$$

$$\frac{4}{36}$$

$$\frac{5}{14}$$

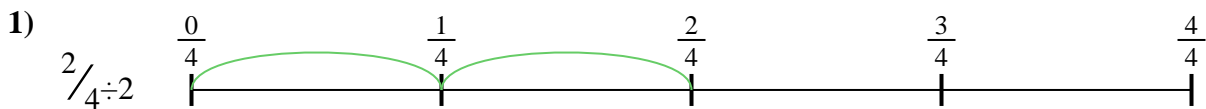


1. \_\_\_\_\_
2. \_\_\_\_\_
3. \_\_\_\_\_
4. \_\_\_\_\_
5. \_\_\_\_\_
6. \_\_\_\_\_
7. \_\_\_\_\_
8. \_\_\_\_\_
9. \_\_\_\_\_



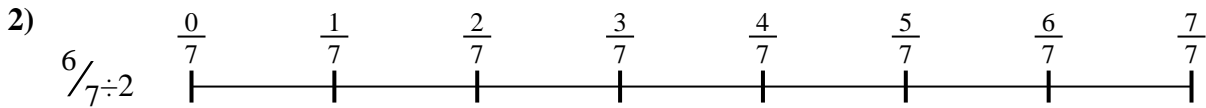
Usa la recta numérica para resolver cada problema. El primero ya está marcado como ejemplo.

**Respuestas**



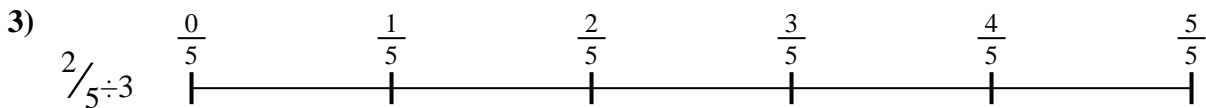
1. \_\_\_\_\_

2. \_\_\_\_\_



3. \_\_\_\_\_

4. \_\_\_\_\_



5. \_\_\_\_\_

6. \_\_\_\_\_

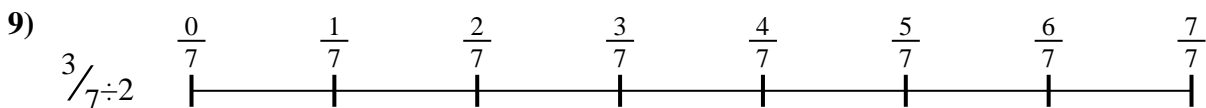
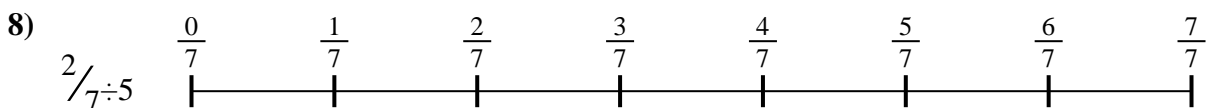


7. \_\_\_\_\_

8. \_\_\_\_\_



9. \_\_\_\_\_

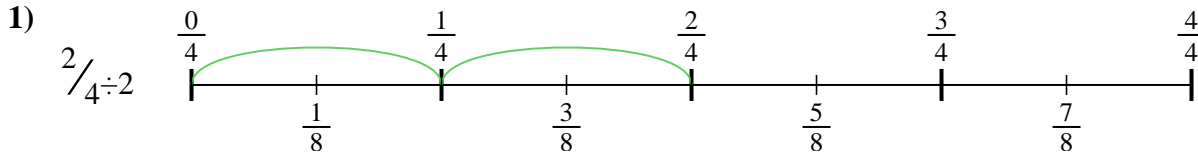




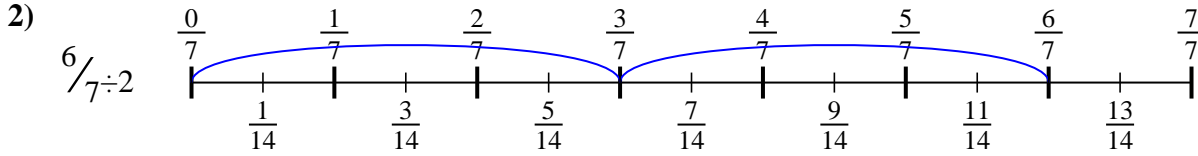


Usa la recta numérica para resolver cada problema. El primero ya está marcado como ejemplo.

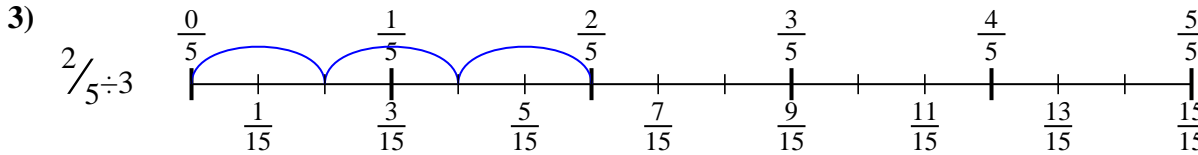
**Respuestas**



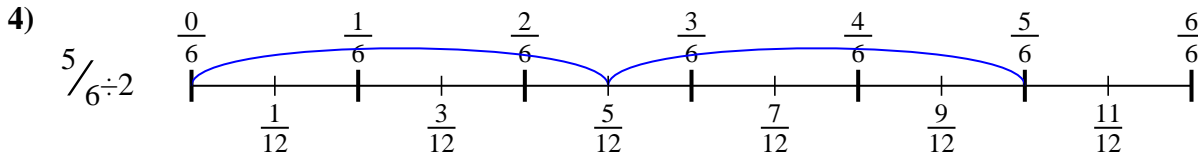
1.  $\frac{2}{8}$



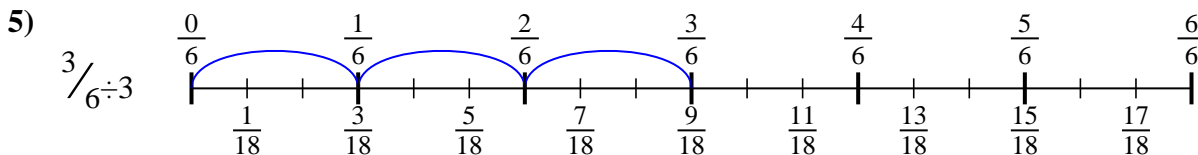
2.  $\frac{6}{14}$



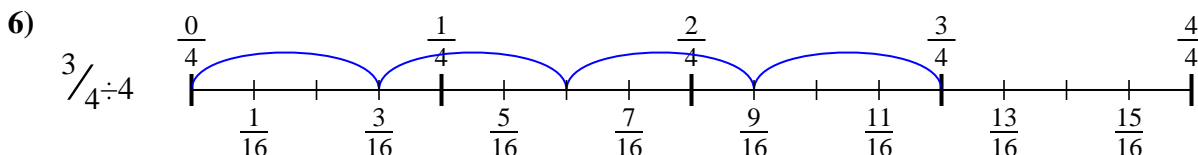
3.  $\frac{2}{15}$



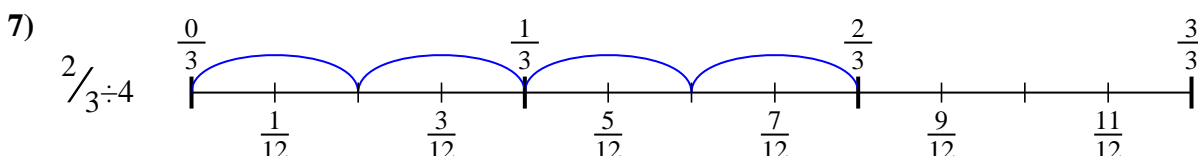
4.  $\frac{5}{12}$



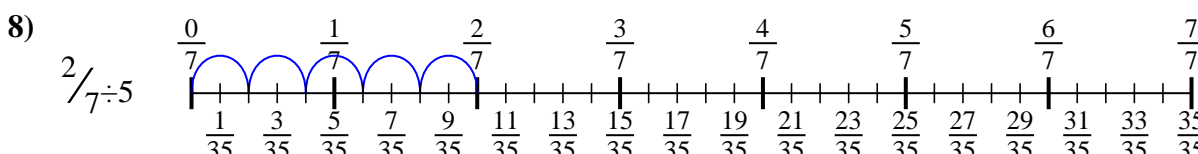
5.  $\frac{3}{18}$



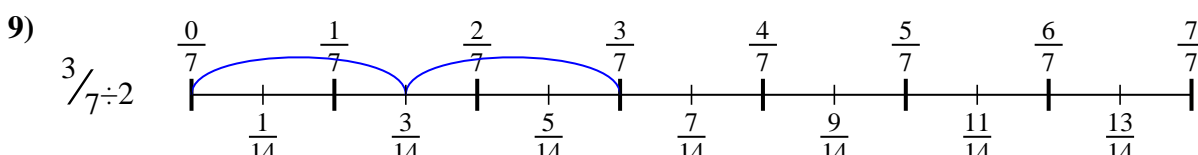
6.  $\frac{3}{16}$



7.  $\frac{2}{12}$



8.  $\frac{2}{35}$



9.  $\frac{3}{14}$



Usa la recta numérica para resolver cada problema. El primero ya está marcado como ejemplo.

**Respuestas**

$\frac{2}{15}$

$\frac{2}{8}$

$\frac{2}{35}$

$\frac{5}{12}$

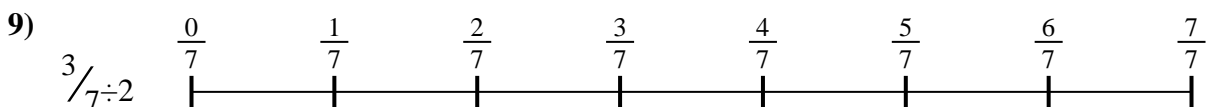
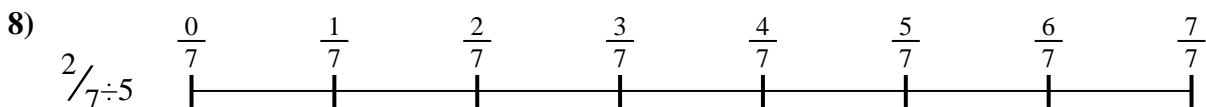


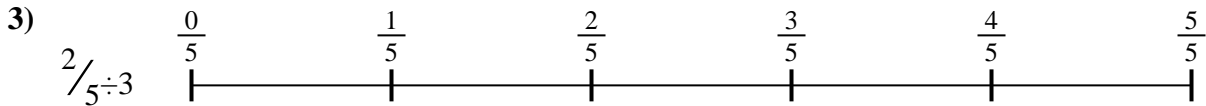
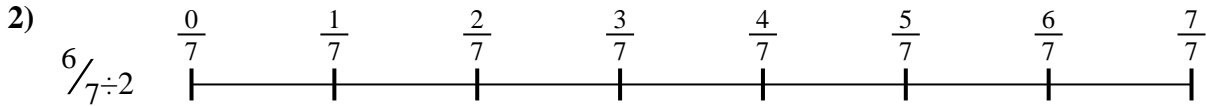

$\frac{2}{12}$

$\frac{3}{18}$

$\frac{6}{14}$

$\frac{3}{14}$

$\frac{3}{16}$



1. \_\_\_\_\_
2. \_\_\_\_\_
3. \_\_\_\_\_
4. \_\_\_\_\_
5. \_\_\_\_\_
6. \_\_\_\_\_
7. \_\_\_\_\_
8. \_\_\_\_\_
9. \_\_\_\_\_



Usa la recta numérica para resolver cada problema. El primero ya está marcado como ejemplo.

**Respuestas**



1. \_\_\_\_\_

2. \_\_\_\_\_



3. \_\_\_\_\_

4. \_\_\_\_\_



5. \_\_\_\_\_

6. \_\_\_\_\_


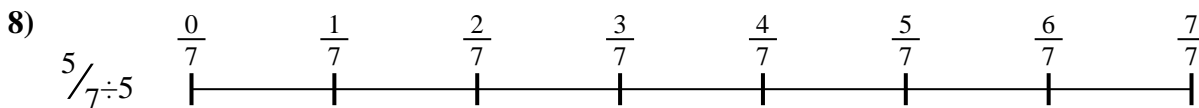
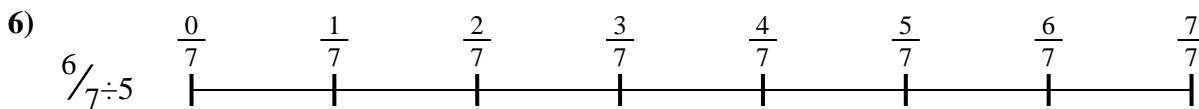


7. \_\_\_\_\_

8. \_\_\_\_\_

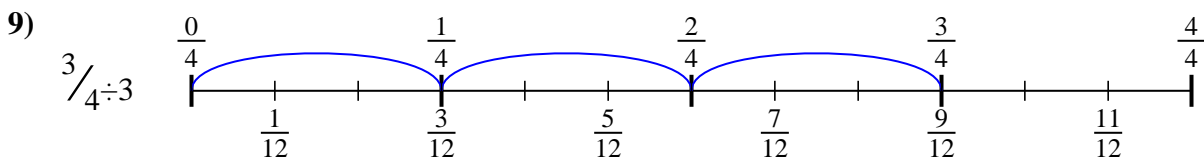
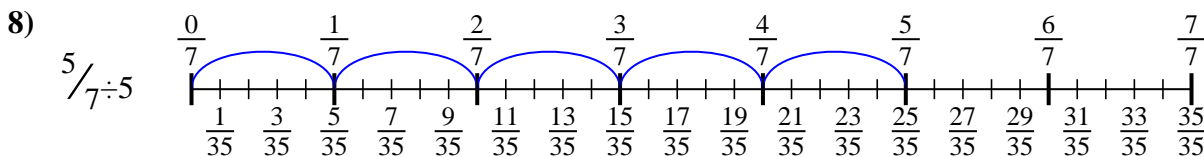
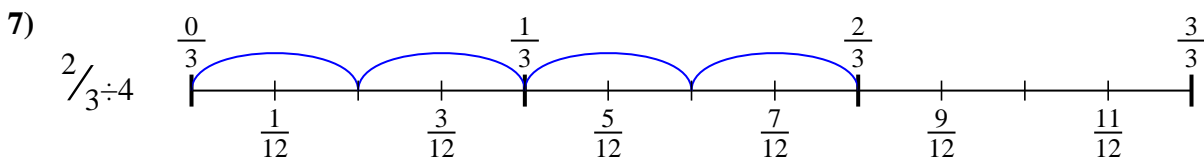
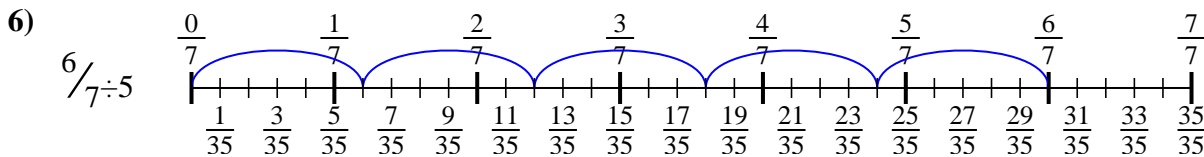
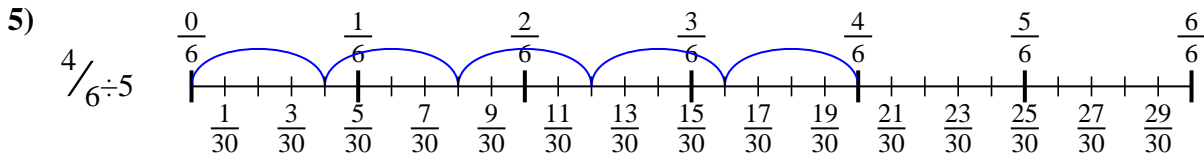
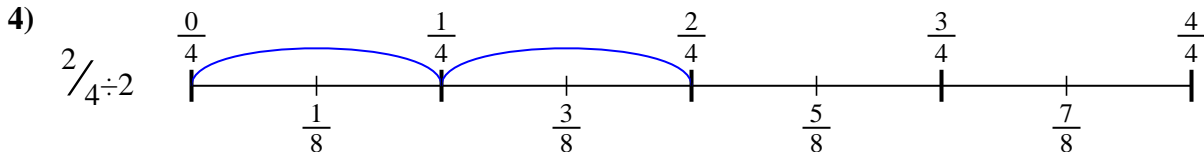
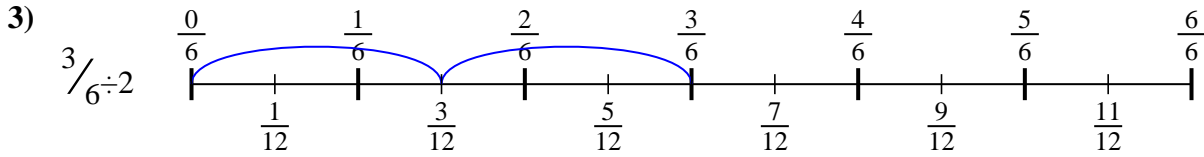
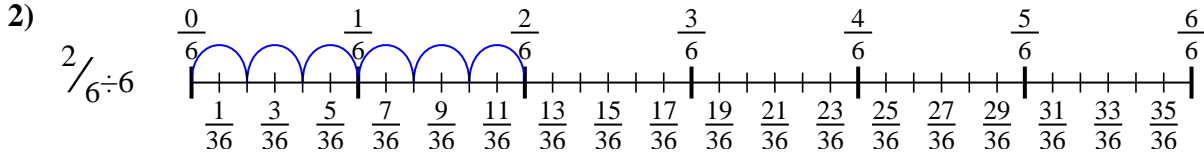
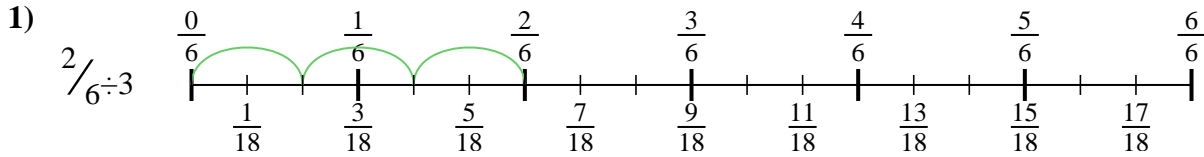


9. \_\_\_\_\_





Usa la recta numérica para resolver cada problema. El primero ya está marcado como ejemplo.

**Respuestas**

1.  $\frac{2}{18}$

2.  $\frac{2}{36}$

3.  $\frac{3}{12}$

4.  $\frac{2}{8}$

5.  $\frac{4}{30}$

6.  $\frac{6}{35}$

7.  $\frac{2}{12}$

8.  $\frac{5}{35}$

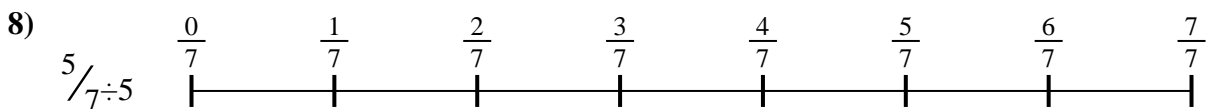
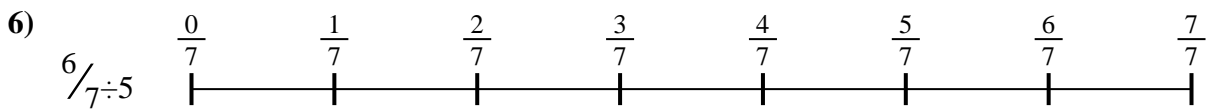





9.  $\frac{3}{12}$



Usa la recta numérica para resolver cada problema. El primero ya está marcado como ejemplo.

**Respuestas**

$\frac{2}{18}$	$\frac{2}{8}$	$\frac{2}{36}$	$\frac{3}{12}$
$\frac{6}{35}$	$\frac{5}{35}$	$\frac{4}{30}$	$\frac{2}{12}$
$\frac{3}{12}$			

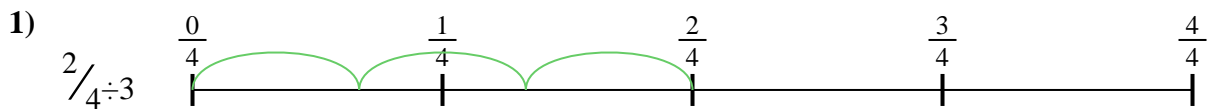


1. \_\_\_\_\_
2. \_\_\_\_\_
3. \_\_\_\_\_
4. \_\_\_\_\_
5. \_\_\_\_\_
6. \_\_\_\_\_
7. \_\_\_\_\_
8. \_\_\_\_\_
9. \_\_\_\_\_



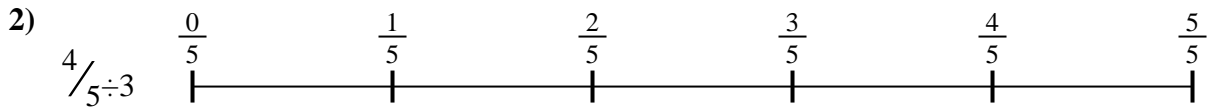
Usa la recta numérica para resolver cada problema. El primero ya está marcado como ejemplo.

**Respuestas**



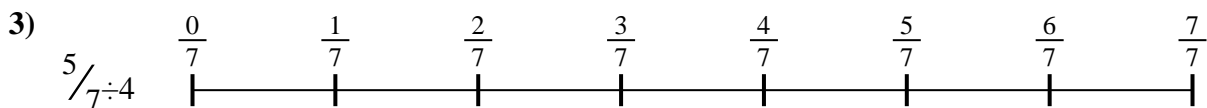
1. \_\_\_\_\_

2. \_\_\_\_\_



3. \_\_\_\_\_

4. \_\_\_\_\_



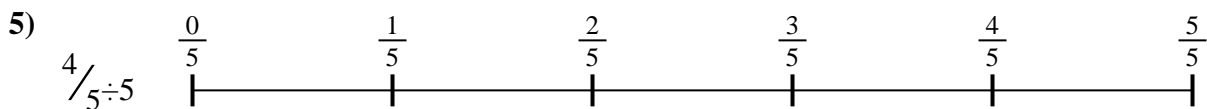
5. \_\_\_\_\_

6. \_\_\_\_\_

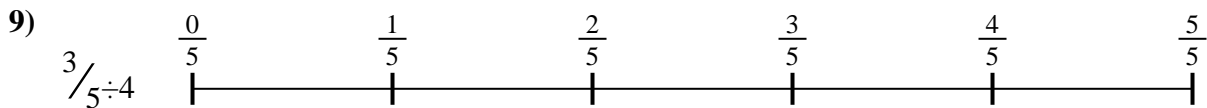
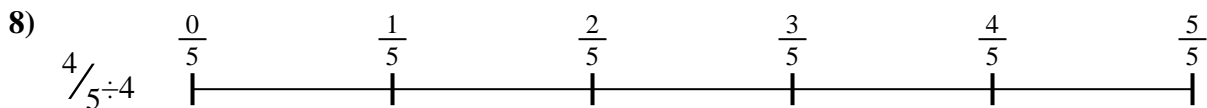


7. \_\_\_\_\_

8. \_\_\_\_\_

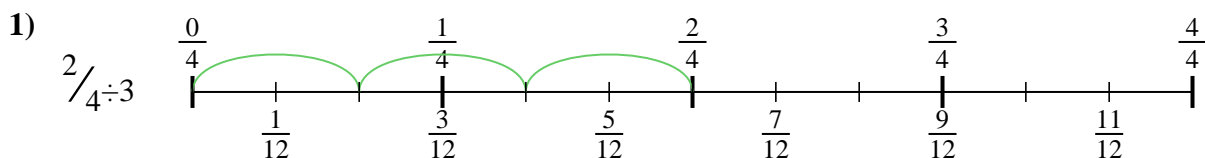


9. \_\_\_\_\_

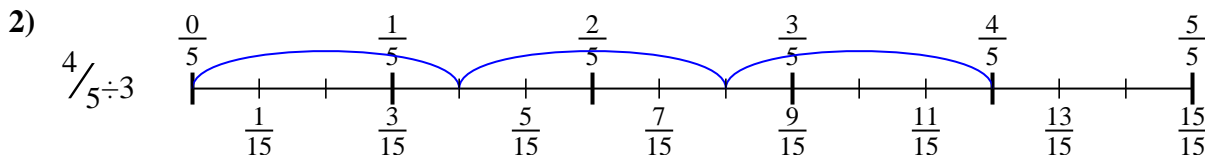




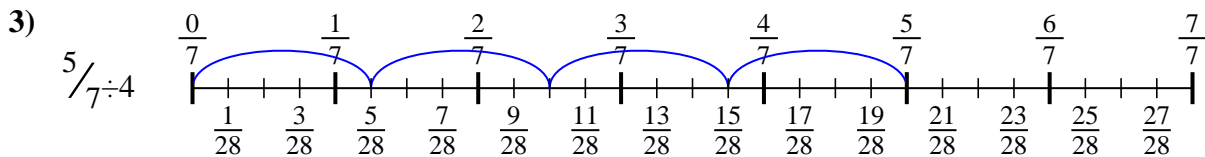
Usa la recta numérica para resolver cada problema. El primero ya está marcado como ejemplo.

**Respuestas**

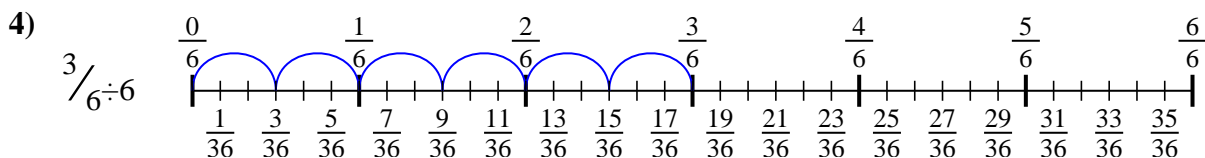
1.  $\frac{2}{12}$



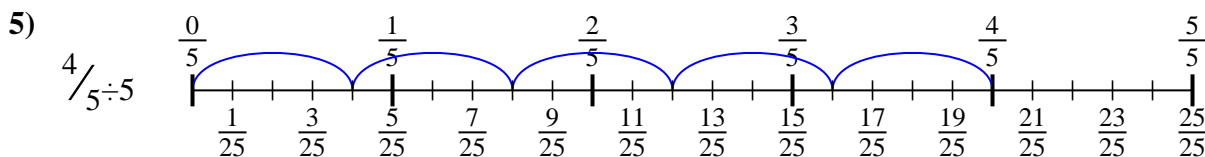
2.  $\frac{4}{15}$



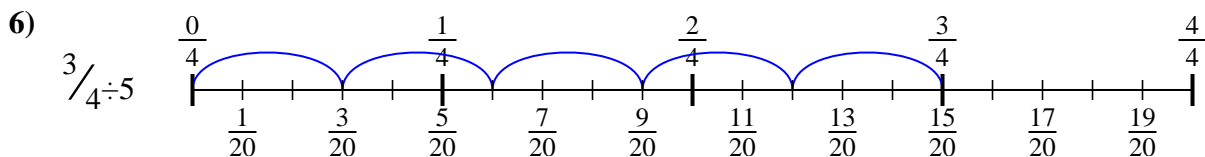
3.  $\frac{5}{28}$



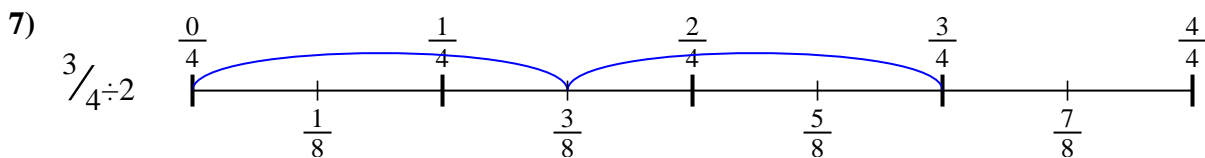
4.  $\frac{3}{36}$



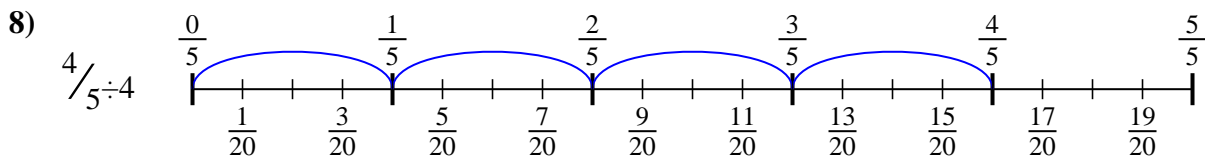
5.  $\frac{4}{25}$



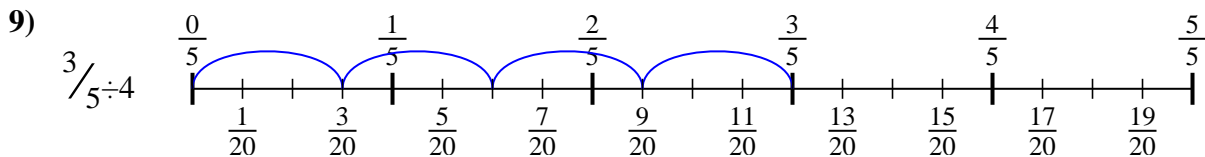
6.  $\frac{3}{20}$



7.  $\frac{3}{8}$



8.  $\frac{4}{20}$



9.  $\frac{3}{20}$



Usa la recta numérica para resolver cada problema. El primero ya está marcado como ejemplo.

Respuestas

$$\frac{3}{20}$$

$$\frac{4}{20}$$

$$\frac{5}{28}$$

$$\frac{3}{20}$$

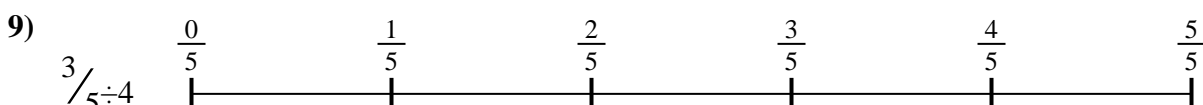
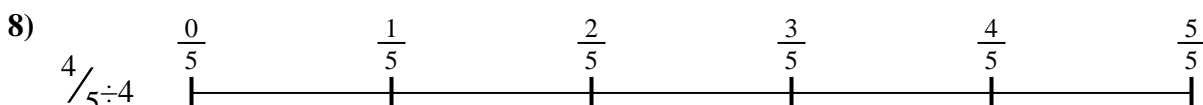


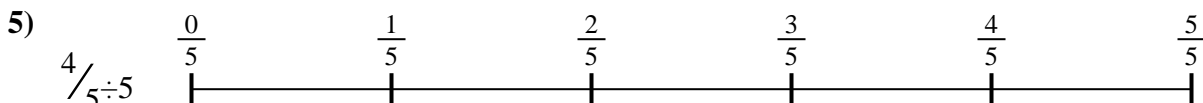
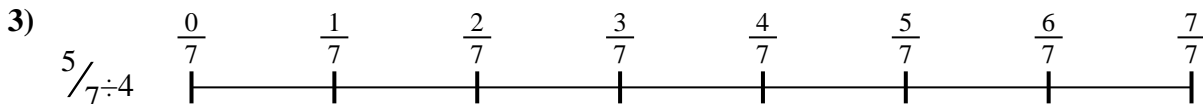
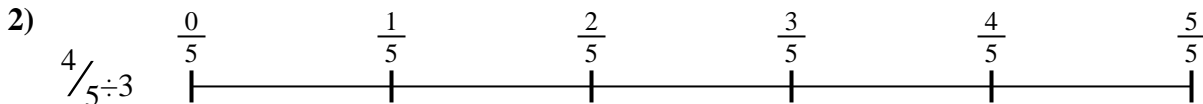
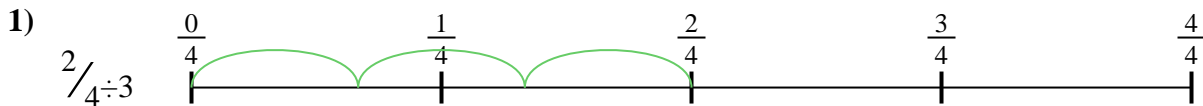
$$\frac{3}{8}$$

$$\frac{3}{36}$$

$$\frac{2}{12}$$

$$\frac{4}{15}$$

$$\frac{4}{25}$$



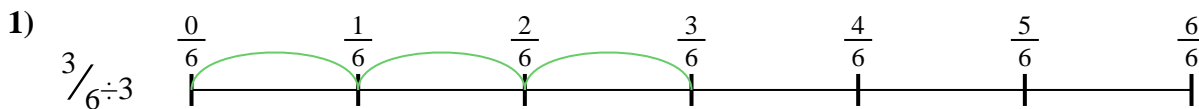
1. \_\_\_\_\_
2. \_\_\_\_\_
3. \_\_\_\_\_
4. \_\_\_\_\_
5. \_\_\_\_\_
6. \_\_\_\_\_
7. \_\_\_\_\_
8. \_\_\_\_\_
9. \_\_\_\_\_





Usa la recta numérica para resolver cada problema. El primero ya está marcado como ejemplo.

**Respuestas**



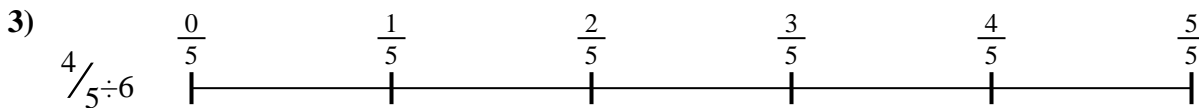
1. \_\_\_\_\_

2. \_\_\_\_\_



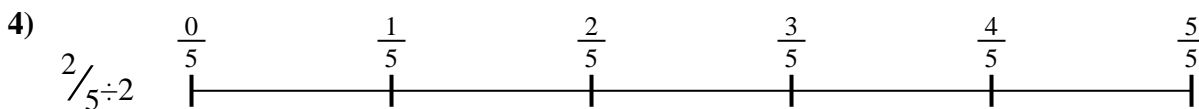
3. \_\_\_\_\_

4. \_\_\_\_\_



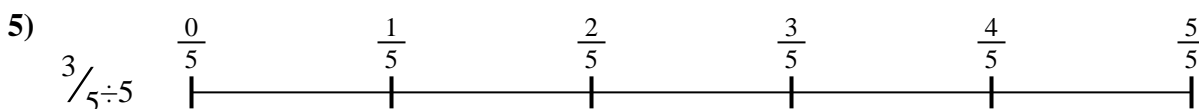
5. \_\_\_\_\_

6. \_\_\_\_\_



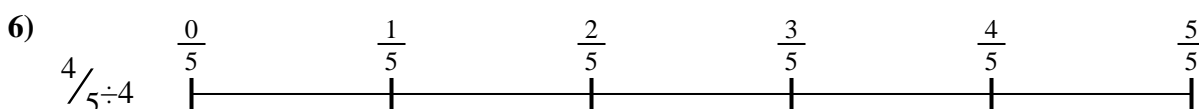


7. \_\_\_\_\_

8. \_\_\_\_\_

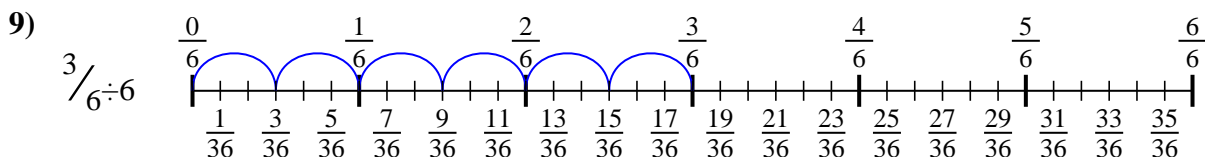
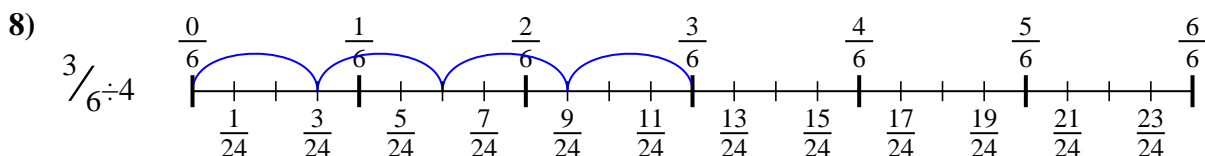
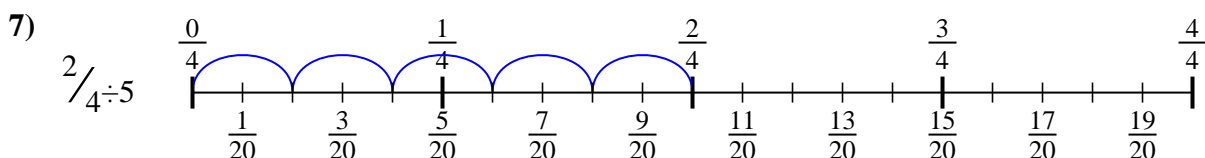
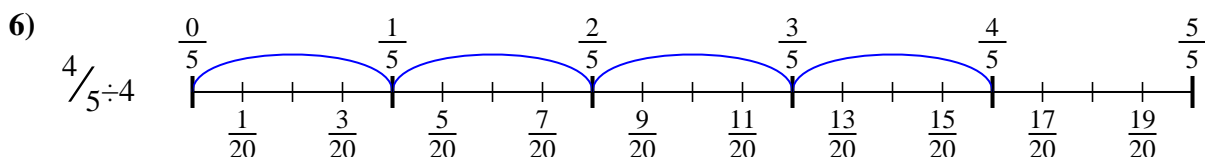
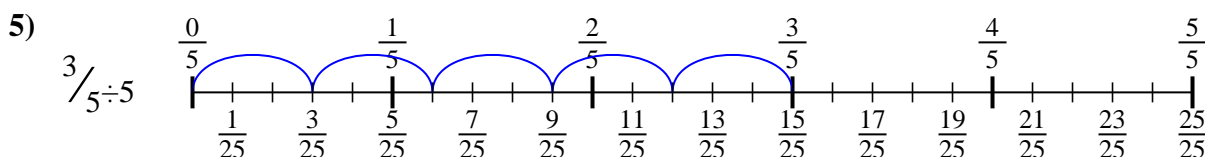
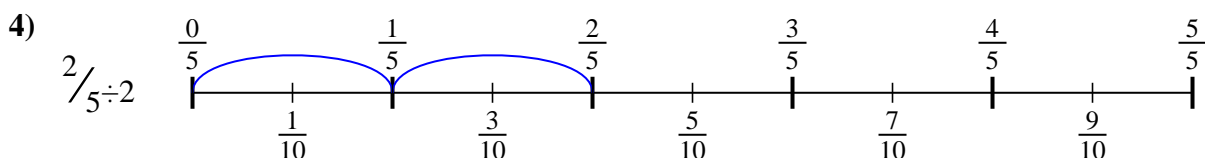
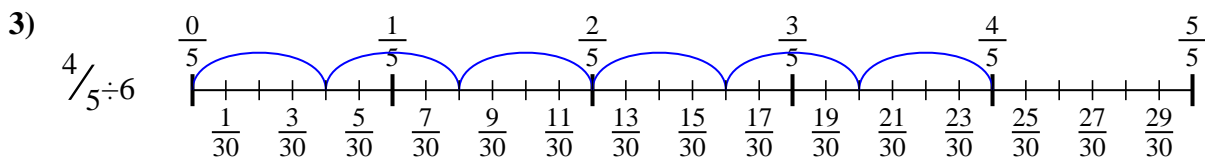
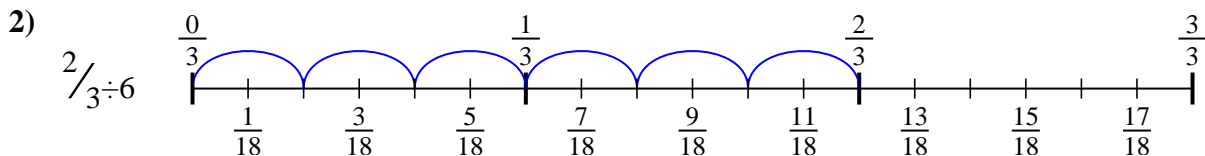
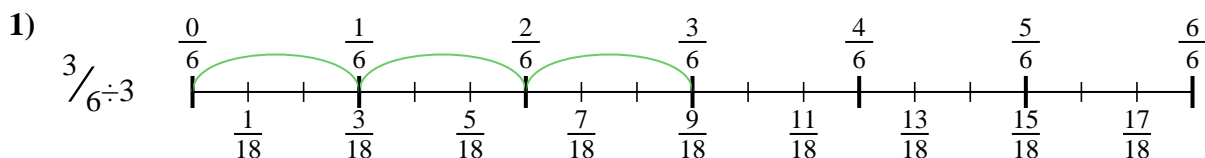


9. \_\_\_\_\_





Usa la recta numérica para resolver cada problema. El primero ya está marcado como ejemplo.

**Respuestas**

1.  $\frac{3}{18}$

2.  $\frac{2}{18}$

3.  $\frac{4}{30}$

4.  $\frac{2}{10}$

5.  $\frac{3}{25}$

6.  $\frac{4}{20}$

7.  $\frac{2}{20}$

8.  $\frac{3}{24}$


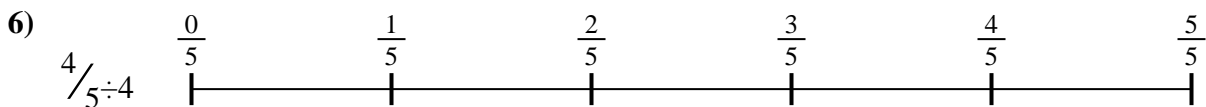
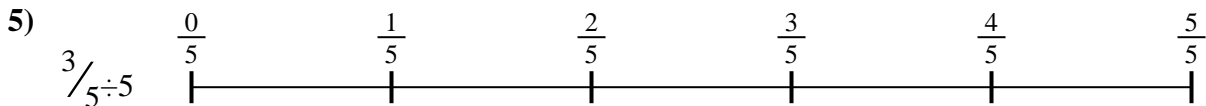
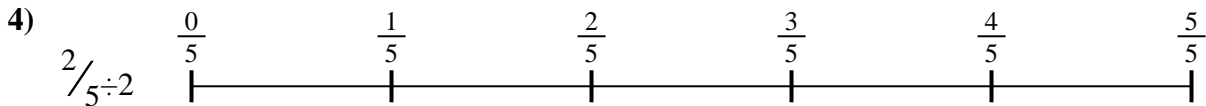
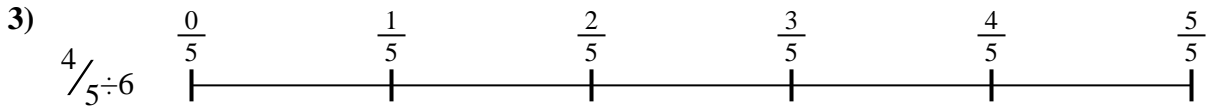

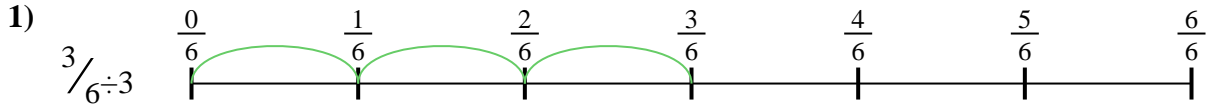
9.  $\frac{3}{36}$



Usa la recta numérica para resolver cada problema. El primero ya está marcado como ejemplo.

**Respuestas**

$\frac{3}{24}$	$\frac{2}{20}$	$\frac{4}{20}$	$\frac{2}{18}$
$\frac{2}{10}$	$\frac{3}{18}$	$\frac{4}{30}$	$\frac{3}{25}$
$\frac{3}{36}$			

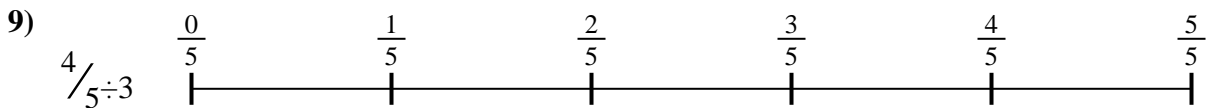
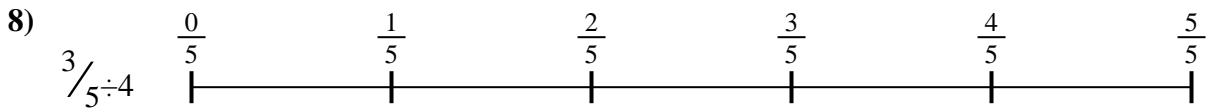



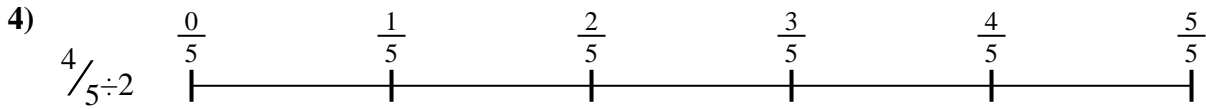


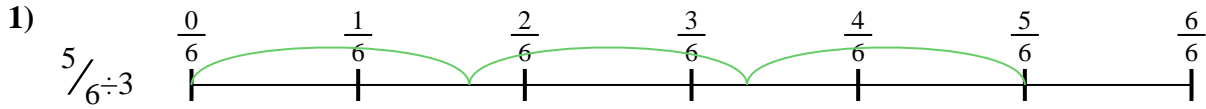


1. \_\_\_\_\_
2. \_\_\_\_\_
3. \_\_\_\_\_
4. \_\_\_\_\_
5. \_\_\_\_\_
6. \_\_\_\_\_
7. \_\_\_\_\_
8. \_\_\_\_\_
9. \_\_\_\_\_



Usa la recta numérica para resolver cada problema. El primero ya está marcado como ejemplo.

**Respuestas**

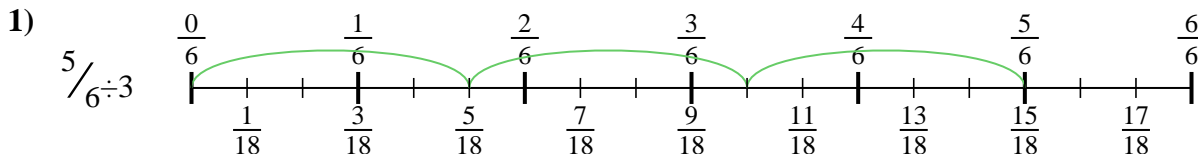


1. \_\_\_\_\_
2. \_\_\_\_\_
3. \_\_\_\_\_
4. \_\_\_\_\_
5. \_\_\_\_\_
6. \_\_\_\_\_
7. \_\_\_\_\_
8. \_\_\_\_\_
9. \_\_\_\_\_

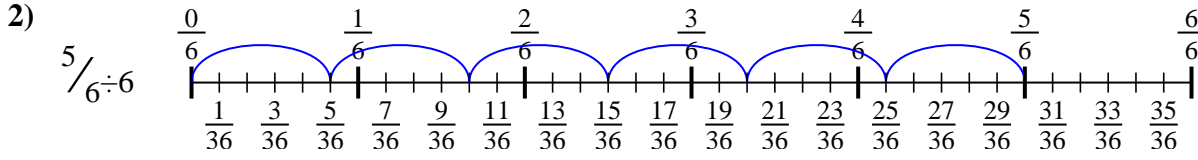


Usa la recta numérica para resolver cada problema. El primero ya está marcado como ejemplo.

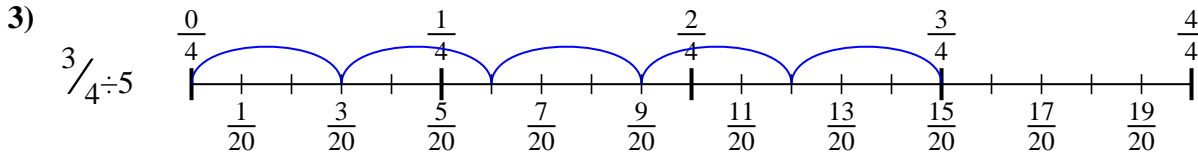
**Respuestas**



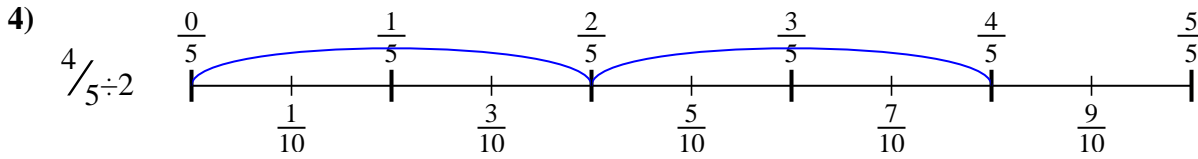
1.  $\frac{5}{18}$



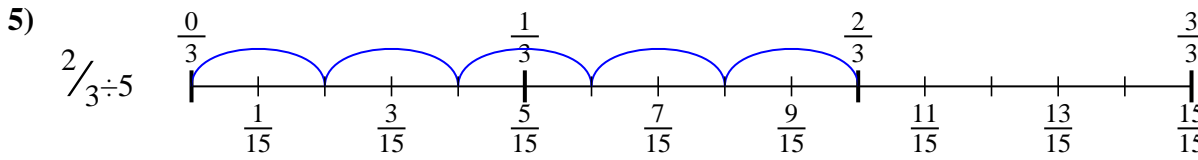
2.  $\frac{5}{36}$



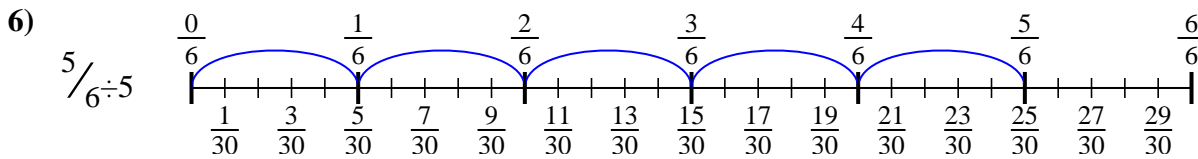
3.  $\frac{3}{20}$



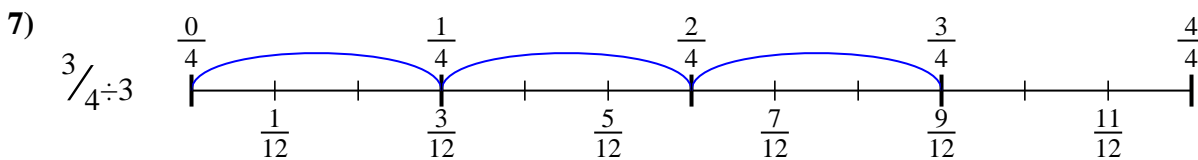
4.  $\frac{4}{10}$



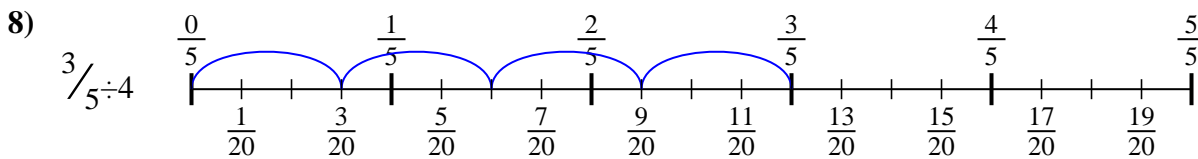
5.  $\frac{2}{15}$



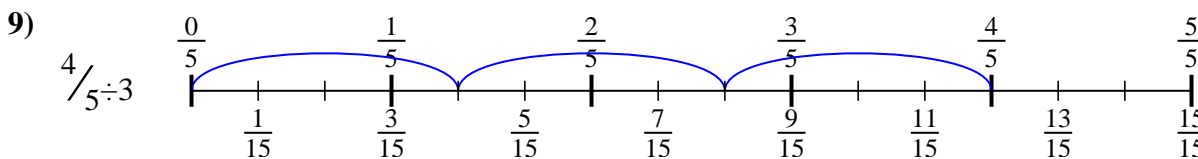
6.  $\frac{5}{30}$



7.  $\frac{3}{12}$



8.  $\frac{3}{20}$



9.  $\frac{4}{15}$



Usa la recta numérica para resolver cada problema. El primero ya está marcado como ejemplo.

**Respuestas**

$$\frac{3}{20}$$

$$\frac{5}{30}$$

$$\frac{2}{15}$$

$$\frac{4}{15}$$

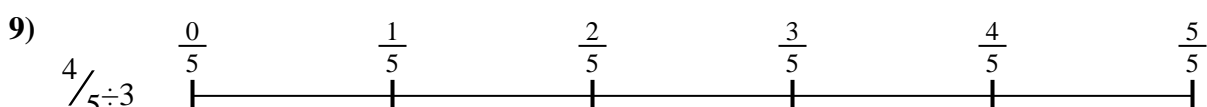
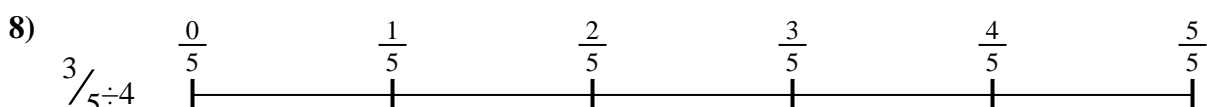

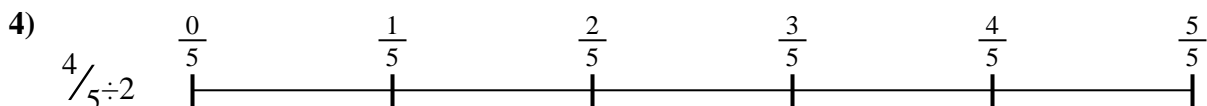

$$\frac{3}{12}$$

$$\frac{4}{10}$$

$$\frac{5}{36}$$

$$\frac{5}{18}$$

$$\frac{3}{20}$$



1. \_\_\_\_\_

2. \_\_\_\_\_

3. \_\_\_\_\_

4. \_\_\_\_\_

5. \_\_\_\_\_

6. \_\_\_\_\_

7. \_\_\_\_\_

8. \_\_\_\_\_

9. \_\_\_\_\_