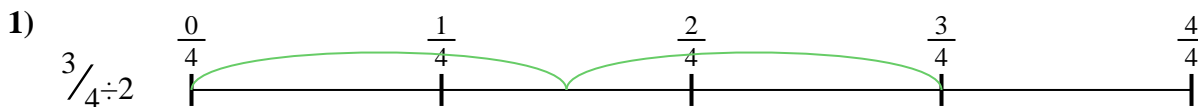




Usa la recta numérica para resolver cada problema. El primero ya está marcado como ejemplo.

Respuestas




1. _____

2. _____



3. _____

4. _____




5. _____

6. _____

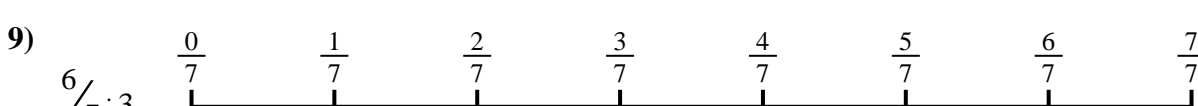

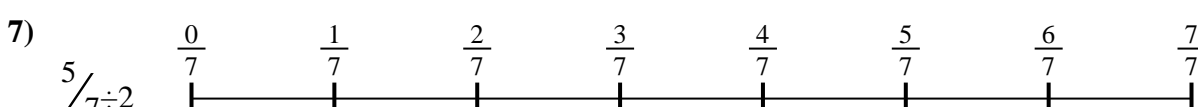
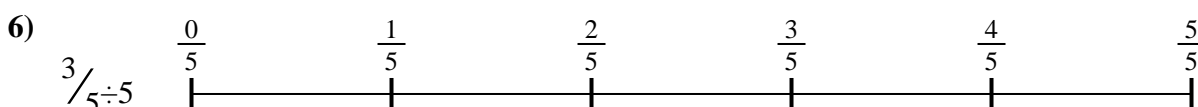


7. _____

8. _____



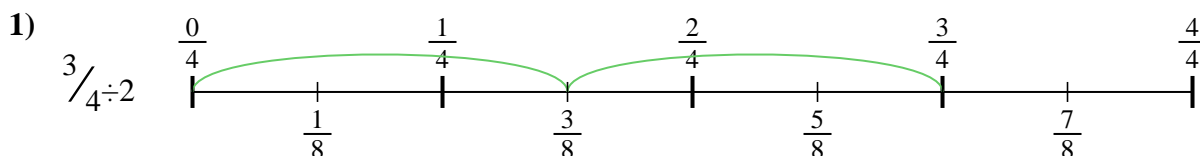
9. _____



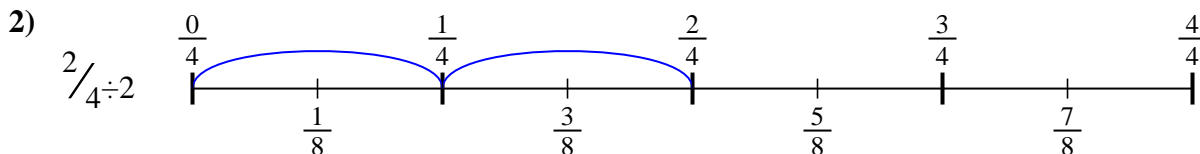


Usa la recta numérica para resolver cada problema. El primero ya está marcado como ejemplo.

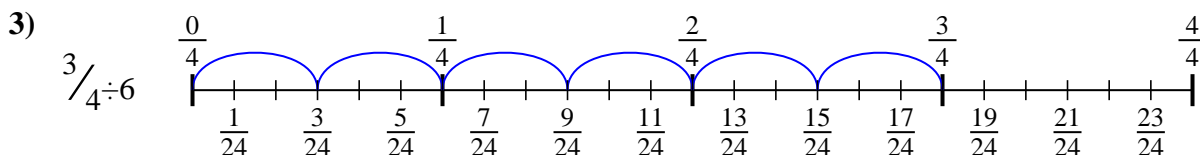
Respuestas



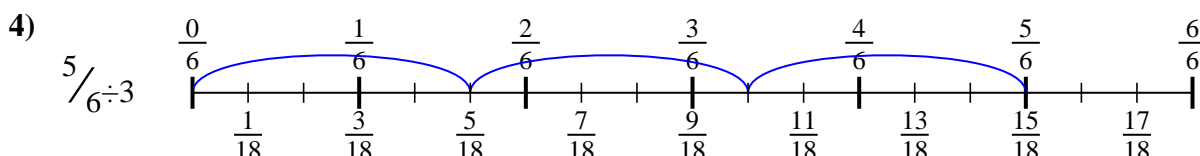
1. $\frac{3}{8}$



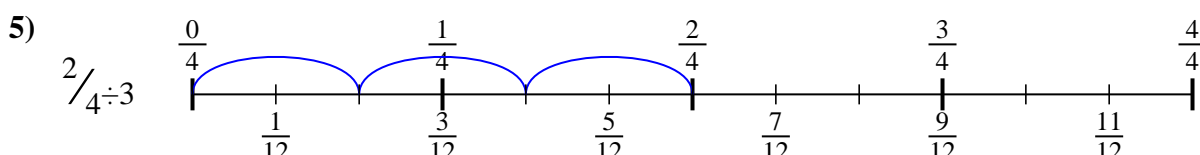
2. $\frac{2}{8}$



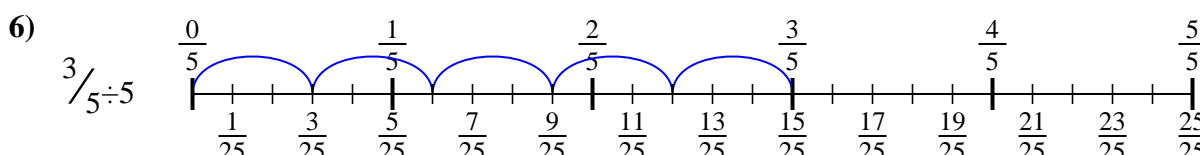
3. $\frac{3}{24}$



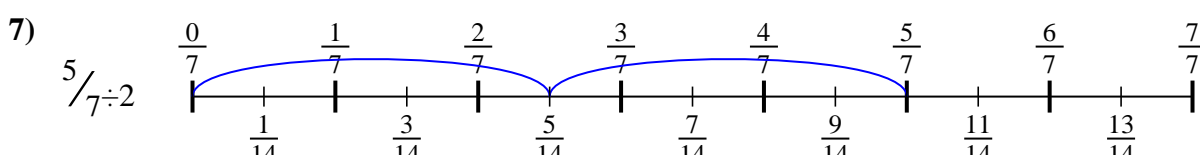
4. $\frac{5}{18}$



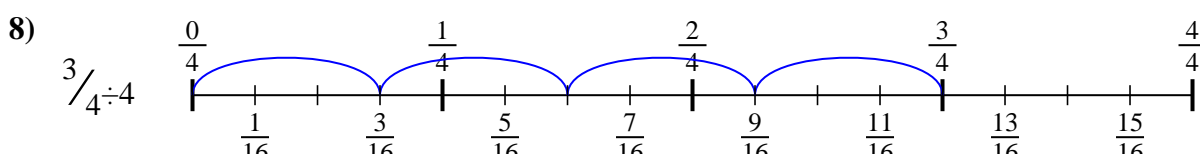
5. $\frac{2}{12}$



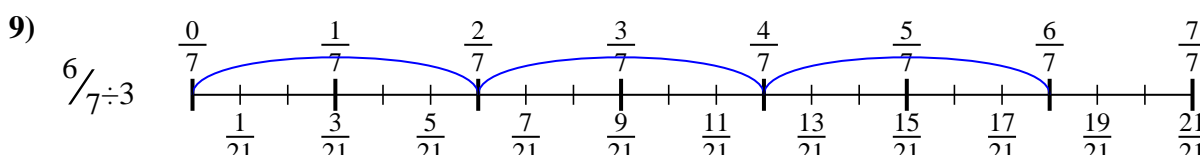
6. $\frac{3}{25}$



7. $\frac{5}{14}$



8. $\frac{3}{16}$



9. $\frac{6}{21}$



Usa la recta numérica para resolver cada problema. El primero ya está marcado como ejemplo.

Respuestas

$\frac{2}{12}$

$\frac{6}{21}$

$\frac{5}{14}$

$\frac{3}{24}$

$\frac{3}{25}$

$\frac{2}{8}$

$\frac{3}{16}$

$\frac{5}{18}$

$\frac{3}{8}$

1. _____

2. _____

3. _____

4. _____

5. _____

6. _____

7. _____

8. _____

9. _____

