




Usa la línea numérica para resolver cada problema. El primero ya está hecho como ejemplo

Respuestas



1. _____

2. _____



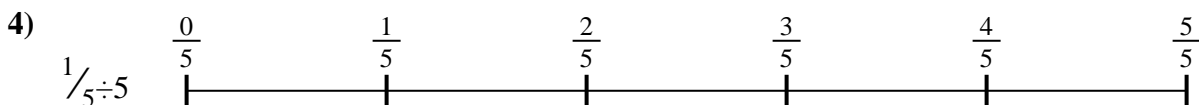
3. _____

4. _____



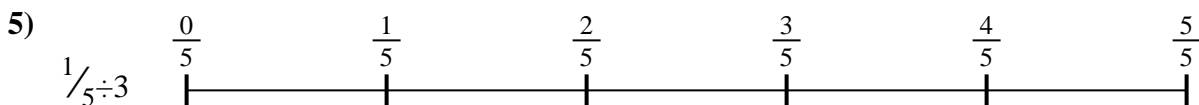
5. _____

6. _____

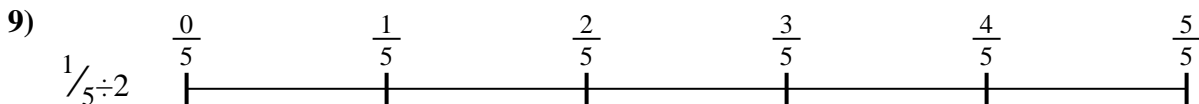
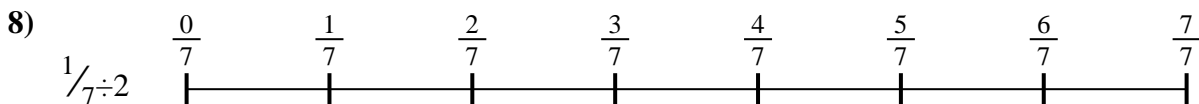



7. _____

8. _____



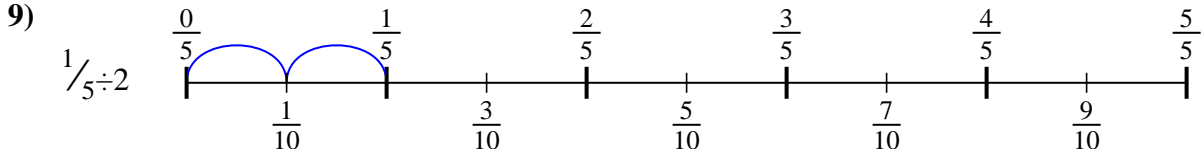
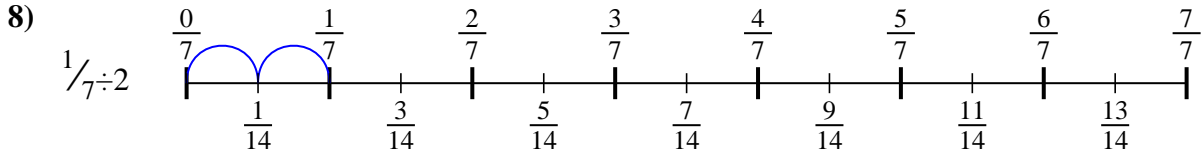
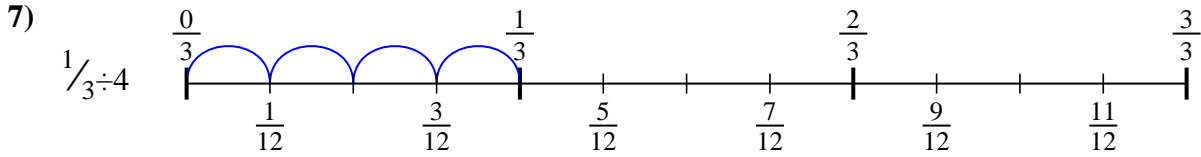
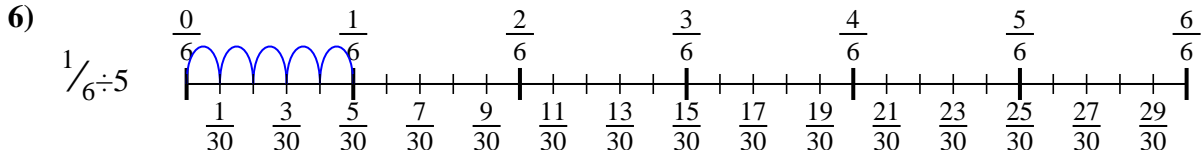
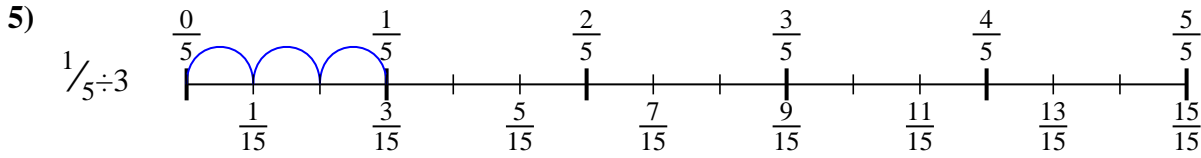
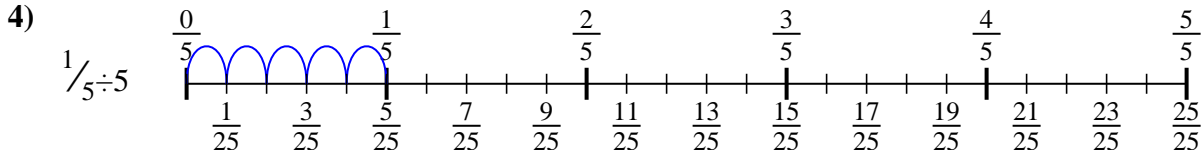
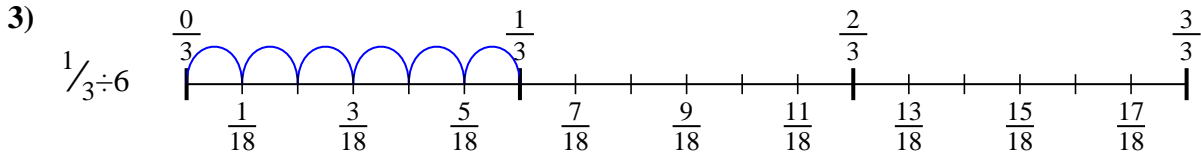
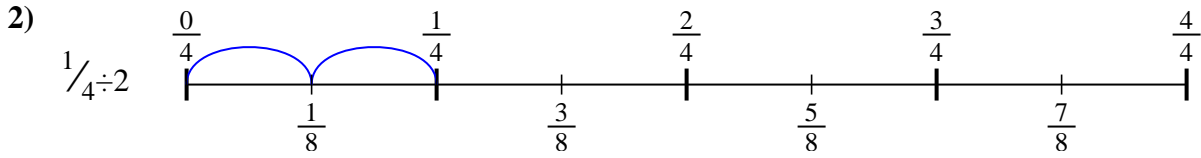
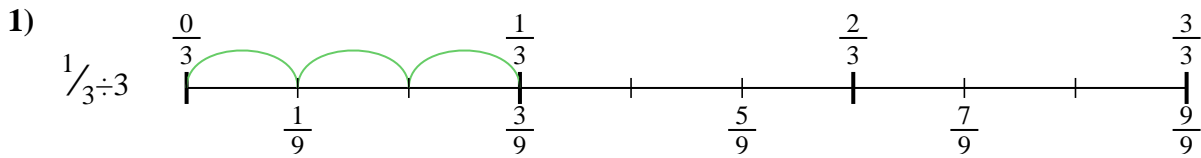
9. _____





Usa la línea numérica para resolver cada problema. El primero ya está hecho como ejemplo

Respuestas



1. $\frac{1}{9}$
2. $\frac{1}{8}$
3. $\frac{1}{18}$
4. $\frac{1}{25}$
5. $\frac{1}{15}$
6. $\frac{1}{30}$
7. $\frac{1}{12}$
8. $\frac{1}{14}$
9. $\frac{1}{10}$



Usa la línea numérica para resolver cada problema. El primero ya está hecho como ejemplo

Respuestas

$\frac{1}{14}$

$\frac{1}{9}$

$\frac{1}{30}$

$\frac{1}{10}$

$\frac{1}{18}$

$\frac{1}{8}$

$\frac{1}{25}$

$\frac{1}{15}$

$\frac{1}{12}$

1. _____

2. _____

3. _____

4. _____

5. _____

6. _____

7. _____

8. _____

9. _____

